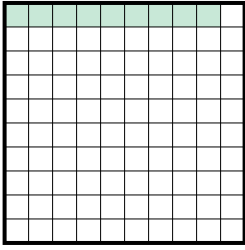




Determine the value written as a fraction , decimal & a percent.

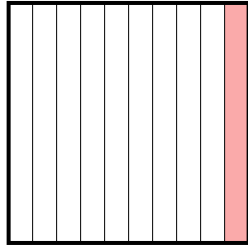
Answers

Ex)



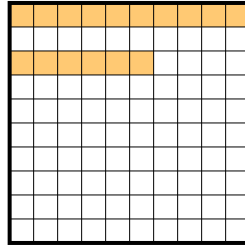
fraction $\frac{9}{100}$
decimal 0.09
percent 9

1)



fraction _____
decimal _____
percent _____

2)



fraction _____
decimal _____
percent _____

Ex. $\frac{9}{100}$ 0.09 9%

1. _____

2. _____

3. _____

4. _____

5. _____

6. _____

7. _____


8. _____

9. _____

10. _____

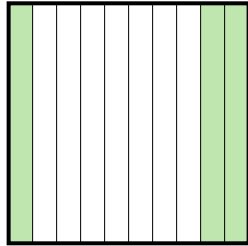
11. _____

3)




fraction _____
decimal _____
percent _____

4)



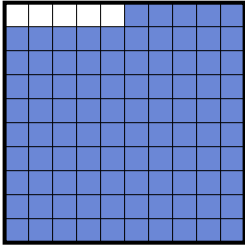
fraction _____
decimal _____
percent _____

5)



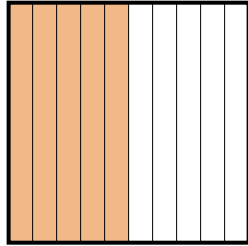
fraction _____
decimal _____
percent _____

6)



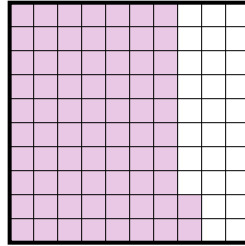
fraction _____
decimal _____
percent _____

7)



fraction _____
decimal _____
percent _____

8)




fraction _____
decimal _____
percent _____

9)




fraction _____
decimal _____
percent _____

10)



fraction _____
decimal _____
percent _____

11)

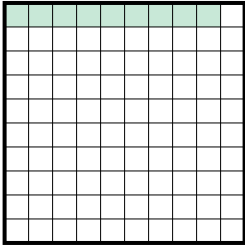


fraction _____
decimal _____
percent _____



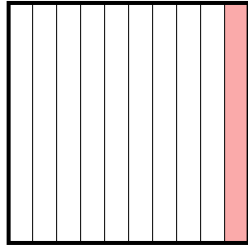
Determine the value written as a fraction , decimal & a percent.

Ex)



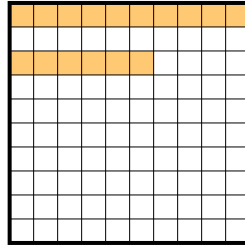
fraction $\frac{9}{100}$
 decimal 0.09
 percent 9

1)




fraction $\frac{1}{10}$
 decimal 0.1
 percent 10

2)



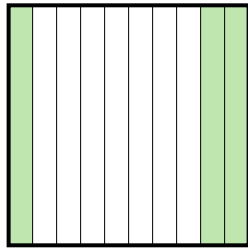
fraction $\frac{16}{100}$
 decimal 0.16
 percent 16

3)




fraction $\frac{7}{10}$
 decimal 0.7
 percent 70

4)



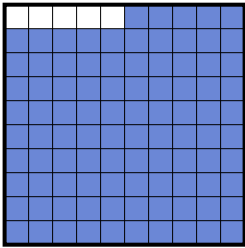
fraction $\frac{3}{10}$
 decimal 0.3
 percent 30

5)



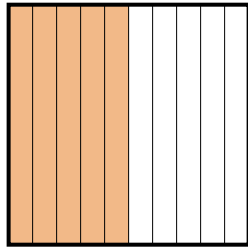
fraction $\frac{14}{100}$
 decimal 0.14
 percent 14

6)



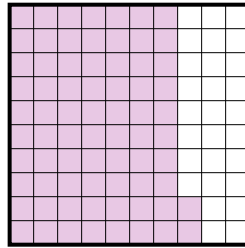
fraction $\frac{95}{100}$
 decimal 0.95
 percent 95

7)



fraction $\frac{5}{10}$
 decimal 0.5
 percent 50

8)




fraction $\frac{72}{100}$
 decimal 0.72
 percent 72

9)




fraction $\frac{4}{10}$
 decimal 0.4
 percent 40

10)



fraction $\frac{2}{10}$
 decimal 0.2
 percent 20

11)



fraction $\frac{6}{10}$
 decimal 0.6
 percent 60

Answers

Ex.	$\frac{9}{100}$	0.09	9%
1.	$\frac{1}{10}$	0.1	10%
2.	$\frac{16}{100}$	0.16	16%
3.	$\frac{7}{10}$	0.7	70%
4.	$\frac{3}{10}$	0.3	30%
5.	$\frac{14}{100}$	0.14	14%
6.	$\frac{95}{100}$	0.95	95%
7.	$\frac{5}{10}$	0.5	50%
8.	$\frac{72}{100}$	0.72	72%
9.	$\frac{4}{10}$	0.4	40%
10.	$\frac{2}{10}$	0.2	20%
11.	$\frac{6}{10}$	0.6	60%