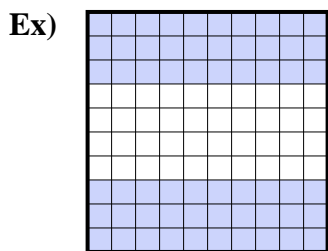
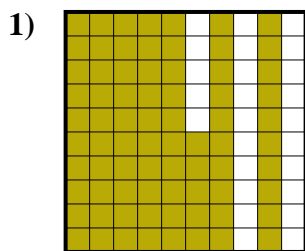




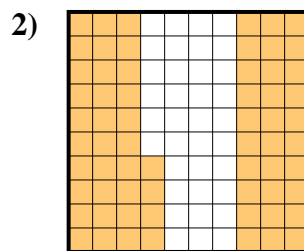
Determine the value written as a fraction , decimal & a percent.



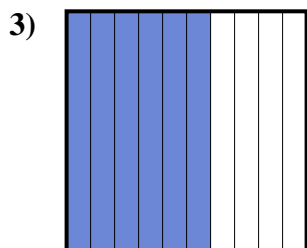
fraction $\frac{60}{100}$
 decimal 0.60
 percent 60



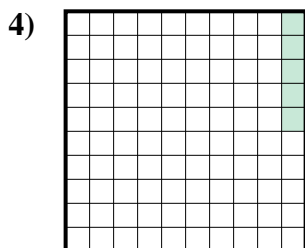
fraction $\frac{75}{100}$
 decimal 0.75
 percent 75



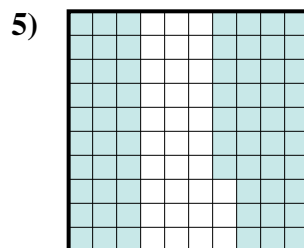
fraction $\frac{64}{100}$
 decimal 0.64
 percent 64



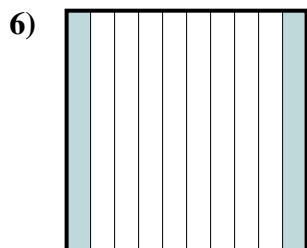
fraction $\frac{6}{10}$
 decimal 0.6
 percent 60



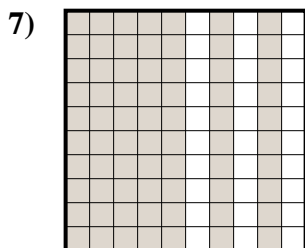
fraction $\frac{5}{100}$
 decimal 0.05
 percent 5



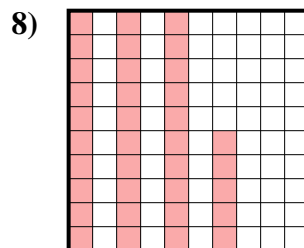
fraction $\frac{67}{100}$
 decimal 0.67
 percent 67



fraction $\frac{2}{10}$
 decimal 0.2
 percent 20



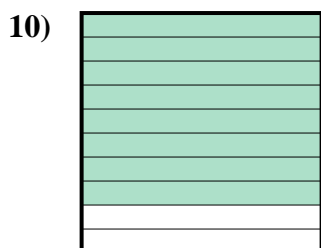
fraction $\frac{70}{100}$
 decimal 0.70
 percent 70



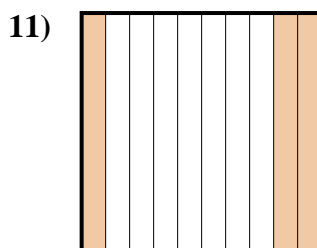
fraction $\frac{35}{100}$
 decimal 0.35
 percent 35



fraction $\frac{9}{10}$
 decimal 0.9
 percent 90



fraction $\frac{8}{10}$
 decimal 0.8
 percent 80



fraction $\frac{3}{10}$
 decimal 0.3
 percent 30

Answers

- Ex. $\frac{60}{100}$ **0.60** **60%**
 1. $\frac{75}{100}$ **0.75** **75%**
 2. $\frac{64}{100}$ **0.64** **64%**
 3. $\frac{6}{10}$ **0.6** **60%**
 4. $\frac{5}{100}$ **0.05** **5%**
 5. $\frac{67}{100}$ **0.67** **67%**
 6. $\frac{2}{10}$ **0.2** **20%**
 7. $\frac{70}{100}$ **0.70** **70%**
 8. $\frac{35}{100}$ **0.35** **35%**
 9. $\frac{9}{10}$ **0.9** **90%**
 10. $\frac{8}{10}$ **0.8** **80%**
 11. $\frac{3}{10}$ **0.3** **30%**