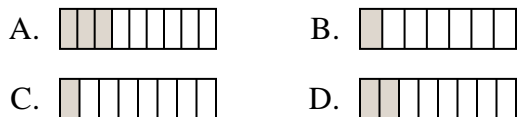




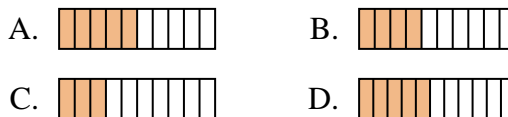
Determine which choice best answers each question.

Answers

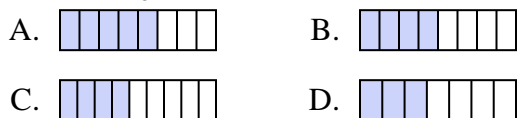
1) Which of the shapes below is shaded to represent $\frac{2}{8}$?



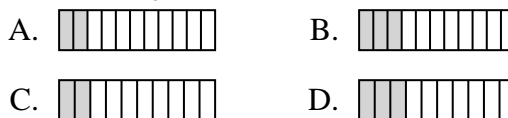
2) Which of the shapes below is shaded to represent $\frac{4}{10}$?



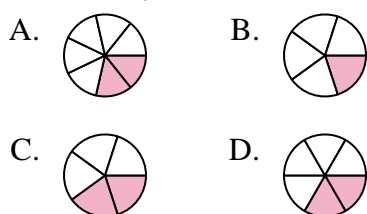
3) Which of the shapes below is shaded to represent $\frac{4}{8}$?



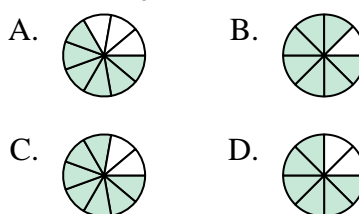
4) Which of the shapes below is shaded to represent $\frac{2}{10}$?



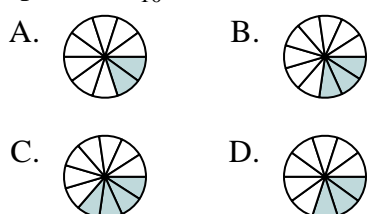
5) Which of the shapes below is shaded to represent $\frac{2}{6}$?



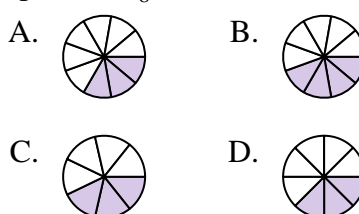
6) Which of the shapes below is shaded to represent $\frac{6}{8}$?



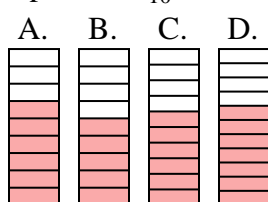
7) Which of the shapes below is shaded to represent $\frac{3}{10}$?



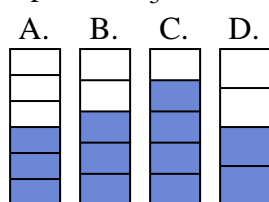
8) Which of the shapes below is shaded to represent $\frac{3}{8}$?



9) Which of the shapes below is shaded to represent $\frac{6}{10}$?



10) Which of the shapes below is shaded to represent $\frac{3}{5}$?

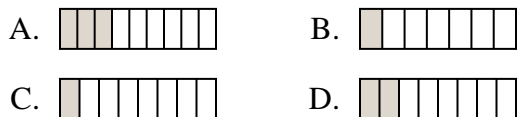


1. _____
2. _____
3. _____
4. _____
5. _____
6. _____
7. _____
8. _____
9. _____
10. _____

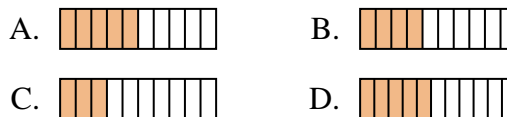


Determine which choice best answers each question.

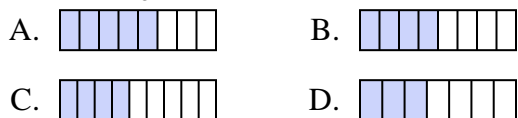
1) Which of the shapes below is shaded to represent $\frac{2}{8}$?



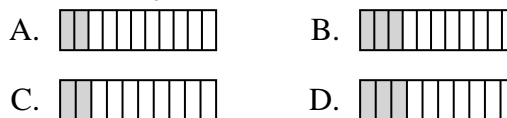
2) Which of the shapes below is shaded to represent $\frac{4}{10}$?



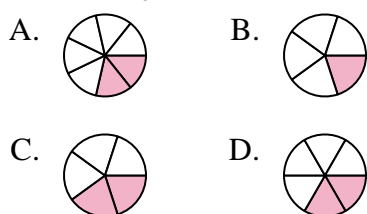
3) Which of the shapes below is shaded to represent $\frac{4}{8}$?



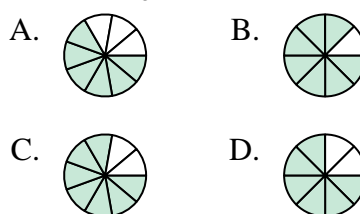
4) Which of the shapes below is shaded to represent $\frac{2}{10}$?



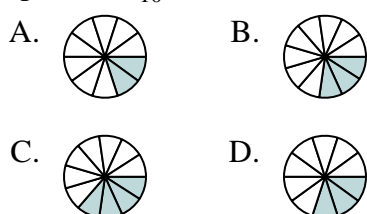
5) Which of the shapes below is shaded to represent $\frac{2}{6}$?



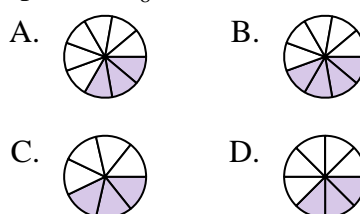
6) Which of the shapes below is shaded to represent $\frac{6}{8}$?



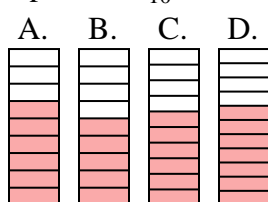
7) Which of the shapes below is shaded to represent $\frac{3}{10}$?



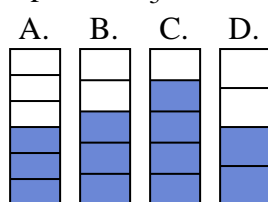
8) Which of the shapes below is shaded to represent $\frac{3}{8}$?



9) Which of the shapes below is shaded to represent $\frac{6}{10}$?



10) Which of the shapes below is shaded to represent $\frac{3}{5}$?



Answers

1. **D**
2. **B**
3. **B**
4. **C**
5. **D**
6. **D**
7. **D**
8. **D**
9. **C**
10. **B**