




Use the number line to solve each problem.

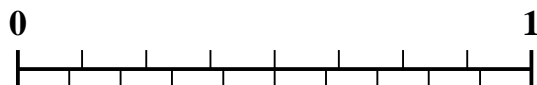
1) Which amount is larger, $\frac{2}{3}$ or 0.82?



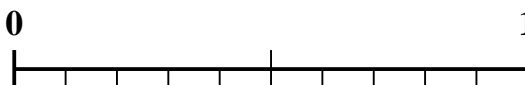
2) Which amount is larger, $\frac{4}{6}$ or 0.54?



3) Which amount is larger, $\frac{6}{8}$ or 0.62?



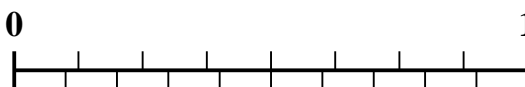
4) Which amount is larger, $\frac{1}{2}$ or 0.68?




5) Which amount is larger, $\frac{1}{9}$ or 0.26?



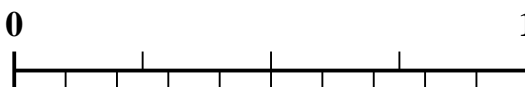
6) Which amount is larger, $\frac{3}{8}$ or 0.52?



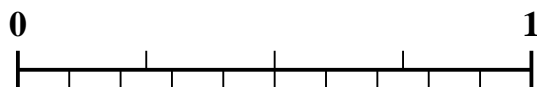
7) Which amount is larger, $\frac{2}{5}$ or 0.56?



8) Which amount is larger, $\frac{3}{4}$ or 0.86?



9) Which amount is larger, $\frac{1}{4}$ or 0.14?



10) Which amount is larger, $\frac{2}{4}$ or 0.68?



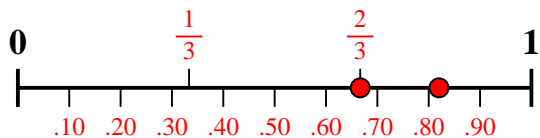
Answers

1. _____
2. _____
3. _____
4. _____
5. _____
6. _____
7. _____
8. _____
9. _____
10. _____

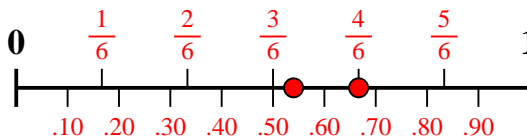


Use the number line to solve each problem.

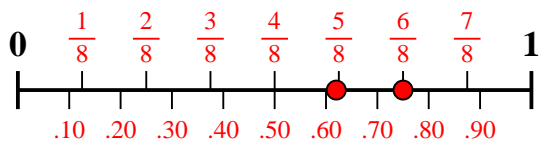
1) Which amount is larger, $\frac{2}{3}$ or 0.82?



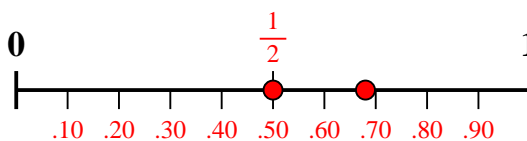
2) Which amount is larger, $\frac{4}{6}$ or 0.54?



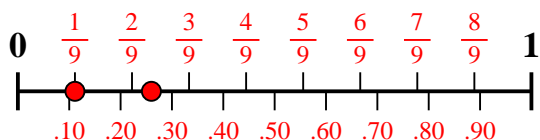
3) Which amount is larger, $\frac{6}{8}$ or 0.62?



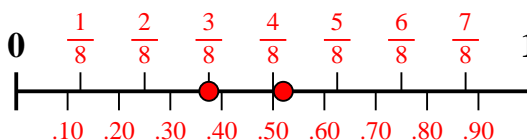
4) Which amount is larger, $\frac{1}{2}$ or 0.68?



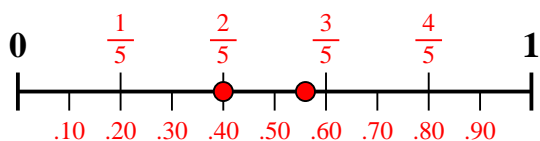
5) Which amount is larger, $\frac{1}{9}$ or 0.26?



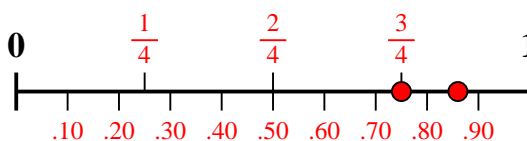
6) Which amount is larger, $\frac{3}{8}$ or 0.52?



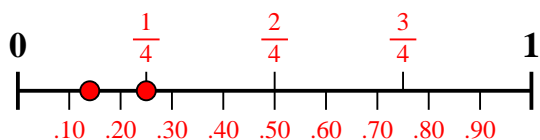
7) Which amount is larger, $\frac{2}{5}$ or 0.56?



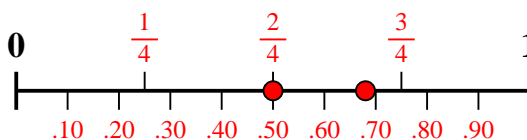
8) Which amount is larger, $\frac{3}{4}$ or 0.86?



9) Which amount is larger, $\frac{1}{4}$ or 0.14?



10) Which amount is larger, $\frac{2}{4}$ or 0.68?



Answers

1. 0.82
2. $\frac{4}{6}$
3. $\frac{6}{8}$
4. 0.68
5. 0.26
6. 0.52
7. 0.56
8. 0.86
9. $\frac{1}{4}$
10. 0.68