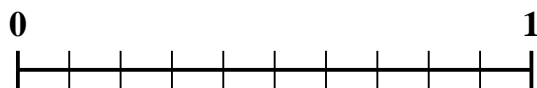


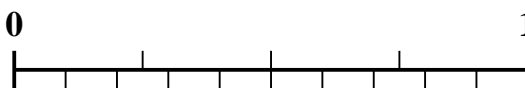


Use the number line to solve each problem.

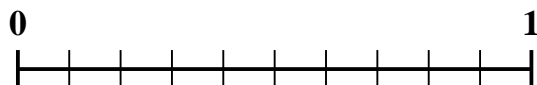
1) Which amount is larger,  $\frac{6}{10}$  or 0.47?



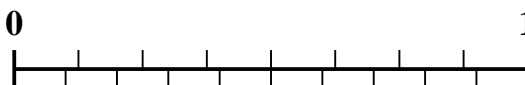
2) Which amount is larger,  $\frac{3}{4}$  or 0.89?




3) Which amount is larger,  $\frac{5}{10}$  or 0.6?



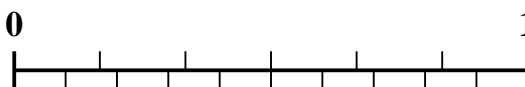
4) Which amount is larger,  $\frac{7}{8}$  or 0.78?




5) Which amount is larger,  $\frac{1}{3}$  or 0.19?



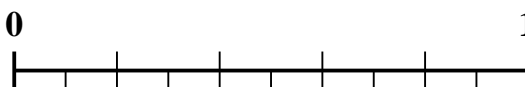
6) Which amount is larger,  $\frac{2}{6}$  or 0.44?




7) Which amount is larger,  $\frac{3}{5}$  or 0.43?



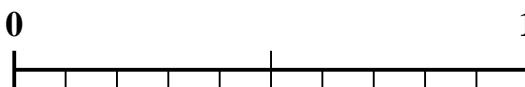
8) Which amount is larger,  $\frac{2}{5}$  or 0.56?



9) Which amount is larger,  $\frac{4}{5}$  or 0.69?



10) Which amount is larger,  $\frac{1}{2}$  or 0.6?



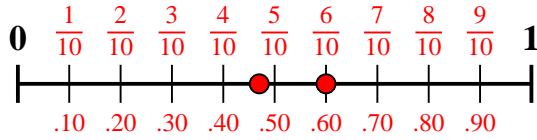
**Answers**

1. \_\_\_\_\_
2. \_\_\_\_\_
3. \_\_\_\_\_
4. \_\_\_\_\_
5. \_\_\_\_\_
6. \_\_\_\_\_
7. \_\_\_\_\_
8. \_\_\_\_\_
9. \_\_\_\_\_
10. \_\_\_\_\_

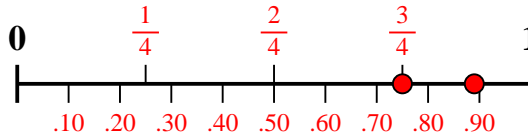


Use the number line to solve each problem.

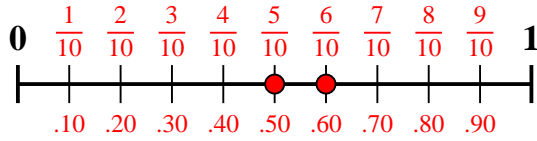
1) Which amount is larger,  $\frac{6}{10}$  or 0.47?



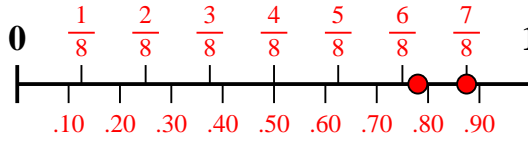
2) Which amount is larger,  $\frac{3}{4}$  or 0.89?



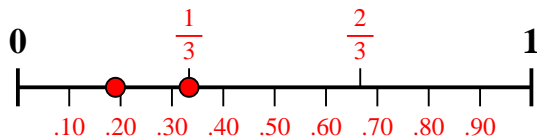
3) Which amount is larger,  $\frac{5}{10}$  or 0.6?



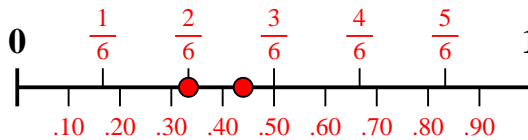
4) Which amount is larger,  $\frac{7}{8}$  or 0.78?



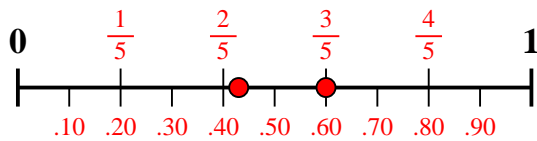
5) Which amount is larger,  $\frac{1}{3}$  or 0.19?



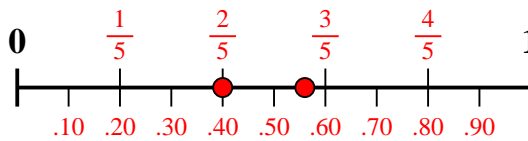
6) Which amount is larger,  $\frac{2}{6}$  or 0.44?



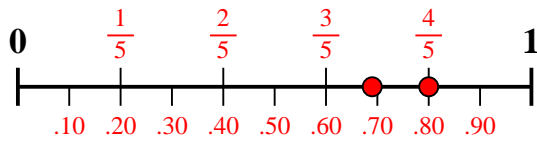
7) Which amount is larger,  $\frac{3}{5}$  or 0.43?



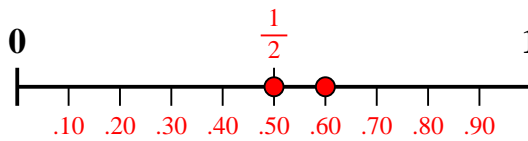
8) Which amount is larger,  $\frac{2}{5}$  or 0.56?



9) Which amount is larger,  $\frac{4}{5}$  or 0.69?



10) Which amount is larger,  $\frac{1}{2}$  or 0.6?



Answers

1.  $\frac{6}{10}$

2. **0.89**

3. **0.6**

4.  $\frac{7}{8}$

5.  $\frac{1}{3}$

6. **0.44**

7.  $\frac{3}{5}$

8. **0.56**

9.  $\frac{4}{5}$

10. **0.6**