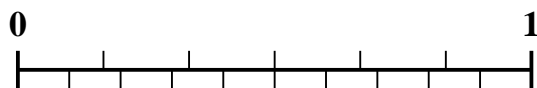


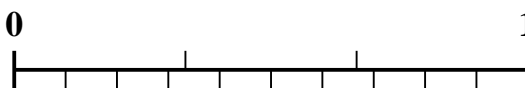


Use the number line to solve each problem.


1) Which amount is larger,  $\frac{2}{6}$  or 0.15?



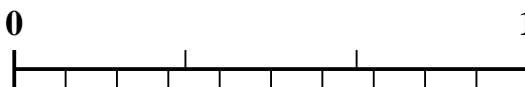
2) Which amount is larger,  $\frac{1}{3}$  or 0.52?



3) Which amount is larger,  $\frac{3}{5}$  or 0.48?



4) Which amount is larger,  $\frac{2}{3}$  or 0.87?



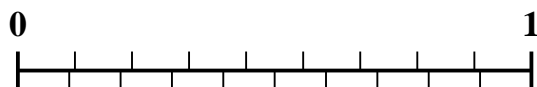
5) Which amount is larger,  $\frac{5}{7}$  or 0.57?



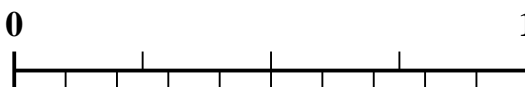
6) Which amount is larger,  $\frac{4}{7}$  or 0.75?



7) Which amount is larger,  $\frac{3}{9}$  or 0.15?



8) Which amount is larger,  $\frac{3}{4}$  or 0.9?



9) Which amount is larger,  $\frac{7}{9}$  or 0.89?



10) Which amount is larger,  $\frac{3}{10}$  or 0.15?



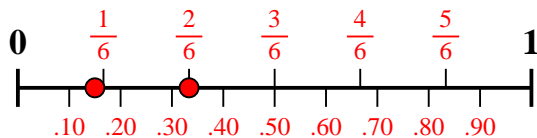
Answers

1. \_\_\_\_\_
2. \_\_\_\_\_
3. \_\_\_\_\_
4. \_\_\_\_\_
5. \_\_\_\_\_
6. \_\_\_\_\_
7. \_\_\_\_\_
8. \_\_\_\_\_
9. \_\_\_\_\_
10. \_\_\_\_\_

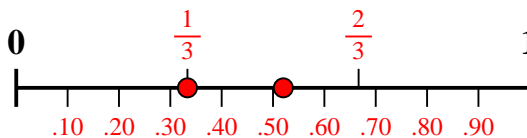


Use the number line to solve each problem.

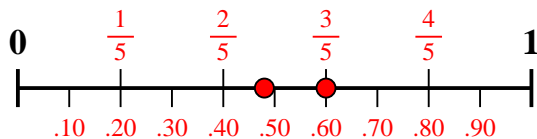
1) Which amount is larger,  $\frac{2}{6}$  or 0.15?



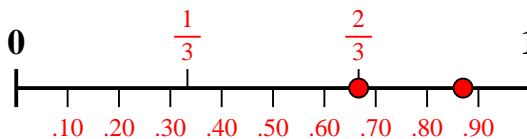
2) Which amount is larger,  $\frac{1}{3}$  or 0.52?



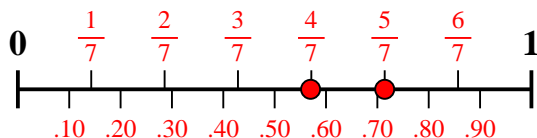
3) Which amount is larger,  $\frac{3}{5}$  or 0.48?



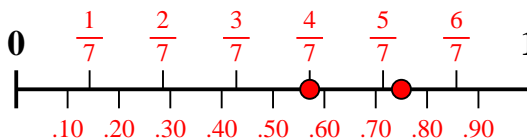
4) Which amount is larger,  $\frac{2}{3}$  or 0.87?



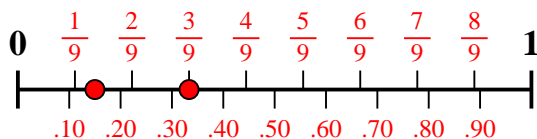
5) Which amount is larger,  $\frac{5}{7}$  or 0.57?



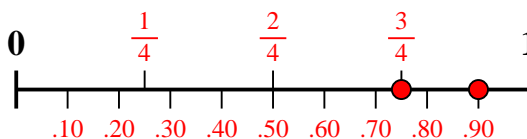
6) Which amount is larger,  $\frac{4}{7}$  or 0.75?



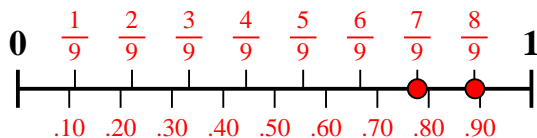
7) Which amount is larger,  $\frac{3}{9}$  or 0.15?



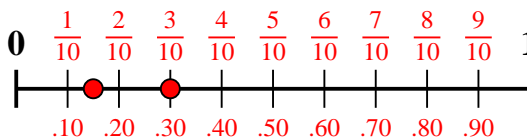
8) Which amount is larger,  $\frac{3}{4}$  or 0.9?



9) Which amount is larger,  $\frac{7}{9}$  or 0.89?



10) Which amount is larger,  $\frac{3}{10}$  or 0.15?



Answers

1.  $\frac{2}{6}$
2. **0.52**
3.  $\frac{3}{5}$
4. **0.87**
5.  $\frac{5}{7}$
6. **0.75**
7.  $\frac{3}{9}$
8. **0.9**
9. **0.89**
10.  $\frac{3}{10}$