



Match each equation to the answer and write the answer.


Answers

Ex) $\frac{1}{3} + \frac{1}{3}$




Ex. **M**

1) $\frac{1}{6} + \frac{1}{6}$




1. _____

2) $\frac{1}{12} + \frac{1}{12} + \frac{1}{12}$




2. _____

3) $\frac{1}{12} + \frac{1}{12} + \frac{1}{12} + \frac{1}{12} + \frac{1}{12} + \frac{1}{12}$




3. _____

4) $\frac{1}{10} + \frac{1}{10} + \frac{1}{10} + \frac{1}{10} + \frac{1}{10}$



4. _____

5) $\frac{1}{6} + \frac{1}{6} + \frac{1}{6}$



5. _____

6) $\frac{1}{8} + \frac{1}{8} + \frac{1}{8} + \frac{1}{8}$




6. _____

7) $\frac{1}{4} + \frac{1}{4} + \frac{1}{4}$




7. _____

8) $\frac{1}{10} + \frac{1}{10} + \frac{1}{10} + \frac{1}{10} + \frac{1}{10} + \frac{1}{10}$



8. _____

9) $\frac{1}{8} + \frac{1}{8} + \frac{1}{8} + \frac{1}{8} + \frac{1}{8} + \frac{1}{8}$




9. _____

10) $\frac{1}{10} + \frac{1}{10}$



10. _____

11) $\frac{1}{6} + \frac{1}{6} + \frac{1}{6} + \frac{1}{6} + \frac{1}{6}$



11. _____

12) $\frac{1}{5} + \frac{1}{5} + \frac{1}{5} + \frac{1}{5}$




12. _____

13) $\frac{1}{8} + \frac{1}{8} + \frac{1}{8}$



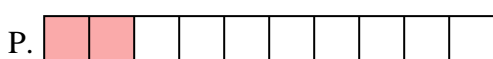
13. _____

14) $\frac{1}{8} + \frac{1}{8}$



14. _____

15) $\frac{1}{5} + \frac{1}{5} + \frac{1}{5}$



15. _____



Match each equation to the answer and write the answer.


Ex) $\frac{1}{3} + \frac{1}{3}$



Answers


Ex. **M**

1) $\frac{1}{6} + \frac{1}{6}$




1. **A**

2) $\frac{1}{12} + \frac{1}{12} + \frac{1}{12}$




2. **K**

3) $\frac{1}{12} + \frac{1}{12} + \frac{1}{12} + \frac{1}{12} + \frac{1}{12} + \frac{1}{12}$




3. **G**

4) $\frac{1}{10} + \frac{1}{10} + \frac{1}{10} + \frac{1}{10} + \frac{1}{10}$



4. **B**

5) $\frac{1}{6} + \frac{1}{6} + \frac{1}{6}$



5. **I**

6) $\frac{1}{8} + \frac{1}{8} + \frac{1}{8} + \frac{1}{8}$




6. **L**

7) $\frac{1}{4} + \frac{1}{4} + \frac{1}{4}$




7. **N**

8) $\frac{1}{10} + \frac{1}{10} + \frac{1}{10} + \frac{1}{10} + \frac{1}{10} + \frac{1}{10}$



8. **E**

9) $\frac{1}{8} + \frac{1}{8} + \frac{1}{8} + \frac{1}{8} + \frac{1}{8} + \frac{1}{8}$




9. **H**

10) $\frac{1}{10} + \frac{1}{10}$



10. **P**

11) $\frac{1}{6} + \frac{1}{6} + \frac{1}{6} + \frac{1}{6} + \frac{1}{6}$



11. **D**

12) $\frac{1}{5} + \frac{1}{5} + \frac{1}{5} + \frac{1}{5}$




12. **C**

13) $\frac{1}{8} + \frac{1}{8} + \frac{1}{8}$




13. **F**

14) $\frac{1}{8} + \frac{1}{8}$



14. **J**

15) $\frac{1}{5} + \frac{1}{5} + \frac{1}{5}$



15. **O**