




Match each equation to the answer and write the answer.


Answers

Ex) $\frac{1}{10} + \frac{1}{10}$




Ex. **G**

1) $\frac{1}{5} + \frac{1}{5} + \frac{1}{5}$




1. _____

2) $\frac{1}{10} + \frac{1}{10} + \frac{1}{10} + \frac{1}{10} + \frac{1}{10} + \frac{1}{10}$




2. _____

3) $\frac{1}{8} + \frac{1}{8} + \frac{1}{8}$




3. _____

4) $\frac{1}{6} + \frac{1}{6} + \frac{1}{6} + \frac{1}{6} + \frac{1}{6}$



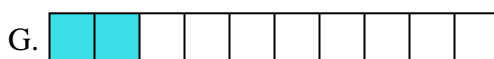
4. _____

5) $\frac{1}{4} + \frac{1}{4}$



6. _____

6) $\frac{1}{3} + \frac{1}{3}$




7. _____

7) $\frac{1}{12} + \frac{1}{12} + \frac{1}{12} + \frac{1}{12} + \frac{1}{12}$



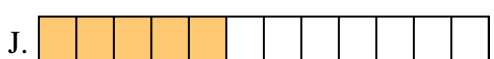
8. _____

8) $\frac{1}{10} + \frac{1}{10} + \frac{1}{10} + \frac{1}{10} + \frac{1}{10} + \frac{1}{10} + \frac{1}{10}$



9. _____

9) $\frac{1}{8} + \frac{1}{8}$



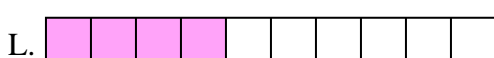
10. _____

10) $\frac{1}{10} + \frac{1}{10} + \frac{1}{10} + \frac{1}{10}$




11. _____

11) $\frac{1}{10} + \frac{1}{10} + \frac{1}{10} + \frac{1}{10} + \frac{1}{10}$




12. _____

12) $\frac{1}{5} + \frac{1}{5} + \frac{1}{5} + \frac{1}{5}$



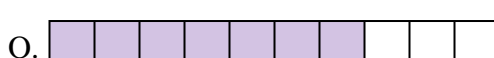
13. _____

13) $\frac{1}{4} + \frac{1}{4} + \frac{1}{4}$




14. _____

14) $\frac{1}{6} + \frac{1}{6} + \frac{1}{6} + \frac{1}{6}$



15. _____

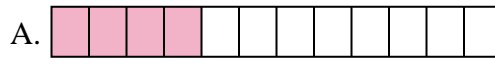
15) $\frac{1}{12} + \frac{1}{12} + \frac{1}{12} + \frac{1}{12}$





Match each equation to the answer and write the answer.

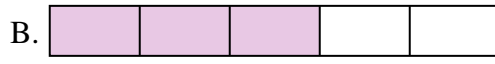
Ex) $\frac{1}{10} + \frac{1}{10}$



Answers

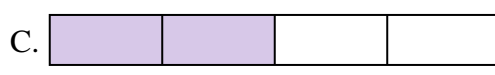
Ex. **G**

1) $\frac{1}{5} + \frac{1}{5} + \frac{1}{5}$



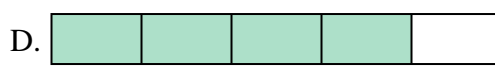
1. **B**

2) $\frac{1}{10} + \frac{1}{10} + \frac{1}{10} + \frac{1}{10} + \frac{1}{10} + \frac{1}{10}$



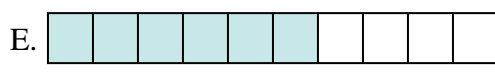
2. **E**

3) $\frac{1}{8} + \frac{1}{8} + \frac{1}{8}$



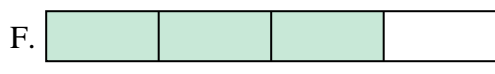
3. **N**

4) $\frac{1}{6} + \frac{1}{6} + \frac{1}{6} + \frac{1}{6} + \frac{1}{6}$



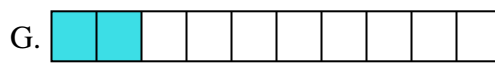
4. **I**

5) $\frac{1}{4} + \frac{1}{4}$



5. **C**

6) $\frac{1}{3} + \frac{1}{3}$



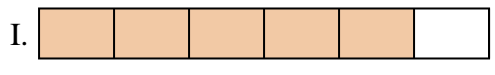
6. **H**

7) $\frac{1}{12} + \frac{1}{12} + \frac{1}{12} + \frac{1}{12} + \frac{1}{12}$



7. **J**

8) $\frac{1}{10} + \frac{1}{10} + \frac{1}{10} + \frac{1}{10} + \frac{1}{10} + \frac{1}{10} + \frac{1}{10}$



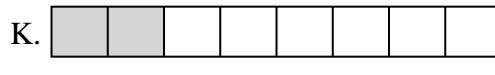
8. **O**

9) $\frac{1}{8} + \frac{1}{8}$



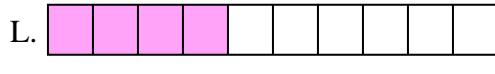
9. **K**

10) $\frac{1}{10} + \frac{1}{10} + \frac{1}{10} + \frac{1}{10}$



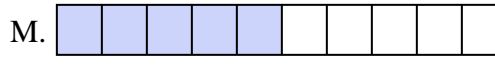
10. **L**

11) $\frac{1}{10} + \frac{1}{10} + \frac{1}{10} + \frac{1}{10} + \frac{1}{10}$



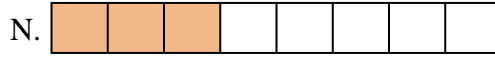
11. **M**

12) $\frac{1}{5} + \frac{1}{5} + \frac{1}{5} + \frac{1}{5}$



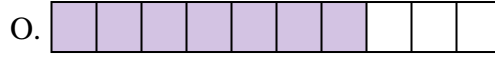
12. **D**

13) $\frac{1}{4} + \frac{1}{4} + \frac{1}{4}$



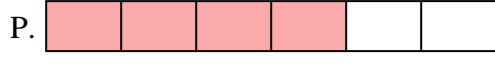
13. **F**

14) $\frac{1}{6} + \frac{1}{6} + \frac{1}{6} + \frac{1}{6}$



14. **P**

15) $\frac{1}{12} + \frac{1}{12} + \frac{1}{12} + \frac{1}{12}$



15. **A**