




Match each equation to the answer and write the answer.

Answers

Ex) $\frac{1}{4} + \frac{1}{4} + \frac{1}{4}$



Ex. **N**

1) $\frac{1}{8} + \frac{1}{8} + \frac{1}{8} + \frac{1}{8} + \frac{1}{8} + \frac{1}{8} + \frac{1}{8}$



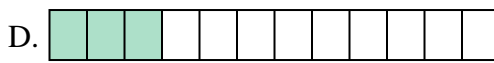
1. _____

2) $\frac{1}{10} + \frac{1}{10} + \frac{1}{10}$




2. _____

3) $\frac{1}{6} + \frac{1}{6} + \frac{1}{6} + \frac{1}{6}$



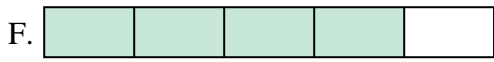
3. _____

4) $\frac{1}{10} + \frac{1}{10} + \frac{1}{10} + \frac{1}{10} + \frac{1}{10} + \frac{1}{10} + \frac{1}{10}$



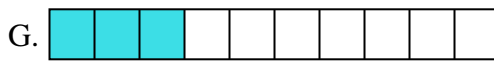
5. _____

5) $\frac{1}{8} + \frac{1}{8} + \frac{1}{8}$



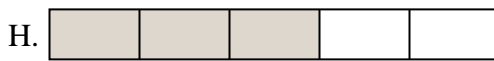
6. _____

6) $\frac{1}{12} + \frac{1}{12} + \frac{1}{12} + \frac{1}{12} + \frac{1}{12} + \frac{1}{12}$



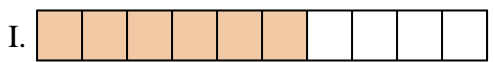
7. _____

7) $\frac{1}{5} + \frac{1}{5} + \frac{1}{5}$




8. _____

8) $\frac{1}{3} + \frac{1}{3}$




9. _____

9) $\frac{1}{5} + \frac{1}{5} + \frac{1}{5} + \frac{1}{5}$




10. _____

10) $\frac{1}{12} + \frac{1}{12} + \frac{1}{12}$




11. _____

11) $\frac{1}{10} + \frac{1}{10} + \frac{1}{10} + \frac{1}{10} + \frac{1}{10} + \frac{1}{10}$



12. _____

12) $\frac{1}{12} + \frac{1}{12}$



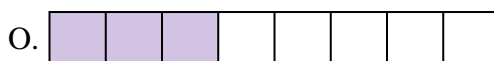
13. _____

13) $\frac{1}{10} + \frac{1}{10}$



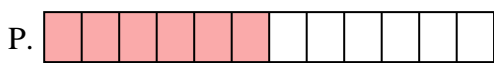
14. _____

14) $\frac{1}{6} + \frac{1}{6} + \frac{1}{6}$



15. _____

15) $\frac{1}{8} + \frac{1}{8} + \frac{1}{8} + \frac{1}{8} + \frac{1}{8} + \frac{1}{8}$






Match each equation to the answer and write the answer.

Answers

Ex) $\frac{1}{4} + \frac{1}{4} + \frac{1}{4}$



Ex. **N**

1) $\frac{1}{8} + \frac{1}{8} + \frac{1}{8} + \frac{1}{8} + \frac{1}{8} + \frac{1}{8} + \frac{1}{8}$



1. **J**

2) $\frac{1}{10} + \frac{1}{10} + \frac{1}{10}$



2. **G**

3) $\frac{1}{6} + \frac{1}{6} + \frac{1}{6} + \frac{1}{6}$




3. **E**

4) $\frac{1}{10} + \frac{1}{10} + \frac{1}{10} + \frac{1}{10} + \frac{1}{10} + \frac{1}{10} + \frac{1}{10}$



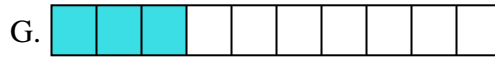
5. **O**

5) $\frac{1}{8} + \frac{1}{8} + \frac{1}{8}$



6. **P**

6) $\frac{1}{12} + \frac{1}{12} + \frac{1}{12} + \frac{1}{12} + \frac{1}{12} + \frac{1}{12}$



7. **H**

7) $\frac{1}{5} + \frac{1}{5} + \frac{1}{5}$



8. **C**

8) $\frac{1}{3} + \frac{1}{3}$



9. **F**

9) $\frac{1}{5} + \frac{1}{5} + \frac{1}{5} + \frac{1}{5}$



10. **D**

10) $\frac{1}{12} + \frac{1}{12} + \frac{1}{12}$



11. **I**

11) $\frac{1}{10} + \frac{1}{10} + \frac{1}{10} + \frac{1}{10} + \frac{1}{10} + \frac{1}{10}$



12. **M**

12) $\frac{1}{12} + \frac{1}{12}$




13. **B**

13) $\frac{1}{10} + \frac{1}{10}$



14. **L**

14) $\frac{1}{6} + \frac{1}{6} + \frac{1}{6}$



15. **A**

15) $\frac{1}{8} + \frac{1}{8} + \frac{1}{8} + \frac{1}{8} + \frac{1}{8} + \frac{1}{8}$

