




Match each equation to the answer and write the answer.

**Answers**

Ex)  $\frac{1}{5} + \frac{1}{5}$



Ex.         **G**        

1)  $\frac{1}{10} + \frac{1}{10}$



1. \_\_\_\_\_

2)  $\frac{1}{5} + \frac{1}{5} + \frac{1}{5}$



2. \_\_\_\_\_

3)  $\frac{1}{3} + \frac{1}{3}$




3. \_\_\_\_\_

4)  $\frac{1}{12} + \frac{1}{12}$



4. \_\_\_\_\_

5)  $\frac{1}{12} + \frac{1}{12} + \frac{1}{12} + \frac{1}{12}$



5. \_\_\_\_\_

6)  $\frac{1}{4} + \frac{1}{4}$



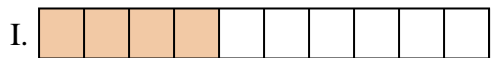
6. \_\_\_\_\_

7)  $\frac{1}{6} + \frac{1}{6}$



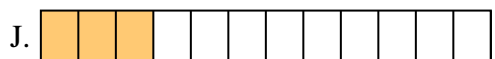
7. \_\_\_\_\_

8)  $\frac{1}{4} + \frac{1}{4} + \frac{1}{4}$



8. \_\_\_\_\_

9)  $\frac{1}{10} + \frac{1}{10} + \frac{1}{10} + \frac{1}{10}$




9. \_\_\_\_\_

10)  $\frac{1}{6} + \frac{1}{6} + \frac{1}{6} + \frac{1}{6} + \frac{1}{6}$



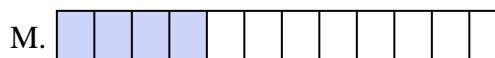
10. \_\_\_\_\_

11)  $\frac{1}{8} + \frac{1}{8} + \frac{1}{8} + \frac{1}{8}$




11. \_\_\_\_\_

12)  $\frac{1}{12} + \frac{1}{12} + \frac{1}{12}$




12. \_\_\_\_\_

13)  $\frac{1}{8} + \frac{1}{8}$




13. \_\_\_\_\_

14)  $\frac{1}{6} + \frac{1}{6} + \frac{1}{6} + \frac{1}{6}$



14. \_\_\_\_\_

15)  $\frac{1}{8} + \frac{1}{8} + \frac{1}{8} + \frac{1}{8} + \frac{1}{8}$



15. \_\_\_\_\_



Match each equation to the answer and write the answer.

Ex)  $\frac{1}{5} + \frac{1}{5}$




1)  $\frac{1}{10} + \frac{1}{10}$




2)  $\frac{1}{5} + \frac{1}{5} + \frac{1}{5}$



3)  $\frac{1}{3} + \frac{1}{3}$



4)  $\frac{1}{12} + \frac{1}{12}$



5)  $\frac{1}{12} + \frac{1}{12} + \frac{1}{12} + \frac{1}{12}$



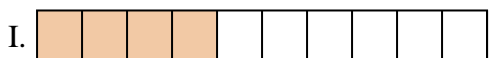
6)  $\frac{1}{4} + \frac{1}{4}$



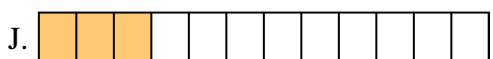
7)  $\frac{1}{6} + \frac{1}{6}$



8)  $\frac{1}{4} + \frac{1}{4} + \frac{1}{4}$




9)  $\frac{1}{10} + \frac{1}{10} + \frac{1}{10} + \frac{1}{10}$



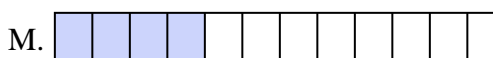
10)  $\frac{1}{6} + \frac{1}{6} + \frac{1}{6} + \frac{1}{6} + \frac{1}{6}$



11)  $\frac{1}{8} + \frac{1}{8} + \frac{1}{8} + \frac{1}{8}$




12)  $\frac{1}{12} + \frac{1}{12} + \frac{1}{12}$




13)  $\frac{1}{8} + \frac{1}{8}$



14)  $\frac{1}{6} + \frac{1}{6} + \frac{1}{6} + \frac{1}{6}$



15)  $\frac{1}{8} + \frac{1}{8} + \frac{1}{8} + \frac{1}{8} + \frac{1}{8}$



Answers

Ex.     **G**    

1.     **E**    

2.     **O**    

3.     **K**    

4.     **F**    

5.     **M**    

6.     **D**    

7.     **A**    

8.     **P**    

9.     **I**    

10.     **B**    

11.     **C**    

12.     **J**    

13.     **N**    

14.     **L**    

15.     **H**