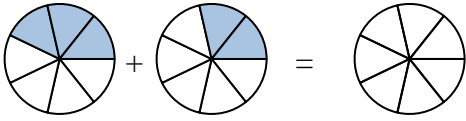




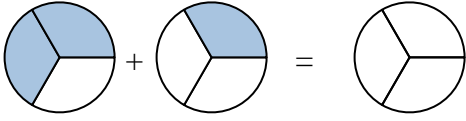
Shade in the fraction to solve the problem.

Ex)



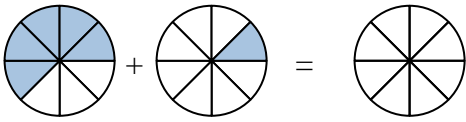
Ex.  $\frac{3}{7}$     $\frac{2}{7}$     $\frac{5}{7}$

1)



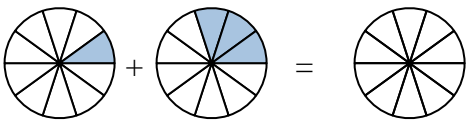
1. \_\_\_\_\_

2)



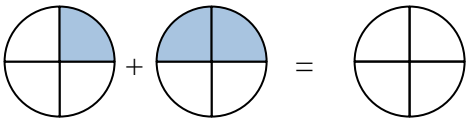
2. \_\_\_\_\_

3)



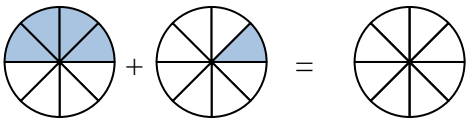
3. \_\_\_\_\_

4)



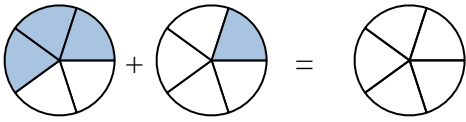
4. \_\_\_\_\_

5)



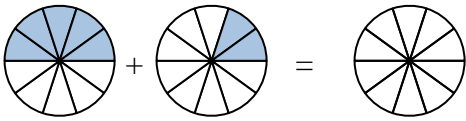
5. \_\_\_\_\_

6)



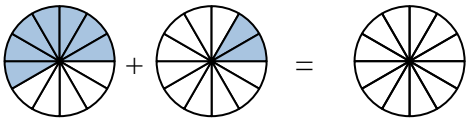
6. \_\_\_\_\_

7)



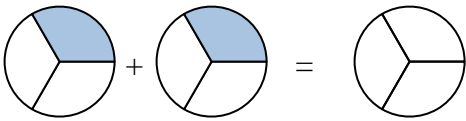
7. \_\_\_\_\_

8)



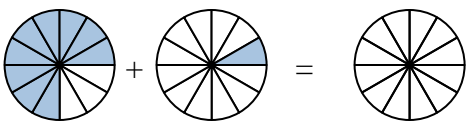
8. \_\_\_\_\_

9)



9. \_\_\_\_\_

10)

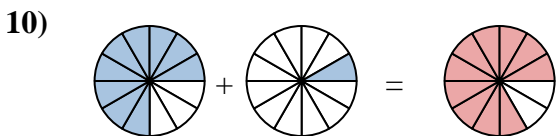
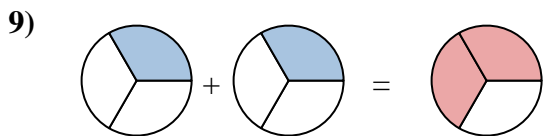
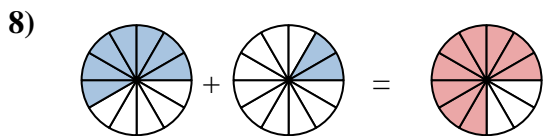
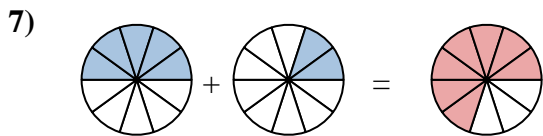
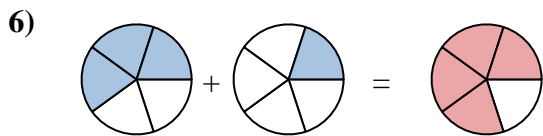
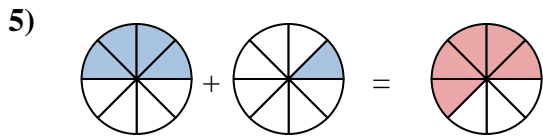
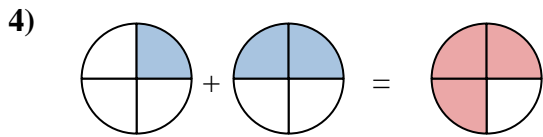
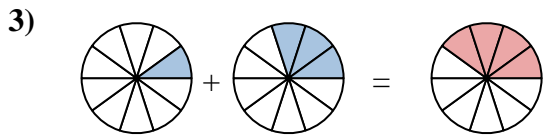
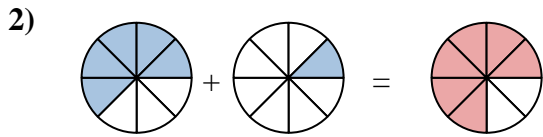
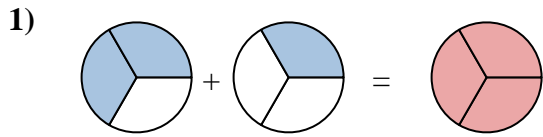


10. \_\_\_\_\_

**Answers**



Shade in the fraction to solve the problem.



**Answers**

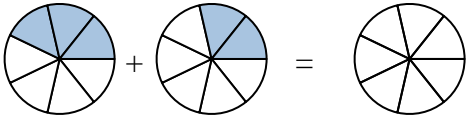
Ex.	$\frac{3}{7}$	$\frac{2}{7}$	$\frac{5}{7}$
1.	$\frac{2}{3}$	$\frac{1}{3}$	$\frac{3}{3}$
2.	$\frac{5}{8}$	$\frac{1}{8}$	$\frac{6}{8}$
3.	$\frac{1}{10}$	$\frac{3}{10}$	$\frac{4}{10}$
4.	$\frac{1}{4}$	$\frac{2}{4}$	$\frac{3}{4}$
5.	$\frac{4}{8}$	$\frac{1}{8}$	$\frac{5}{8}$
6.	$\frac{3}{5}$	$\frac{1}{5}$	$\frac{4}{5}$
7.	$\frac{5}{10}$	$\frac{2}{10}$	$\frac{7}{10}$
8.	$\frac{7}{12}$	$\frac{2}{12}$	$\frac{9}{12}$
9.	$\frac{1}{3}$	$\frac{1}{3}$	$\frac{2}{3}$
10.	$\frac{9}{12}$	$\frac{1}{12}$	$\frac{10}{12}$



Shade in the fraction to solve the problem.

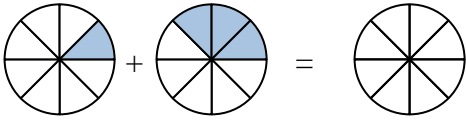
Answers

Ex)



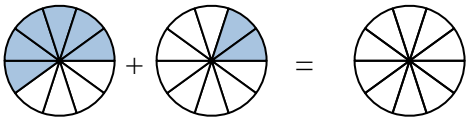
Ex.  $\frac{3}{7}$      $\frac{2}{7}$      $\frac{5}{7}$

1)



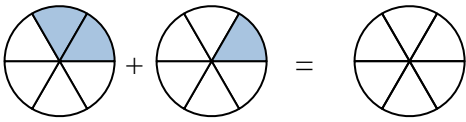
1. \_\_\_\_\_

2)



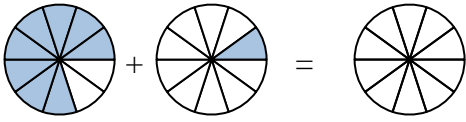
2. \_\_\_\_\_

3)



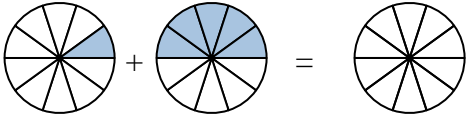
3. \_\_\_\_\_

4)



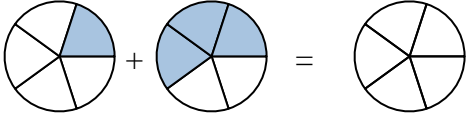
4. \_\_\_\_\_

5)



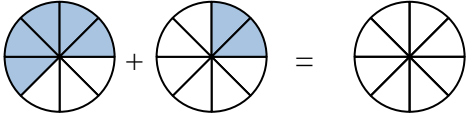
5. \_\_\_\_\_

6)



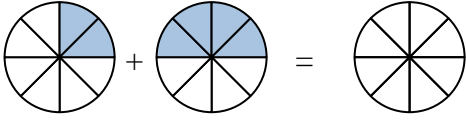
6. \_\_\_\_\_

7)



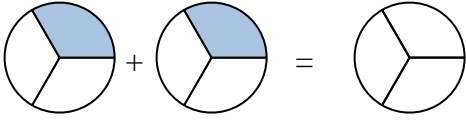
7. \_\_\_\_\_

8)



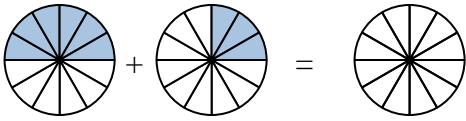
8. \_\_\_\_\_

9)



9. \_\_\_\_\_

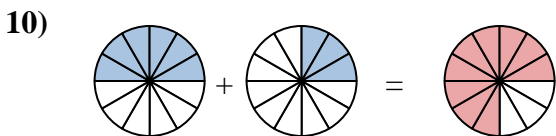
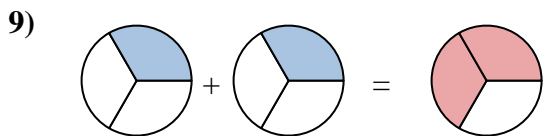
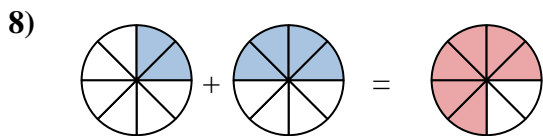
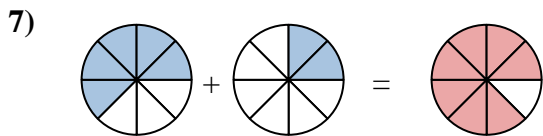
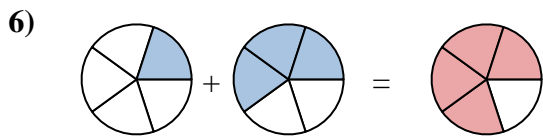
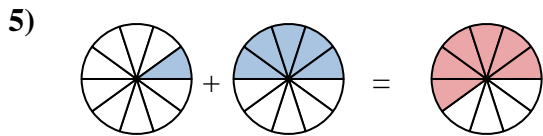
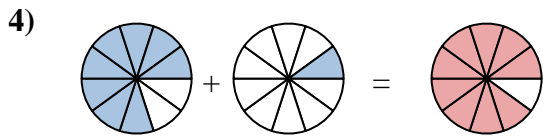
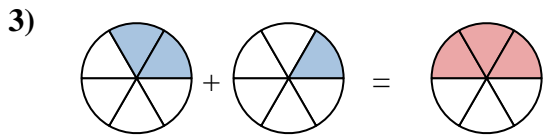
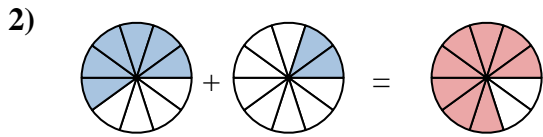
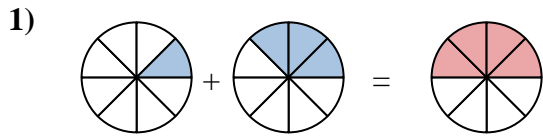
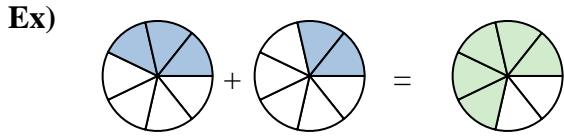
10)



10. \_\_\_\_\_



Shade in the fraction to solve the problem.



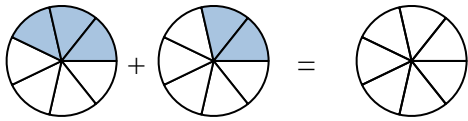
**Answers**

Ex.	$\frac{3}{7}$	$\frac{2}{7}$	$\frac{5}{7}$
1.	$\frac{1}{8}$	$\frac{3}{8}$	$\frac{4}{8}$
2.	$\frac{6}{10}$	$\frac{2}{10}$	$\frac{8}{10}$
3.	$\frac{2}{6}$	$\frac{1}{6}$	$\frac{3}{6}$
4.	$\frac{8}{10}$	$\frac{1}{10}$	$\frac{9}{10}$
5.	$\frac{1}{10}$	$\frac{5}{10}$	$\frac{6}{10}$
6.	$\frac{1}{5}$	$\frac{3}{5}$	$\frac{4}{5}$
7.	$\frac{5}{8}$	$\frac{2}{8}$	$\frac{7}{8}$
8.	$\frac{2}{8}$	$\frac{4}{8}$	$\frac{6}{8}$
9.	$\frac{1}{3}$	$\frac{1}{3}$	$\frac{2}{3}$
10.	$\frac{6}{12}$	$\frac{3}{12}$	$\frac{9}{12}$



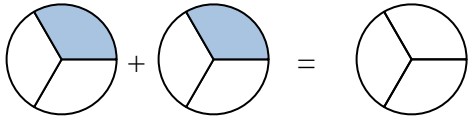
Shade in the fraction to solve the problem.

Ex)



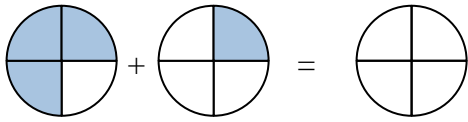
Ex.  $\frac{3}{7}$      $\frac{2}{7}$      $\frac{5}{7}$

1)



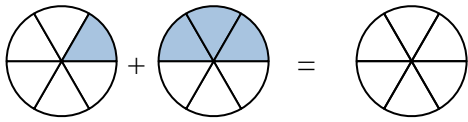
1. \_\_\_\_\_

2)



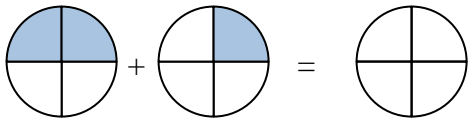
2. \_\_\_\_\_

3)



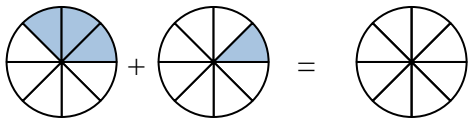
3. \_\_\_\_\_

4)



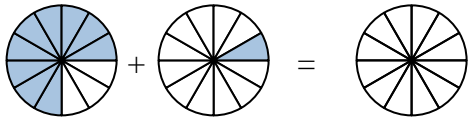
4. \_\_\_\_\_

5)



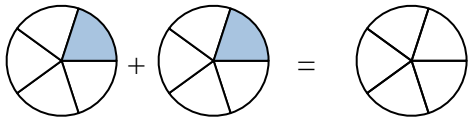
5. \_\_\_\_\_

6)



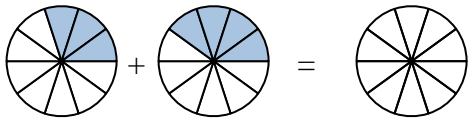
6. \_\_\_\_\_

7)



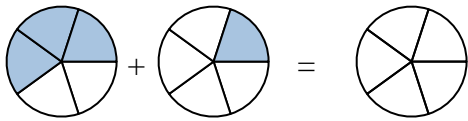
7. \_\_\_\_\_

8)



8. \_\_\_\_\_

9)



9. \_\_\_\_\_

10)

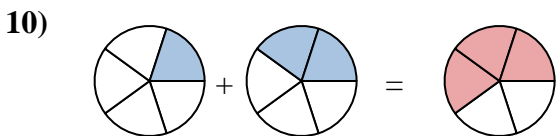
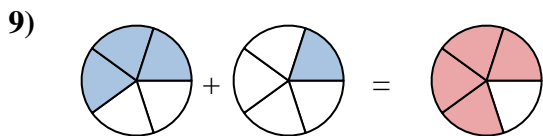
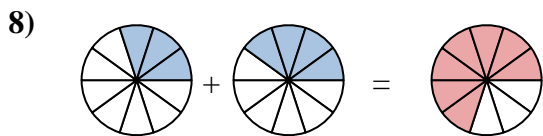
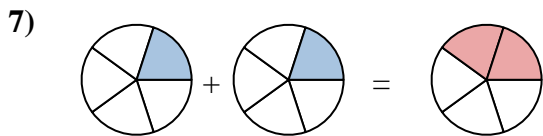
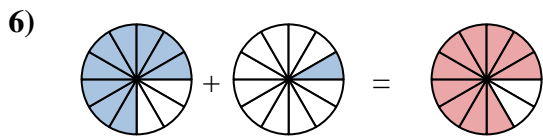
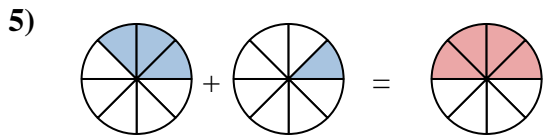
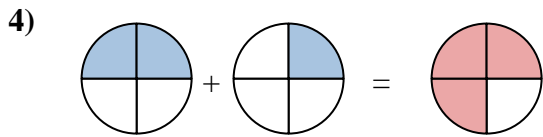
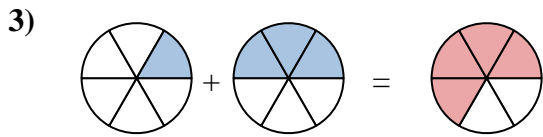
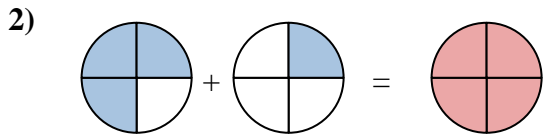
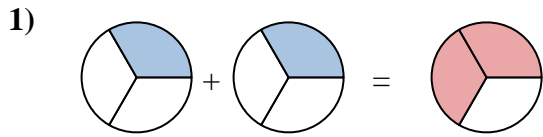
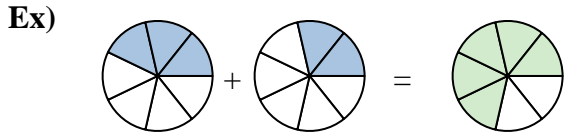


10. \_\_\_\_\_

**Answers**



Shade in the fraction to solve the problem.



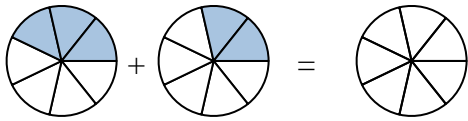
**Answers**

Ex.	$\frac{3}{7}$	$\frac{2}{7}$	$\frac{5}{7}$
1.	$\frac{1}{3}$	$\frac{1}{3}$	$\frac{2}{3}$
2.	$\frac{3}{4}$	$\frac{1}{4}$	$\frac{4}{4}$
3.	$\frac{1}{6}$	$\frac{3}{6}$	$\frac{4}{6}$
4.	$\frac{2}{4}$	$\frac{1}{4}$	$\frac{3}{4}$
5.	$\frac{3}{8}$	$\frac{1}{8}$	$\frac{4}{8}$
6.	$\frac{9}{12}$	$\frac{1}{12}$	$\frac{10}{12}$
7.	$\frac{1}{5}$	$\frac{1}{5}$	$\frac{2}{5}$
8.	$\frac{3}{10}$	$\frac{4}{10}$	$\frac{7}{10}$
9.	$\frac{3}{5}$	$\frac{1}{5}$	$\frac{4}{5}$
10.	$\frac{1}{5}$	$\frac{2}{5}$	$\frac{3}{5}$



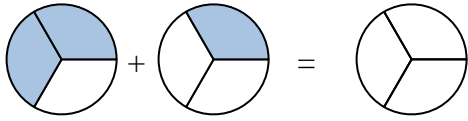
Shade in the fraction to solve the problem.

Ex)



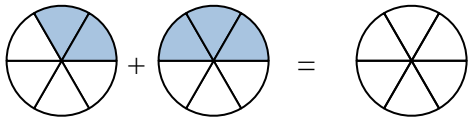
Ex.  $\frac{3}{7}$     $\frac{2}{7}$     $\frac{5}{7}$

1)



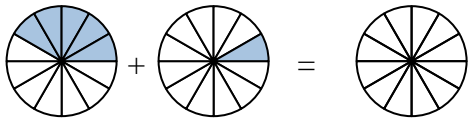
1. \_\_\_\_\_

2)



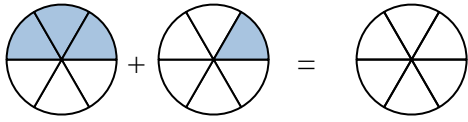
2. \_\_\_\_\_

3)



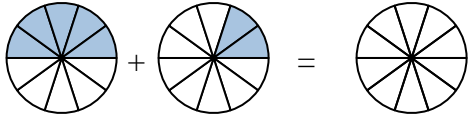
3. \_\_\_\_\_

4)



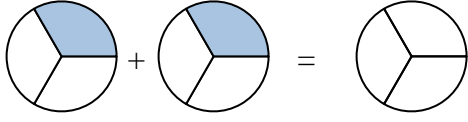
4. \_\_\_\_\_

5)



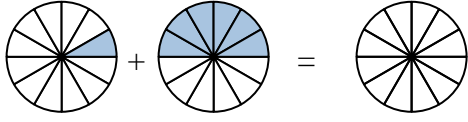
5. \_\_\_\_\_

6)



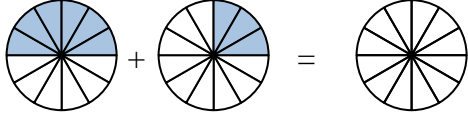
6. \_\_\_\_\_

7)



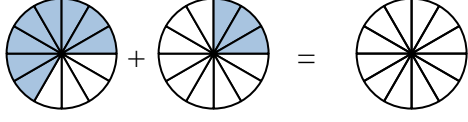
7. \_\_\_\_\_

8)



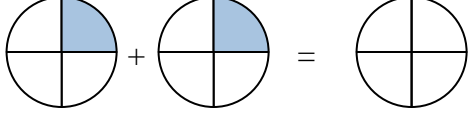
8. \_\_\_\_\_

9)



9. \_\_\_\_\_

10)



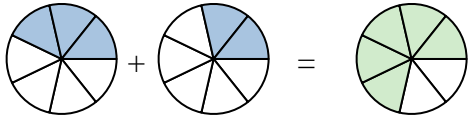
10. \_\_\_\_\_

**Answers**



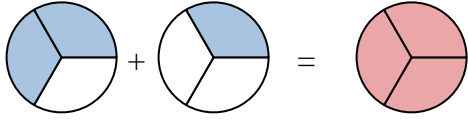
Shade in the fraction to solve the problem.

Ex)



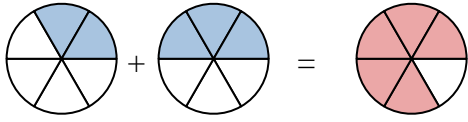
Ex.  $\frac{3}{7}$     $\frac{2}{7}$     $\frac{5}{7}$

1)



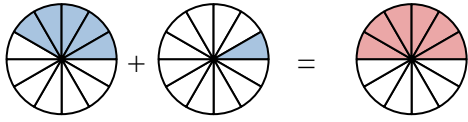
1.  $\frac{2}{3}$     $\frac{1}{3}$     $\frac{3}{3}$

2)



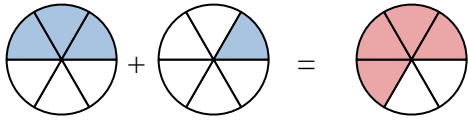
2.  $\frac{2}{5}$     $\frac{3}{5}$     $\frac{5}{5}$

3)



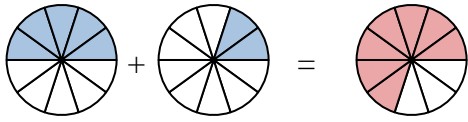
3.  $\frac{3}{12}$     $\frac{1}{12}$     $\frac{4}{12}$

4)



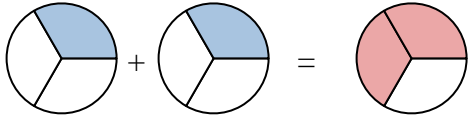
4.  $\frac{3}{6}$     $\frac{2}{6}$     $\frac{5}{6}$

5)



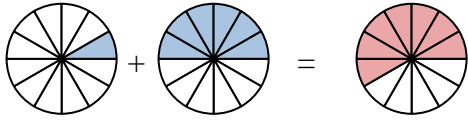
5.  $\frac{2}{10}$     $\frac{3}{10}$     $\frac{5}{10}$

6)



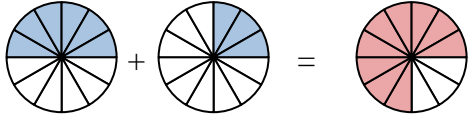
6.  $\frac{2}{3}$     $\frac{1}{3}$     $\frac{3}{3}$

7)



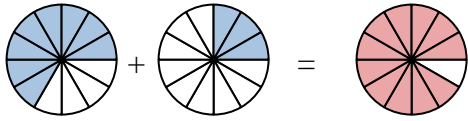
7.  $\frac{2}{12}$     $\frac{3}{12}$     $\frac{5}{12}$

8)



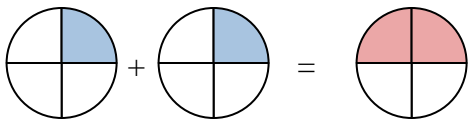
8.  $\frac{3}{10}$     $\frac{2}{10}$     $\frac{5}{10}$

9)



9.  $\frac{4}{12}$     $\frac{3}{12}$     $\frac{7}{12}$

10)



10.  $\frac{1}{2}$     $\frac{1}{2}$     $\frac{2}{2}$

**Answers**

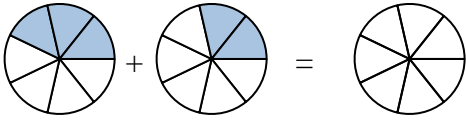




Shade in the fraction to solve the problem.

Answers

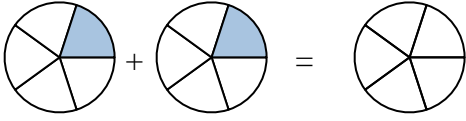
Ex)



Ex.  $\frac{3}{7}$     $\frac{2}{7}$     $\frac{5}{7}$

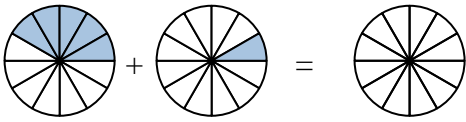
1. \_\_\_\_\_

1)



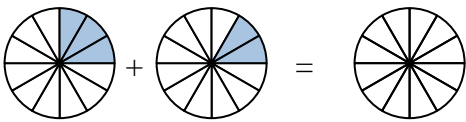
2. \_\_\_\_\_

2)



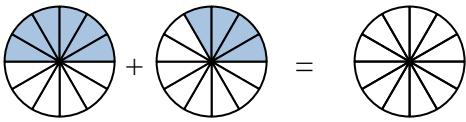
3. \_\_\_\_\_

3)



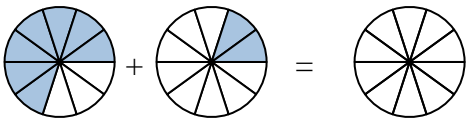
4. \_\_\_\_\_

4)



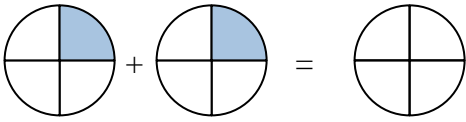
5. \_\_\_\_\_

5)



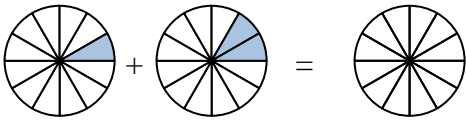
6. \_\_\_\_\_

6)



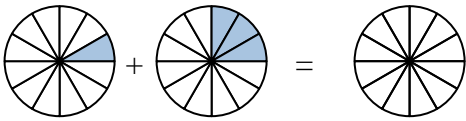
7. \_\_\_\_\_

7)



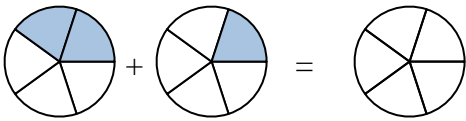
8. \_\_\_\_\_

8)



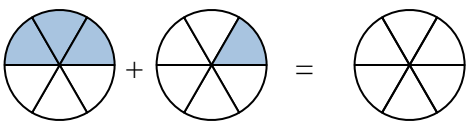
9. \_\_\_\_\_

9)



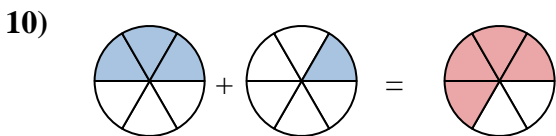
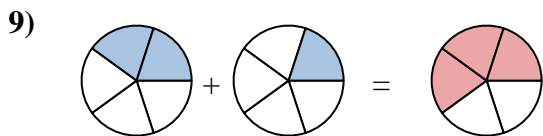
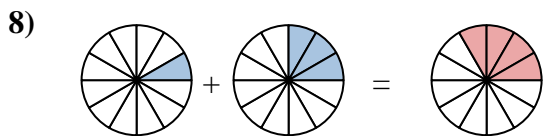
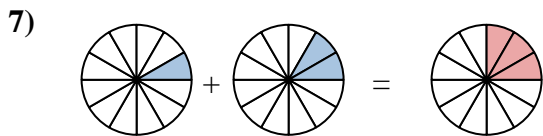
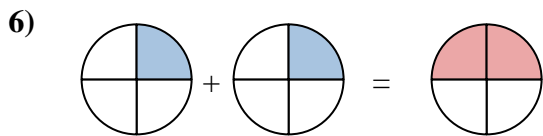
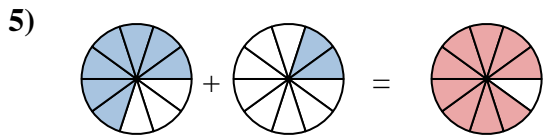
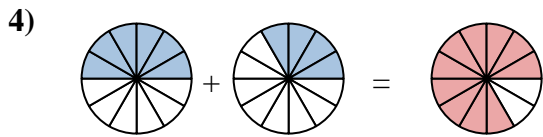
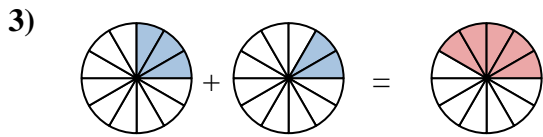
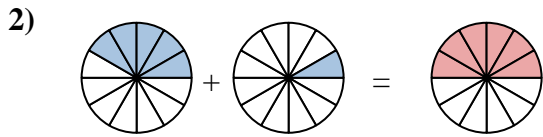
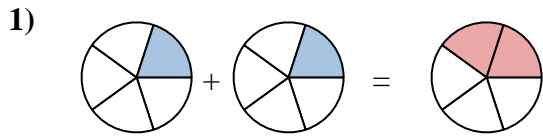
10. \_\_\_\_\_

10)





Shade in the fraction to solve the problem.



**Answers**

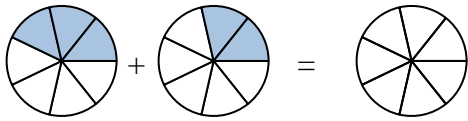
Ex.	$\frac{3}{7}$	$\frac{2}{7}$	$\frac{5}{7}$
1.	$\frac{1}{5}$	$\frac{1}{5}$	$\frac{2}{5}$
2.	$\frac{5}{12}$	$\frac{1}{12}$	$\frac{6}{12}$
3.	$\frac{3}{12}$	$\frac{2}{12}$	$\frac{5}{12}$
4.	$\frac{6}{12}$	$\frac{4}{12}$	$\frac{10}{12}$
5.	$\frac{7}{10}$	$\frac{2}{10}$	$\frac{9}{10}$
6.	$\frac{1}{4}$	$\frac{1}{4}$	$\frac{2}{4}$
7.	$\frac{1}{12}$	$\frac{2}{12}$	$\frac{3}{12}$
8.	$\frac{1}{12}$	$\frac{3}{12}$	$\frac{4}{12}$
9.	$\frac{2}{5}$	$\frac{1}{5}$	$\frac{3}{5}$
10.	$\frac{3}{6}$	$\frac{1}{6}$	$\frac{4}{6}$



Shade in the fraction to solve the problem.

Answers

Ex)



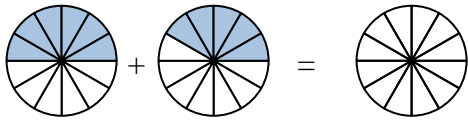
Ex.  $\frac{3}{7}$      $\frac{2}{7}$      $\frac{5}{7}$

1)



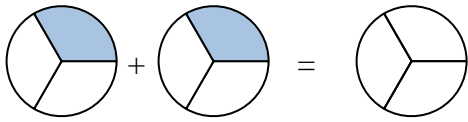
1. \_\_\_\_\_

2)



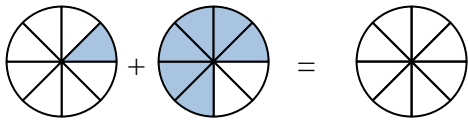
2. \_\_\_\_\_

3)



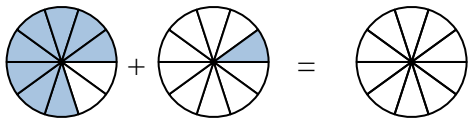
3. \_\_\_\_\_

4)



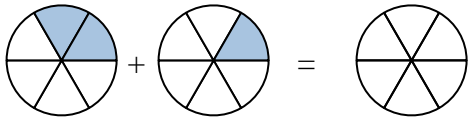
4. \_\_\_\_\_

5)



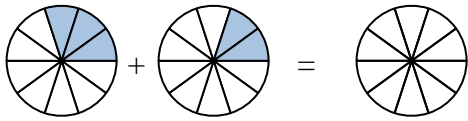
5. \_\_\_\_\_

6)



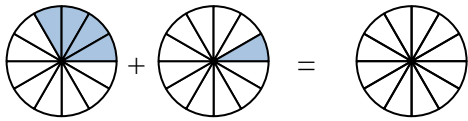
6. \_\_\_\_\_

7)



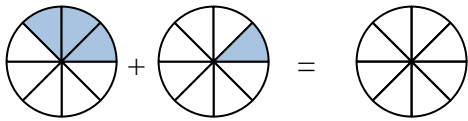
7. \_\_\_\_\_

8)



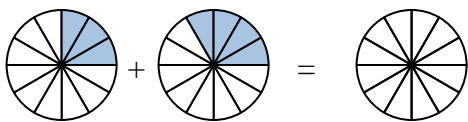
8. \_\_\_\_\_

9)



9. \_\_\_\_\_

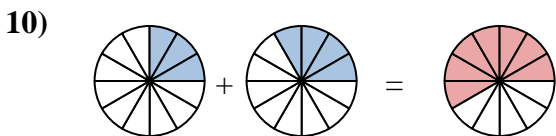
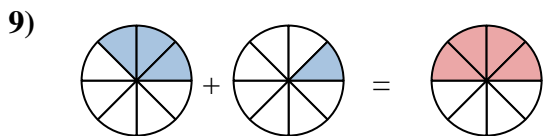
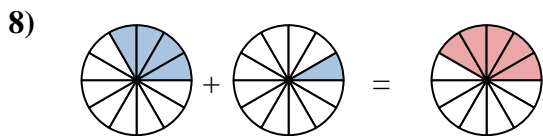
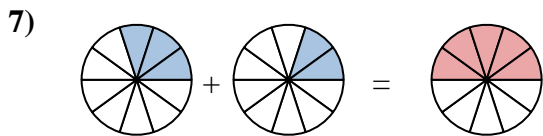
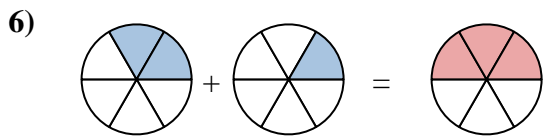
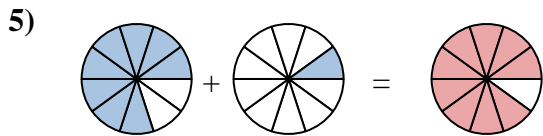
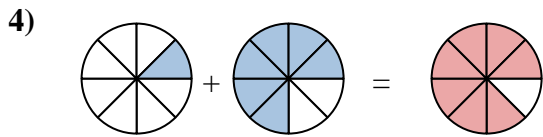
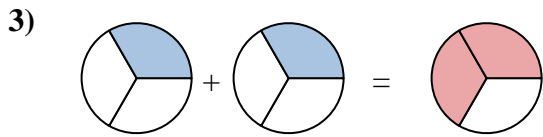
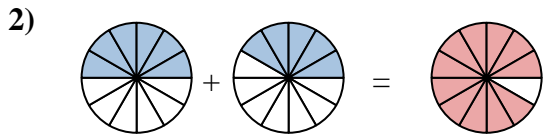
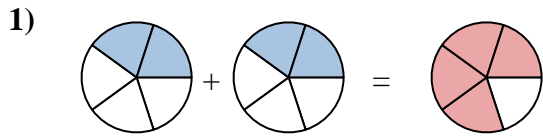
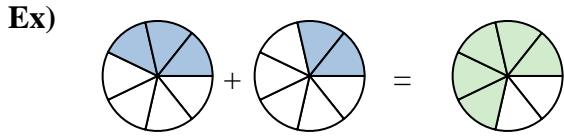
10)



10. \_\_\_\_\_



Shade in the fraction to solve the problem.



**Answers**

Ex.  $\frac{3}{7}$     $\frac{2}{7}$     $\frac{5}{7}$

1.  $\frac{2}{5}$     $\frac{2}{5}$     $\frac{4}{5}$

2.  $\frac{6}{12}$     $\frac{5}{12}$     $\frac{11}{12}$

3.  $\frac{1}{3}$     $\frac{1}{3}$     $\frac{2}{3}$

4.  $\frac{1}{8}$     $\frac{6}{8}$     $\frac{7}{8}$

5.  $\frac{8}{10}$     $\frac{1}{10}$     $\frac{9}{10}$

6.  $\frac{2}{6}$     $\frac{1}{6}$     $\frac{3}{6}$

7.  $\frac{3}{10}$     $\frac{2}{10}$     $\frac{5}{10}$

8.  $\frac{4}{12}$     $\frac{1}{12}$     $\frac{5}{12}$

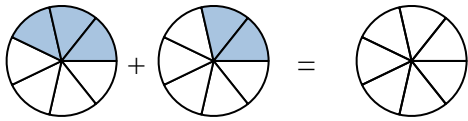
9.  $\frac{3}{8}$     $\frac{1}{8}$     $\frac{4}{8}$

10.  $\frac{3}{12}$     $\frac{4}{12}$     $\frac{7}{12}$



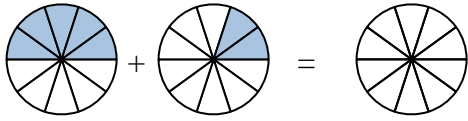
Shade in the fraction to solve the problem.

Ex)



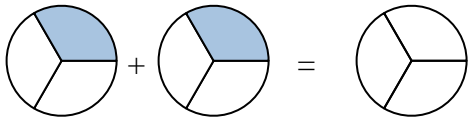
Ex.  $\frac{3}{7}$     $\frac{2}{7}$     $\frac{5}{7}$

1)



1. \_\_\_\_\_

2)



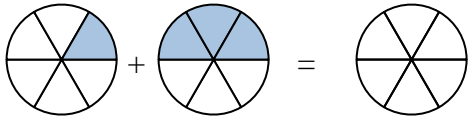
2. \_\_\_\_\_

3)



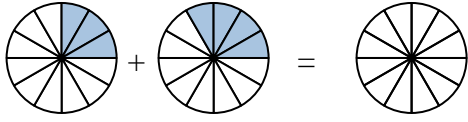
3. \_\_\_\_\_

4)



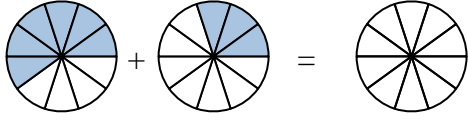
4. \_\_\_\_\_

5)



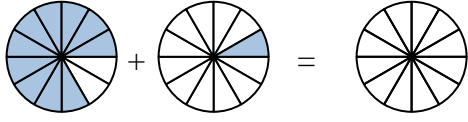
5. \_\_\_\_\_

6)



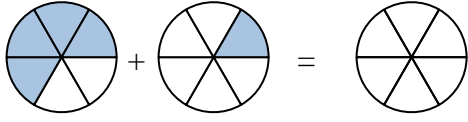
6. \_\_\_\_\_

7)



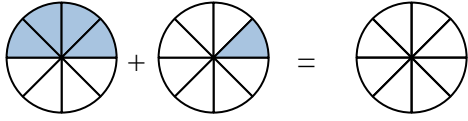
7. \_\_\_\_\_

8)



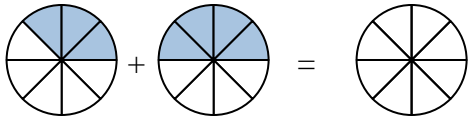
8. \_\_\_\_\_

9)



9. \_\_\_\_\_

10)



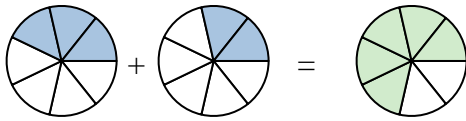
10. \_\_\_\_\_

**Answers**



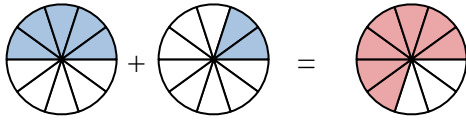
Shade in the fraction to solve the problem.

Ex)



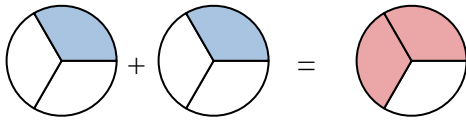
Ex.  $\frac{3}{7}$     $\frac{2}{7}$     $\frac{5}{7}$

1)



1.  $\frac{5}{10}$     $\frac{2}{10}$     $\frac{7}{10}$

2)



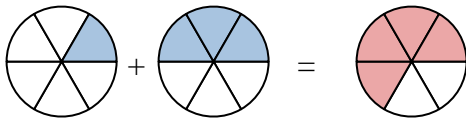
2.  $\frac{1}{3}$     $\frac{1}{3}$     $\frac{2}{3}$

3)



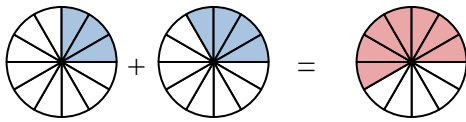
3.  $\frac{2}{5}$     $\frac{2}{5}$     $\frac{4}{5}$

4)



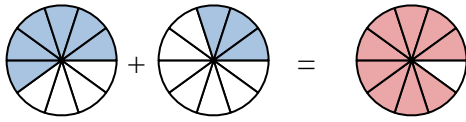
4.  $\frac{1}{6}$     $\frac{3}{6}$     $\frac{4}{6}$

5)



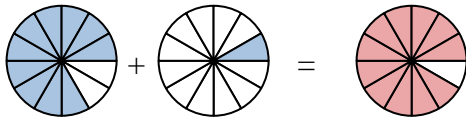
5.  $\frac{3}{12}$     $\frac{4}{12}$     $\frac{7}{12}$

6)



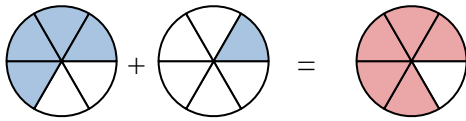
6.  $\frac{6}{10}$     $\frac{3}{10}$     $\frac{9}{10}$

7)



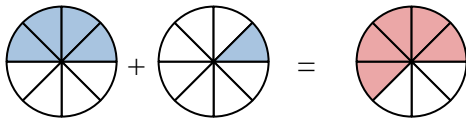
7.  $\frac{10}{12}$     $\frac{1}{12}$     $\frac{11}{12}$

8)



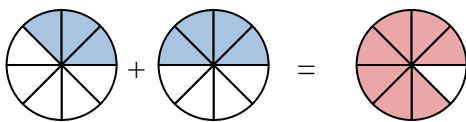
8.  $\frac{4}{6}$     $\frac{1}{6}$     $\frac{5}{6}$

9)



9.  $\frac{4}{8}$     $\frac{1}{8}$     $\frac{5}{8}$

10)



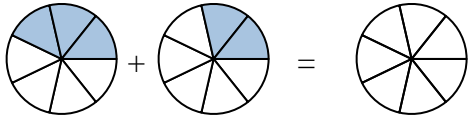
10.  $\frac{3}{8}$     $\frac{4}{8}$     $\frac{7}{8}$

**Answers**



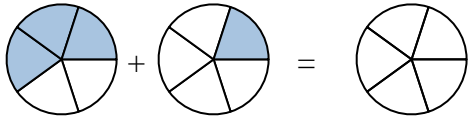
Shade in the fraction to solve the problem.

Ex)



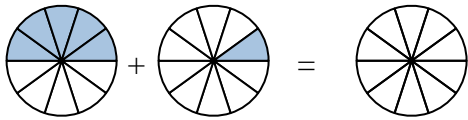
Ex.  $\frac{3}{7}$      $\frac{2}{7}$      $\frac{5}{7}$

1)



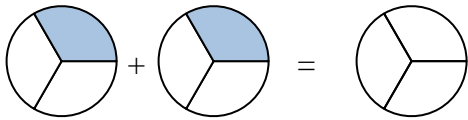
1. \_\_\_\_\_

2)



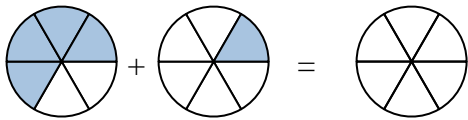
2. \_\_\_\_\_

3)



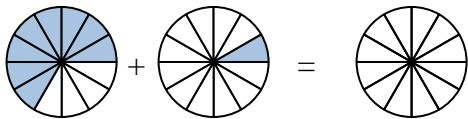
3. \_\_\_\_\_

4)



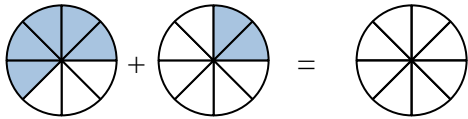
4. \_\_\_\_\_

5)



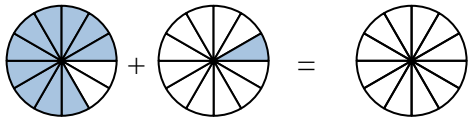
5. \_\_\_\_\_

6)



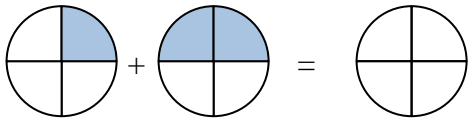
6. \_\_\_\_\_

7)



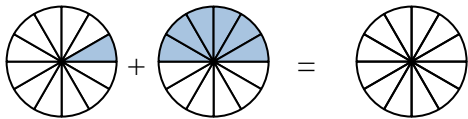
7. \_\_\_\_\_

8)



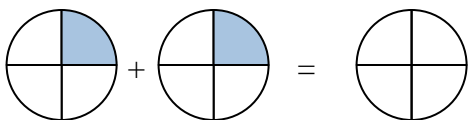
8. \_\_\_\_\_

9)



9. \_\_\_\_\_

10)



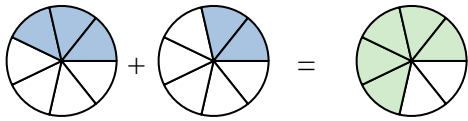
10. \_\_\_\_\_

**Answers**



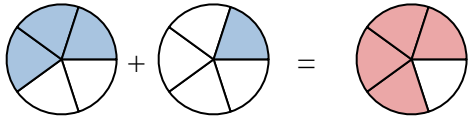
Shade in the fraction to solve the problem.

Ex)



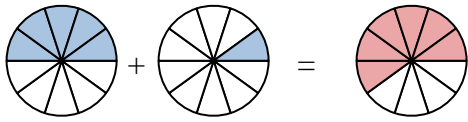
Ex.  $\frac{3}{7}$     $\frac{2}{7}$     $\frac{5}{7}$

1)



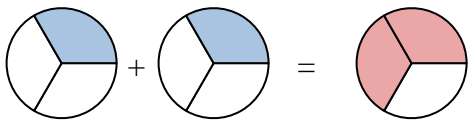
1.  $\frac{3}{5}$     $\frac{1}{5}$     $\frac{4}{5}$

2)



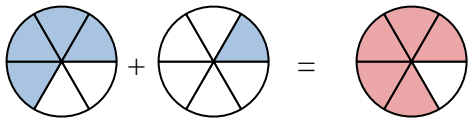
2.  $\frac{5}{10}$     $\frac{1}{10}$     $\frac{6}{10}$

3)



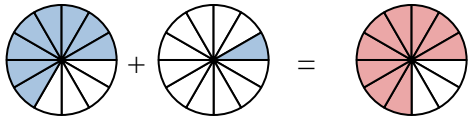
3.  $\frac{1}{3}$     $\frac{1}{3}$     $\frac{2}{3}$

4)



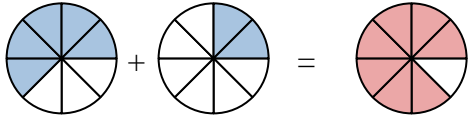
4.  $\frac{4}{6}$     $\frac{1}{6}$     $\frac{5}{6}$

5)



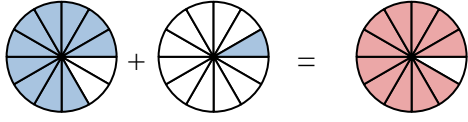
5.  $\frac{8}{12}$     $\frac{1}{12}$     $\frac{9}{12}$

6)



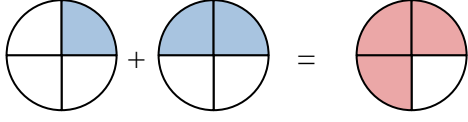
6.  $\frac{5}{8}$     $\frac{2}{8}$     $\frac{7}{8}$

7)



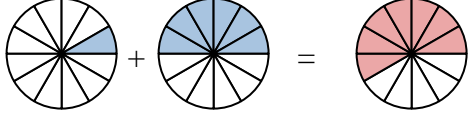
7.  $\frac{10}{12}$     $\frac{1}{12}$     $\frac{11}{12}$

8)



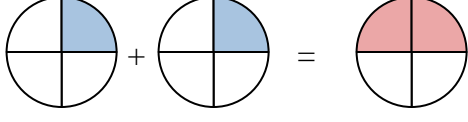
8.  $\frac{1}{4}$     $\frac{2}{4}$     $\frac{3}{4}$

9)



9.  $\frac{1}{12}$     $\frac{6}{12}$     $\frac{7}{12}$

10)



10.  $\frac{1}{4}$     $\frac{1}{4}$     $\frac{2}{4}$

**Answers**

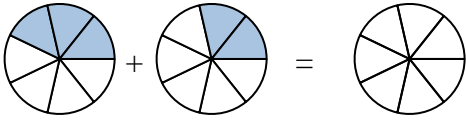




Shade in the fraction to solve the problem.

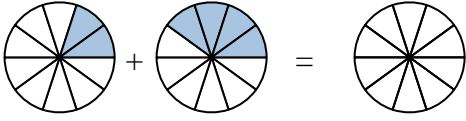
Answers

Ex)



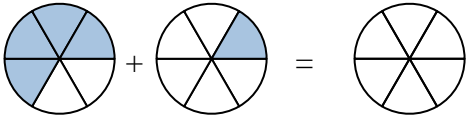
Ex.  $\frac{3}{7}$     $\frac{2}{7}$     $\frac{5}{7}$

1)



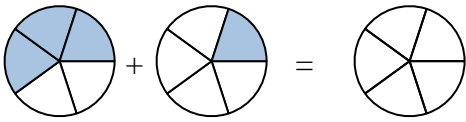
1. \_\_\_\_\_

2)



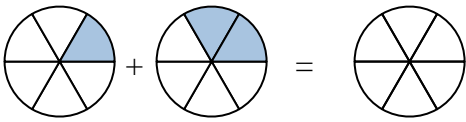
2. \_\_\_\_\_

3)



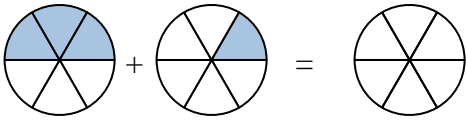
3. \_\_\_\_\_

4)



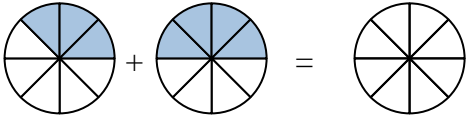
4. \_\_\_\_\_

5)



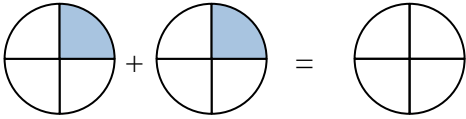
5. \_\_\_\_\_

6)



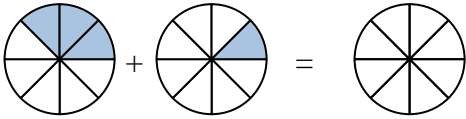
6. \_\_\_\_\_

7)



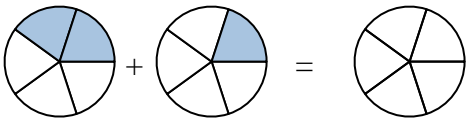
7. \_\_\_\_\_

8)



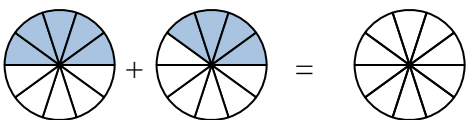
8. \_\_\_\_\_

9)



9. \_\_\_\_\_

10)

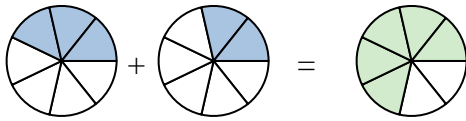


10. \_\_\_\_\_



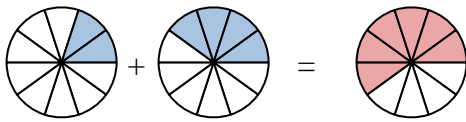
Shade in the fraction to solve the problem.

Ex)



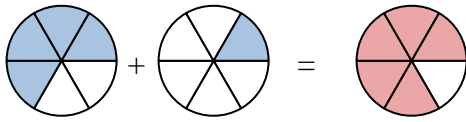
Ex.  $\frac{3}{7}$     $\frac{2}{7}$     $\frac{5}{7}$

1)



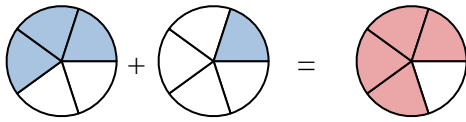
1.  $\frac{2}{10}$     $\frac{4}{10}$     $\frac{6}{10}$

2)



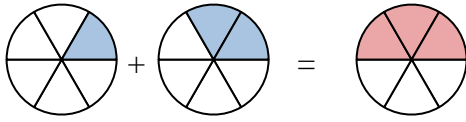
2.  $\frac{4}{6}$     $\frac{1}{6}$     $\frac{5}{6}$

3)



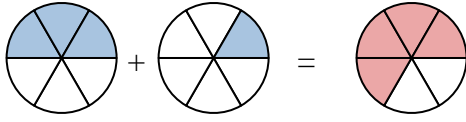
3.  $\frac{3}{5}$     $\frac{1}{5}$     $\frac{4}{5}$

4)



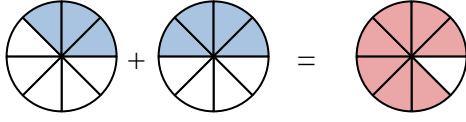
4.  $\frac{1}{6}$     $\frac{2}{6}$     $\frac{3}{6}$

5)



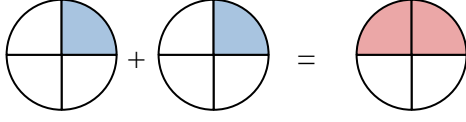
5.  $\frac{3}{6}$     $\frac{1}{6}$     $\frac{4}{6}$

6)



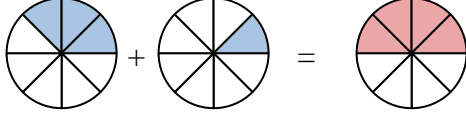
6.  $\frac{3}{8}$     $\frac{4}{8}$     $\frac{7}{8}$

7)



7.  $\frac{1}{4}$     $\frac{1}{4}$     $\frac{2}{4}$

8)



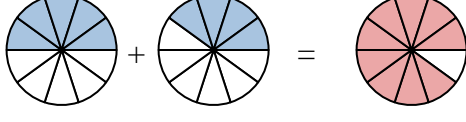
8.  $\frac{3}{8}$     $\frac{1}{8}$     $\frac{4}{8}$

9)



9.  $\frac{2}{5}$     $\frac{1}{5}$     $\frac{3}{5}$

10)



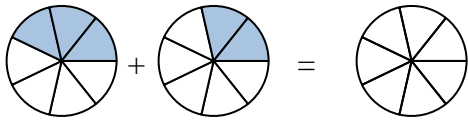
10.  $\frac{5}{10}$     $\frac{4}{10}$     $\frac{9}{10}$

**Answers**



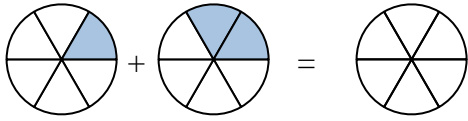
Shade in the fraction to solve the problem.

Ex)



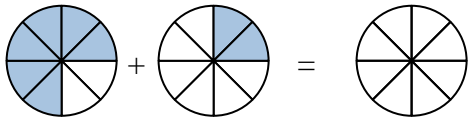
Ex.  $\frac{3}{7}$      $\frac{2}{7}$      $\frac{5}{7}$

1)



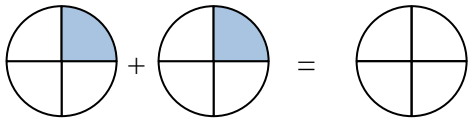
1. \_\_\_\_\_

2)



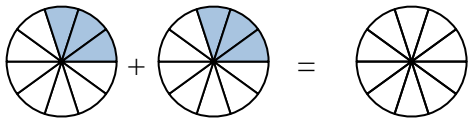
2. \_\_\_\_\_

3)



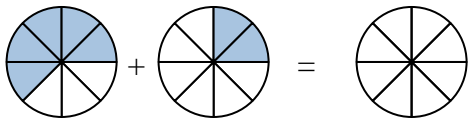
3. \_\_\_\_\_

4)



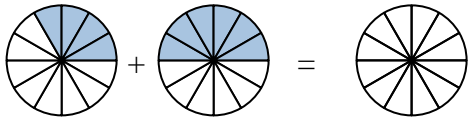
4. \_\_\_\_\_

5)



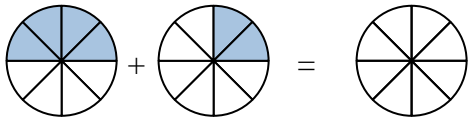
5. \_\_\_\_\_

6)



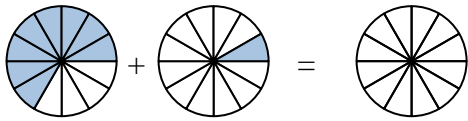
6. \_\_\_\_\_

7)



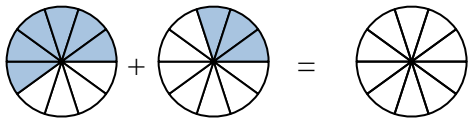
7. \_\_\_\_\_

8)



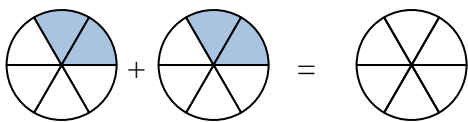
8. \_\_\_\_\_

9)



9. \_\_\_\_\_

10)

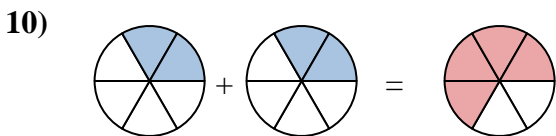
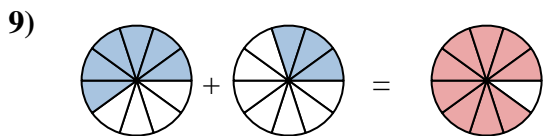
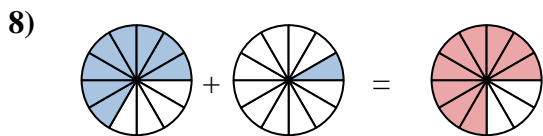
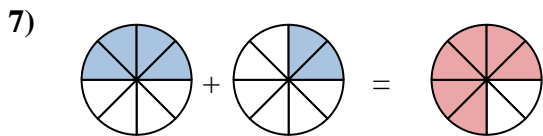
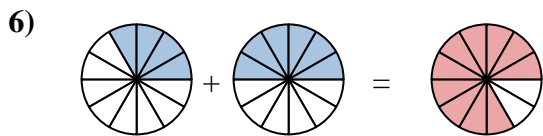
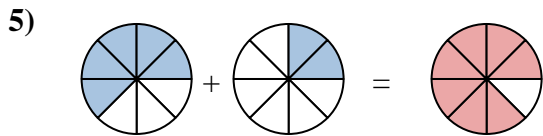
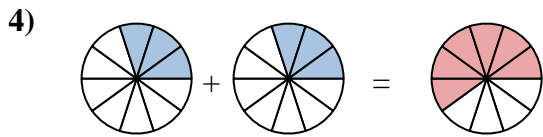
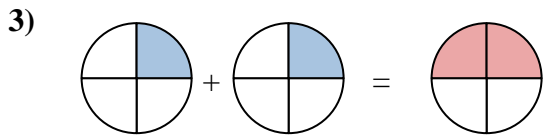
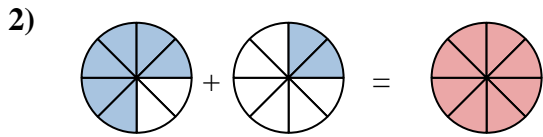
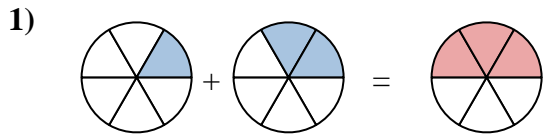
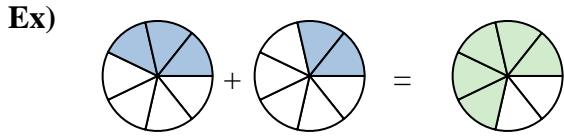


10. \_\_\_\_\_

**Answers**



Shade in the fraction to solve the problem.



Answers

Ex.  $\frac{3}{7}$     $\frac{2}{7}$     $\frac{5}{7}$

1.  $\frac{1}{6}$     $\frac{2}{6}$     $\frac{3}{6}$

2.  $\frac{6}{8}$     $\frac{2}{8}$     $\frac{8}{8}$

3.  $\frac{1}{4}$     $\frac{1}{4}$     $\frac{2}{4}$

4.  $\frac{3}{10}$     $\frac{3}{10}$     $\frac{6}{10}$

5.  $\frac{5}{8}$     $\frac{2}{8}$     $\frac{7}{8}$

6.  $\frac{4}{12}$     $\frac{6}{12}$     $\frac{10}{12}$

7.  $\frac{4}{8}$     $\frac{2}{8}$     $\frac{6}{8}$

8.  $\frac{8}{12}$     $\frac{1}{12}$     $\frac{9}{12}$

9.  $\frac{6}{10}$     $\frac{3}{10}$     $\frac{9}{10}$

10.  $\frac{2}{6}$     $\frac{2}{6}$     $\frac{4}{6}$