



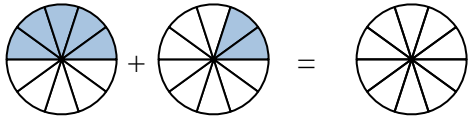
Shade in the fraction to solve the problem.

Ex)



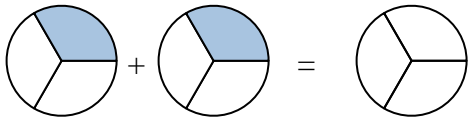
Ex.  $\frac{3}{7}$      $\frac{2}{7}$      $\frac{5}{7}$

1)



1. \_\_\_\_\_

2)



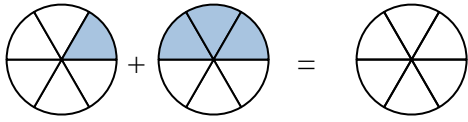
2. \_\_\_\_\_

3)



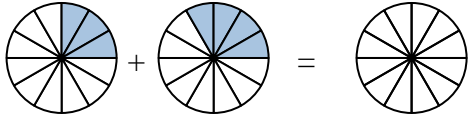
3. \_\_\_\_\_

4)



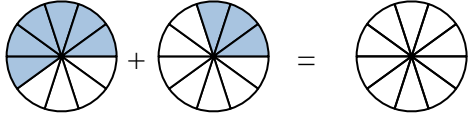
4. \_\_\_\_\_

5)



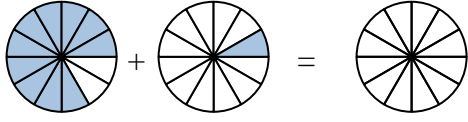
5. \_\_\_\_\_

6)



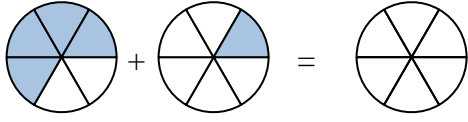
6. \_\_\_\_\_

7)



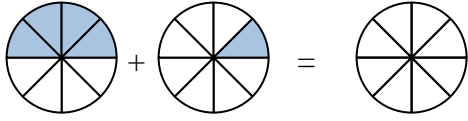
7. \_\_\_\_\_

8)



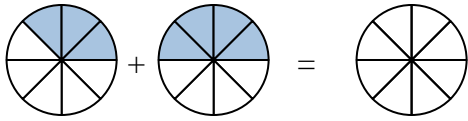
8. \_\_\_\_\_

9)



9. \_\_\_\_\_

10)



10. \_\_\_\_\_

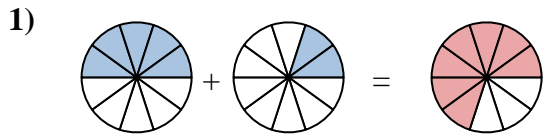
**Answers**



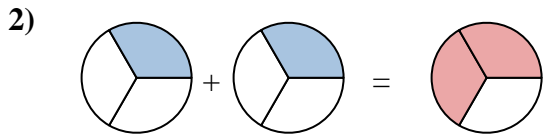
Shade in the fraction to solve the problem.



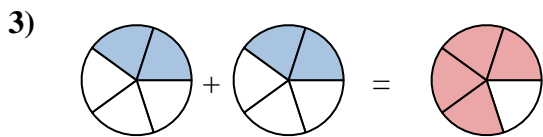
Ex.  $\frac{3}{7}$      $\frac{2}{7}$      $\frac{5}{7}$



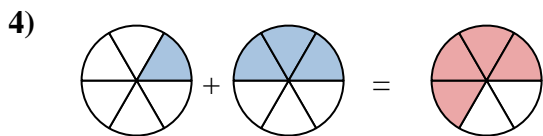
1.  $\frac{5}{10}$      $\frac{2}{10}$      $\frac{7}{10}$



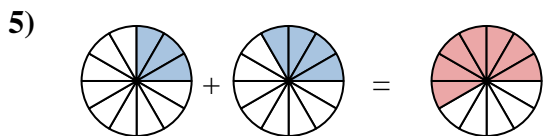
2.  $\frac{1}{3}$      $\frac{1}{3}$      $\frac{2}{3}$



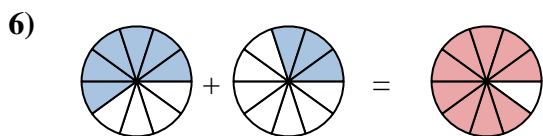
3.  $\frac{2}{5}$      $\frac{2}{5}$      $\frac{4}{5}$



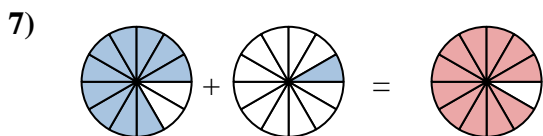
4.  $\frac{1}{6}$      $\frac{3}{6}$      $\frac{4}{6}$



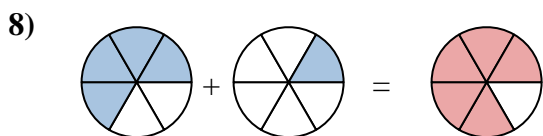
5.  $\frac{3}{12}$      $\frac{4}{12}$      $\frac{7}{12}$



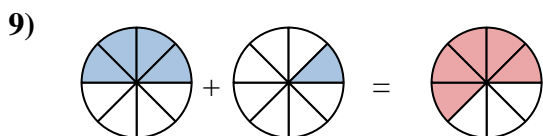
6.  $\frac{6}{10}$      $\frac{3}{10}$      $\frac{9}{10}$



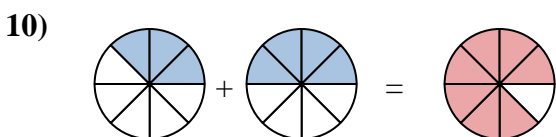
7.  $\frac{10}{12}$      $\frac{1}{12}$      $\frac{11}{12}$



8.  $\frac{4}{6}$      $\frac{1}{6}$      $\frac{5}{6}$



9.  $\frac{4}{8}$      $\frac{1}{8}$      $\frac{5}{8}$



10.  $\frac{3}{8}$      $\frac{4}{8}$      $\frac{7}{8}$

**Answers**