



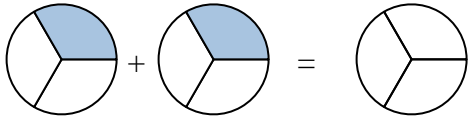
Shade in the fraction to solve the problem.

Ex)



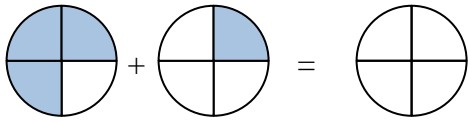
Ex.  $\frac{3}{7}$     $\frac{2}{7}$     $\frac{5}{7}$

1)



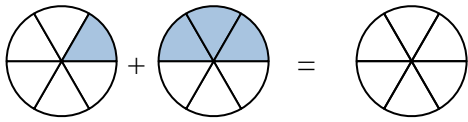
1. \_\_\_\_\_

2)



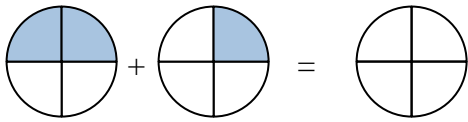
2. \_\_\_\_\_

3)



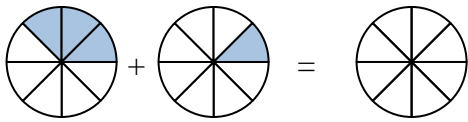
3. \_\_\_\_\_

4)



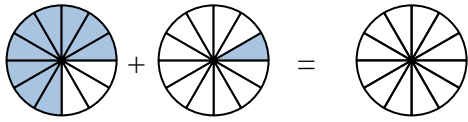
4. \_\_\_\_\_

5)



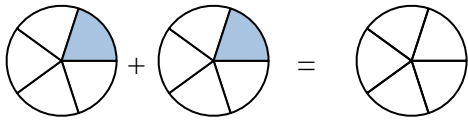
5. \_\_\_\_\_

6)



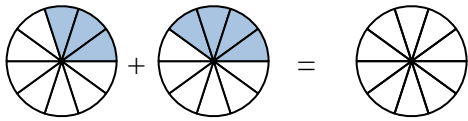
6. \_\_\_\_\_

7)



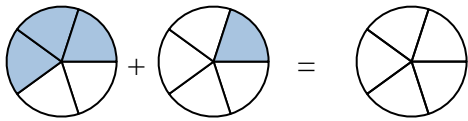
7. \_\_\_\_\_

8)



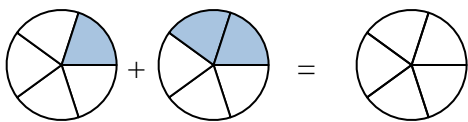
8. \_\_\_\_\_

9)



9. \_\_\_\_\_

10)



10. \_\_\_\_\_

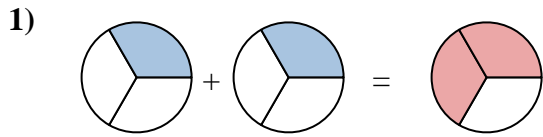
**Answers**



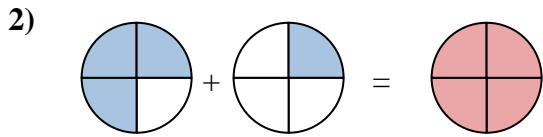
Shade in the fraction to solve the problem.



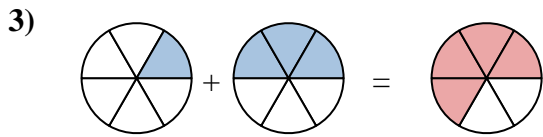
Ex.  $\frac{3}{7}$     $\frac{2}{7}$     $\frac{5}{7}$



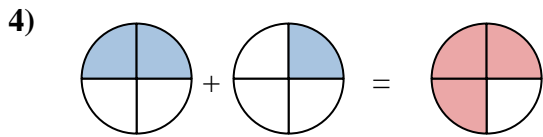
1.  $\frac{1}{3}$     $\frac{1}{3}$     $\frac{2}{3}$



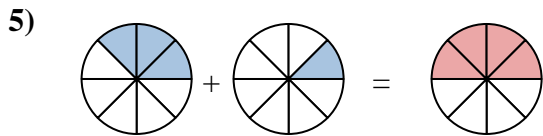
2.  $\frac{3}{4}$     $\frac{1}{4}$     $\frac{4}{4}$



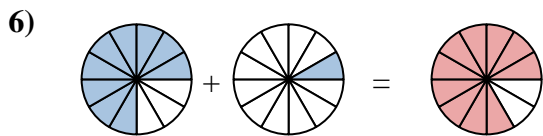
3.  $\frac{1}{6}$     $\frac{3}{6}$     $\frac{4}{6}$



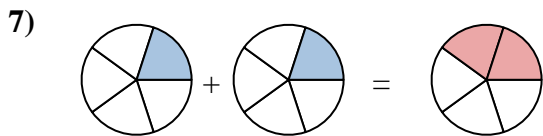
4.  $\frac{2}{4}$     $\frac{1}{4}$     $\frac{3}{4}$



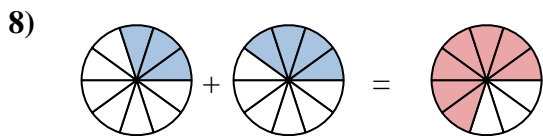
5.  $\frac{3}{8}$     $\frac{1}{8}$     $\frac{4}{8}$



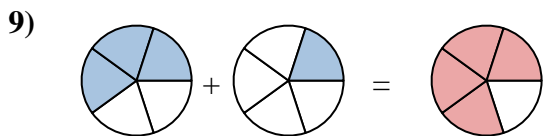
6.  $\frac{9}{12}$     $\frac{1}{12}$     $\frac{10}{12}$



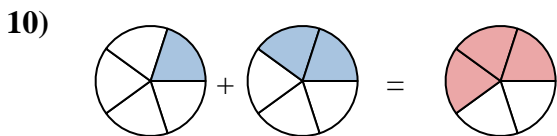
7.  $\frac{1}{5}$     $\frac{1}{5}$     $\frac{2}{5}$



8.  $\frac{3}{10}$     $\frac{4}{10}$     $\frac{7}{10}$



9.  $\frac{3}{5}$     $\frac{1}{5}$     $\frac{4}{5}$



10.  $\frac{1}{5}$     $\frac{2}{5}$     $\frac{3}{5}$

**Answers**