



Determine which letter best represents the sum.

1) $\frac{1}{6} + \frac{1}{6}$

3) $\frac{1}{4} + \frac{2}{4}$

5) $\frac{3}{6} + \frac{4}{6}$

7) $\frac{2}{8} + \frac{1}{8}$

9) $\frac{1}{6} + \frac{4}{6}$

11) $\frac{5}{6} + \frac{1}{6}$

13) $\frac{1}{5} + \frac{4}{5}$

2) $\frac{3}{6} + \frac{5}{6}$

4) $\frac{4}{12} + \frac{3}{12}$

6) $\frac{4}{8} + \frac{3}{8}$

8) $\frac{1}{2} + \frac{1}{2}$

10) $\frac{7}{10} + \frac{7}{10}$

12) $\frac{3}{10} + \frac{7}{10}$

14) $\frac{5}{12} + \frac{6}{12}$

Answers

1. _____

2. _____

3. _____

4. _____

5. _____

6. _____

7. _____

8. _____

9. _____

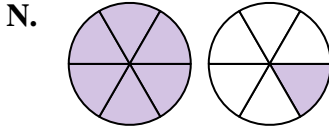
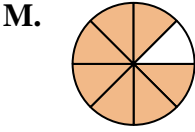
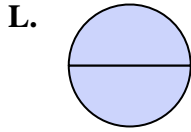
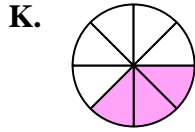
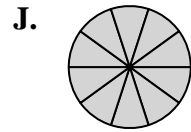
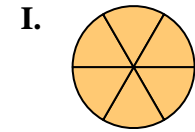
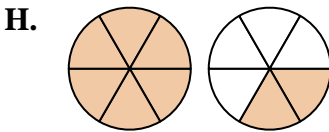
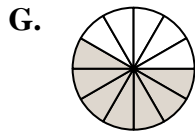
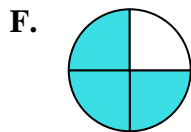
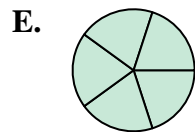
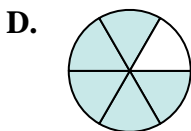
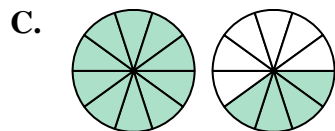
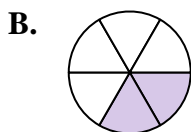
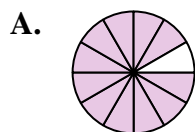
10. _____

11. _____

12. _____

13. _____

14. _____





Determine which letter best represents the sum.

1) $\frac{1}{6} + \frac{1}{6}$

3) $\frac{1}{4} + \frac{2}{4}$

5) $\frac{3}{6} + \frac{4}{6}$

7) $\frac{2}{8} + \frac{1}{8}$

9) $\frac{1}{6} + \frac{4}{6}$

11) $\frac{5}{6} + \frac{1}{6}$

13) $\frac{1}{5} + \frac{4}{5}$

2) $\frac{3}{6} + \frac{5}{6}$

4) $\frac{4}{12} + \frac{3}{12}$

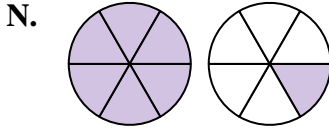
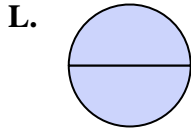
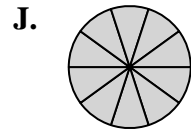
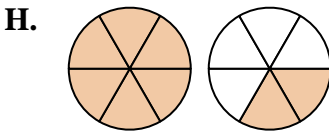
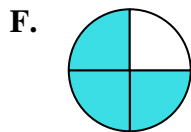
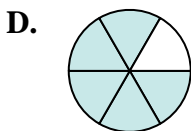
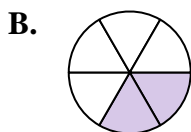
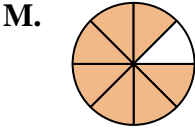
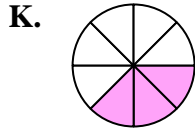
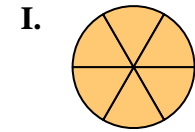
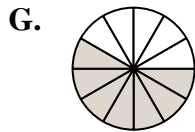
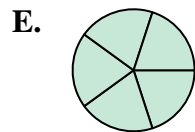
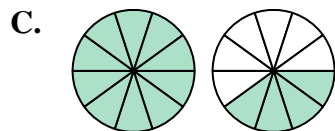
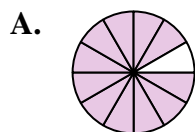
6) $\frac{4}{8} + \frac{3}{8}$

8) $\frac{1}{2} + \frac{1}{2}$

10) $\frac{7}{10} + \frac{7}{10}$

12) $\frac{3}{10} + \frac{7}{10}$

14) $\frac{5}{12} + \frac{6}{12}$



Answers

1. **B** $\frac{2}{6}$

2. **H** $1\frac{2}{6}$

3. **F** $\frac{3}{4}$

4. **G** $\frac{7}{12}$

5. **N** $1\frac{1}{6}$

6. **M** $\frac{7}{8}$

7. **K** $\frac{3}{8}$

8. **L** $\frac{2}{2}$

9. **D** $\frac{5}{6}$

10. **C** $1\frac{4}{10}$

11. **I** $\frac{6}{6}$

12. **J** $\frac{10}{10}$

13. **E** $\frac{5}{5}$

14. **A** $1\frac{11}{12}$