



Determine which letter best represents the sum.

1) $\frac{2}{3} + \frac{2}{3}$

3) $\frac{1}{2} + \frac{1}{2}$

5) $\frac{1}{4} + \frac{2}{4}$

7) $\frac{4}{8} + \frac{1}{8}$

9) $\frac{6}{10} + \frac{9}{10}$

11) $\frac{3}{10} + \frac{3}{10}$

13) $\frac{2}{6} + \frac{4}{6}$

2) $\frac{3}{5} + \frac{3}{5}$

4) $\frac{2}{4} + \frac{3}{4}$

6) $\frac{4}{12} + \frac{6}{12}$

8) $\frac{2}{5} + \frac{1}{5}$

10) $\frac{6}{12} + \frac{11}{12}$

12) $\frac{2}{8} + \frac{1}{8}$

14) $\frac{3}{5} + \frac{4}{5}$

Answers

1. _____

2. _____

3. _____

4. _____

5. _____

6. _____

7. _____

8. _____

9. _____

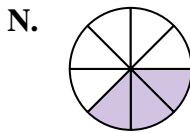
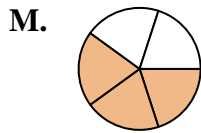
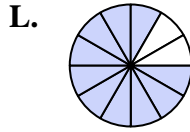
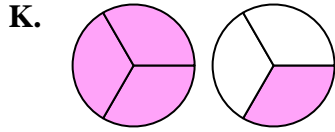
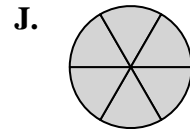
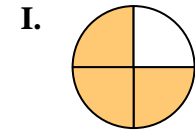
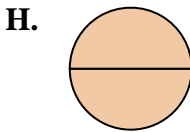
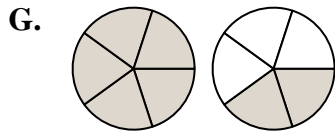
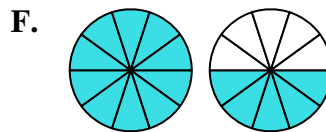
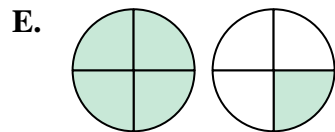
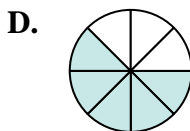
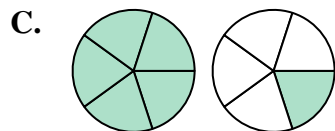
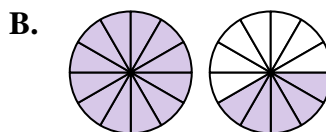
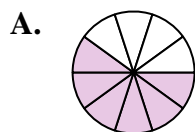
10. _____

11. _____

12. _____

13. _____

14. _____





Determine which letter best represents the sum.

1) $\frac{2}{3} + \frac{2}{3}$

2) $\frac{3}{5} + \frac{3}{5}$

3) $\frac{1}{2} + \frac{1}{2}$

4) $\frac{2}{4} + \frac{3}{4}$

5) $\frac{1}{4} + \frac{2}{4}$

6) $\frac{4}{12} + \frac{6}{12}$

7) $\frac{4}{8} + \frac{1}{8}$

8) $\frac{2}{5} + \frac{1}{5}$

9) $\frac{6}{10} + \frac{9}{10}$

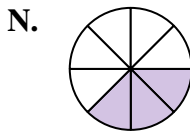
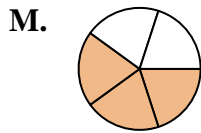
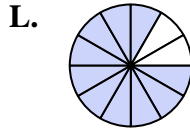
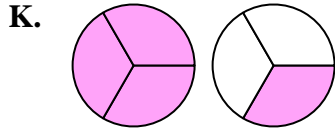
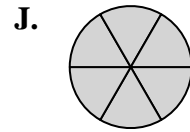
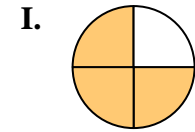
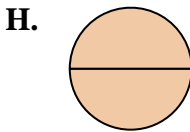
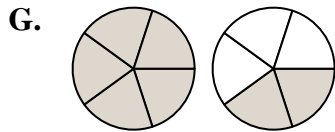
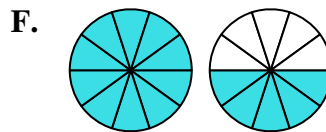
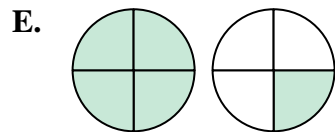
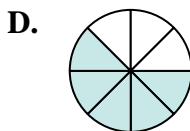
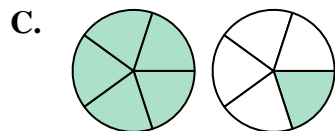
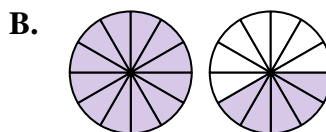
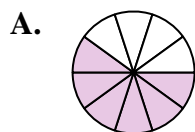
10) $\frac{6}{12} + \frac{11}{12}$

11) $\frac{3}{10} + \frac{3}{10}$

12) $\frac{2}{8} + \frac{1}{8}$

13) $\frac{2}{6} + \frac{4}{6}$

14) $\frac{3}{5} + \frac{4}{5}$



Answers

1. **K** $1\frac{1}{3}$

2. **C** $1\frac{1}{5}$

3. **H** $\frac{2}{2}$

4. **E** $1\frac{1}{4}$

5. **I** $\frac{3}{4}$

6. **L** $\frac{10}{12}$

7. **D** $\frac{5}{8}$

8. **M** $\frac{3}{5}$

9. **F** $1\frac{5}{10}$

10. **B** $1\frac{5}{12}$

11. **A** $\frac{6}{10}$

12. **N** $\frac{3}{8}$

13. **J** $\frac{6}{6}$

14. **G** $1\frac{2}{5}$