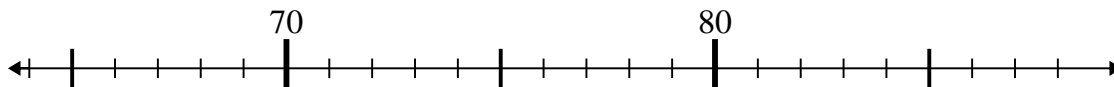




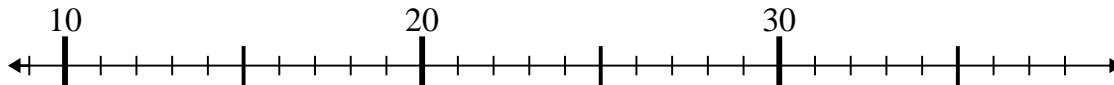
Use the numberlines to solve each problem.

Answers

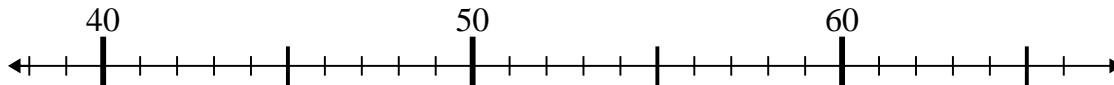
1)  $75 + 8 =$



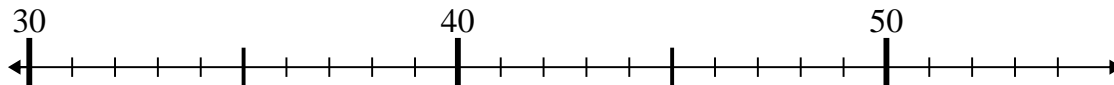
2)  $18 + 10 =$



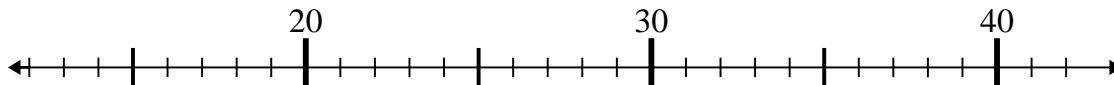
3)  $45 + 8 =$



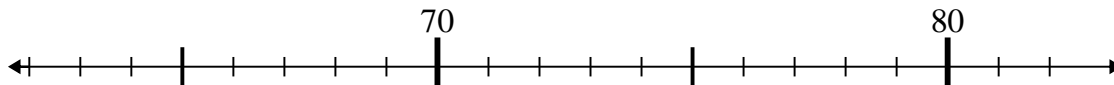
4)  $44 - 2 =$



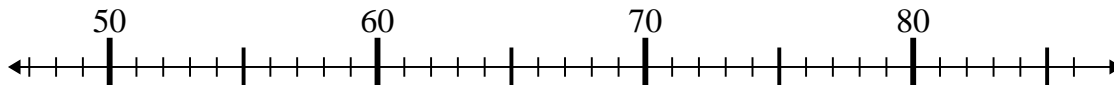
5)  $32 - 12 =$



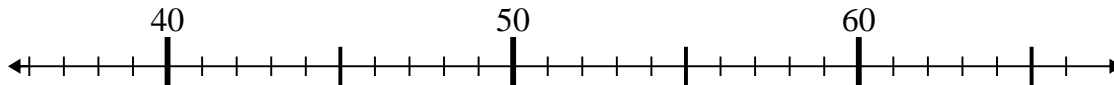
6)  $72 + 9 =$



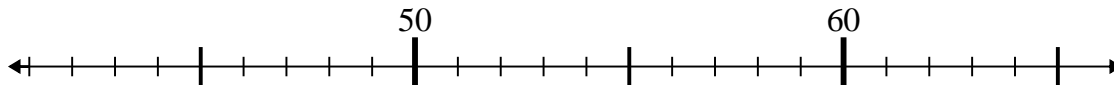
7)  $67 - 7 =$



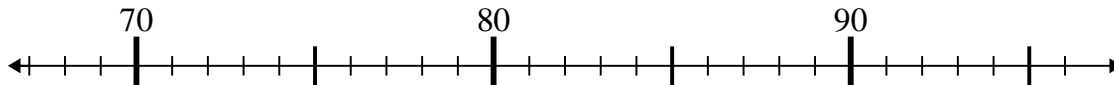
8)  $53 + 11 =$



9)  $46 + 0 =$



10)  $70 + 9 =$

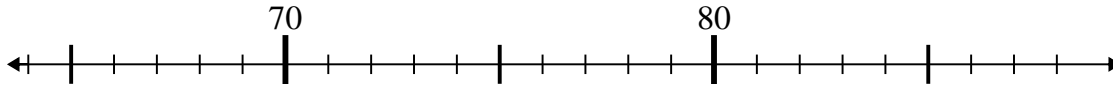


1. \_\_\_\_\_
2. \_\_\_\_\_
3. \_\_\_\_\_
4. \_\_\_\_\_
5. \_\_\_\_\_
6. \_\_\_\_\_
7. \_\_\_\_\_
8. \_\_\_\_\_
9. \_\_\_\_\_
10. \_\_\_\_\_

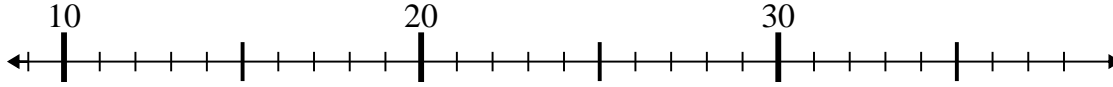


Use the numberlines to solve each problem.

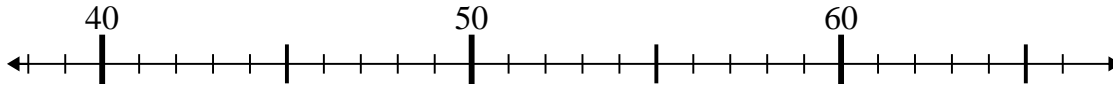
1)  $75 + 8 =$



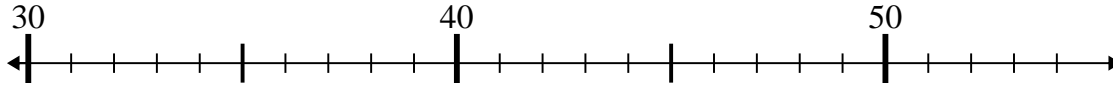
2)  $18 + 10 =$



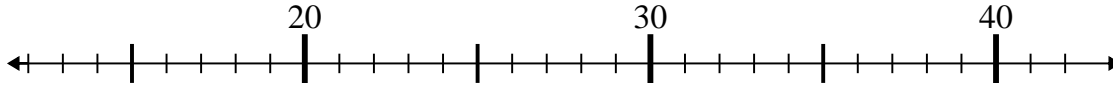
3)  $45 + 8 =$



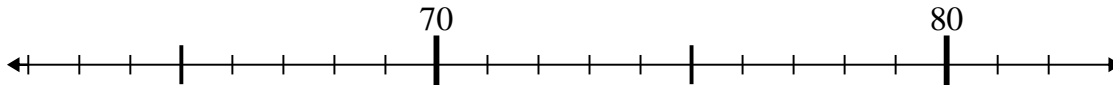
4)  $44 - 2 =$



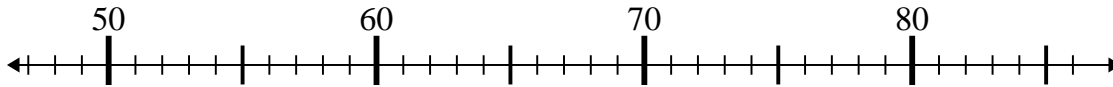
5)  $32 - 12 =$



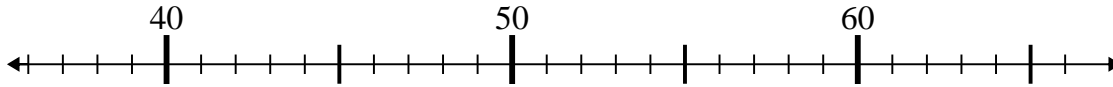
6)  $72 + 9 =$



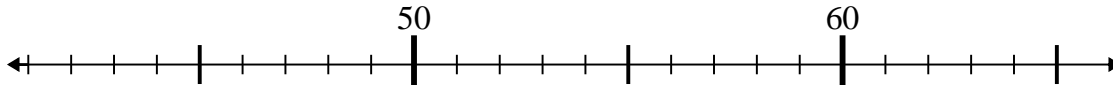
7)  $67 - 7 =$



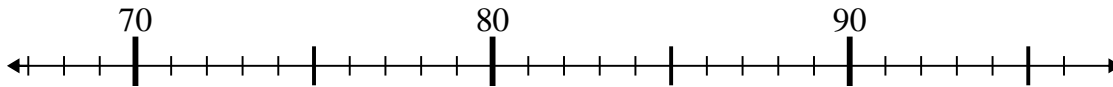
8)  $53 + 11 =$



9)  $46 + 0 =$



10)  $70 + 9 =$



Answers

1. 83

2. 28

3. 53

4. 42

5. 20

6. 81

7. 60

8. 64

9. 46

10. 79