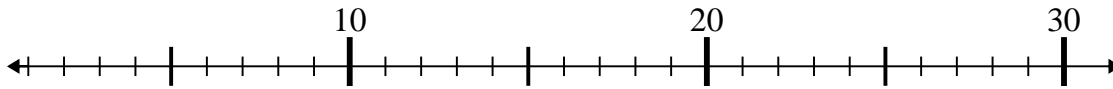




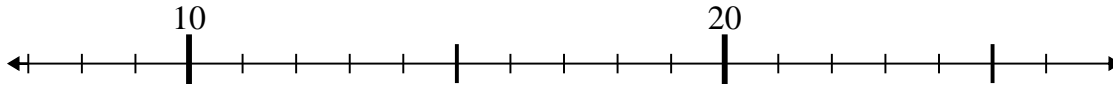
Use the numberlines to solve each problem.

Answers

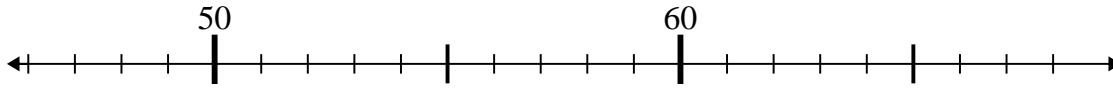
1)  $3 + 17 =$



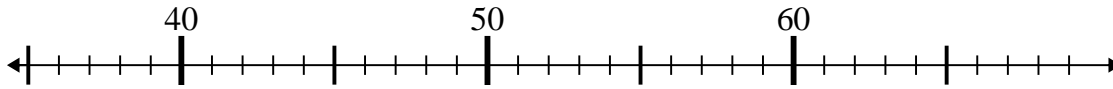
2)  $14 + 9 =$



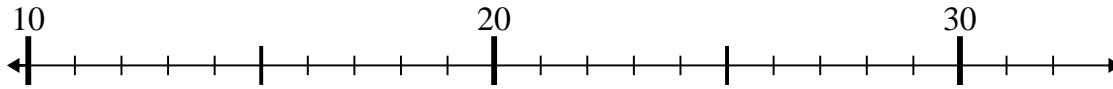
3)  $59 - 8 =$



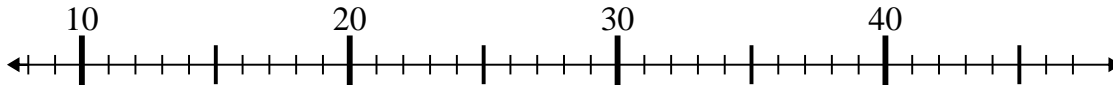
4)  $43 - 5 =$



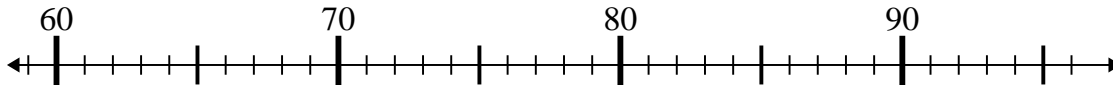
5)  $26 - 14 =$



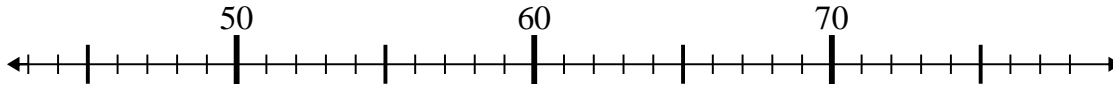
6)  $15 + 23 =$



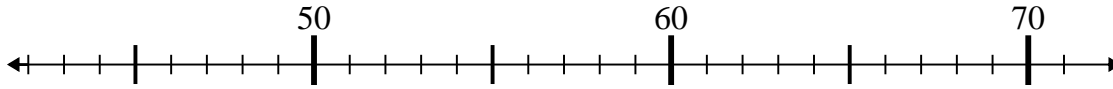
7)  $91 + 2 =$



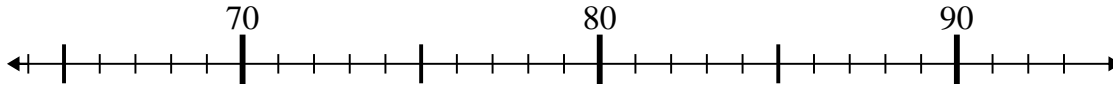
8)  $47 + 1 =$



9)  $71 - 8 =$



10)  $72 + 16 =$

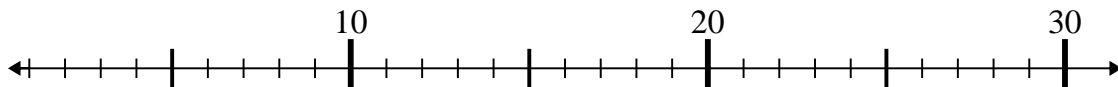


- 1. \_\_\_\_\_
- 2. \_\_\_\_\_
- 3. \_\_\_\_\_
- 4. \_\_\_\_\_
- 5. \_\_\_\_\_
- 6. \_\_\_\_\_
- 7. \_\_\_\_\_
- 8. \_\_\_\_\_
- 9. \_\_\_\_\_
- 10. \_\_\_\_\_

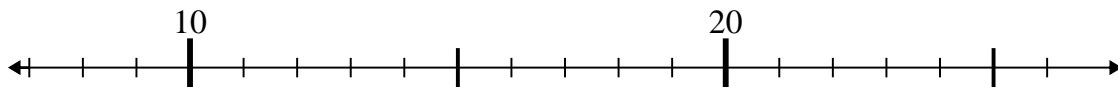


Use the numberlines to solve each problem.

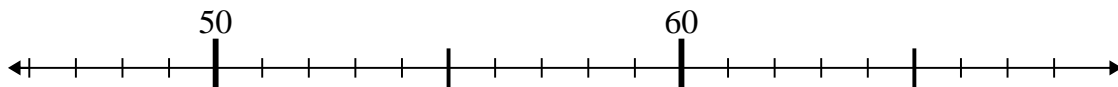
1)  $3 + 17 =$



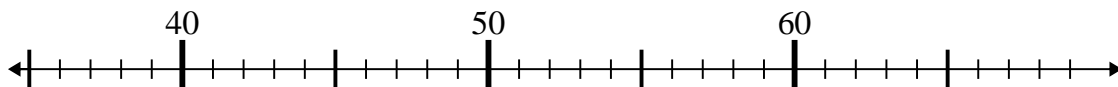
2)  $14 + 9 =$



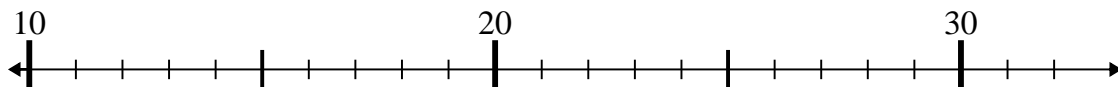
3)  $59 - 8 =$



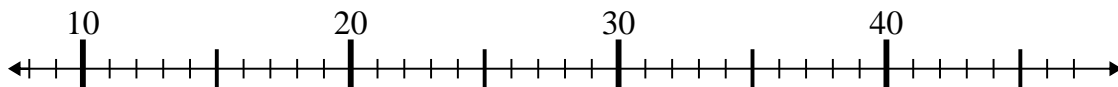
4)  $43 - 5 =$



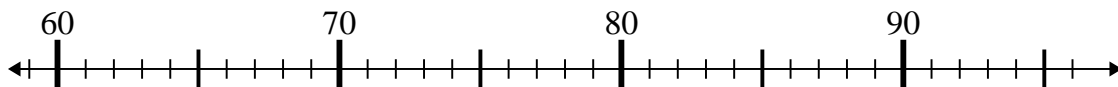
5)  $26 - 14 =$



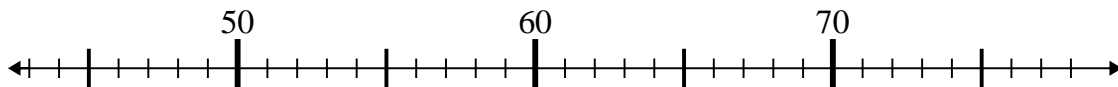
6)  $15 + 23 =$



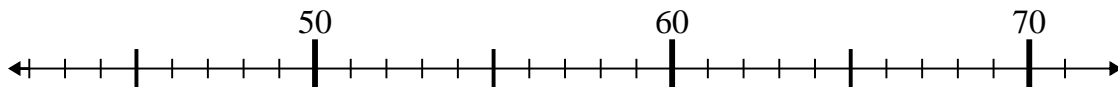
7)  $91 + 2 =$



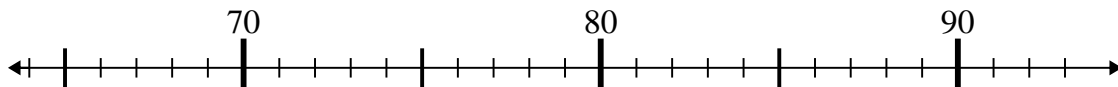
8)  $47 + 1 =$



9)  $71 - 8 =$



10)  $72 + 16 =$



Answers

1. **20**

2. **23**

3. **51**

4. **38**

5. **12**

6. **38**

7. **93**

8. **48**

9. **63**

10. **88**