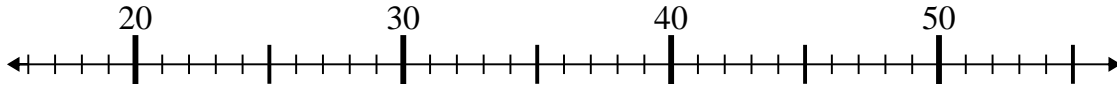




Use the numberlines to solve each problem.

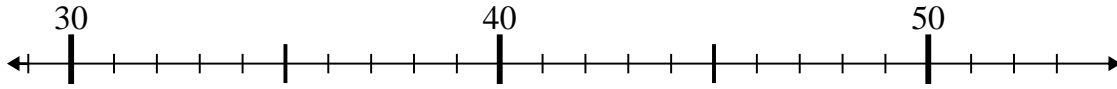
Answers

1) $26 - 4 =$



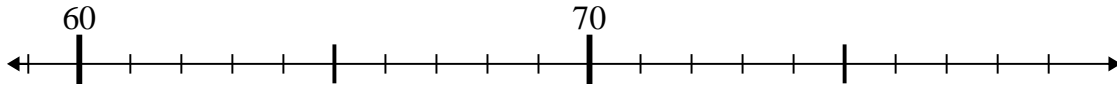
1. _____

2) $45 - 2 =$



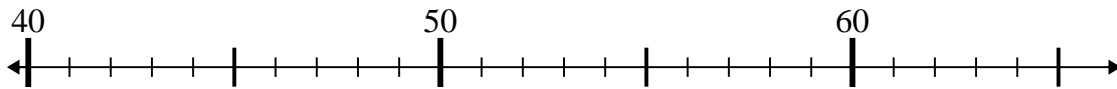
2. _____

3) $62 + 14 =$



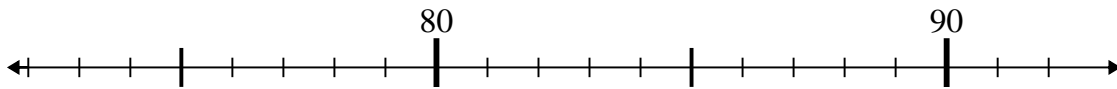
3. _____

4) $51 - 7 =$



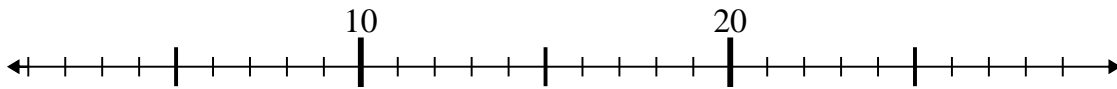
4. _____

5) $76 + 1 =$



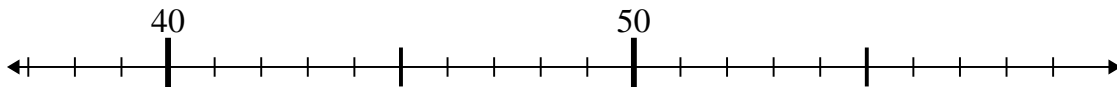
5. _____

6) $27 - 21 =$



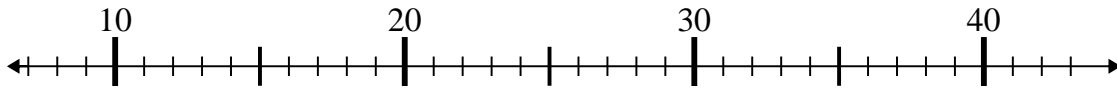
6. _____

7) $55 - 15 =$



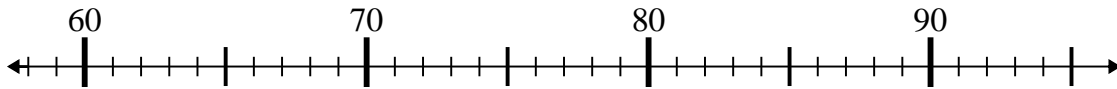
7. _____

8) $31 - 17 =$



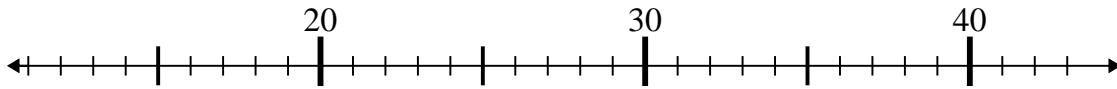
8. _____

9) $66 + 9 =$



9. _____

10) $27 + 15 =$

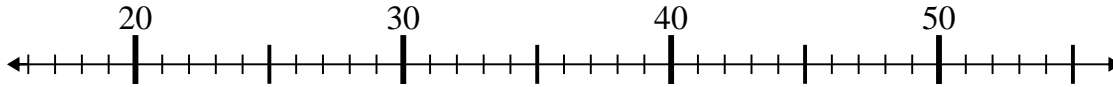


10. _____

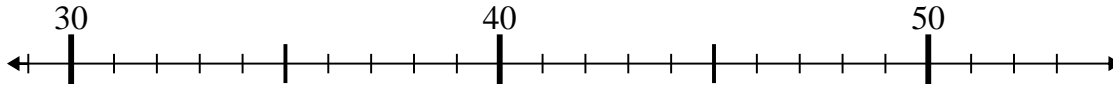


Use the numberlines to solve each problem.

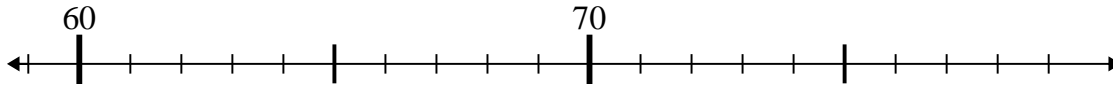
1) $26 - 4 =$



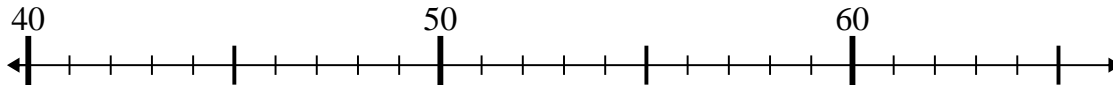
2) $45 - 2 =$



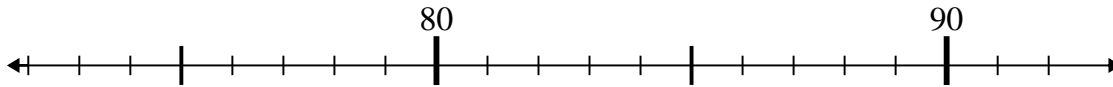
3) $62 + 14 =$



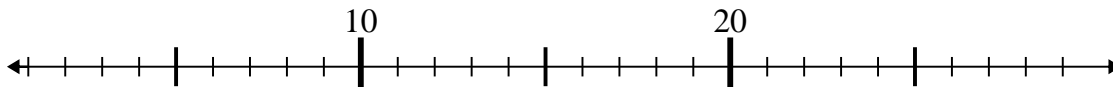
4) $51 - 7 =$



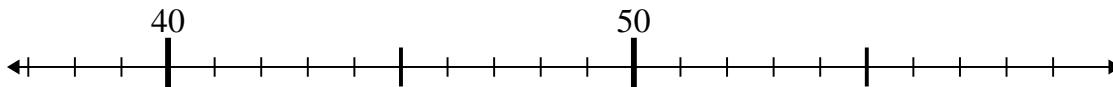
5) $76 + 1 =$



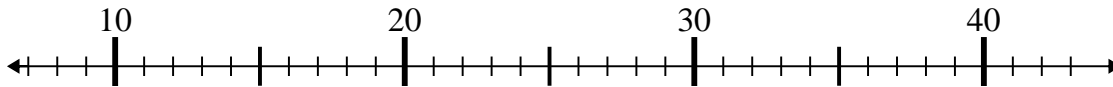
6) $27 - 21 =$



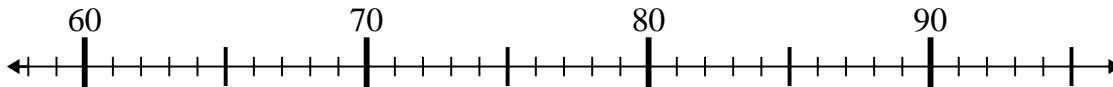
7) $55 - 15 =$



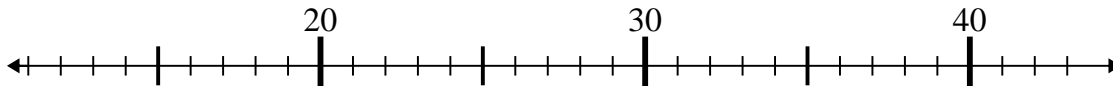
8) $31 - 17 =$



9) $66 + 9 =$



10) $27 + 15 =$

Answers1. 222. 433. 764. 445. 776. 67. 408. 149. 7510. 42