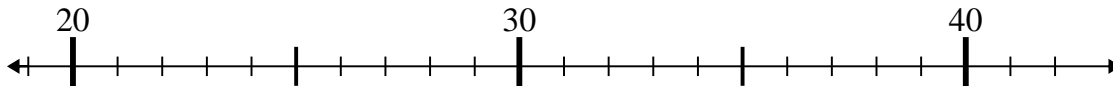




Use the numberlines to solve each problem.

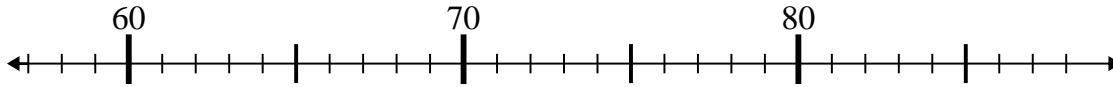
Answers

1) $31 + 4 =$



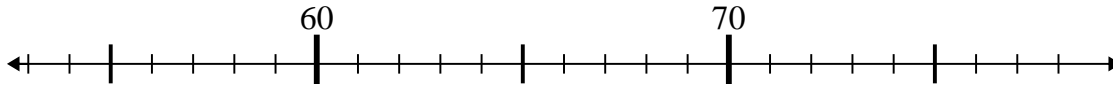
1. _____

2) $76 - 18 =$



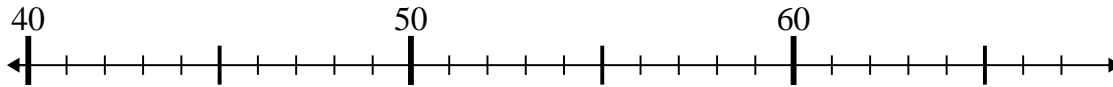
2. _____

3) $57 + 5 =$



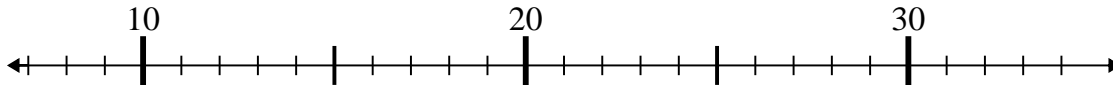
3. _____

4) $40 + 8 =$



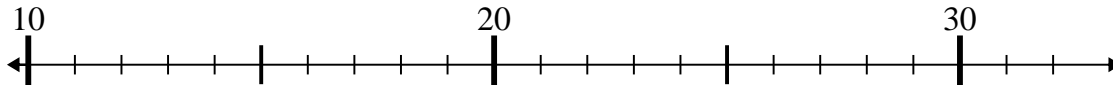
4. _____

5) $8 + 20 =$



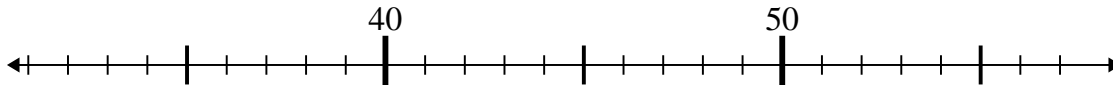
5. _____

6) $13 + 4 =$



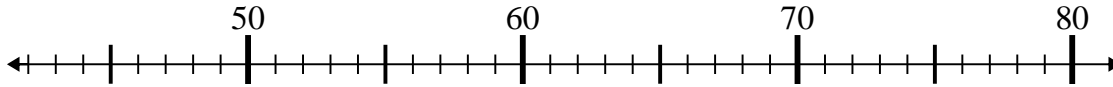
6. _____

7) $56 - 18 =$



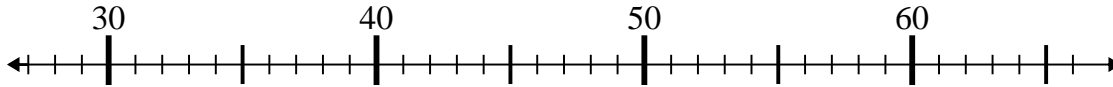
7. _____

8) $61 - 13 =$



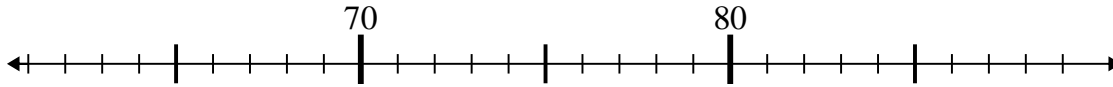
8. _____

9) $40 + 16 =$



9. _____

10) $78 + 3 =$

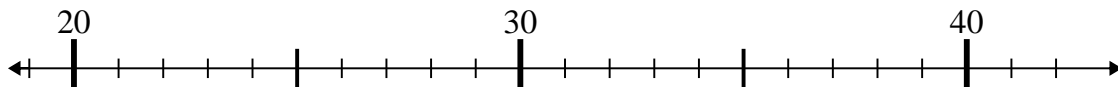


10. _____

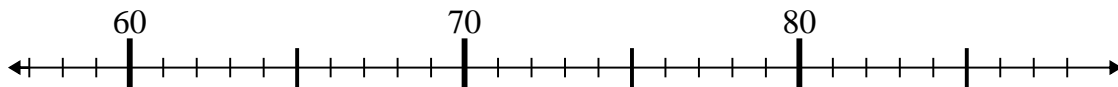


Use the numberlines to solve each problem.

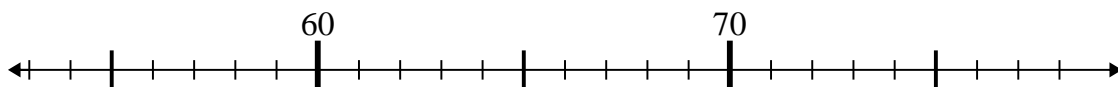
1) $31 + 4 =$



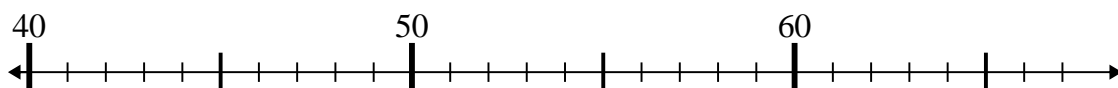
2) $76 - 18 =$



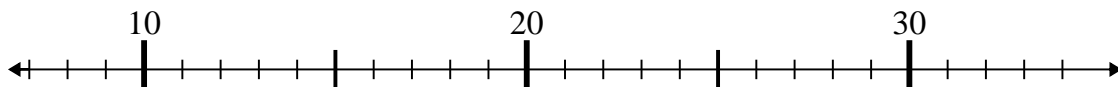
3) $57 + 5 =$



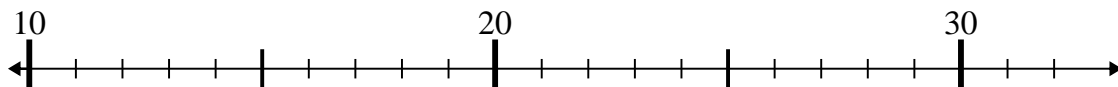
4) $40 + 8 =$



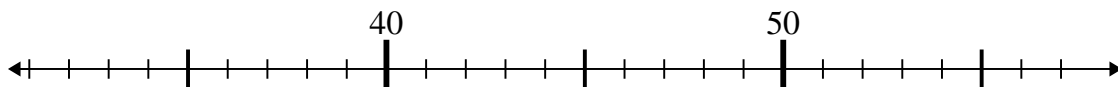
5) $8 + 20 =$



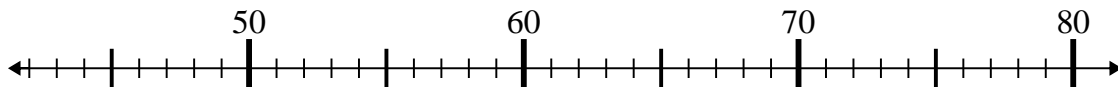
6) $13 + 4 =$



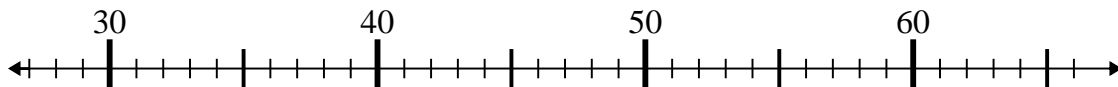
7) $56 - 18 =$



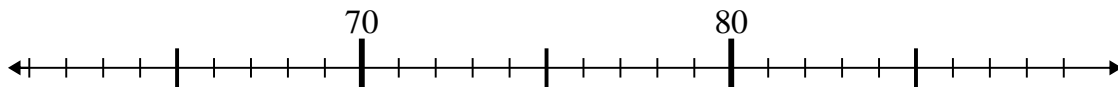
8) $61 - 13 =$



9) $40 + 16 =$



10) $78 + 3 =$



Answers

1. 35

2. 58

3. 62

4. 48

5. 28

6. 17

7. 38

8. 48

9. 56

10. 81