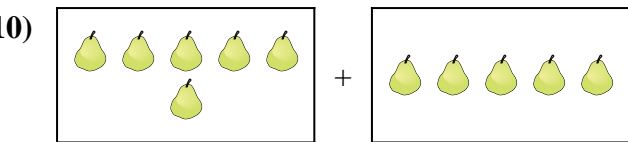
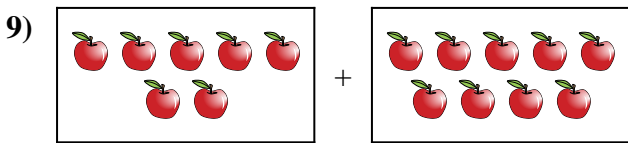
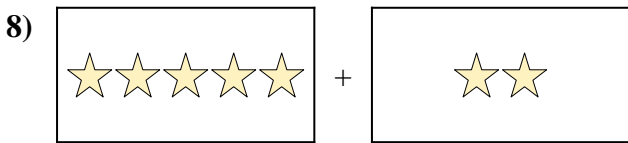
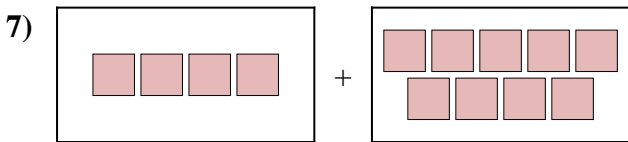
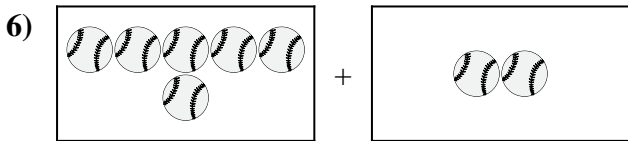
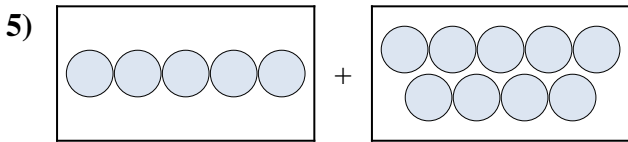
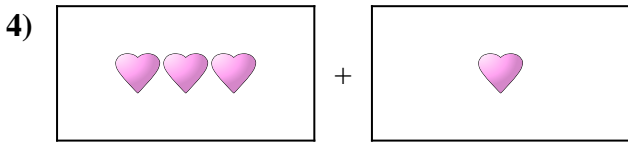

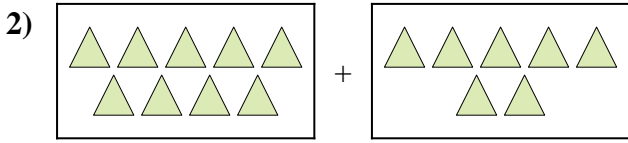
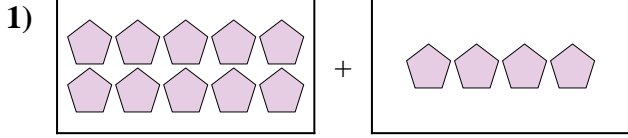




Express the visual problem as an equation with answer.

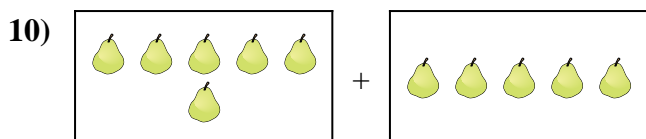
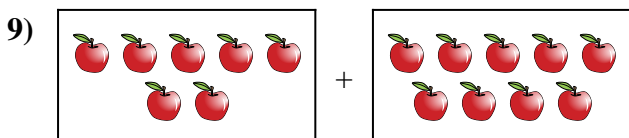
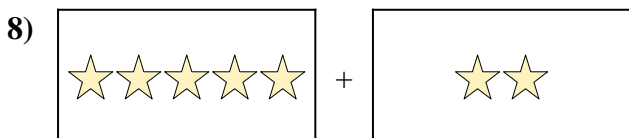
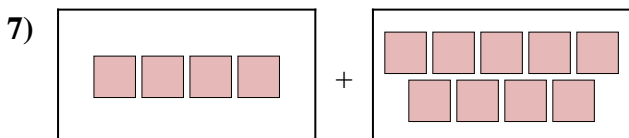
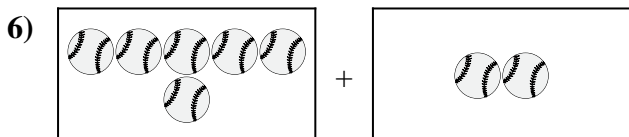
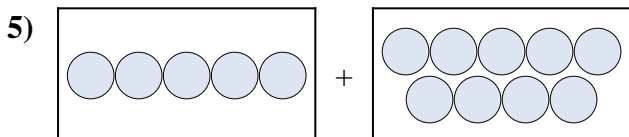
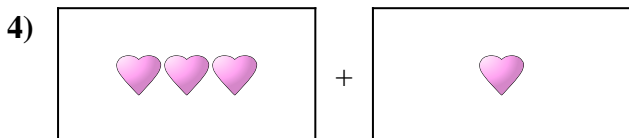

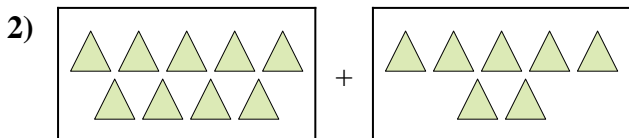
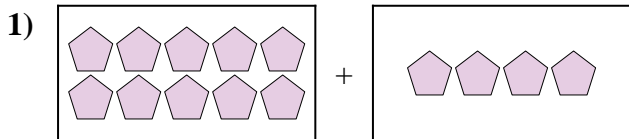
Answers



1. \_\_\_\_\_
2. \_\_\_\_\_
3. \_\_\_\_\_
4. \_\_\_\_\_
5. \_\_\_\_\_
6. \_\_\_\_\_
7. \_\_\_\_\_
8. \_\_\_\_\_
9. \_\_\_\_\_
10. \_\_\_\_\_



Express the visual problem as an equation with answer.



Answers

1. **10 + 4 = 14**

2. **9 + 7 = 16**

3. **5 + 6 = 11**

4. **3 + 1 = 4**

5. **5 + 9 = 14**

6. **6 + 2 = 8**

7. **4 + 9 = 13**

8. **5 + 2 = 7**

9. **7 + 9 = 16**

10. **6 + 5 = 11**