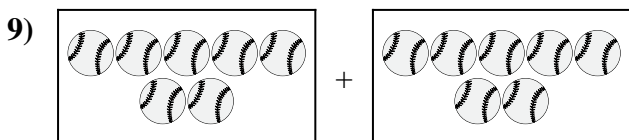
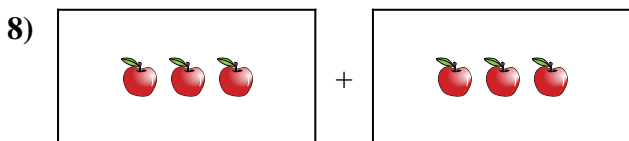
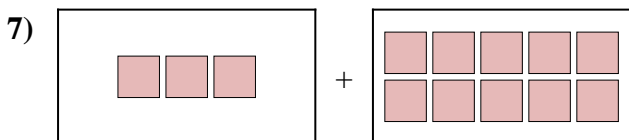
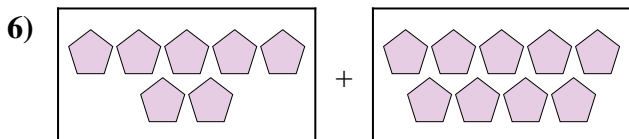
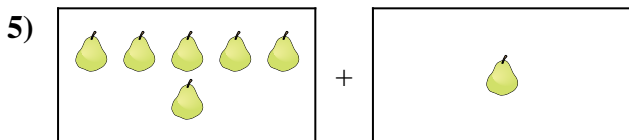
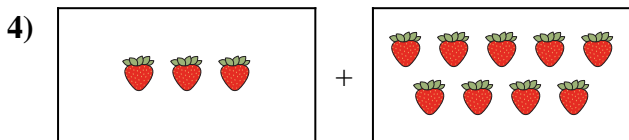
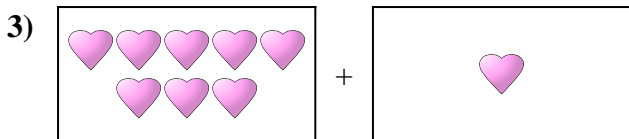
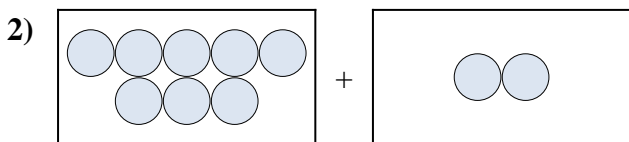





Express the visual problem as an equation with answer.

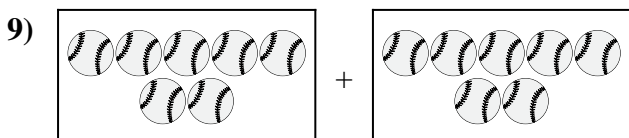
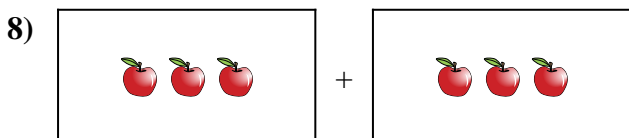
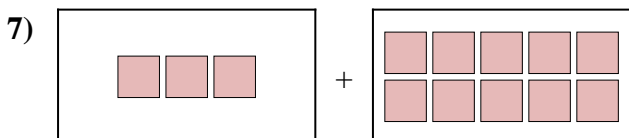
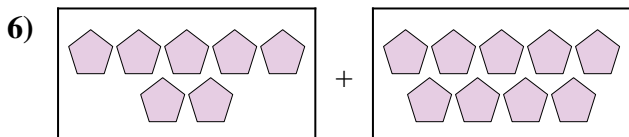
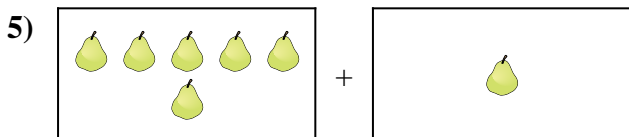
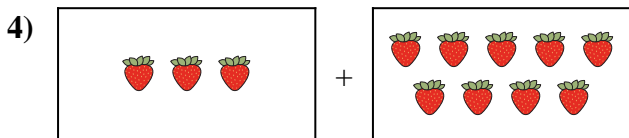
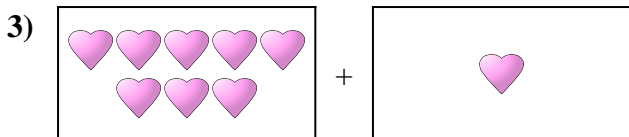
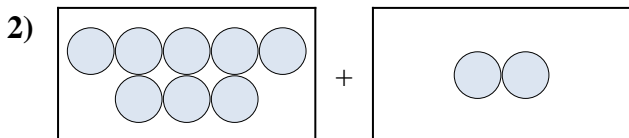

Answers



1. _____
2. _____
3. _____
4. _____
5. _____
6. _____
7. _____
8. _____
9. _____
10. _____



Express the visual problem as an equation with answer.



Answers

1. $9 + 1 = 10$

2. $8 + 2 = 10$

3. $8 + 1 = 9$

4. $3 + 9 = 12$

5. $6 + 1 = 7$

6. $7 + 9 = 16$

7. $3 + 10 = 13$

8. $3 + 3 = 6$

9. $7 + 7 = 14$

10. $5 + 2 = 7$