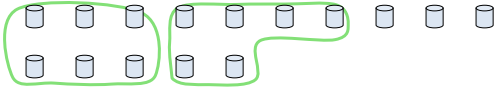




Use the shapes provided to answer the questions.

Answers

Ex) There are 15 shapes below. How many groups of 6 can you make with them? How many will you have left over?

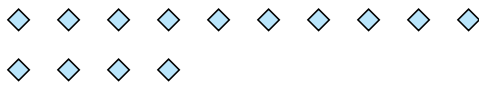


1) There are 20 shapes below. How many groups of 7 can you make with them? How many will you have left over?



Ex. 2 3


2) There are 14 shapes below. How many groups of 7 can you make with them? How many will you have left over?



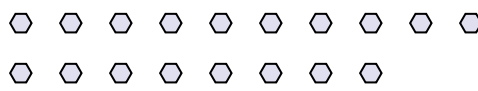
3) There are 10 shapes below. How many groups of 3 can you make with them? How many will you have left over?



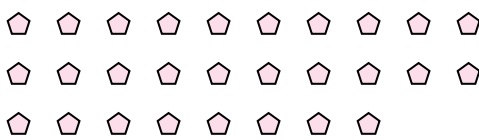
4) There are 13 shapes below. How many groups of 9 can you make with them? How many will you have left over?



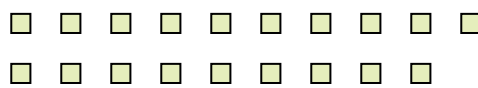
5) There are 18 shapes below. How many groups of 4 can you make with them? How many will you have left over?



6) There are 28 shapes below. How many groups of 2 can you make with them? How many will you have left over?



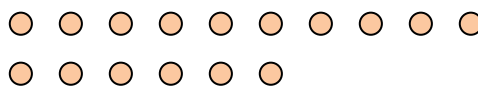
7) There are 19 shapes below. How many groups of 4 can you make with them? How many will you have left over?



8) There are 10 shapes below. How many groups of 6 can you make with them? How many will you have left over?



9) There are 16 shapes below. How many groups of 4 can you make with them? How many will you have left over?



1. _____

2. _____

3. _____

4. _____

5. _____

6. _____

7. _____

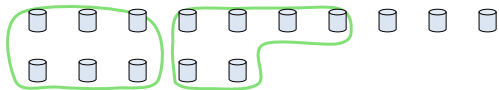
8. _____

9. _____



Use the shapes provided to answer the questions.

Ex) There are 15 shapes below. How many groups of 6 can you make with them? How many will you have left over?



1) There are 20 shapes below. How many groups of 7 can you make with them? How many will you have left over?



Answers

Ex. 2 3

1. 2 6

2. 2 0

3. 3 1

4. 1 4

5. 4 2

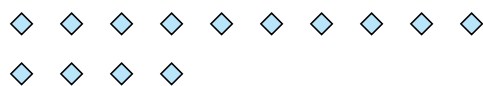
6. 14 0

7. 4 3

8. 1 4

9. 4 0

2) There are 14 shapes below. How many groups of 7 can you make with them? How many will you have left over?



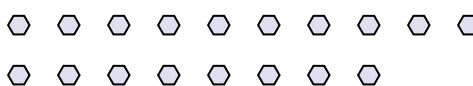
3) There are 10 shapes below. How many groups of 3 can you make with them? How many will you have left over?



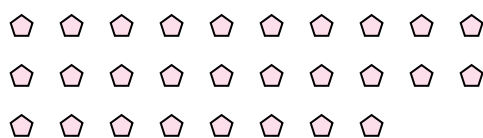
4) There are 13 shapes below. How many groups of 9 can you make with them? How many will you have left over?



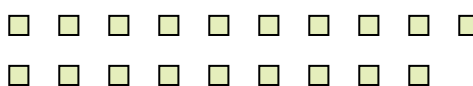
5) There are 18 shapes below. How many groups of 4 can you make with them? How many will you have left over?



6) There are 28 shapes below. How many groups of 2 can you make with them? How many will you have left over?



7) There are 19 shapes below. How many groups of 4 can you make with them? How many will you have left over?



8) There are 10 shapes below. How many groups of 6 can you make with them? How many will you have left over?



9) There are 16 shapes below. How many groups of 4 can you make with them? How many will you have left over?

