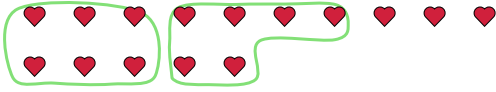




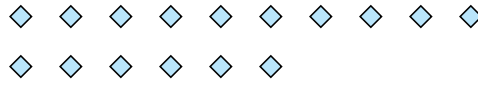
Use the shapes provided to answer the questions.

**Answers**

Ex) There are 15 shapes below. How many groups of 6 can you make with them? How many will you have left over?

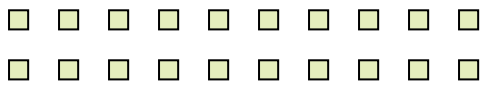


1) There are 16 shapes below. How many groups of 7 can you make with them? How many will you have left over?



Ex. 2 3

2) There are 20 shapes below. How many groups of 6 can you make with them? How many will you have left over?



3) There are 21 shapes below. How many groups of 4 can you make with them? How many will you have left over?



1. \_\_\_\_\_

2. \_\_\_\_\_

3. \_\_\_\_\_

4. \_\_\_\_\_

5. \_\_\_\_\_

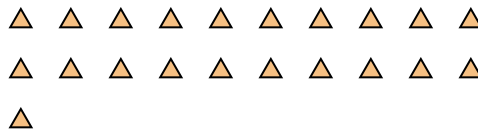
6. \_\_\_\_\_

7. \_\_\_\_\_

4) There are 11 shapes below. How many groups of 9 can you make with them? How many will you have left over?



5) There are 21 shapes below. How many groups of 6 can you make with them? How many will you have left over?



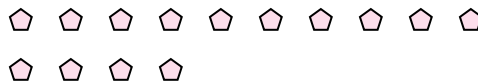
8. \_\_\_\_\_

9. \_\_\_\_\_

6) There are 12 shapes below. How many groups of 3 can you make with them? How many will you have left over?



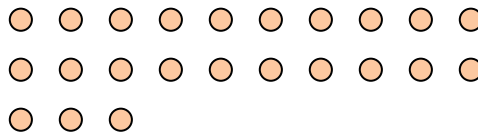
7) There are 14 shapes below. How many groups of 5 can you make with them? How many will you have left over?



8) There are 12 shapes below. How many groups of 7 can you make with them? How many will you have left over?



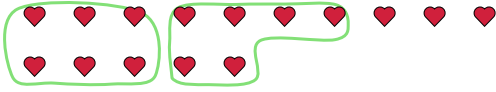
9) There are 23 shapes below. How many groups of 5 can you make with them? How many will you have left over?



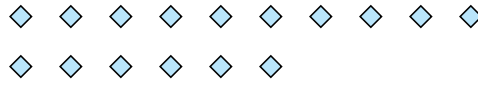


Use the shapes provided to answer the questions.

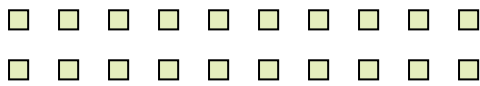
Ex) There are 15 shapes below. How many groups of 6 can you make with them? How many will you have left over?



1) There are 16 shapes below. How many groups of 7 can you make with them? How many will you have left over?



2) There are 20 shapes below. How many groups of 6 can you make with them? How many will you have left over?



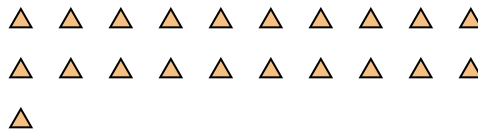
3) There are 21 shapes below. How many groups of 4 can you make with them? How many will you have left over?



4) There are 11 shapes below. How many groups of 9 can you make with them? How many will you have left over?



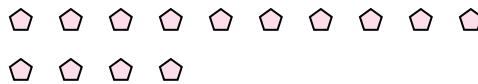
5) There are 21 shapes below. How many groups of 6 can you make with them? How many will you have left over?



6) There are 12 shapes below. How many groups of 3 can you make with them? How many will you have left over?



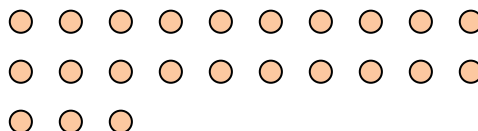
7) There are 14 shapes below. How many groups of 5 can you make with them? How many will you have left over?



8) There are 12 shapes below. How many groups of 7 can you make with them? How many will you have left over?



9) There are 23 shapes below. How many groups of 5 can you make with them? How many will you have left over?



Answers

Ex.	<u>2</u>	<u>3</u>
1.	<u>2</u>	<u>2</u>
2.	<u>3</u>	<u>2</u>
3.	<u>5</u>	<u>1</u>
4.	<u>1</u>	<u>2</u>
5.	<u>3</u>	<u>3</u>
6.	<u>4</u>	<u>0</u>
7.	<u>2</u>	<u>4</u>
8.	<u>1</u>	<u>5</u>
9.	<u>4</u>	<u>3</u>