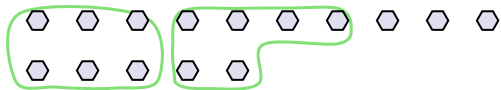


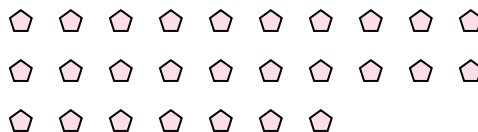


Use the shapes provided to answer the questions.

Ex) There are 15 shapes below. How many groups of 6 can you make with them? How many will you have left over?



1) There are 27 shapes below. How many groups of 5 can you make with them? How many will you have left over?



Answers

Ex. 2 3

1. _____

2. _____

3. _____

4. _____

5. _____

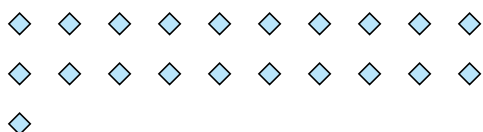
6. _____

7. _____

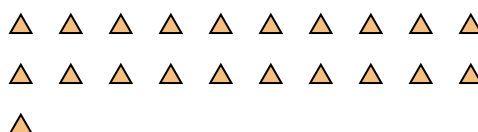
8. _____

9. _____


2) There are 21 shapes below. How many groups of 4 can you make with them? How many will you have left over?



3) There are 21 shapes below. How many groups of 2 can you make with them? How many will you have left over?



4) There are 27 shapes below. How many groups of 4 can you make with them? How many will you have left over?



5) There are 12 shapes below. How many groups of 9 can you make with them? How many will you have left over?



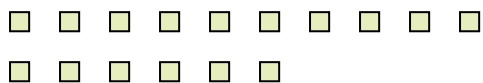
6) There are 17 shapes below. How many groups of 9 can you make with them? How many will you have left over?



7) There are 15 shapes below. How many groups of 6 can you make with them? How many will you have left over?



8) There are 16 shapes below. How many groups of 2 can you make with them? How many will you have left over?



9) There are 26 shapes below. How many groups of 9 can you make with them? How many will you have left over?



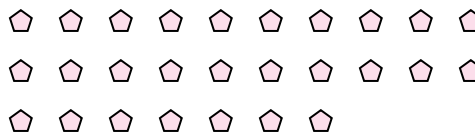


Use the shapes provided to answer the questions.

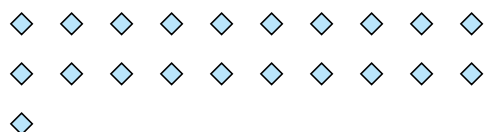
Ex) There are 15 shapes below. How many groups of 6 can you make with them? How many will you have left over?



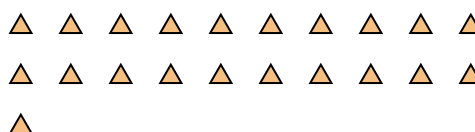
1) There are 27 shapes below. How many groups of 5 can you make with them? How many will you have left over?




2) There are 21 shapes below. How many groups of 4 can you make with them? How many will you have left over?



3) There are 21 shapes below. How many groups of 2 can you make with them? How many will you have left over?



4) There are 27 shapes below. How many groups of 4 can you make with them? How many will you have left over?



5) There are 12 shapes below. How many groups of 9 can you make with them? How many will you have left over?



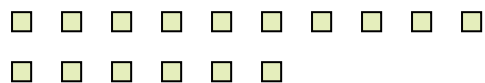
6) There are 17 shapes below. How many groups of 9 can you make with them? How many will you have left over?




7) There are 15 shapes below. How many groups of 6 can you make with them? How many will you have left over?



8) There are 16 shapes below. How many groups of 2 can you make with them? How many will you have left over?



9) There are 26 shapes below. How many groups of 9 can you make with them? How many will you have left over?



Answers

Ex. 2 3

1. 5 2

2. 5 1

3. 10 1

4. 6 3

5. 1 3

6. 1 8

7. 2 3

8. 8 0

9. 2 8