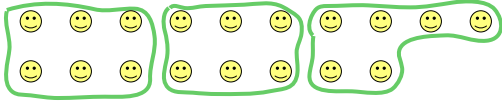







Use the shapes provided to answer the questions.

Ex) How many groups of 6 can you make with the 18 shapes below?



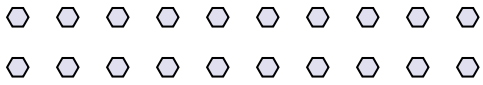
1) How many groups of 2 can you make with the 8 shapes below?




Answers

Ex. 3

2) How many groups of 4 can you make with the 20 shapes below?



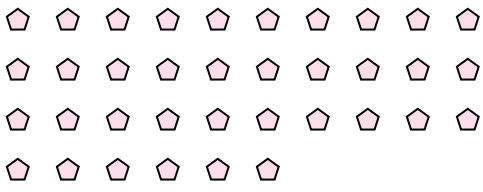
3) How many groups of 2 can you make with the 38 shapes below?



1. 4

2. 5

4) How many groups of 9 can you make with the 36 shapes below?



5) How many groups of 4 can you make with the 8 shapes below?




3. 19

4. 4


5. 2

6. 4

6) How many groups of 6 can you make with the 24 shapes below?



7) How many groups of 4 can you make with the 20 shapes below?



7. 5

8. 8

9. 12

10. 3

11. 3

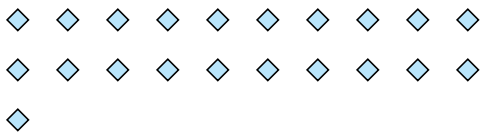
8) How many groups of 4 can you make with the 32 shapes below?



9) How many groups of 2 can you make with the 24 shapes below?



10) How many groups of 7 can you make with the 21 shapes below?



11) How many groups of 5 can you make with the 15 shapes below?

