




Use the shapes provided to answer the questions.

Answers

Ex) How many groups of 6 can you make with the 18 shapes below?

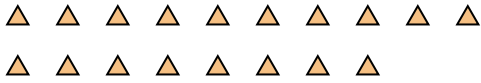


1) How many groups of 3 can you make with the 9 shapes below?

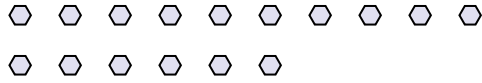


Ex. 3

2) How many groups of 6 can you make with the 18 shapes below?



3) How many groups of 8 can you make with the 16 shapes below?



1. _____

2. _____

3. _____

4. _____

5. _____

6. _____

7. _____

8. _____

9. _____

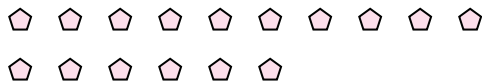
10. _____

11. _____

4) How many groups of 4 can you make with the 8 shapes below?



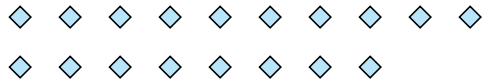
5) How many groups of 8 can you make with the 16 shapes below?




6) How many groups of 2 can you make with the 24 shapes below?



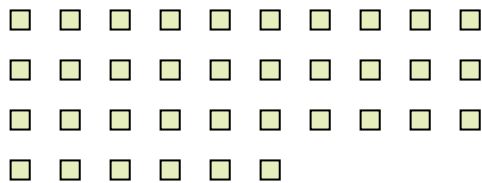
7) How many groups of 2 can you make with the 18 shapes below?



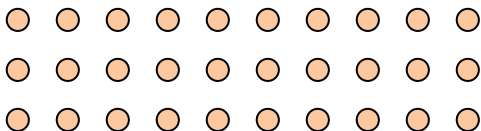
8) How many groups of 9 can you make with the 27 shapes below?



9) How many groups of 9 can you make with the 36 shapes below?



10) How many groups of 6 can you make with the 30 shapes below?




11) How many groups of 3 can you make with the 39 shapes below?





Use the shapes provided to answer the questions.

Ex) How many groups of 6 can you make with the 18 shapes below?



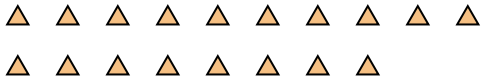
1) How many groups of 3 can you make with the 9 shapes below?



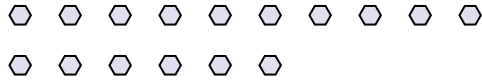
Answers

Ex. 3

2) How many groups of 6 can you make with the 18 shapes below?



3) How many groups of 8 can you make with the 16 shapes below?



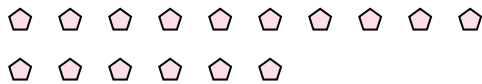
1. 3

2. 3

4) How many groups of 4 can you make with the 8 shapes below?



5) How many groups of 8 can you make with the 16 shapes below?



3. 2

4. 2

5. 2

6. 12

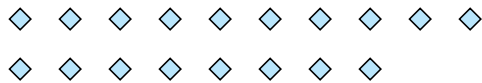
7. 9

8. 3

6) How many groups of 2 can you make with the 24 shapes below?



7) How many groups of 2 can you make with the 18 shapes below?




9. 4


10. 5

11. 13

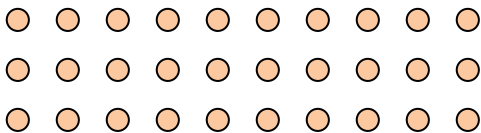
8) How many groups of 9 can you make with the 27 shapes below?



9) How many groups of 9 can you make with the 36 shapes below?



10) How many groups of 6 can you make with the 30 shapes below?



11) How many groups of 3 can you make with the 39 shapes below?

