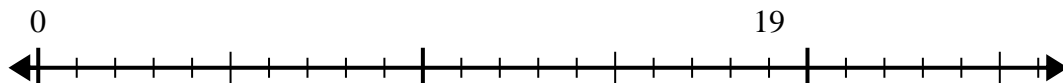


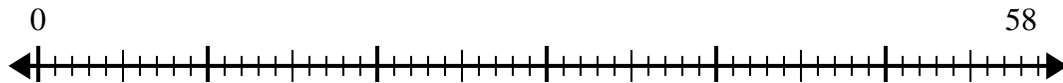


Use the number line to solve the division problem.

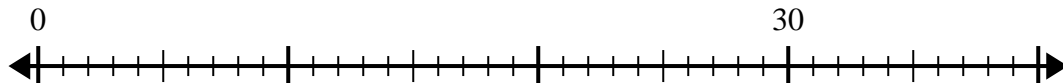
1) $19 \div 5 =$



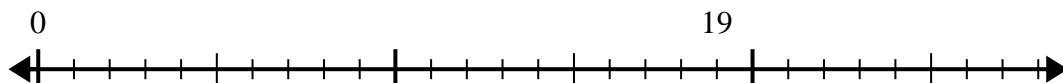
2) $58 \div 7 =$



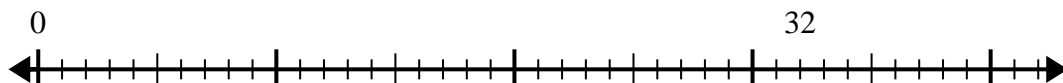
3) $30 \div 7 =$



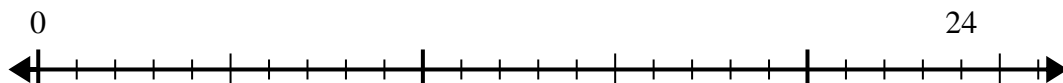
4) $19 \div 6 =$



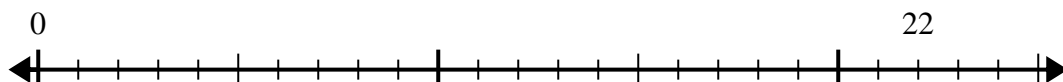
5) $32 \div 5 =$



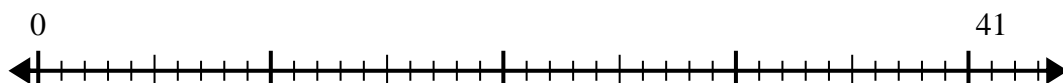
6) $24 \div 5 =$



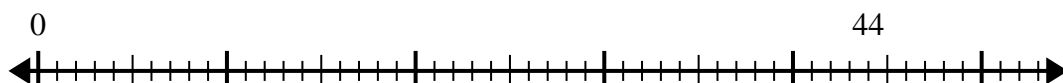
7) $22 \div 4 =$



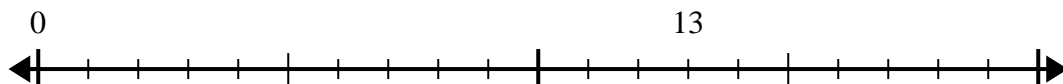
8) $41 \div 8 =$



9) $44 \div 5 =$



10) $13 \div 4 =$



Answers

1. _____

2. _____

3. _____

4. _____

5. _____

6. _____

7. _____

8. _____

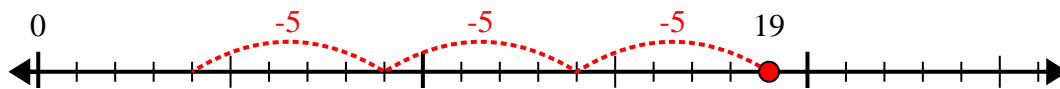
9. _____

10. _____

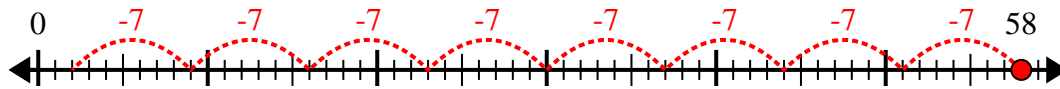


Use the number line to solve the division problem.

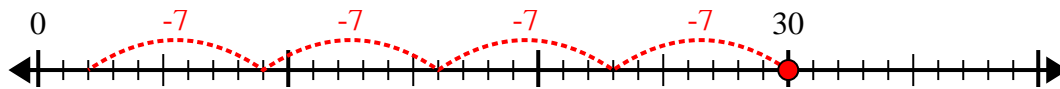
1) $19 \div 5 =$



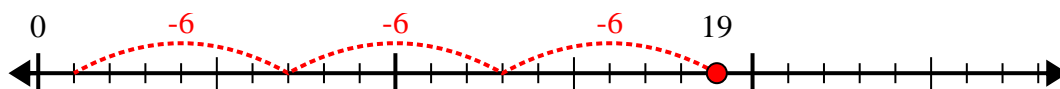
2) $58 \div 7 =$



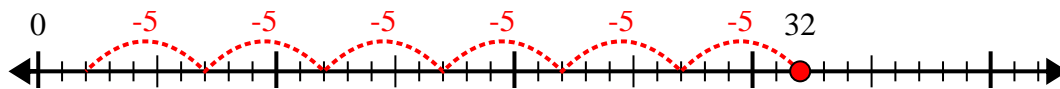
3) $30 \div 7 =$



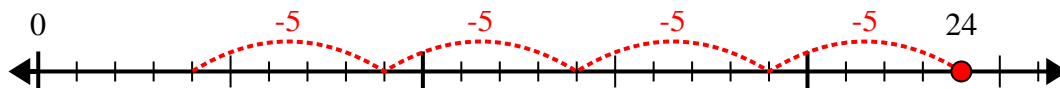
4) $19 \div 6 =$



5) $32 \div 5 =$



6) $24 \div 5 =$



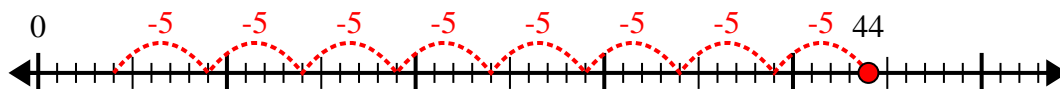
7) $22 \div 4 =$



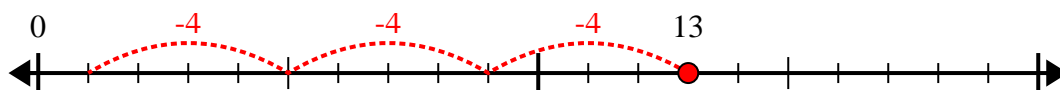
8) $41 \div 8 =$



9) $44 \div 5 =$



10) $13 \div 4 =$



Answers

1. 3r4

2. 8r2

3. 4r2

4. 3r1

5. 6r2

6. 4r4

7. 5r2

8. 5r1

9. 8r4

10. 3r1