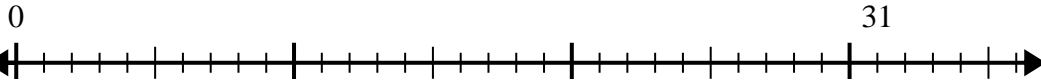




Use the number line to solve the division problem.

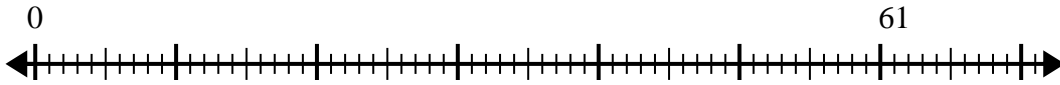
Answers

1) $31 \div 8 =$



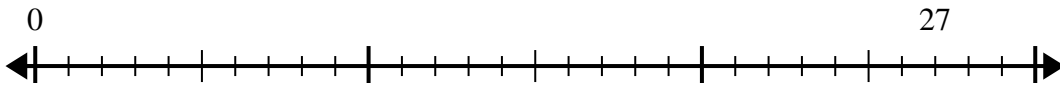
1. _____

2) $61 \div 8 =$



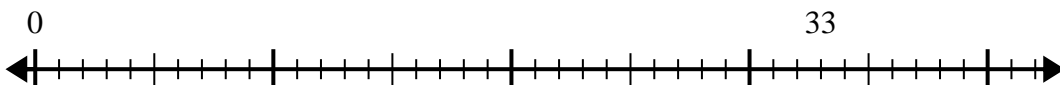
2. _____

3) $27 \div 4 =$



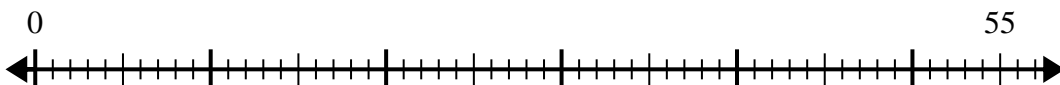
3. _____

4) $33 \div 4 =$



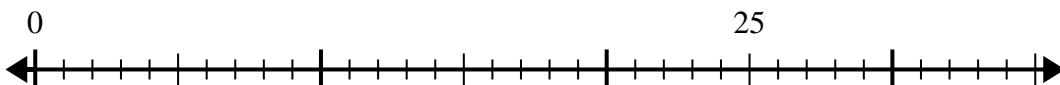
4. _____

5) $55 \div 8 =$



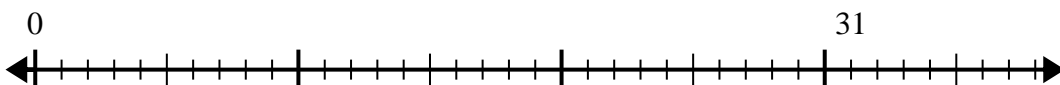
5. _____

6) $25 \div 6 =$



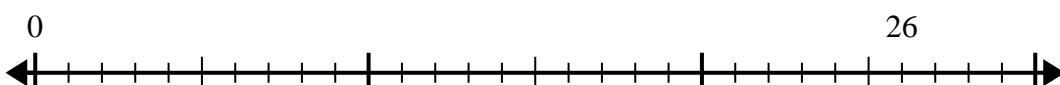
6. _____

7) $31 \div 4 =$



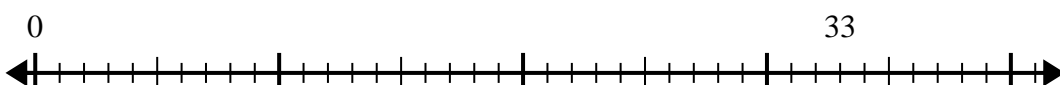
7. _____

8) $26 \div 7 =$



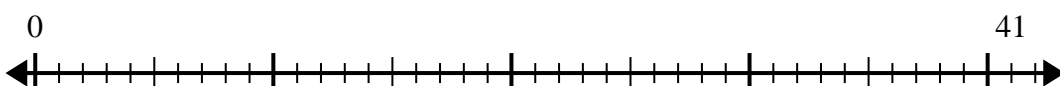
8. _____

9) $33 \div 7 =$



9. _____

10) $41 \div 5 =$

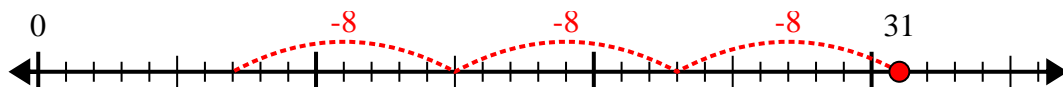


10. _____

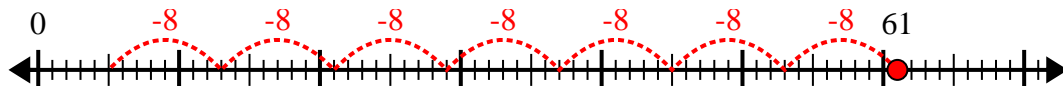


Use the number line to solve the division problem.

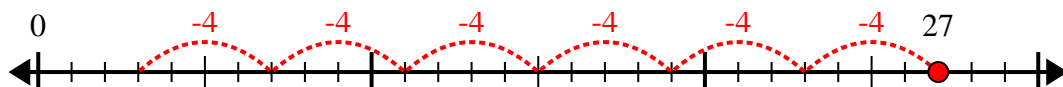
1) $31 \div 8 =$



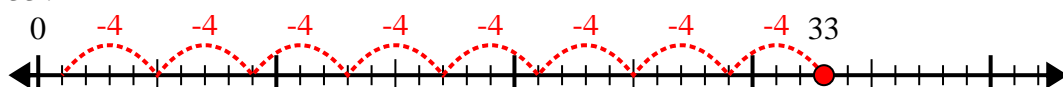
2) $61 \div 8 =$



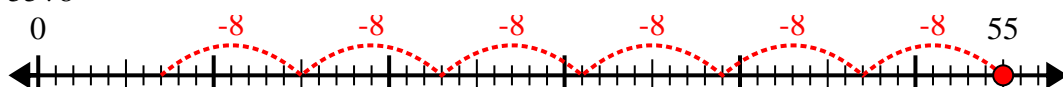
3) $27 \div 4 =$



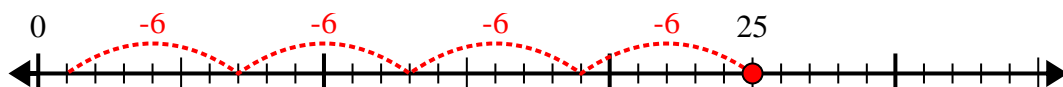
4) $33 \div 4 =$



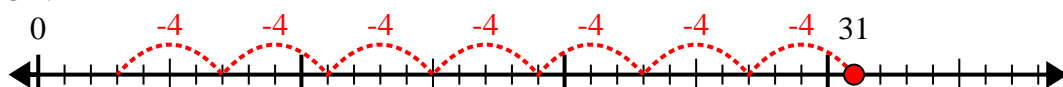
5) $55 \div 8 =$



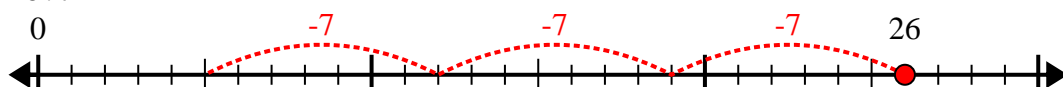
6) $25 \div 6 =$



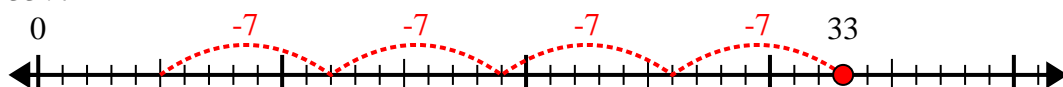
7) $31 \div 4 =$



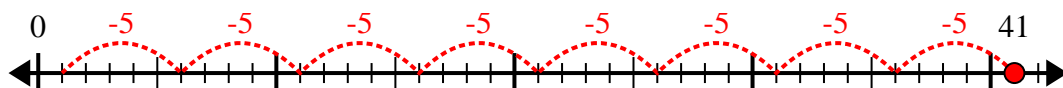
8) $26 \div 7 =$



9) $33 \div 7 =$



10) $41 \div 5 =$



Answers

1. 3r7

2. 7r5

3. 6r3

4. 8r1

5. 6r7

6. 4r1

7. 7r3

8. 3r5

9. 4r5

10. 8r1