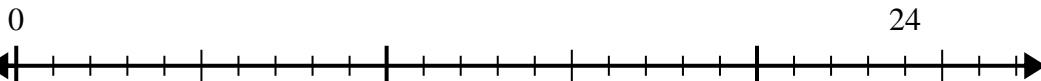


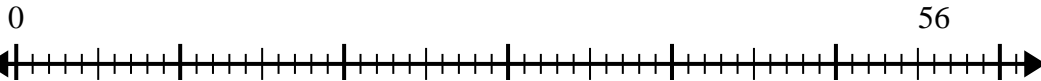


Use the number line to solve the division problem.

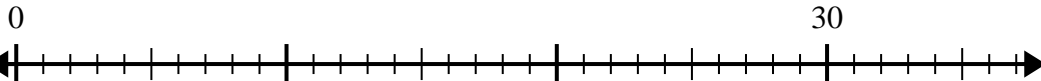
1) $24 \div 6 =$



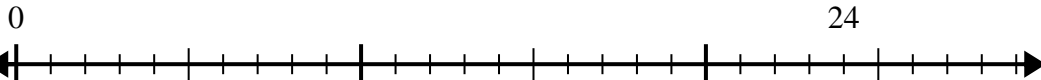
2) $56 \div 7 =$



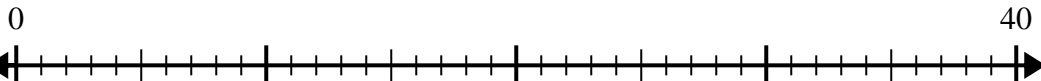
3) $30 \div 6 =$



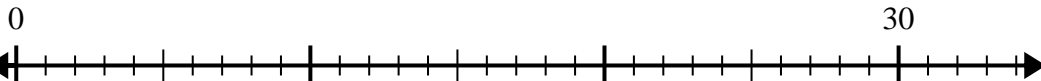
4) $24 \div 4 =$



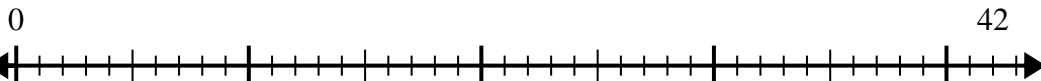
5) $40 \div 8 =$



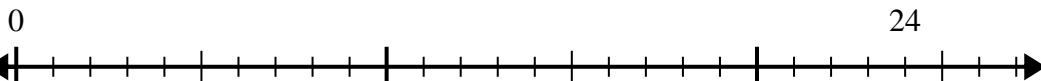
6) $30 \div 5 =$



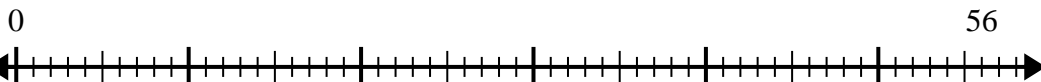
7) $42 \div 6 =$



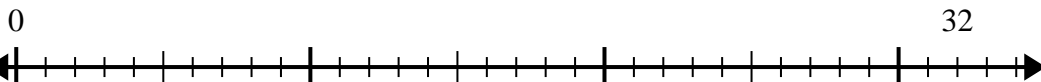
8) $24 \div 8 =$



9) $56 \div 8 =$



10) $32 \div 8 =$



Answers

1. _____

2. _____

3. _____

4. _____

5. _____

6. _____

7. _____

8. _____

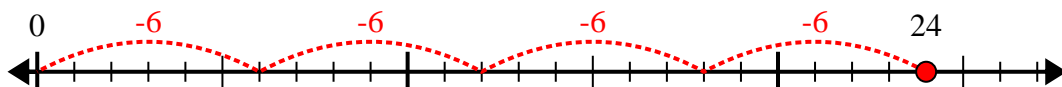
9. _____

10. _____

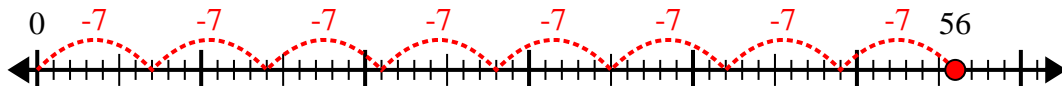


Use the number line to solve the division problem.

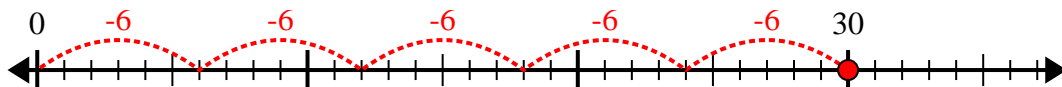
1) $24 \div 6 =$



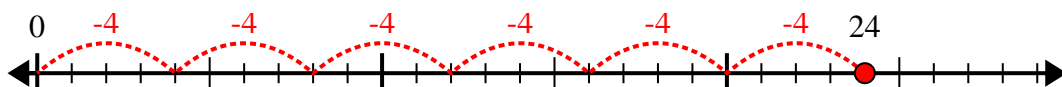
2) $56 \div 7 =$



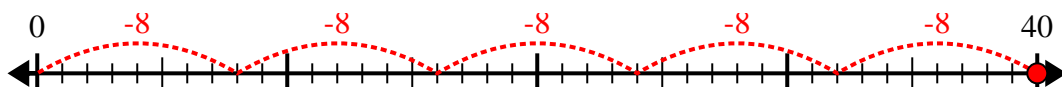
3) $30 \div 6 =$



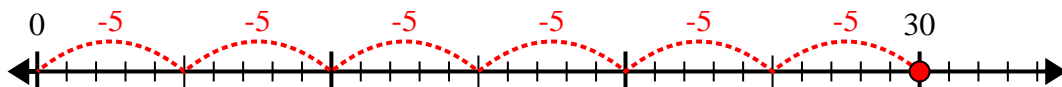
4) $24 \div 4 =$



5) $40 \div 8 =$



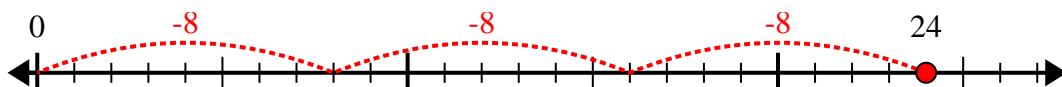
6) $30 \div 5 =$



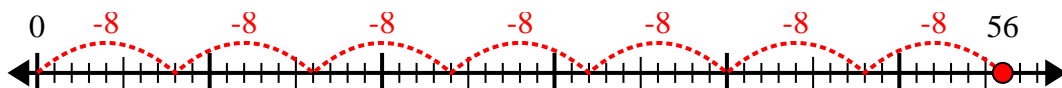
7) $42 \div 6 =$



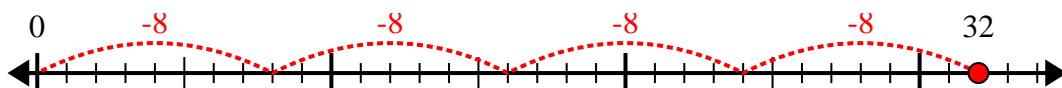
8) $24 \div 8 =$



9) $56 \div 8 =$



10) $32 \div 8 =$



Answers

1. 4

2. 8

3. 5

4. 6

5. 5

6. 6

7. 7

8. 3

9. 7

10. 4