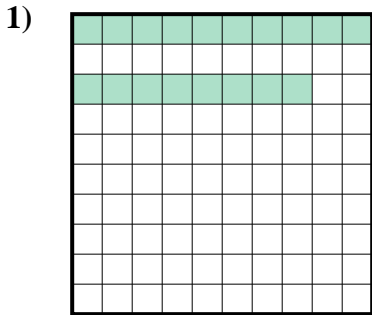


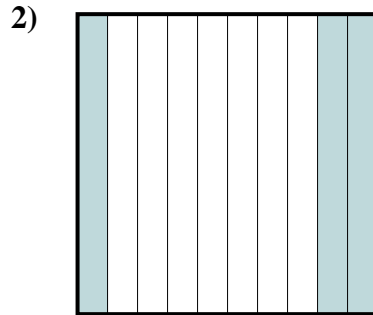


Determine which letter best represents the amount shaded of the whole.

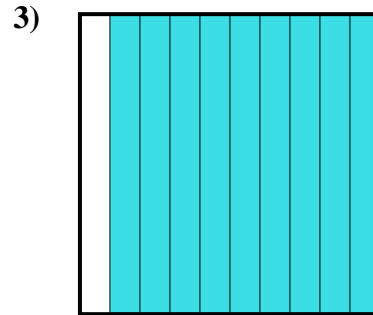
Answers



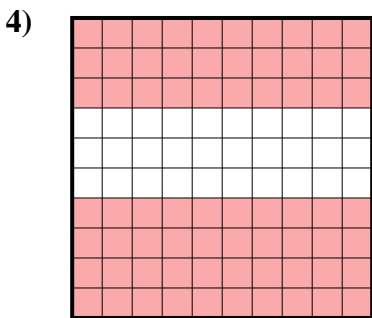
- A. 0.18
- B. 180.00
- C. 0.018
- D. 180.0



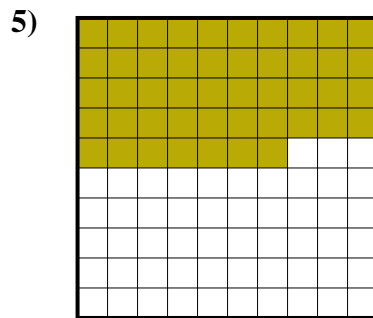
- A. 300.0
- B. 30
- C. 3
- D. 0.3




- A. 90
- B. 0.09
- C. 0.9
- D. 900.00



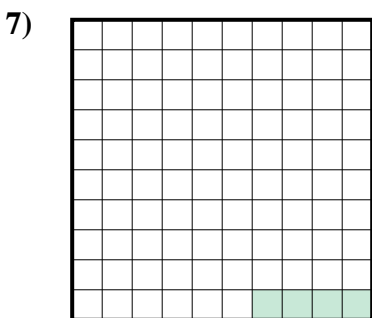
- A. 0.7
- B. 700.0
- C. 700.00
- D. 70



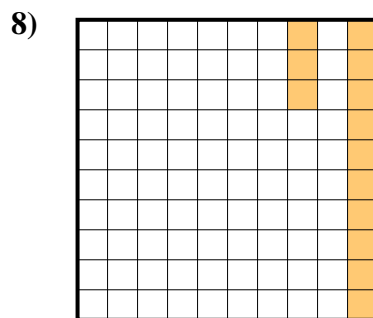
- A. 470.0
- B. 0.047
- C. 0.47
- D. 470.00



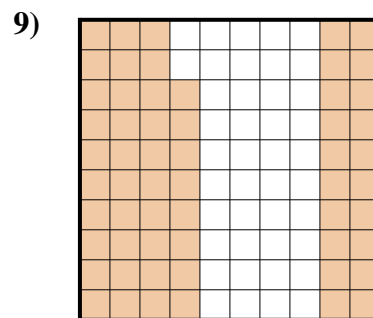
- A. 0.5
- B. 50
- C. 0.05
- D. 5



- A. 0.004
- B. 40.0
- C. 0.04
- D. 0.4



- A. 13
- B. 0.13
- C. 1.3
- D. 130.0



- A. 0.058
- B. 580.00
- C. 0.58
- D. 580.0

1. _____

2. _____

3. _____

4. _____

5. _____

6. _____

7. _____


8. _____

9. _____

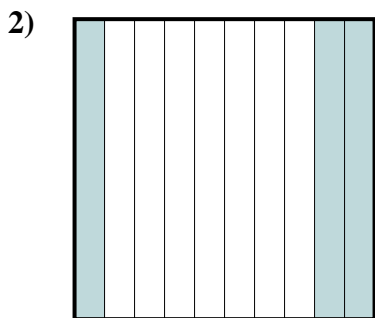


Determine which letter best represents the amount shaded of the whole.

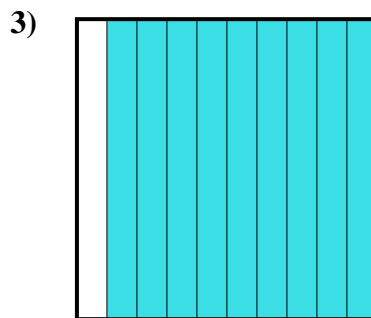
Answers



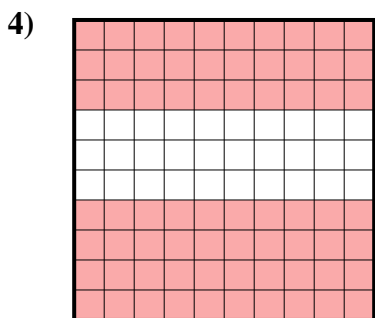
- A. 0.18
- B. 180.00
- C. 0.018
- D. 180.0



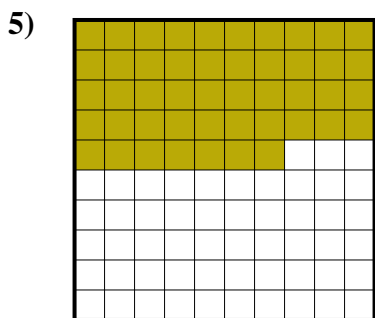
- A. 300.0
- B. 30
- C. 3
- D. 0.3




- A. 90
- B. 0.09
- C. 0.9
- D. 900.00



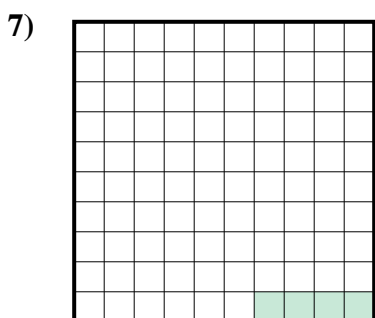
- A. 0.7
- B. 700.0
- C. 700.00
- D. 70



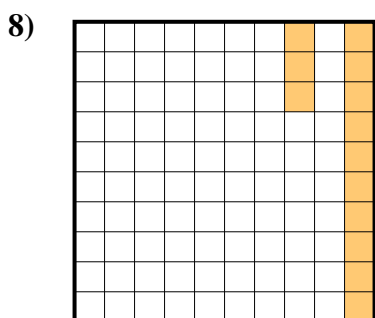
- A. 470.0
- B. 0.047
- C. 0.47
- D. 470.00



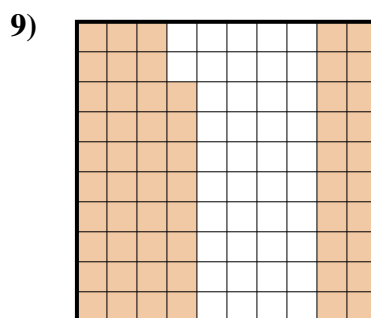
- A. 0.5
- B. 50
- C. 0.05
- D. 5



- A. 0.004
- B. 40.0
- C. 0.04
- D. 0.4



- A. 13
- B. 0.13
- C. 1.3
- D. 130.0



- A. 0.058
- B. 580.00
- C. 0.58
- D. 580.0

- 1. **A**
- 2. **D**
- 3. **C**
- 4. **A**
- 5. **C**
- 6. **A**
- 7. **C**
- 8. **B**
- 9. **C**