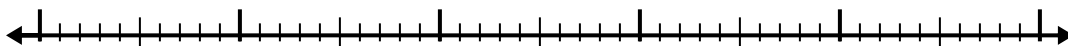


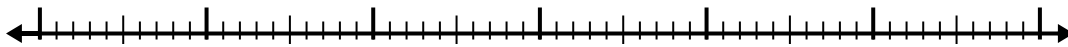


Use the number line to solve each problem.

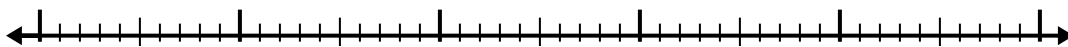
1) $10.1 - 2.8 =$



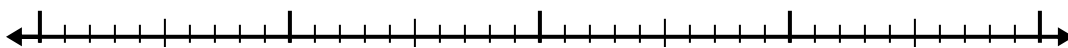
2) $10.8 - 3.7 =$



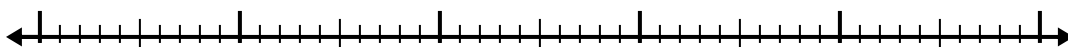
3) $6 - 2.3 =$



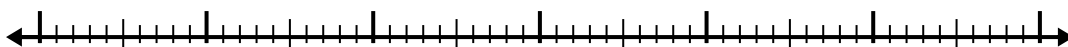
4) $10.4 - 1.8 =$




5) $8.5 - 2.9 =$




6) $7.2 - 3.7 =$



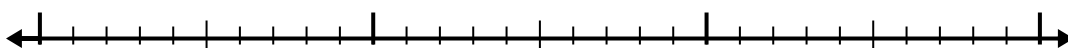
7) $6.2 - 3.6 =$



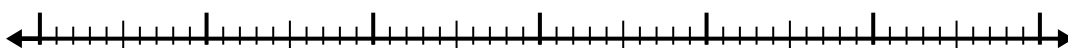
8) $6.7 - 1.6 =$



9) $3.2 - 1.6 =$



10) $5.8 - 3.5 =$



Answers

1. _____

2. _____

3. _____

4. _____

5. _____

6. _____

7. _____

8. _____

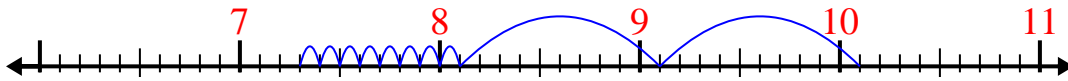
9. _____

10. _____

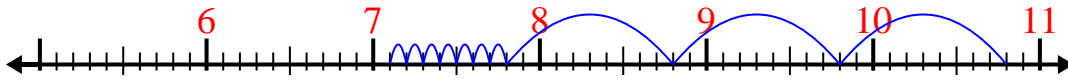


Use the number line to solve each problem.

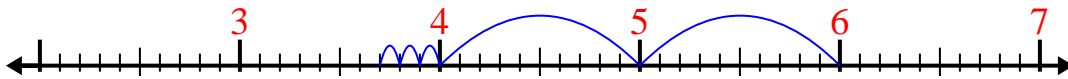
1) $10.1 - 2.8 =$



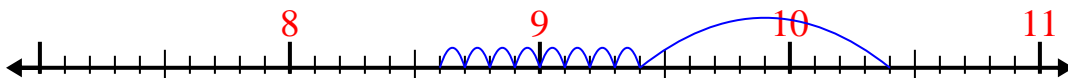
2) $10.8 - 3.7 =$



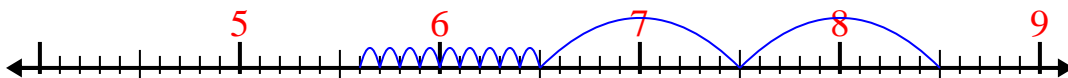
3) $6 - 2.3 =$



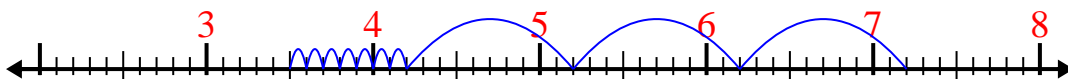
4) $10.4 - 1.8 =$



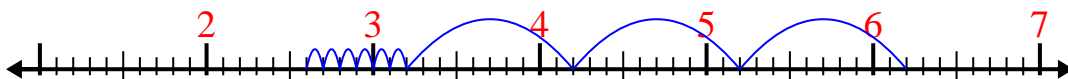
5) $8.5 - 2.9 =$



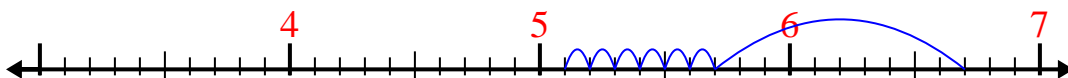
6) $7.2 - 3.7 =$



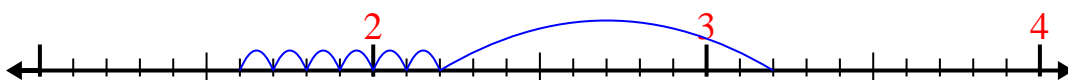
7) $6.2 - 3.6 =$



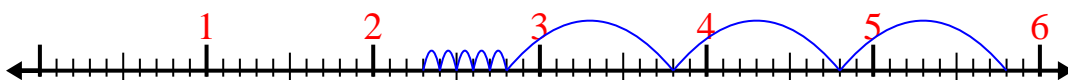
8) $6.7 - 1.6 =$



9) $3.2 - 1.6 =$



10) $5.8 - 3.5 =$

Answers1. 7.32. 7.13. 3.74. 8.65. 5.66. 3.57. 2.68. 5.19. 1.610. 2.3