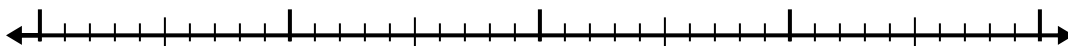


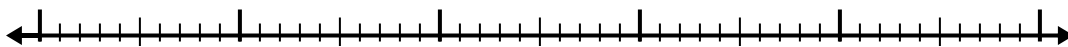


Use the number line to solve each problem.

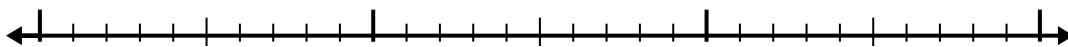
1) $7 - 2.6 =$



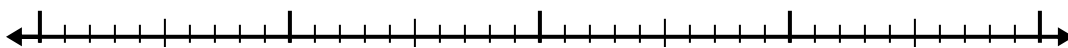
2) $6.2 - 2.7 =$



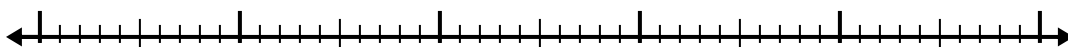
3) $2.5 - 1.2 =$



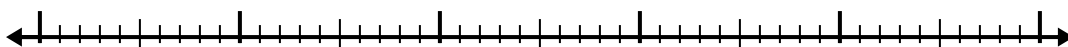
4) $5.2 - 1.9 =$



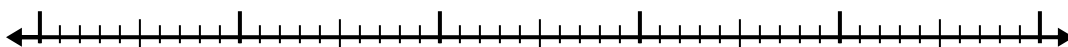
5) $12.3 - 3.4 =$




6) $11 - 2.7 =$




7) $8 - 2.7 =$



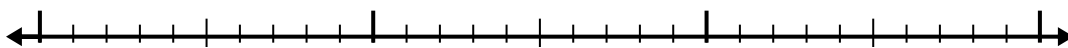
8) $5 - 3.1 =$



9) $10.9 - 2.3 =$



10) $5.1 - 1.1 =$

**Answers**

1. _____

2. _____

3. _____

4. _____

5. _____

6. _____

7. _____

8. _____

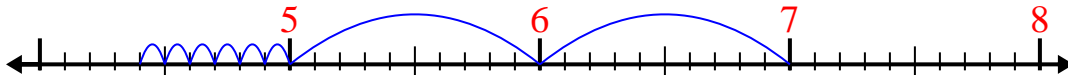
9. _____

10. _____

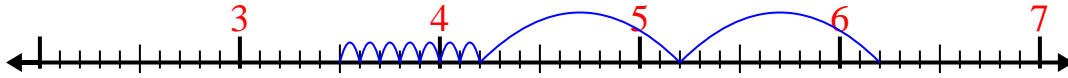


Use the number line to solve each problem.

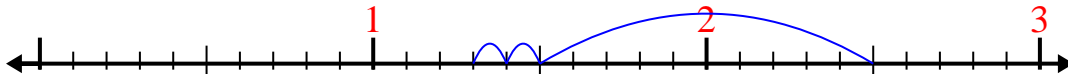
1) $7 - 2.6 =$



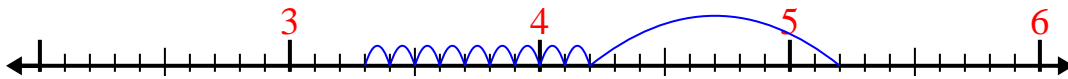
2) $6.2 - 2.7 =$



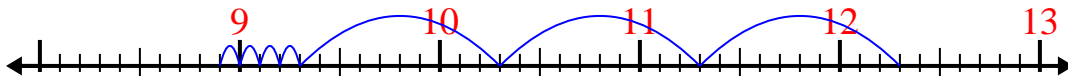
3) $2.5 - 1.2 =$



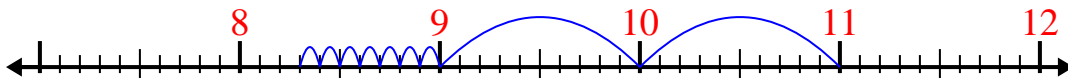
4) $5.2 - 1.9 =$



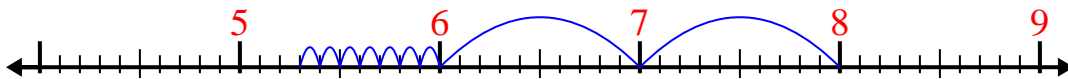
5) $12.3 - 3.4 =$



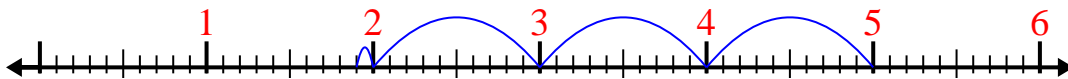
6) $11 - 2.7 =$



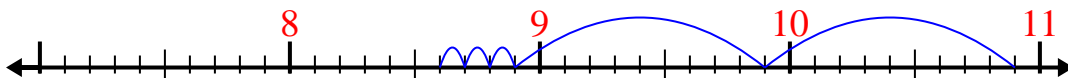
7) $8 - 2.7 =$




8) $5 - 3.1 =$



9) $10.9 - 2.3 =$



10) $5.1 - 1.1 =$



Answers

1. 4.4

2. 3.5

3. 1.3

4. 3.3

5. 8.9

6. 8.3

7. 5.3

8. 1.9

9. 8.6

10. 4