
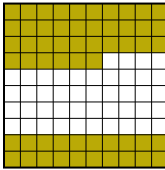






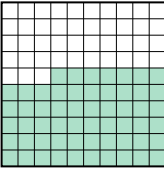

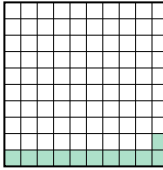

Put the boxes in order from least to greatest based on the shaded amount.

Answers

Ex) A  B  C  D 

small 0.12 - C
0.56 - B
0.7 - D
 large 0.8 - A

Ex. C,B,D,A

1) A  B  C  D 


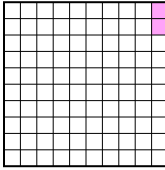


small _____

 large _____

1. _____

2. _____

3. _____

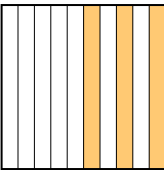
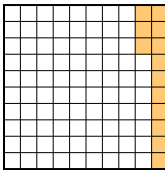
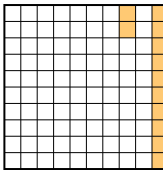
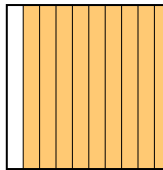
2) A  B  C  D 

small _____

 large _____

4. _____

5. _____

3) A  B  C  D 

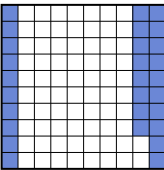
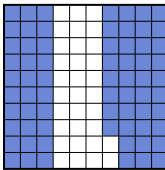
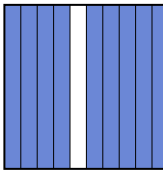
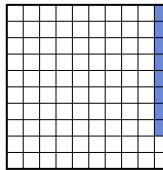
small _____

 large _____

6. _____


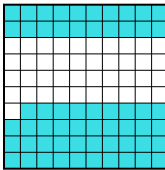


7. _____

8. _____

4) A  B  C  D 




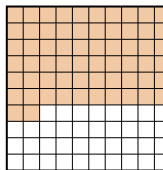
small _____

 large _____

5) A  B  C  D 

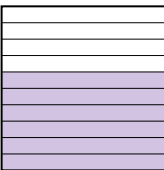
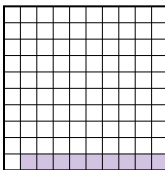

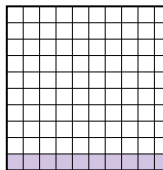
small _____

 large _____

6) A  B  C  D 


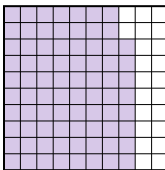
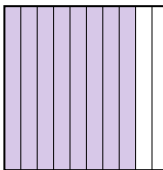
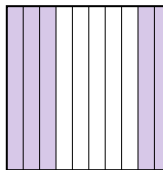
small _____

 large _____

7) A  B  C  D 

small _____

 large _____

8) A  B  C  D 

small _____

 large _____



Put the boxes in order from least to greatest based on the shaded amount.

Ex) A B C D

small $\frac{0.12}{0.56} - C$
 $\frac{0.7}{0.8} - D$

large $\frac{0.8}{0.9} - A$

1) A B C D

small $\frac{0.11}{0.57} - C$
 $\frac{0.7}{0.9} - D$

large $\frac{0.9}{0.9} - B$

2) A B C D

small $\frac{0.02}{0.3} - B$
 $\frac{0.4}{0.57} - C$

large $\frac{0.57}{0.9} - C$

3) A B C D

small $\frac{0.12}{0.13} - C$
 $\frac{0.3}{0.9} - A$

large $\frac{0.9}{0.9} - D$

4) A B C D

small $\frac{0.08}{0.28} - D$
 $\frac{0.68}{0.9} - B$

large $\frac{0.9}{0.9} - C$

5) A B C D

small $\frac{0.3}{0.4} - D$
 $\frac{0.59}{0.9} - B$

large $\frac{0.9}{0.9} - A$

6) A B C D

small $\frac{0.2}{0.6} - C$
 $\frac{0.62}{0.9} - D$

large $\frac{0.9}{0.9} - A$

7) A B C D

small $\frac{0.09}{0.1} - B$
 $\frac{0.1}{0.1} - C$
 $\frac{0.1}{0.6} - C$

large $\frac{0.6}{0.9} - A$

8) A B C D

small $\frac{0.5}{0.78} - D$
 $\frac{0.8}{0.8} - C$

large $\frac{0.98}{0.9} - A$

Answers

Ex. C,B,D,A

1. C,A,D,B

2. B,A,D,C

3. C,B,A,D

4. D,A,B,C

5. D,C,B,A

6. C,B,D,A

7. B,C,C,A

8. D,B,C,A