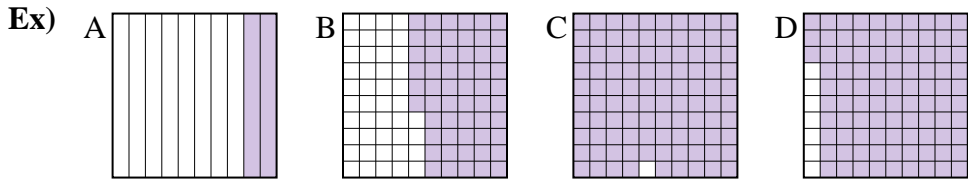




Put the boxes in order from least to greatest based on the shaded amount.

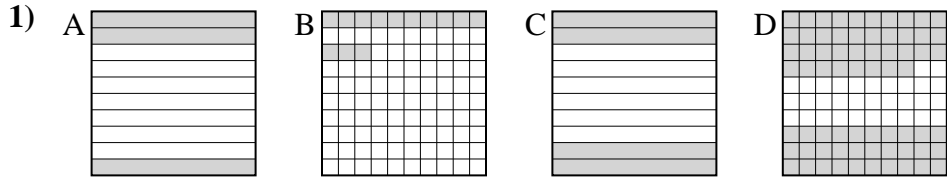
Answers



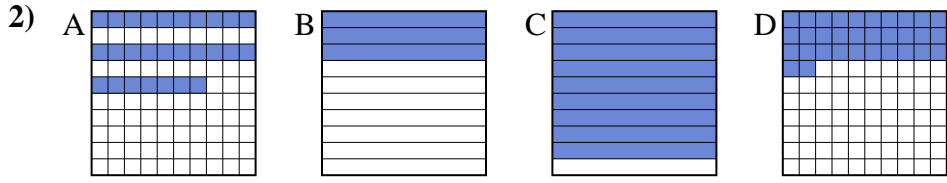
small 0.2 - A
0.56 - B
0.93 - D
 large 0.99 - C

Ex. A,B,D,C

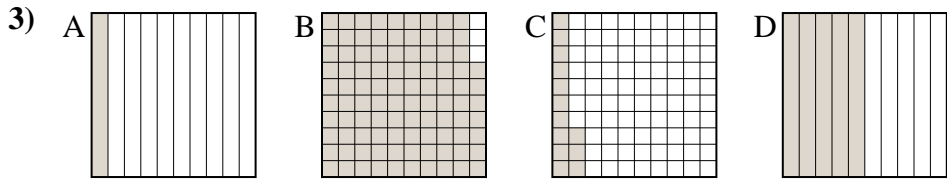
1. _____
2. _____
3. _____
4. _____
5. _____
6. _____
7. _____
8. _____



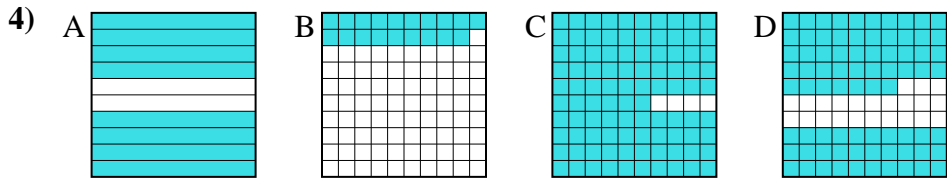
small _____
 large _____



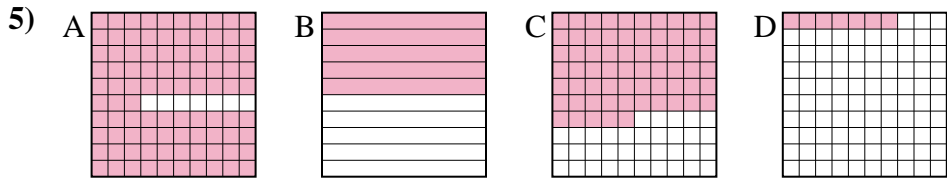
small _____
 large _____



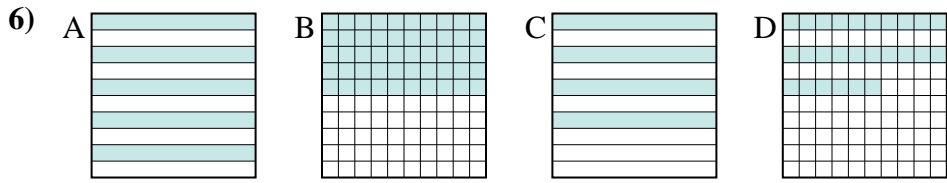
small _____
 large _____



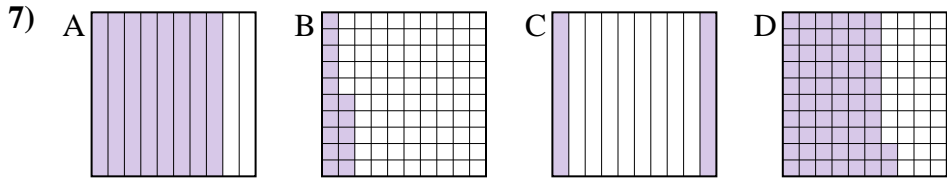
small _____
 large _____



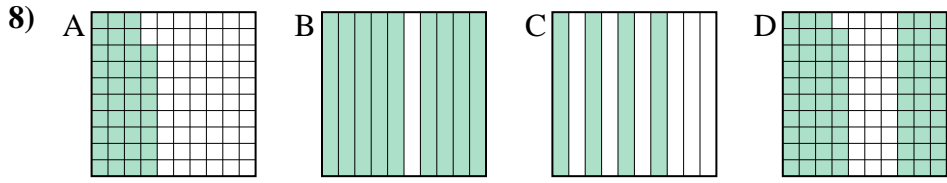
small _____
 large _____



small _____
 large _____



small _____
 large _____



small _____
 large _____



Put the boxes in order from least to greatest based on the shaded amount.

Ex) A B C D small $\frac{0.2}{0.56}$ - A
 $\frac{0.93}{0.99}$ - D
large $\frac{0.56}{0.99}$ - C

1) A B C D small $\frac{0.13}{0.3}$ - B
 $\frac{0.4}{0.68}$ - C
large $\frac{0.3}{0.68}$ - D

2) A B C D small $\frac{0.27}{0.3}$ - A
 $\frac{0.32}{0.9}$ - D
large $\frac{0.3}{0.9}$ - C

3) A B C D small $\frac{0.1}{0.13}$ - A
 $\frac{0.5}{0.97}$ - D
large $\frac{0.13}{0.97}$ - B

4) A B C D small $\frac{0.19}{0.77}$ - B
 $\frac{0.8}{0.96}$ - A
large $\frac{0.77}{0.96}$ - C

5) A B C D small $\frac{0.07}{0.5}$ - D
 $\frac{0.65}{0.93}$ - C
large $\frac{0.5}{0.93}$ - A

6) A B C D small $\frac{0.26}{0.4}$ - D
 $\frac{0.5}{0.5}$ - A
large $\frac{0.4}{0.5}$ - A

7) A B C D small $\frac{0.15}{0.2}$ - B
 $\frac{0.62}{0.8}$ - D
large $\frac{0.2}{0.8}$ - A

8) A B C D small $\frac{0.38}{0.4}$ - A
 $\frac{0.69}{0.9}$ - D
large $\frac{0.4}{0.9}$ - B

Answers

- Ex. A,B,D,C
1. B,A,C,D
2. A,B,D,C
3. A,C,D,B
4. B,D,A,C
5. D,B,C,A
6. D,C,A,A
7. B,C,D,A
8. A,C,D,B