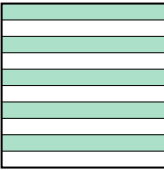
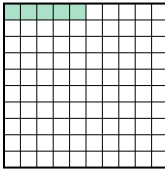
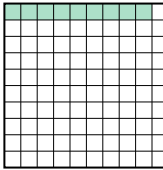





Put the boxes in order from least to greatest based on the shaded amount.


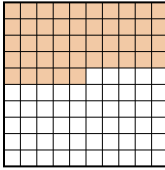
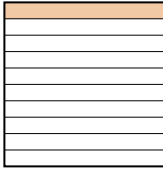
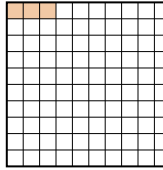
**Answers**

Ex) A  B  C  D 



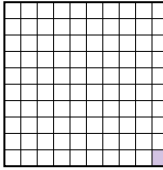
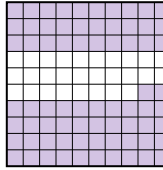
small 0.05 - B  
0.09 - C  
0.5 - A  
large 0.6 - D

Ex. **B,C,A,D**

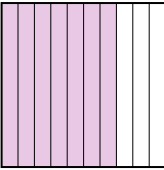
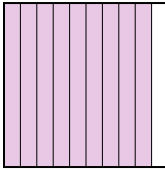

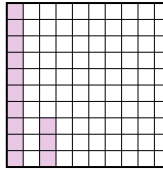
1. \_\_\_\_\_
2. \_\_\_\_\_
3. \_\_\_\_\_
4. \_\_\_\_\_
5. \_\_\_\_\_
6. \_\_\_\_\_
7. \_\_\_\_\_
8. \_\_\_\_\_

1) A  B  C  D 




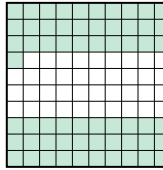
small \_\_\_\_\_  
large \_\_\_\_\_

2) A  B  C  D 


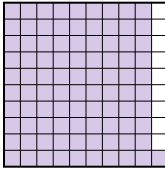
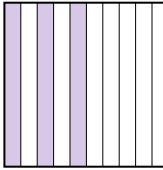
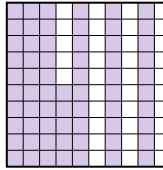
small \_\_\_\_\_  
large \_\_\_\_\_

3) A  B  C  D 





small \_\_\_\_\_  
large \_\_\_\_\_

4) A  B  C  D 

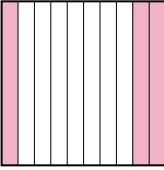
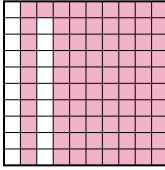
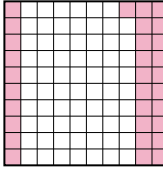
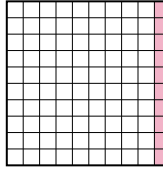
small \_\_\_\_\_  
large \_\_\_\_\_

5) A  B  C  D 


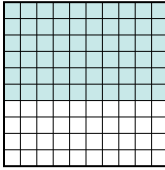

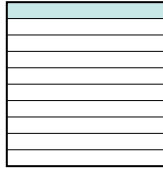
small \_\_\_\_\_  
large \_\_\_\_\_

6) A  B  C  D 

small \_\_\_\_\_  
large \_\_\_\_\_

7) A  B  C  D 

small \_\_\_\_\_  
large \_\_\_\_\_

8) A  B  C  D 

small \_\_\_\_\_  
large \_\_\_\_\_



Put the boxes in order from least to greatest based on the shaded amount.

Ex) A B C D small  $\frac{0.05}{0.09}{0.5}{0.6}$  - B - C - A - D

1) A B C D small  $\frac{0.03}{0.1}{0.4}{0.45}$  - D - C - A - B

2) A B C D small  $\frac{0.01}{0.19}{0.72}$  - C - A - D - B

3) A B C D small  $\frac{0.13}{0.7}{0.83}$  - D - A - C - B

4) A B C D small  $\frac{0.39}{0.61}{0.8}{0.92}$  - A - D - B - C

5) A B C D small  $\frac{0.3}{0.44}{0.65}$  - C - A - D - B

6) A B C D small  $\frac{0.03}{0.14}{0.3}{0.7}$  - D - B - A - C

7) A B C D small  $\frac{0.1}{0.3}{0.31}$  - D - A - C - B

8) A B C D small  $\frac{0.1}{0.6}{0.7}{0.9}$  - D - B - A - C

Answers

- Ex. B,C,A,D
1. D,C,A,B
2. C,A,D,B
3. D,A,C,B
4. A,D,B,C
5. C,A,D,B
6. D,B,A,C
7. D,A,C,B
8. D,B,A,C