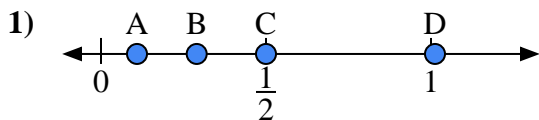


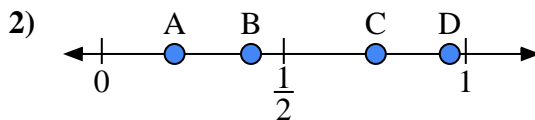


Use the number lines to answer the questions.

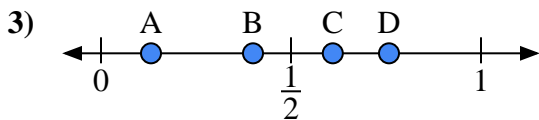
Answers



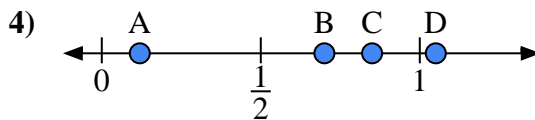
- a) Which letter best represents the location of 0.5?
- b) Which letter best represents the location of 0.29?



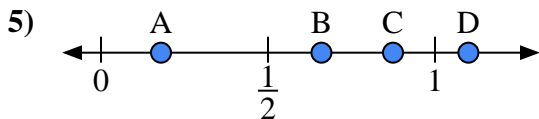
- a) Which letter best represents the location of 0.20?
- b) Which letter best represents the location of 0.41?



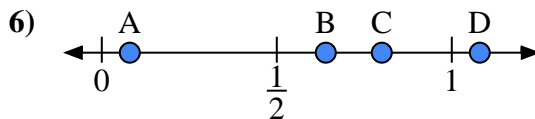
- a) Which letter best represents the location of 0.40?
- b) Which letter best represents the location of 0.61?



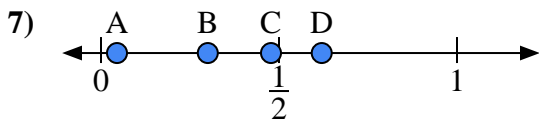
- a) Which letter best represents the location of 0.70?
- b) Which letter best represents the location of 0.85?



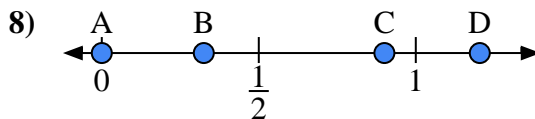
- a) Which letter best represents the location of 1.1?
- b) Which letter best represents the location of 0.66?



- a) Which letter best represents the location of 0.8?
- b) Which letter best represents the location of 0.08?



- a) Which letter best represents the location of 0.30?
- b) Which letter best represents the location of 0.62?

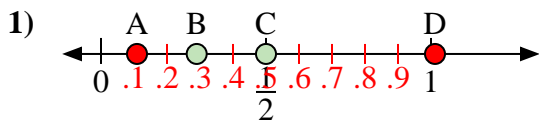


- a) Which letter best represents the location of 0.00?
- b) Which letter best represents the location of 0.90?

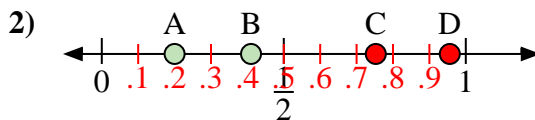
- 1. _____
- 2. _____
- 3. _____
- 4. _____
- 5. _____
- 6. _____
- 7. _____
- 8. _____



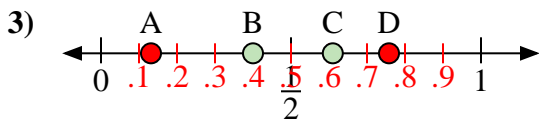
Use the number lines to answer the questions.



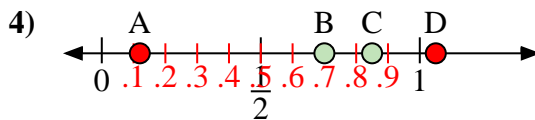
- a) Which letter best represents the location of 0.5?
- b) Which letter best represents the location of 0.29?



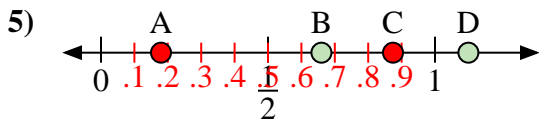
- a) Which letter best represents the location of 0.20?
- b) Which letter best represents the location of 0.41?



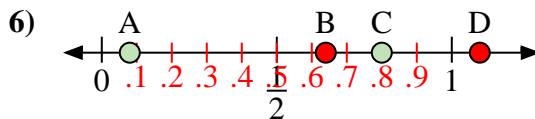
- a) Which letter best represents the location of 0.40?
- b) Which letter best represents the location of 0.61?



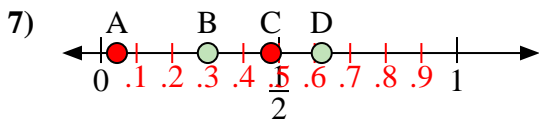
- a) Which letter best represents the location of 0.70?
- b) Which letter best represents the location of 0.85?



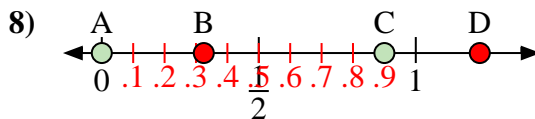
- a) Which letter best represents the location of 1.1?
- b) Which letter best represents the location of 0.66?



- a) Which letter best represents the location of 0.8?
- b) Which letter best represents the location of 0.08?



- a) Which letter best represents the location of 0.30?
- b) Which letter best represents the location of 0.62?



- a) Which letter best represents the location of 0.00?
- b) Which letter best represents the location of 0.90?

Answers

- 1. C B
- 2. A B
- 3. B C
- 4. B C
- 5. D B
- 6. C A
- 7. B D
- 8. A C