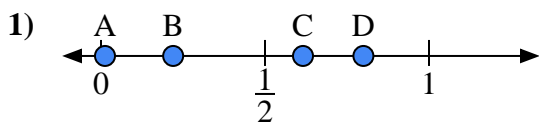


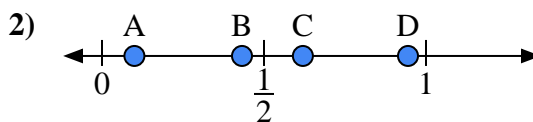


Use the number lines to answer the questions.

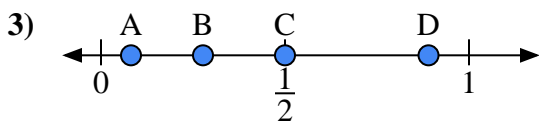
**Answers**



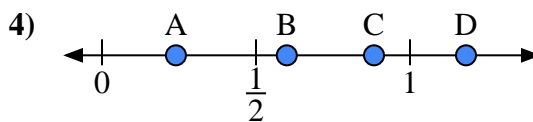
- a) Which letter best represents the location of 0.80?
- b) Which letter best represents the location of 0.22?



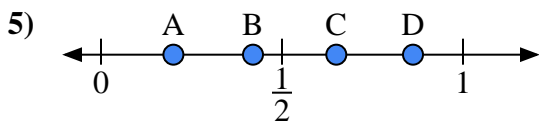
- a) Which letter best represents the location of 0.1?
- b) Which letter best represents the location of 0.62?



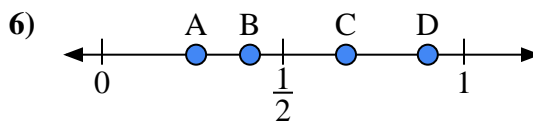
- a) Which letter best represents the location of 0.5?
- b) Which letter best represents the location of 0.89?



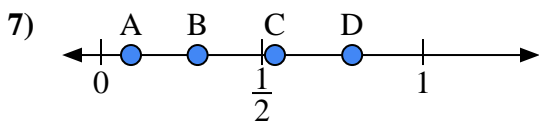
- a) Which letter best represents the location of 0.6?
- b) Which letter best represents the location of 0.24?



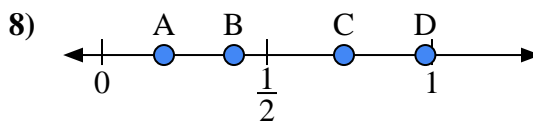
- a) Which letter best represents the location of 0.20?
- b) Which letter best represents the location of 0.65?



- a) Which letter best represents the location of 0.90?
- b) Which letter best represents the location of 0.26?



- a) Which letter best represents the location of 0.3?
- b) Which letter best represents the location of 0.78?

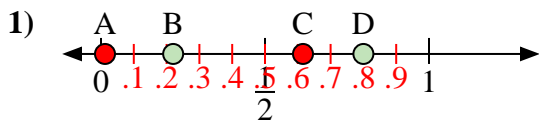


- a) Which letter best represents the location of 0.40?
- b) Which letter best represents the location of 0.98?

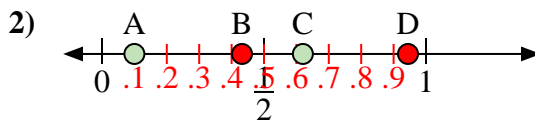
- 1. \_\_\_\_\_
- 2. \_\_\_\_\_
- 3. \_\_\_\_\_
- 4. \_\_\_\_\_
- 5. \_\_\_\_\_
- 6. \_\_\_\_\_
- 7. \_\_\_\_\_
- 8. \_\_\_\_\_



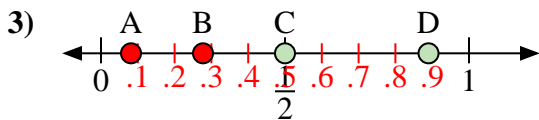
Use the number lines to answer the questions.



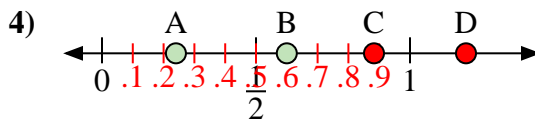
- a) Which letter best represents the location of 0.80?
- b) Which letter best represents the location of 0.22?



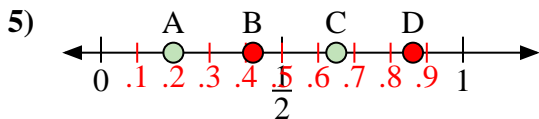
- a) Which letter best represents the location of 0.1?
- b) Which letter best represents the location of 0.62?



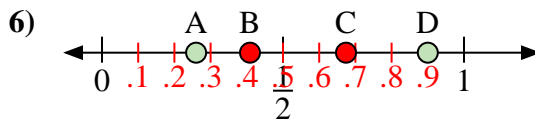
- a) Which letter best represents the location of 0.5?
- b) Which letter best represents the location of 0.89?



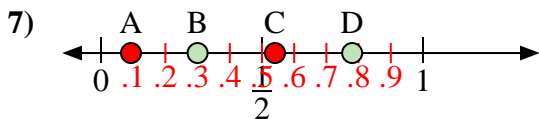
- a) Which letter best represents the location of 0.6?
- b) Which letter best represents the location of 0.24?



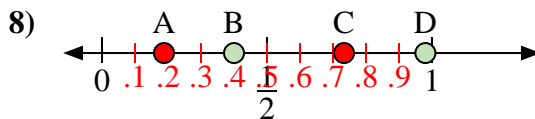
- a) Which letter best represents the location of 0.20?
- b) Which letter best represents the location of 0.65?



- a) Which letter best represents the location of 0.90?
- b) Which letter best represents the location of 0.26?



- a) Which letter best represents the location of 0.3?
- b) Which letter best represents the location of 0.78?



- a) Which letter best represents the location of 0.40?
- b) Which letter best represents the location of 0.98?

**Answers**

- 1.   D     B
- 2.   A     C
- 3.   C     D
- 4.   B     A
- 5.   A     C
- 6.   D     A
- 7.   B     D
- 8.   B     D