




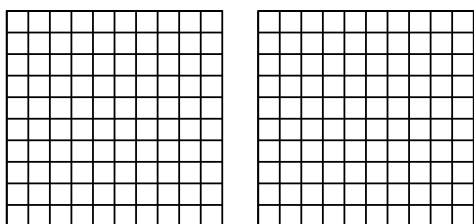
Use the visual model to solve each problem.

Answers

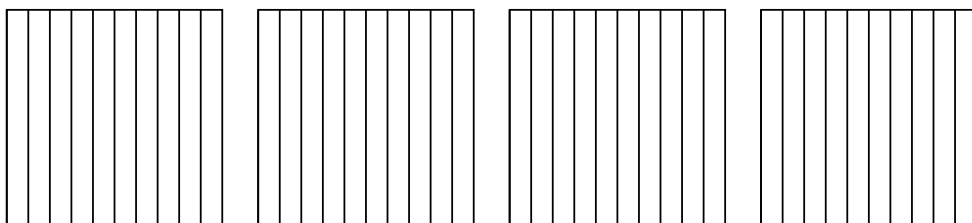
1)  $3 \times 0.35 =$



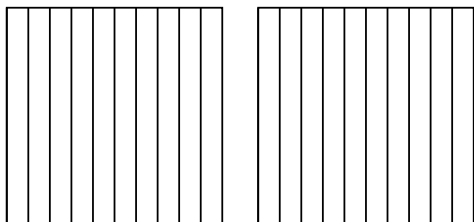
2)  $2 \times 0.41 =$



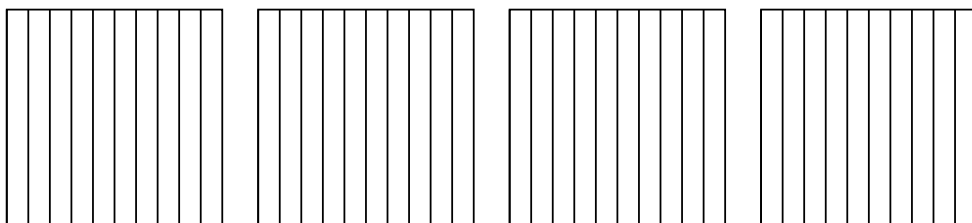
3)  $4 \times 0.8 =$



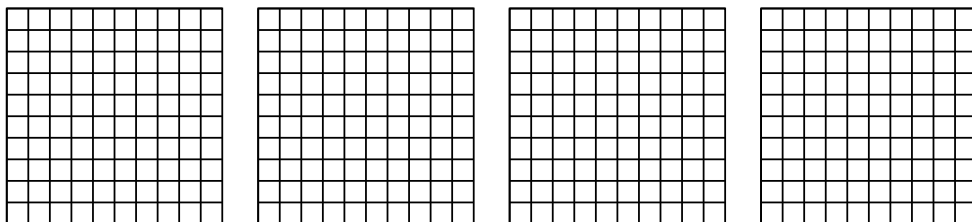
4)  $2 \times 0.5 =$



5)  $4 \times 0.8 =$



6)  $4 \times 0.68 =$

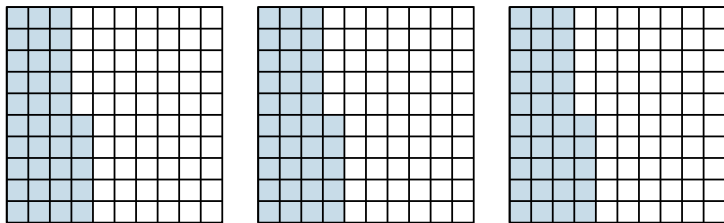


- 1. \_\_\_\_\_
- 2. \_\_\_\_\_
- 3. \_\_\_\_\_
- 4. \_\_\_\_\_
- 5. \_\_\_\_\_
- 6. \_\_\_\_\_

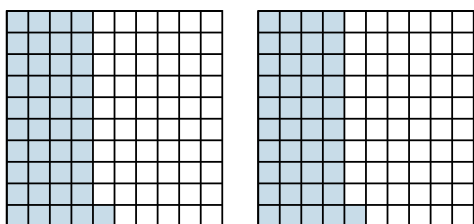


Use the visual model to solve each problem.

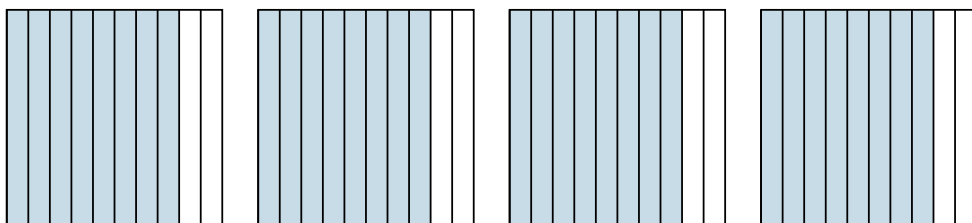
1)  $3 \times 0.35 =$



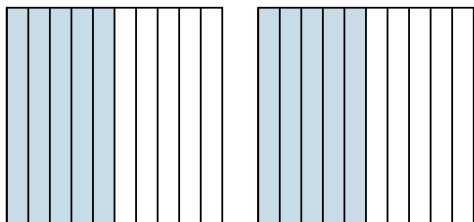
2)  $2 \times 0.41 =$



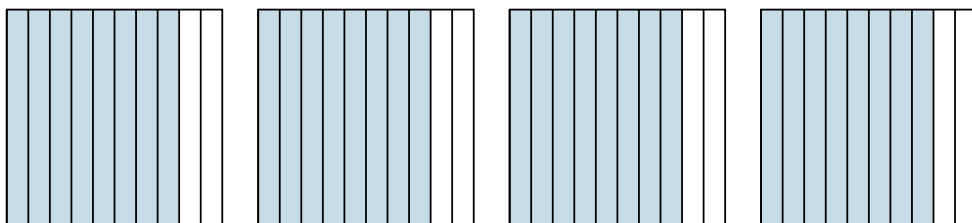
3)  $4 \times 0.8 =$



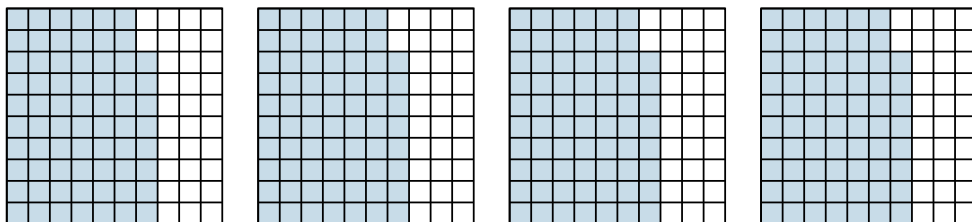
4)  $2 \times 0.5 =$



5)  $4 \times 0.8 =$



6)  $4 \times 0.68 =$



Answers

1.  $\frac{105}{100} = 1.05$

2.  $\frac{82}{100} = 0.82$

3.  $\frac{32}{10} = 3.2$

4.  $\frac{10}{10} = 1$

5.  $\frac{32}{10} = 3.2$

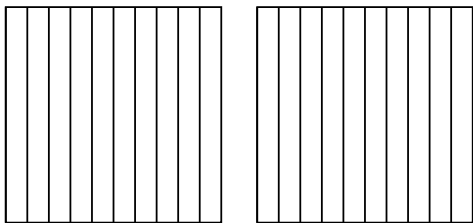
6.  $\frac{272}{100} = 2.72$



Use the visual model to solve each problem.

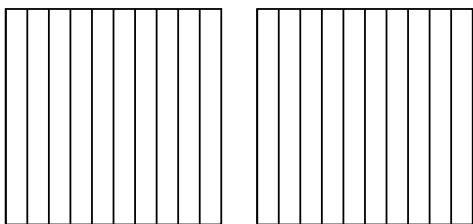
Answers

1)  $2 \times 0.9 =$




1. \_\_\_\_\_

2)  $2 \times 0.3 =$




2. \_\_\_\_\_

3)  $2 \times 0.46 =$



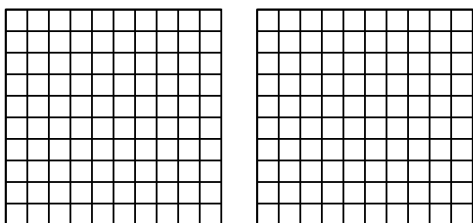
3. \_\_\_\_\_

4)  $3 \times 0.2 =$



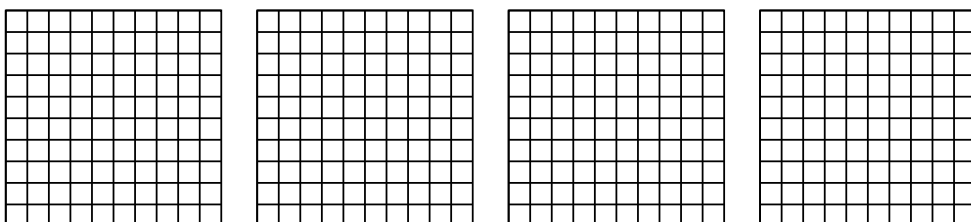
4. \_\_\_\_\_

5)  $2 \times 0.96 =$



5. \_\_\_\_\_

6)  $4 \times 0.30 =$

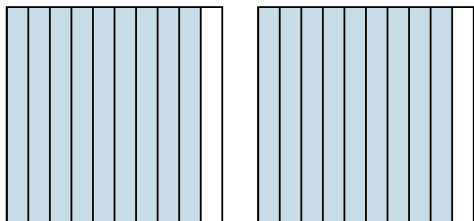


6. \_\_\_\_\_

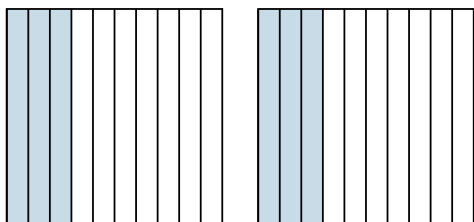


Use the visual model to solve each problem.

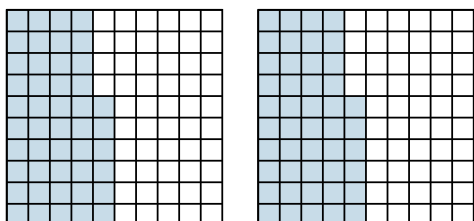
1)  $2 \times 0.9 =$



2)  $2 \times 0.3 =$



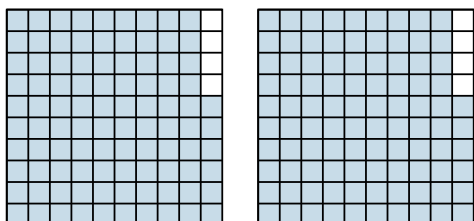
3)  $2 \times 0.46 =$



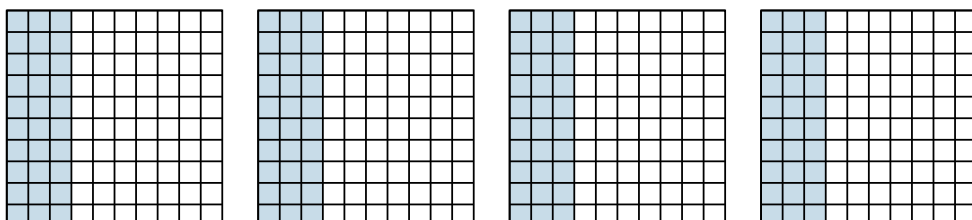
4)  $3 \times 0.2 =$



5)  $2 \times 0.96 =$



6)  $4 \times 0.30 =$



Answers

1.  $\frac{18}{10} = 1.8$

2.  $\frac{6}{10} = 0.6$

3.  $\frac{92}{100} = 0.92$

4.  $\frac{6}{10} = 0.6$

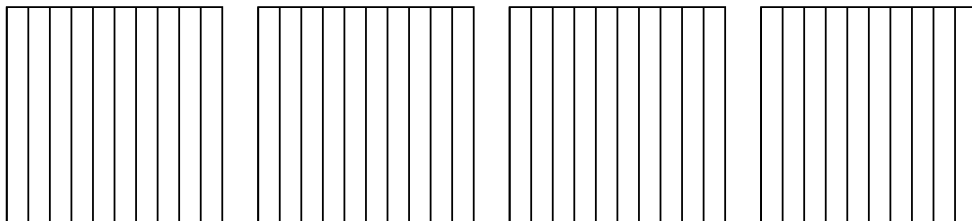
5.  $\frac{192}{100} = 1.92$

6.  $\frac{120}{100} = 1.2$

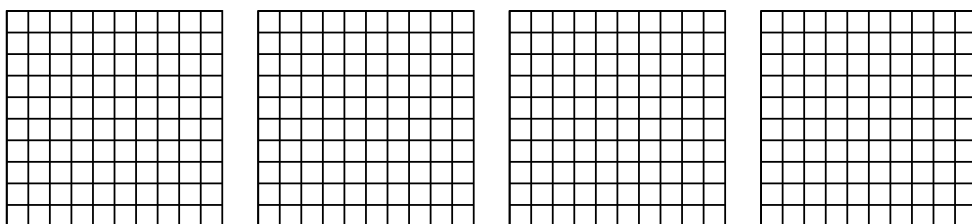


Use the visual model to solve each problem.


1)  $4 \times 0.5 =$



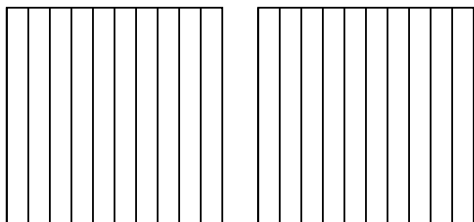
2)  $4 \times 0.92 =$



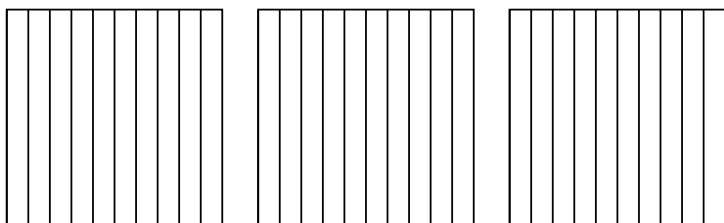
3)  $3 \times 0.36 =$



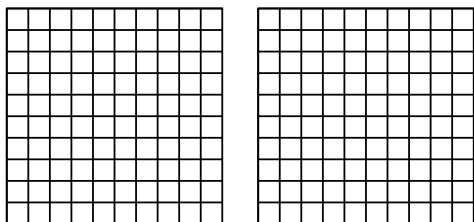
4)  $2 \times 0.2 =$



5)  $3 \times 0.6 =$



6)  $2 \times 0.44 =$



Answers

1. \_\_\_\_\_

2. \_\_\_\_\_

3. \_\_\_\_\_

4. \_\_\_\_\_

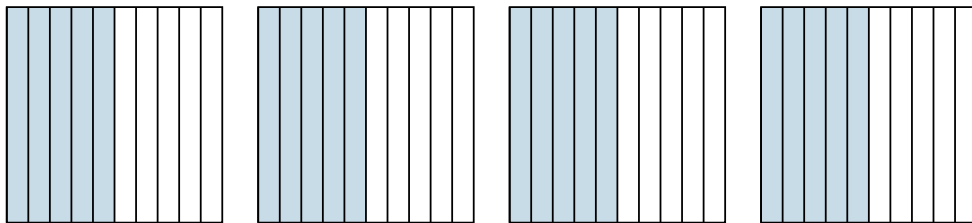
5. \_\_\_\_\_

6. \_\_\_\_\_

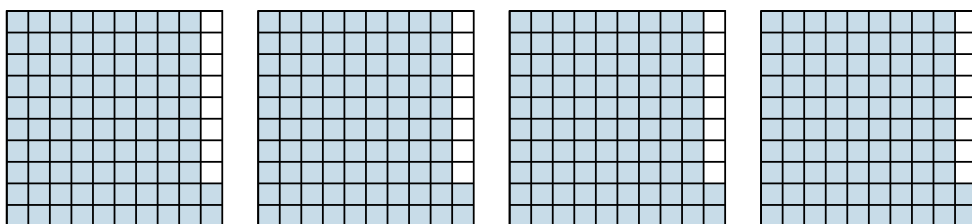


Use the visual model to solve each problem.

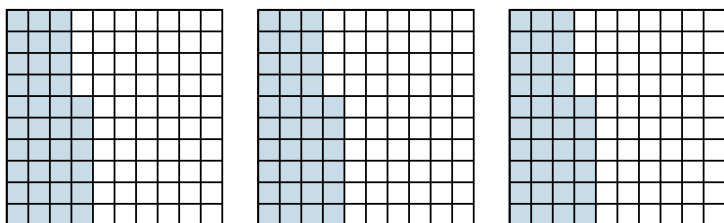
1)  $4 \times 0.5 =$



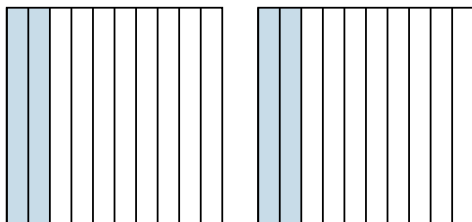
2)  $4 \times 0.92 =$



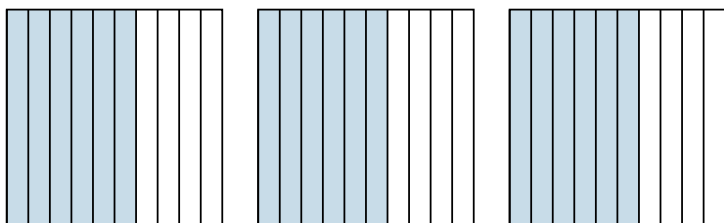
3)  $3 \times 0.36 =$



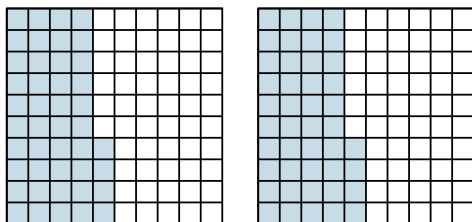
4)  $2 \times 0.2 =$



5)  $3 \times 0.6 =$



6)  $2 \times 0.44 =$



Answers

1.  $\frac{20}{10} = 2$

2.  $\frac{368}{100} = 3.68$

3.  $\frac{108}{100} = 1.08$

4.  $\frac{4}{10} = 0.4$

5.  $\frac{18}{10} = 1.8$

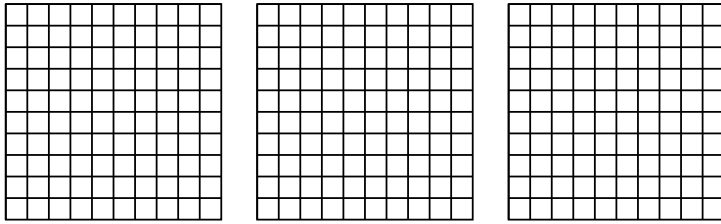
6.  $\frac{88}{100} = 0.88$



Use the visual model to solve each problem.

Answers

1)  $3 \times 0.71 =$

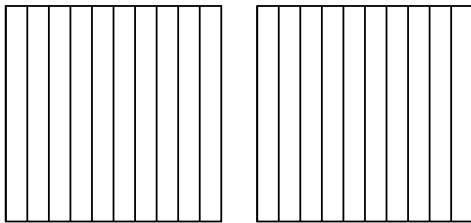


1. \_\_\_\_\_

2. \_\_\_\_\_

3. \_\_\_\_\_

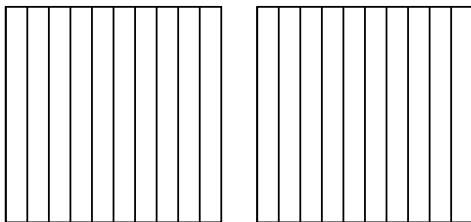
2)  $2 \times 0.3 =$



4. \_\_\_\_\_

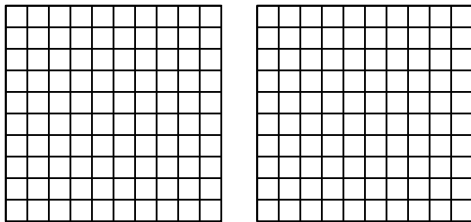
5. \_\_\_\_\_

3)  $2 \times 0.4 =$




6. \_\_\_\_\_

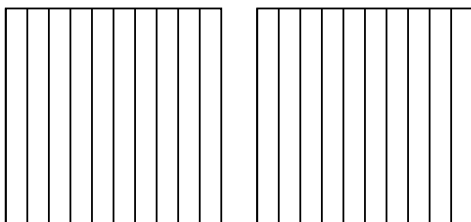
4)  $2 \times 0.36 =$



5)  $3 \times 0.40 =$



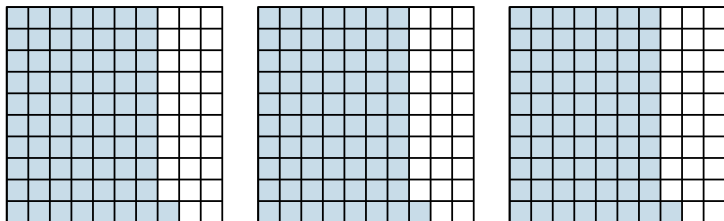
6)  $2 \times 0.8 =$



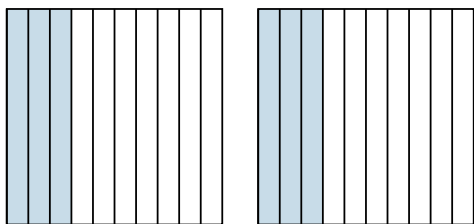


Use the visual model to solve each problem.

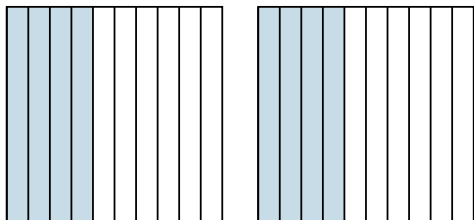
1)  $3 \times 0.71 =$



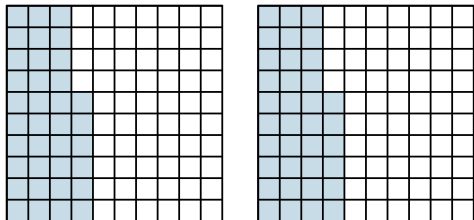
2)  $2 \times 0.3 =$



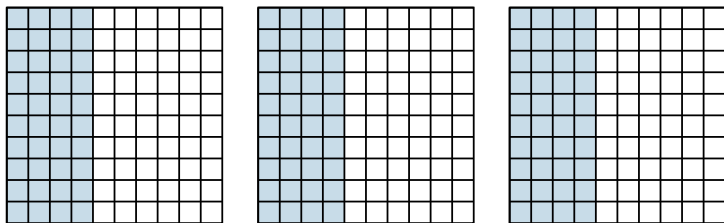
3)  $2 \times 0.4 =$



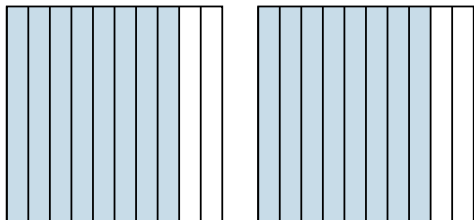
4)  $2 \times 0.36 =$



5)  $3 \times 0.40 =$



6)  $2 \times 0.8 =$



Answers

1.  $\frac{213}{100} = 2.13$

2.  $\frac{6}{10} = 0.6$

3.  $\frac{8}{10} = 0.8$

4.  $\frac{72}{100} = 0.72$

5.  $\frac{120}{100} = 1.2$

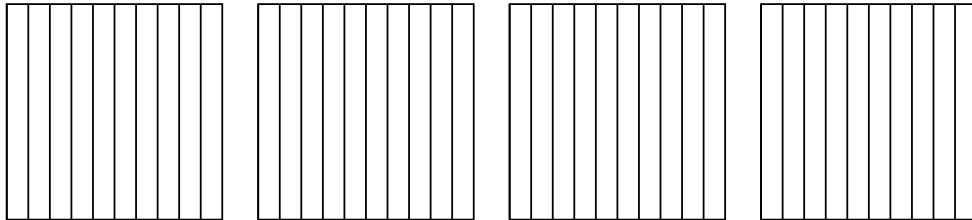
6.  $\frac{16}{10} = 1.6$



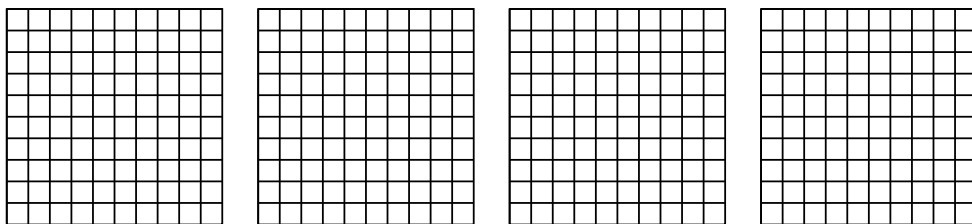


Use the visual model to solve each problem.


1)  $4 \times 0.9 =$



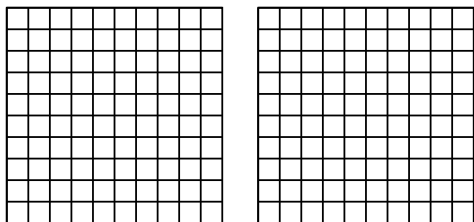
2)  $4 \times 0.39 =$



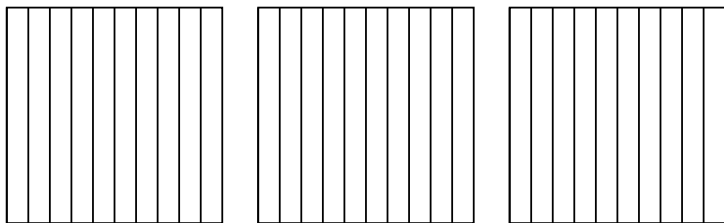
3)  $3 \times 0.54 =$



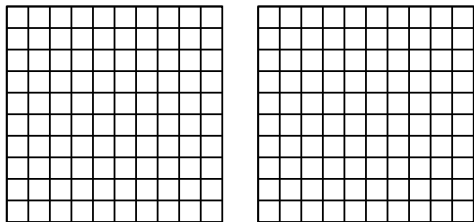
4)  $2 \times 0.79 =$



5)  $3 \times 0.2 =$



6)  $2 \times 0.23 =$



Answers

1. \_\_\_\_\_

2. \_\_\_\_\_

3. \_\_\_\_\_

4. \_\_\_\_\_

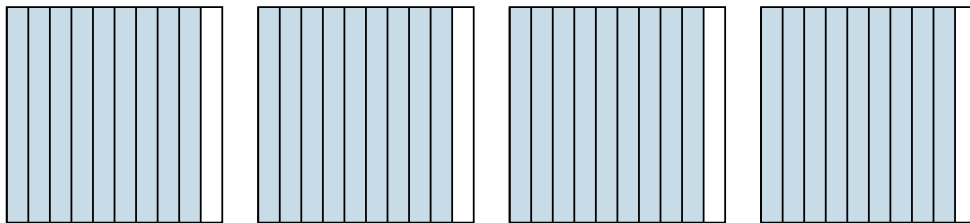
5. \_\_\_\_\_

6. \_\_\_\_\_

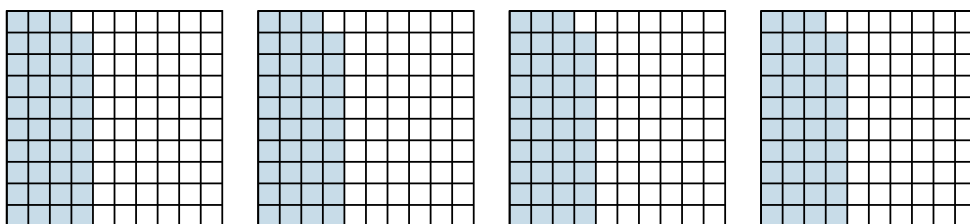


Use the visual model to solve each problem.

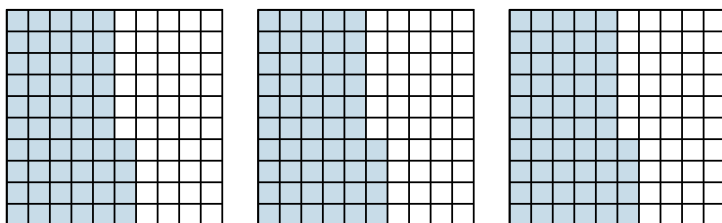
1)  $4 \times 0.9 =$



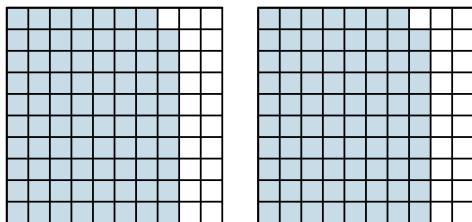
2)  $4 \times 0.39 =$



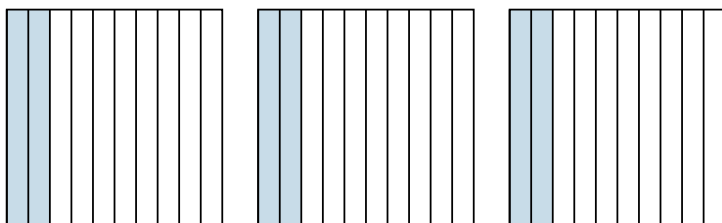
3)  $3 \times 0.54 =$



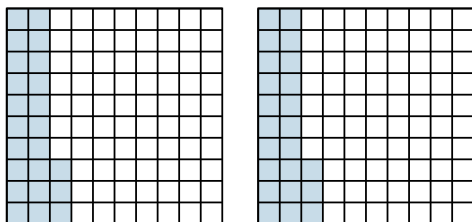
4)  $2 \times 0.79 =$



5)  $3 \times 0.2 =$



6)  $2 \times 0.23 =$



Answers

1.  $\frac{36}{10} = 3.6$

2.  $\frac{156}{100} = 1.56$

3.  $\frac{162}{100} = 1.62$

4.  $\frac{158}{100} = 1.58$

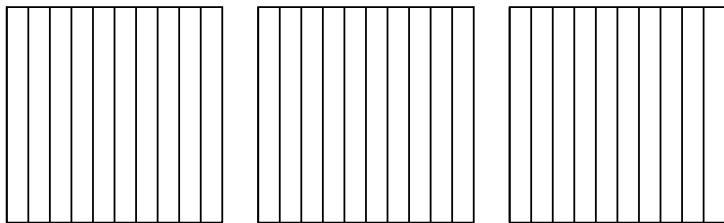
5.  $\frac{6}{10} = 0.6$

6.  $\frac{46}{100} = 0.46$

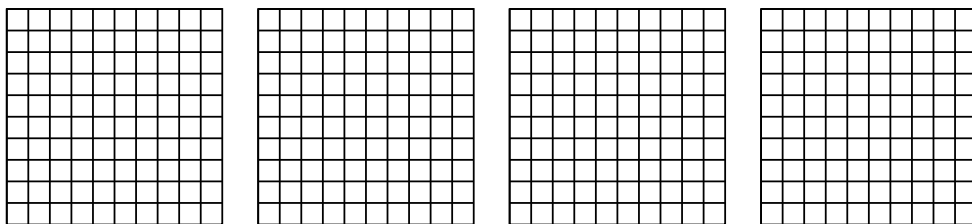


Use the visual model to solve each problem.

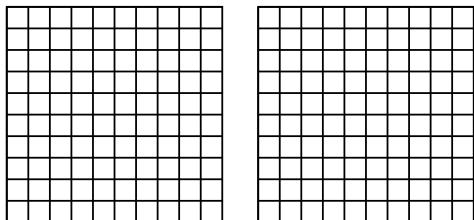
1)  $3 \times 0.6 =$



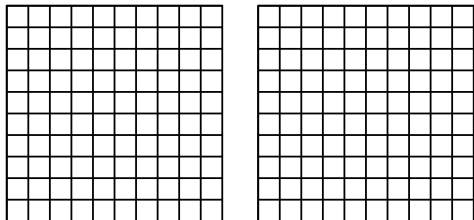
2)  $4 \times 0.69 =$



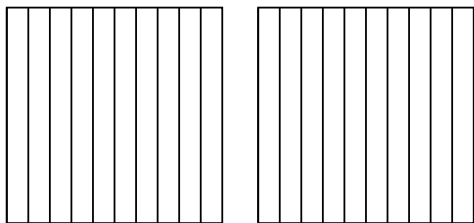
3)  $2 \times 0.97 =$



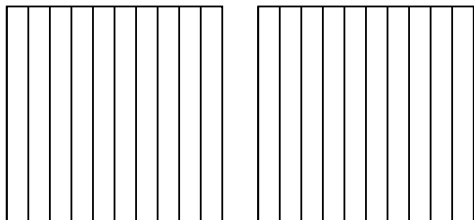
4)  $2 \times 0.75 =$



5)  $2 \times 0.3 =$



6)  $2 \times 0.2 =$



Answers

1. \_\_\_\_\_

2. \_\_\_\_\_

3. \_\_\_\_\_

4. \_\_\_\_\_

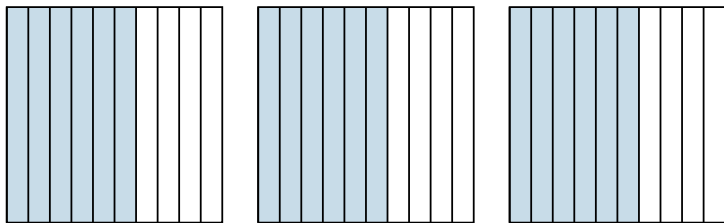
5. \_\_\_\_\_

6. \_\_\_\_\_

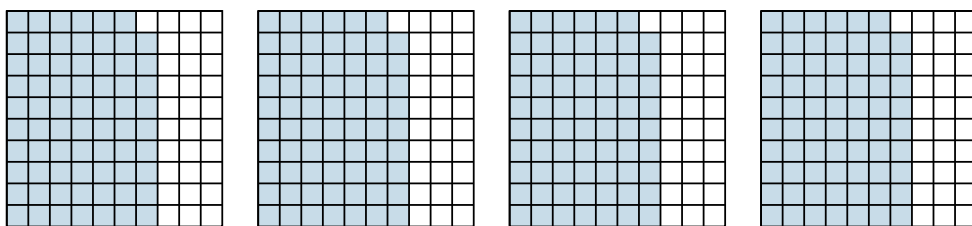


Use the visual model to solve each problem.

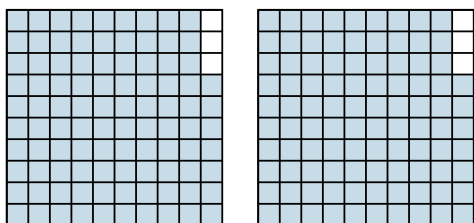
1)  $3 \times 0.6 =$



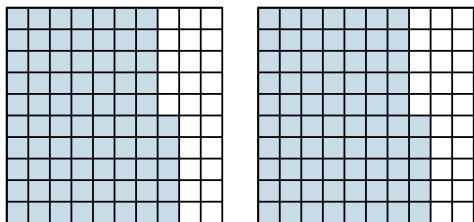
2)  $4 \times 0.69 =$



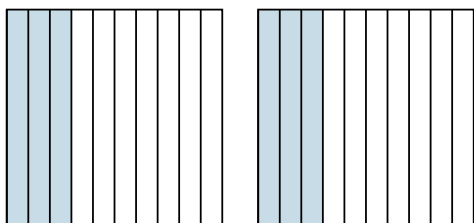
3)  $2 \times 0.97 =$



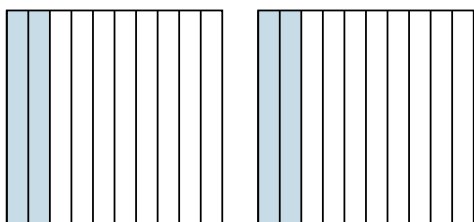
4)  $2 \times 0.75 =$



5)  $2 \times 0.3 =$



6)  $2 \times 0.2 =$



Answers

1.  $\frac{18}{10} = 1.8$

2.  $\frac{276}{100} = 2.76$

3.  $\frac{194}{100} = 1.94$

4.  $\frac{150}{100} = 1.5$

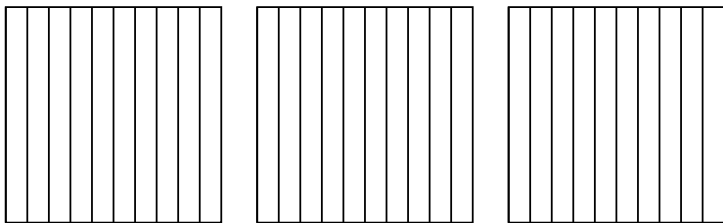
5.  $\frac{6}{10} = 0.6$

6.  $\frac{4}{10} = 0.4$

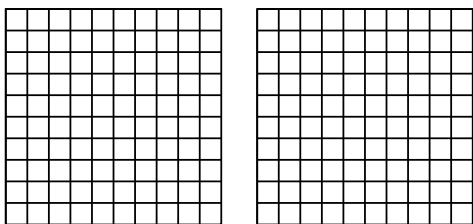


Use the visual model to solve each problem.

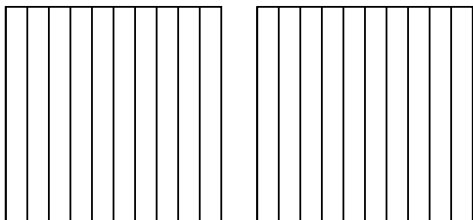
1)  $3 \times 0.7 =$



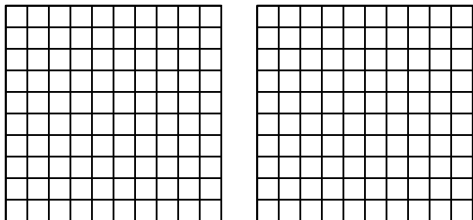
2)  $2 \times 0.68 =$




3)  $2 \times 0.4 =$



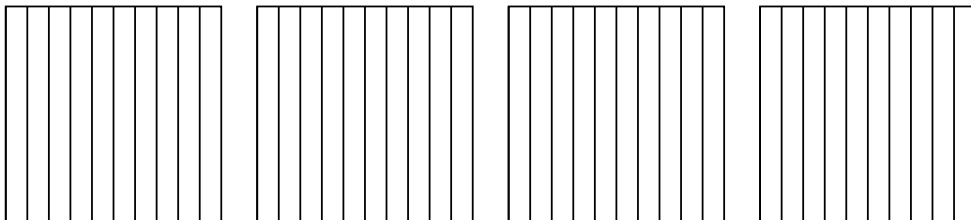
4)  $2 \times 0.81 =$



5)  $2 \times 0.25 =$



6)  $4 \times 0.8 =$



Answers

1. \_\_\_\_\_

2. \_\_\_\_\_

3. \_\_\_\_\_

4. \_\_\_\_\_

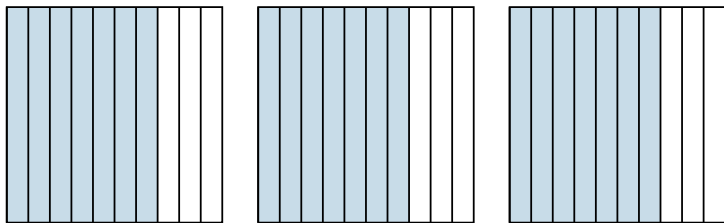
5. \_\_\_\_\_

6. \_\_\_\_\_

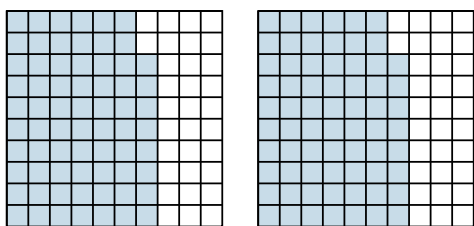


Use the visual model to solve each problem.

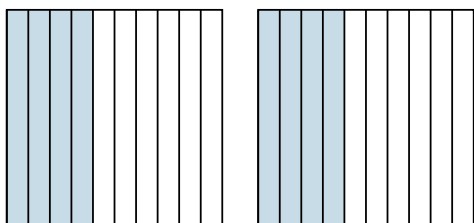
1)  $3 \times 0.7 =$



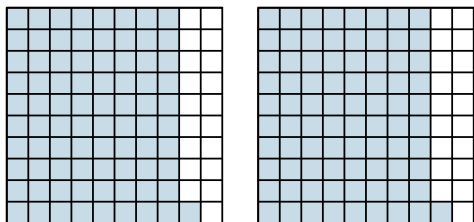
2)  $2 \times 0.68 =$



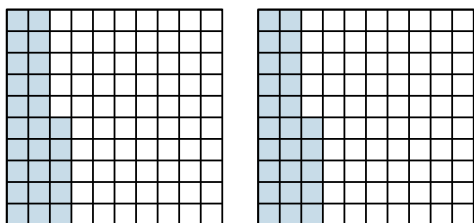
3)  $2 \times 0.4 =$



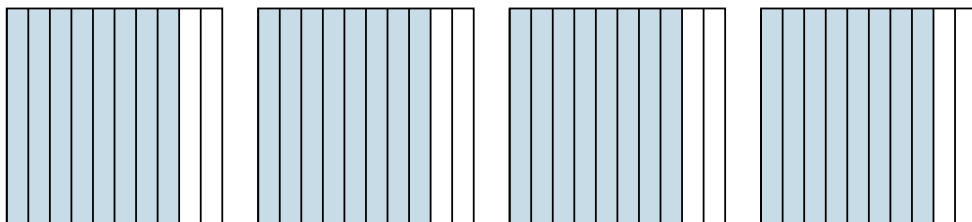
4)  $2 \times 0.81 =$



5)  $2 \times 0.25 =$



6)  $4 \times 0.8 =$



Answers

1.  $\frac{21}{10} = 2.1$

2.  $\frac{136}{100} = 1.36$

3.  $\frac{8}{10} = 0.8$

4.  $\frac{162}{100} = 1.62$

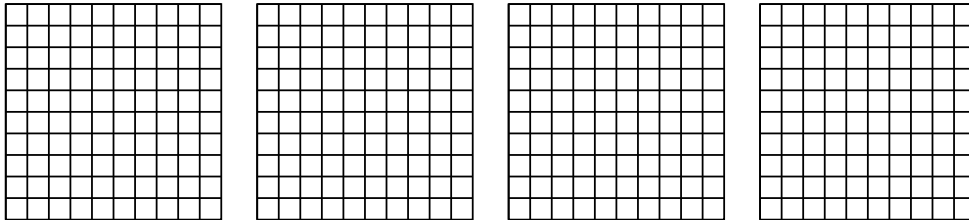
5.  $\frac{50}{100} = 0.5$

6.  $\frac{32}{10} = 3.2$

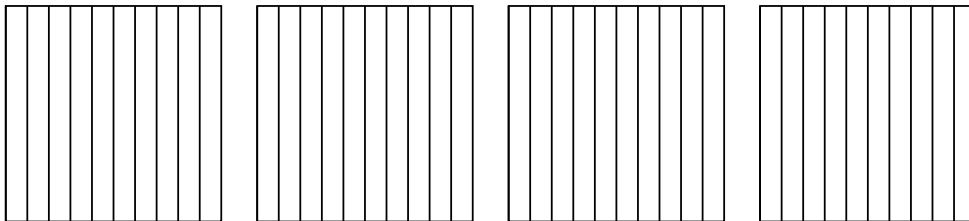


Use the visual model to solve each problem.

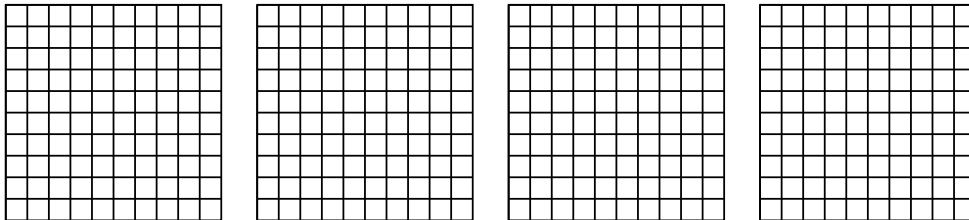
1)  $4 \times 0.51 =$



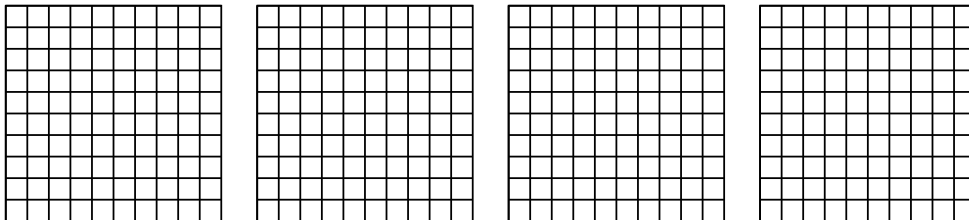
2)  $4 \times 0.2 =$



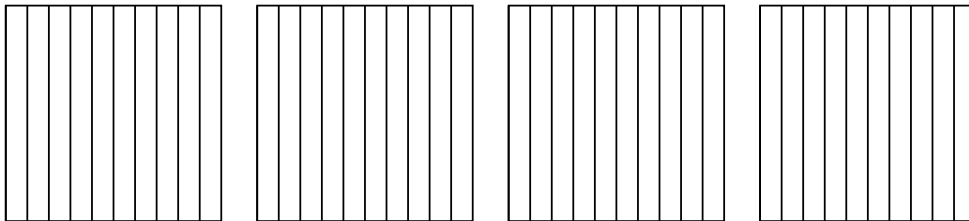
3)  $4 \times 0.74 =$



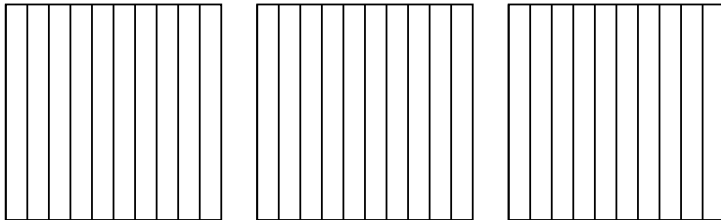
4)  $4 \times 0.68 =$



5)  $4 \times 0.6 =$



6)  $3 \times 0.3 =$



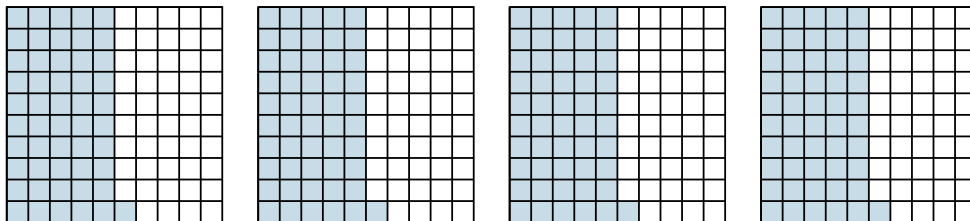
Answers

- 1. \_\_\_\_\_
- 2. \_\_\_\_\_
- 3. \_\_\_\_\_
- 4. \_\_\_\_\_
- 5. \_\_\_\_\_
- 6. \_\_\_\_\_

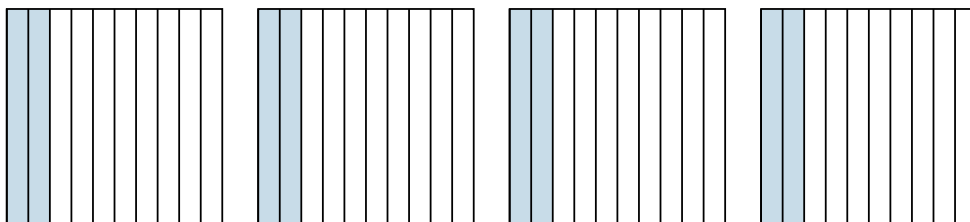


Use the visual model to solve each problem.

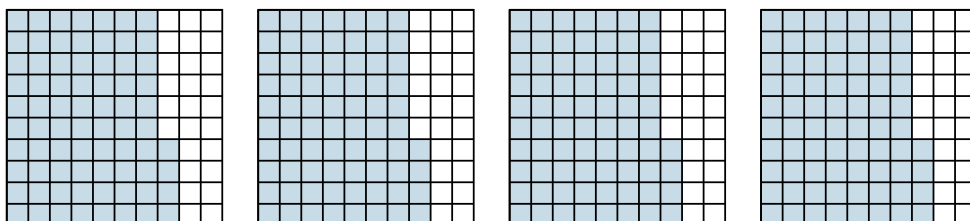
1)  $4 \times 0.51 =$



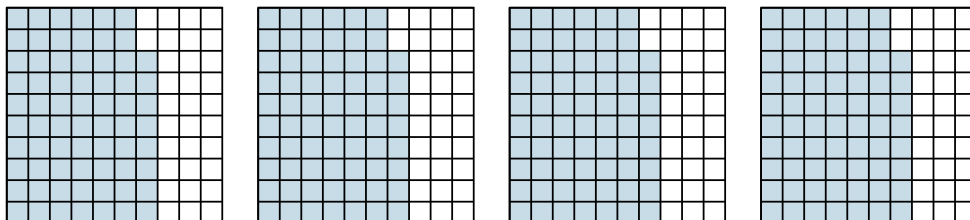
2)  $4 \times 0.2 =$



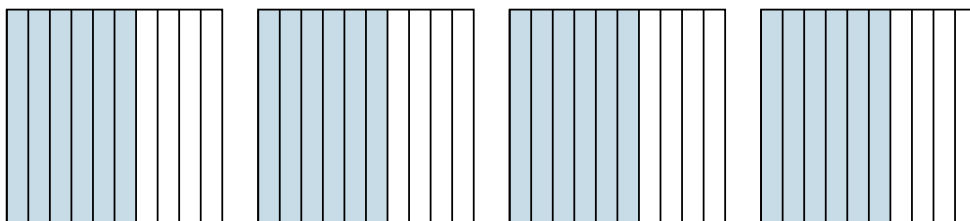
3)  $4 \times 0.74 =$




4)  $4 \times 0.68 =$



5)  $4 \times 0.6 =$



6)  $3 \times 0.3 =$



Answers

1.  $\frac{204}{100} = 2.04$

2.  $\frac{8}{10} = 0.8$

3.  $\frac{296}{100} = 2.96$

4.  $\frac{272}{100} = 2.72$

5.  $\frac{24}{10} = 2.4$

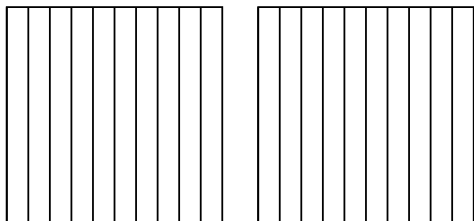
6.  $\frac{9}{10} = 0.9$






Use the visual model to solve each problem.

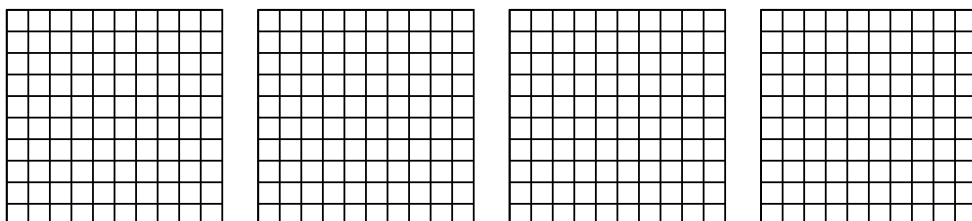
1)  $2 \times 0.7 =$




2)  $3 \times 0.5 =$



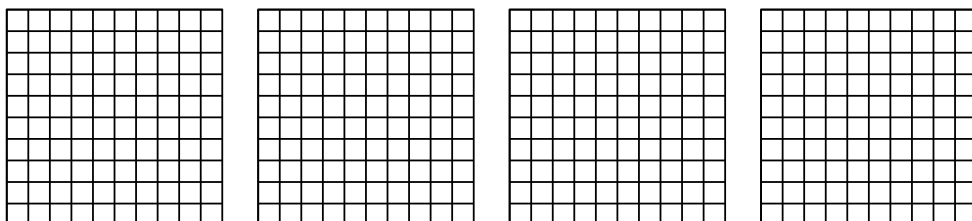
3)  $4 \times 0.92 =$



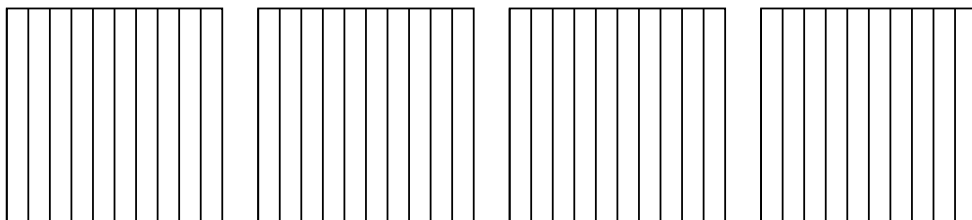
4)  $3 \times 0.73 =$



5)  $4 \times 0.20 =$



6)  $4 \times 0.7 =$



Answers

1. \_\_\_\_\_

2. \_\_\_\_\_

3. \_\_\_\_\_

4. \_\_\_\_\_

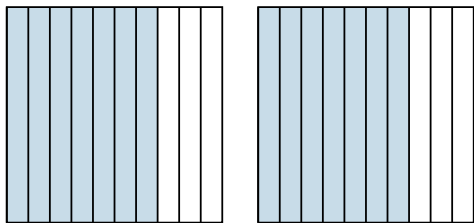
5. \_\_\_\_\_

6. \_\_\_\_\_

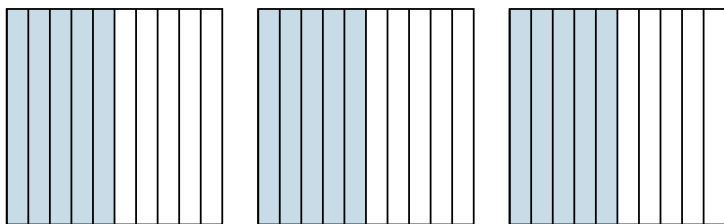


Use the visual model to solve each problem.

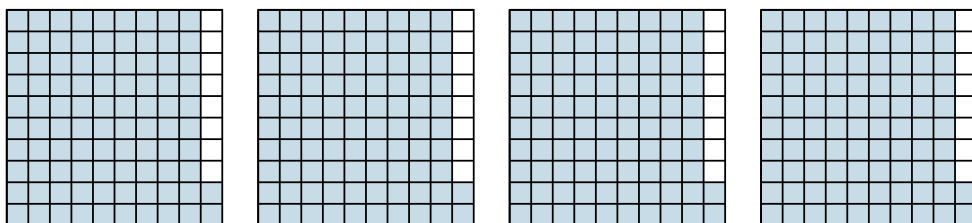
1)  $2 \times 0.7 =$



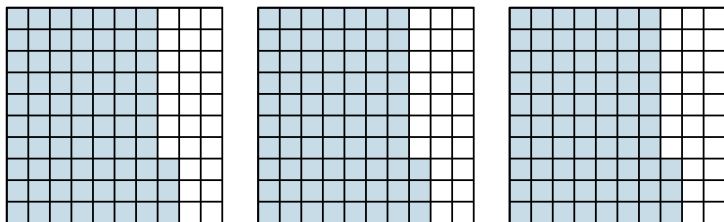
2)  $3 \times 0.5 =$



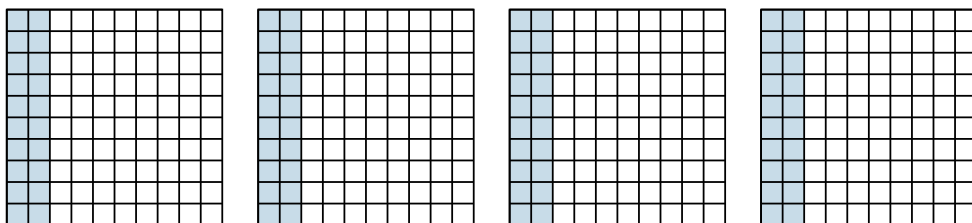
3)  $4 \times 0.92 =$



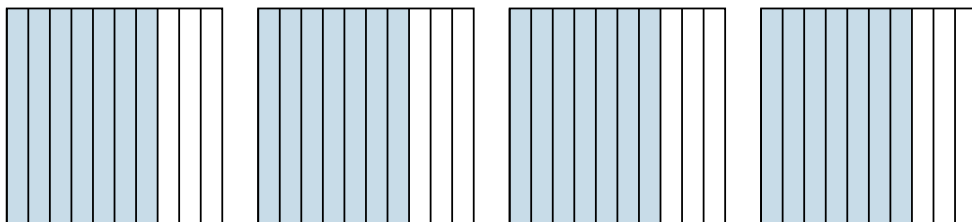
4)  $3 \times 0.73 =$



5)  $4 \times 0.20 =$



6)  $4 \times 0.7 =$



Answers

1.  $\frac{14}{10} = 1.4$

2.  $\frac{15}{10} = 1.5$

3.  $\frac{368}{100} = 3.68$

4.  $\frac{219}{100} = 2.19$

5.  $\frac{80}{100} = 0.8$


6.  $\frac{28}{10} = 2.8$



Use the visual model to solve each problem.

Answers

1)  $3 \times 0.18 =$

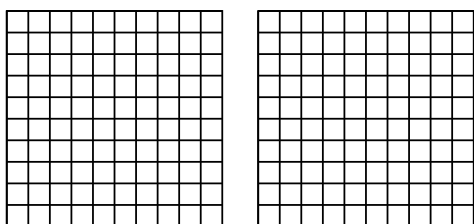


1. \_\_\_\_\_

2. \_\_\_\_\_

3. \_\_\_\_\_

2)  $2 \times 0.53 =$

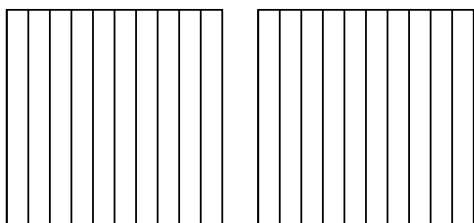


4. \_\_\_\_\_

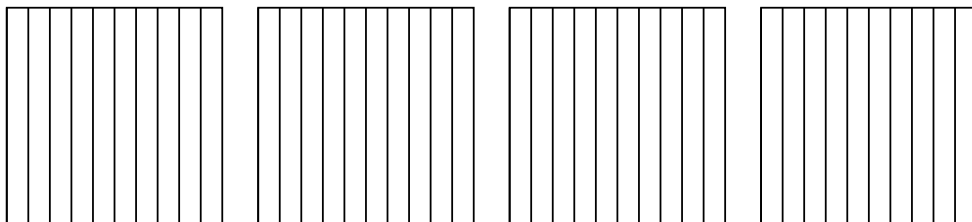
5. \_\_\_\_\_

6. \_\_\_\_\_

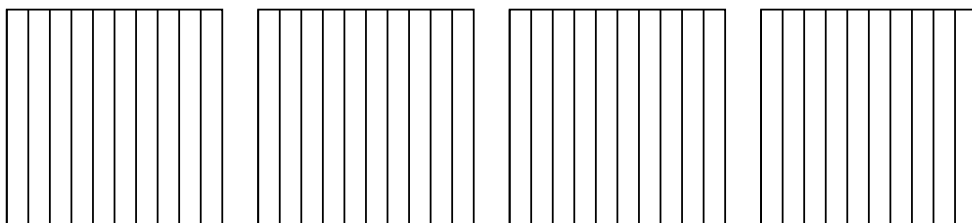
3)  $2 \times 0.4 =$



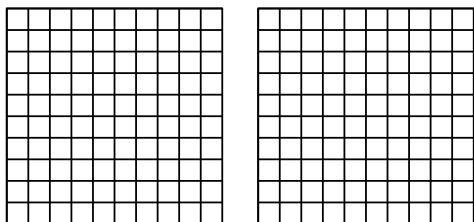
4)  $4 \times 0.7 =$



5)  $4 \times 0.8 =$



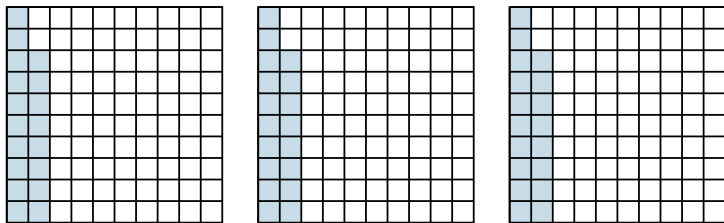
6)  $2 \times 0.38 =$



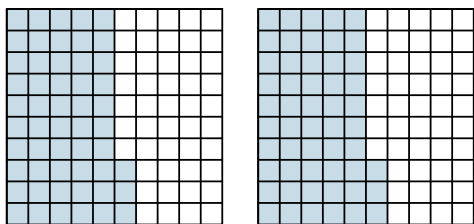


Use the visual model to solve each problem.

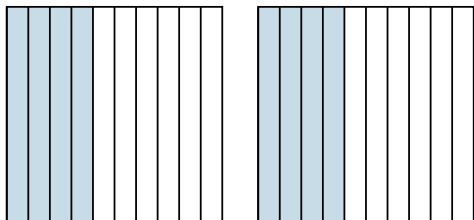
1)  $3 \times 0.18 =$



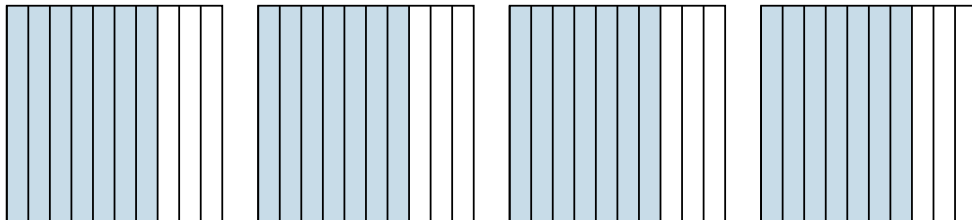
2)  $2 \times 0.53 =$



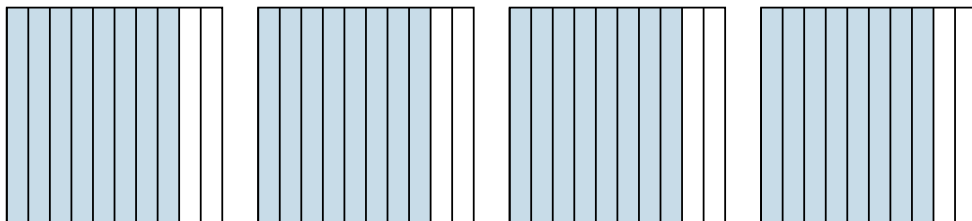
3)  $2 \times 0.4 =$



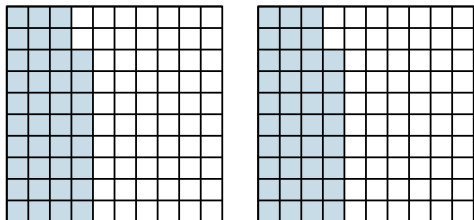
4)  $4 \times 0.7 =$



5)  $4 \times 0.8 =$



6)  $2 \times 0.38 =$



Answers

1.  $\frac{54}{100} = 0.54$

2.  $\frac{106}{100} = 1.06$

3.  $\frac{8}{10} = 0.8$

4.  $\frac{28}{10} = 2.8$

5.  $\frac{32}{10} = 3.2$

6.  $\frac{76}{100} = 0.76$