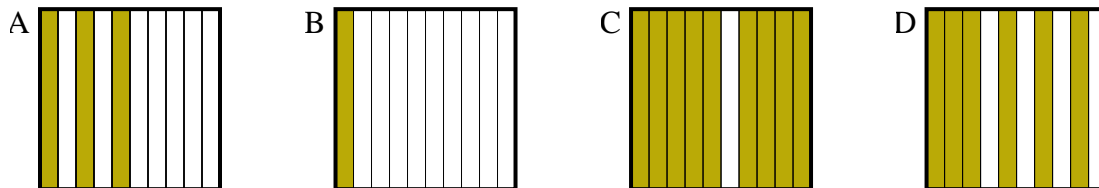




Determine which letter best answer the question.

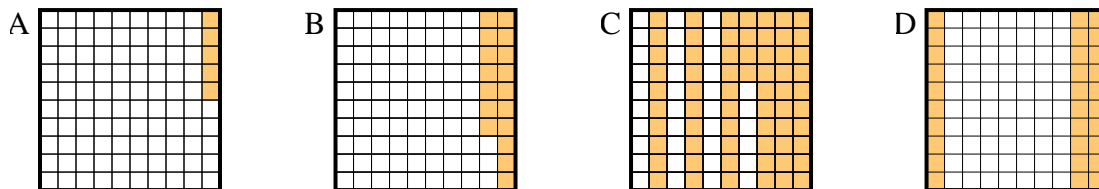
Answers

1) Which  $10 \times 1$  grid is shaded to represent the decimal number that, when added to 0.9, results in a total of 1.00?



1. \_\_\_\_\_

2) Which  $10 \times 10$  grid is shaded to represent the decimal number that, when added to 0.7, results in a total of 1.00?

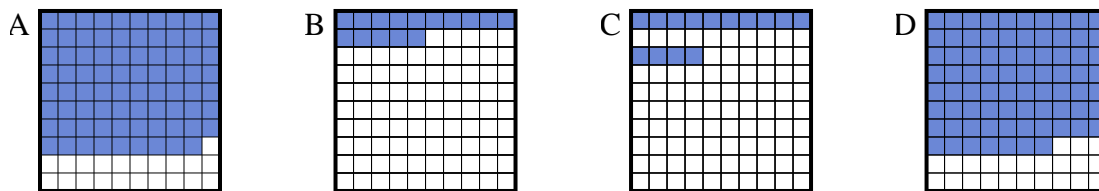


2. \_\_\_\_\_

3. \_\_\_\_\_

4. \_\_\_\_\_

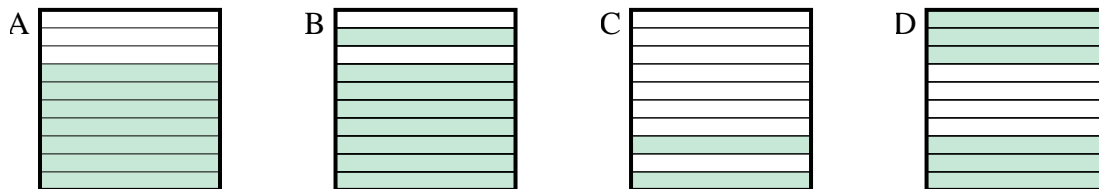
3) Which  $10 \times 10$  grid is shaded to represent the decimal number that, when added to 0.21, results in a total of 1.00?



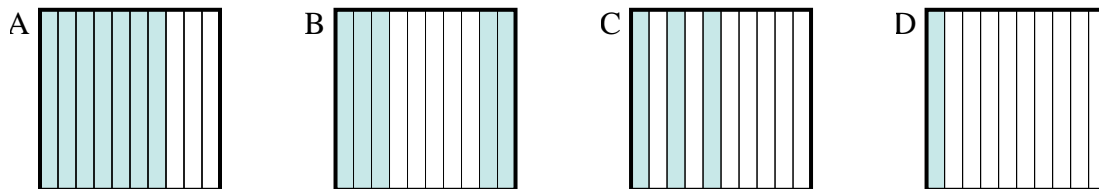
5. \_\_\_\_\_

6. \_\_\_\_\_

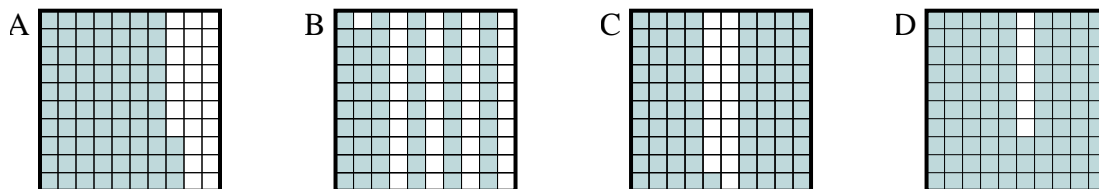
4) Which  $10 \times 1$  grid is shaded to represent the decimal number that, when added to 0.3, results in a total of 1.00?



5) Which  $10 \times 1$  grid is shaded to represent the decimal number that, when added to 0.5, results in a total of 1.00?



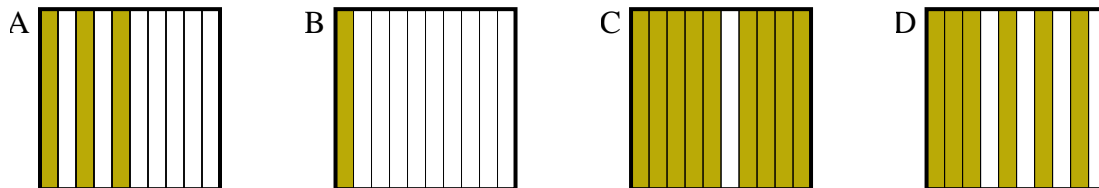
6) Which  $10 \times 10$  grid is shaded to represent the decimal number that, when added to 0.07, results in a total of 1.00?



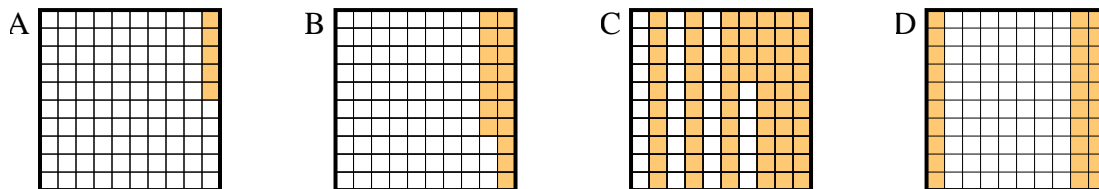


Determine which letter best answer the question.

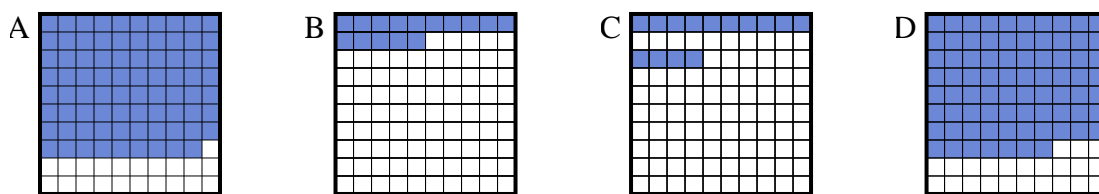
- 1) Which  $10 \times 1$  grid is shaded to represent the decimal number that, when added to 0.9, results in a total of 1.00?



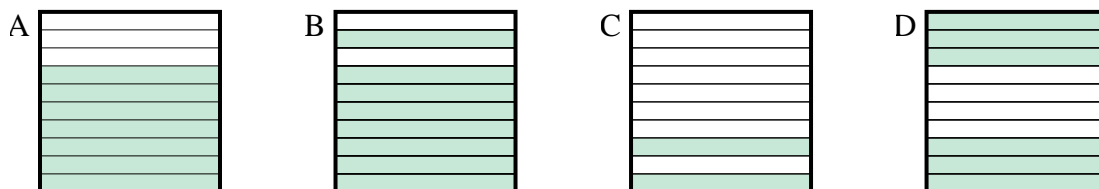
- 2) Which  $10 \times 10$  grid is shaded to represent the decimal number that, when added to 0.7, results in a total of 1.00?



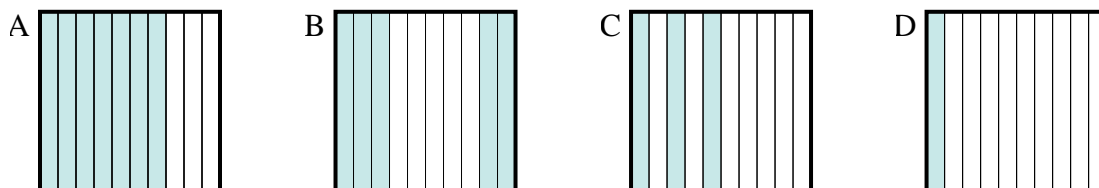
- 3) Which  $10 \times 10$  grid is shaded to represent the decimal number that, when added to 0.21, results in a total of 1.00?



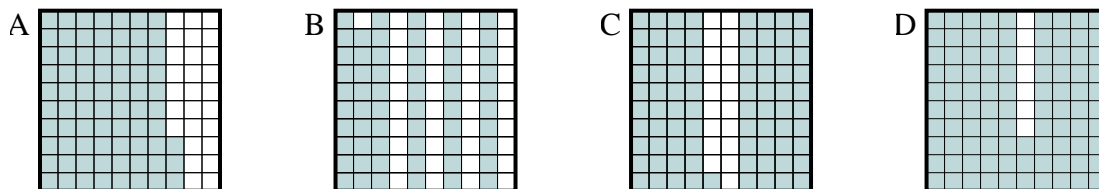
- 4) Which  $10 \times 1$  grid is shaded to represent the decimal number that, when added to 0.3, results in a total of 1.00?



- 5) Which  $10 \times 1$  grid is shaded to represent the decimal number that, when added to 0.5, results in a total of 1.00?



- 6) Which  $10 \times 10$  grid is shaded to represent the decimal number that, when added to 0.07, results in a total of 1.00?

Answers1. **B**2. **D**3. **A**4. **A**5. **B**6. **D**