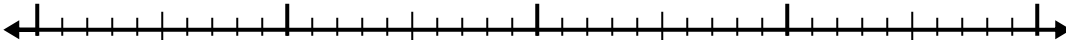


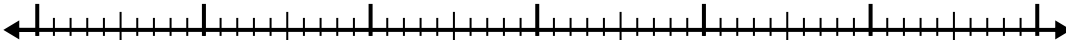


Use the number line to solve each problem.

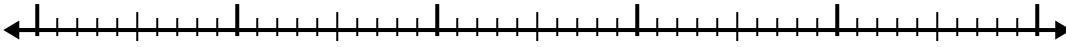
1) $2.5 + 2.9 =$



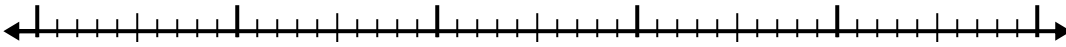
2) $6.6 + 3.8 =$




3) $8.8 + 3.1 =$



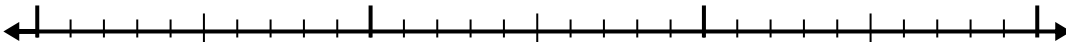
4) $7.6 + 3.3 =$



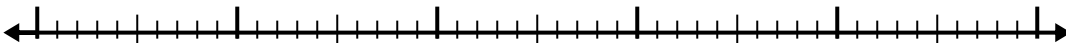
5) $7.8 + 3.7 =$



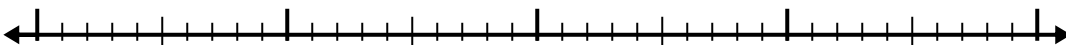
6) $6.6 + 1.7 =$



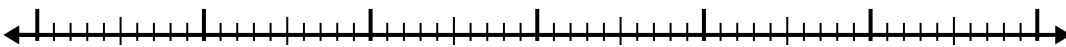
7) $3.1 + 3.8 =$



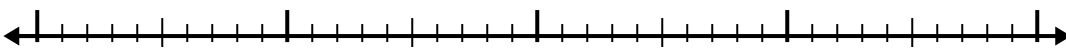
8) $3.3 + 2.7 =$



9) $2.4 + 3.3 =$



10) $7.4 + 2.8 =$



Answers

1. _____

2. _____

3. _____

4. _____

5. _____

6. _____

7. _____

8. _____

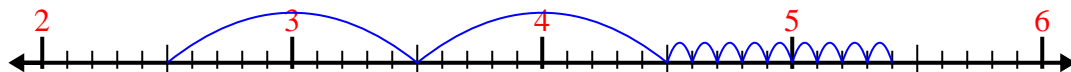
9. _____

10. _____

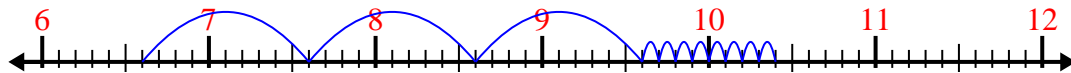


Use the number line to solve each problem.

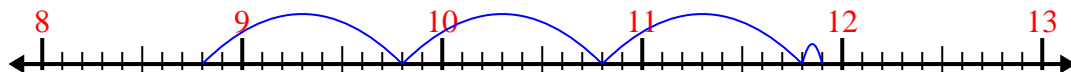
1) $2.5 + 2.9 =$



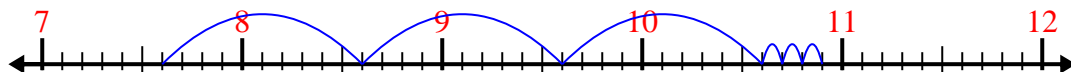
2) $6.6 + 3.8 =$



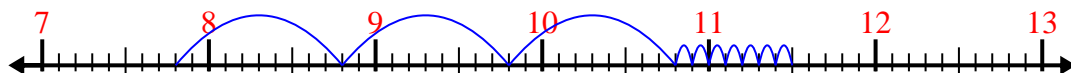
3) $8.8 + 3.1 =$



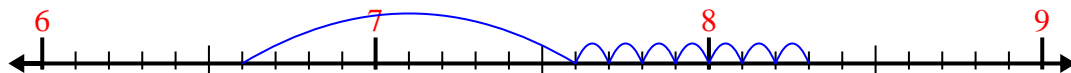
4) $7.6 + 3.3 =$



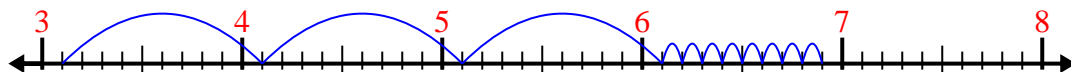
5) $7.8 + 3.7 =$



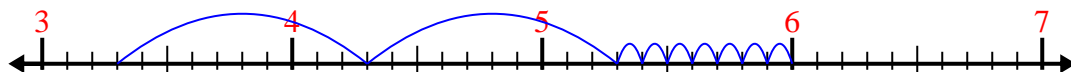
6) $6.6 + 1.7 =$



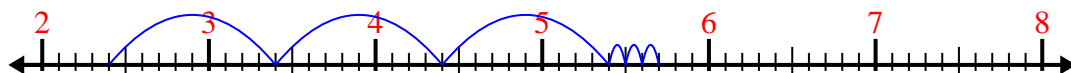
7) $3.1 + 3.8 =$



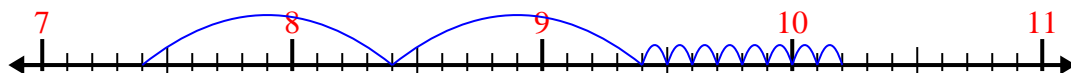
8) $3.3 + 2.7 =$



9) $2.4 + 3.3 =$



10) $7.4 + 2.8 =$



Answers

1. 5.4

2. 10.4

3. 11.9

4. 10.9

5. 11.5

6. 8.3

7. 6.9

8. 6.0

9. 5.7

10. 10.2