



Determine which letter best represents the volume.

Milliliter

A milliliter is equal to about 20 drops of water.



Liter

Many large soda bottles are either 1 or 2 liters.

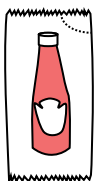
1 Liter = 1,000 Milliliters



Answers

1. _____
2. _____
3. _____
4. _____
5. _____
6. _____
7. _____
8. _____
9. _____

1)



Ketchup in a packet

- A. 500 milliliters
- B. 1 liter
- C. 1 milliliter
- D. 50 milliliters


2)



Liquid a spoon holds

- A. 5 liters
- B. 500 milliliters
- C. 5 milliliters
- D. 1 liter

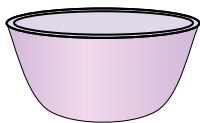
3)



Liquid in a pitcher

- A. 1 liter
- B. 5 liters
- C. 20 milliliters
- D. 500 milliliters

4)



Cereal Bowl

- A. 1 milliliter
- B. 50 milliliters
- C. 475 milliliters
- D. 2 liters

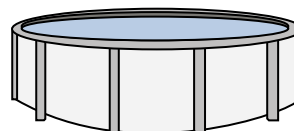
5)



Measuring Cup

- A. 237 liters
- B. 50 milliliters
- C. 237 milliliters
- D. 1 liter

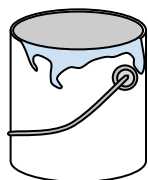
6)



Water in a pool

- A. 12000 milliliters
- B. 12000 liters
- C. 800 liters
- D. 800 milliliters

7)



Paint in a can

- A. 400 milliliters
- B. 20 milliliters
- C. 3.75 liters
- D. 1 liter

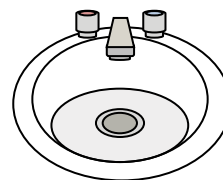
8)



Shampoo in a bottle

- A. 1 milliliter
- B. 1.5 liters
- C. 20 milliliters
- D. 20 liters

9)



Water in bathroom sink

- A. 10 milliliters
- B. 2 liters
- C. 500 milliliters
- D. 7.5 liters



Determine which letter best represents the volume.

Milliliter

A milliliter is equal to about 20 drops of water.



Liter

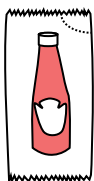
Many large soda bottles are either 1 or 2 liters.

1 Liter = 1,000 Milliliters



Answers

1)



Ketchup in a packet

- A. 500 milliliters
- B. 1 liter
- C. 1 milliliter
- D. 50 milliliters


2)



Liquid a spoon holds

- A. 5 liters
- B. 500 milliliters
- C. 5 milliliters
- D. 1 liter

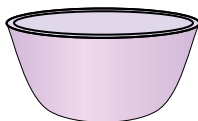
3)



Liquid in a pitcher

- A. 1 liter
- B. 5 liters
- C. 20 milliliters
- D. 500 milliliters

4)



Cereal Bowl

- A. 1 milliliter
- B. 50 milliliters
- C. 475 milliliters
- D. 2 liters

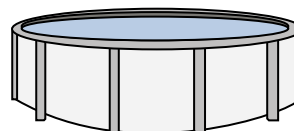
5)



Measuring Cup

- A. 237 liters
- B. 50 milliliters
- C. 237 milliliters
- D. 1 liter

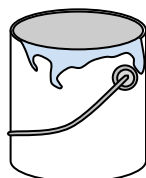
6)



Water in a pool

- A. 12000 milliliters
- B. 12000 liters
- C. 800 liters
- D. 800 milliliters

7)



Paint in a can

- A. 400 milliliters
- B. 20 milliliters
- C. 3.75 liters
- D. 1 liter

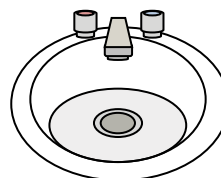
8)



Shampoo in a bottle

- A. 1 milliliter
- B. 1.5 liters
- C. 20 milliliters
- D. 20 liters

9)



Water in bathroom sink

- A. 10 milliliters
- B. 2 liters
- C. 500 milliliters
- D. 7.5 liters


- 1. **C**
- 2. **C**
- 3. **B**
- 4. **C**
- 5. **C**
- 6. **B**
- 7. **C**
- 8. **B**
- 9. **D**



Determine which letter best represents the volume.

Milliliter

A milliliter is equal to about 20 drops of water.



Liter

Many large soda bottles are either 1 or 2 liters.


1 Liter = 1,000 Milliliters



Answers

1. _____
2. _____
3. _____
4. _____
5. _____
6. _____
7. _____
8. _____
9. _____

1)



Eyedropper holds

- A. 500 milliliters
- B. 1000 milliliters
- C. 2 liters
- D. 2 milliliters


2)



Soda in a can

- A. 2 liters
- B. 2 milliliters
- C. 350 liters
- D. 350 milliliters


3)



Water in an ice tray

- A. 2 milliliters
- B. 50 milliliters
- C. 2 liters
- D. 0.5 liters

4)



Bathtub

- A. 3 liters
- B. 500 milliliters
- C. 170 liters
- D. 5 milliliters

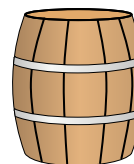
5)



Ink in a pen

- A. 0.25 milliliters
- B. 2 milliliters
- C. 400 milliliters
- D. 1 liter

6)



Water a barrel holds

- A. 200 milliliters
- B. 200 liters
- C. 5 milliliters
- D. 3 liters

7)



Measuring Cup

- A. 50 milliliters
- B. 237 milliliters
- C. 1 liter
- D. 237 liters

8)



Shampoo in a bottle

- A. 1.5 liters
- B. 1 milliliter
- C. 20 liters
- D. 20 milliliters

9)



Toothpaste in a tube

- A. 1 liter
- B. 2 liters
- C. 5 milliliters
- D. 120 milliliters



Determine which letter best represents the volume.

Milliliter

A milliliter is equal to about 20 drops of water.



Liter


Many large soda bottles are either 1 or 2 liters.

1 Liter = 1,000 Milliliters




Answers

1)



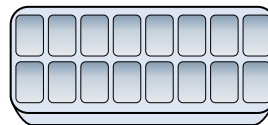
- Eyedropper holds
- A. 500 milliliters
 - B. 1000 milliliters
 - C. 2 liters
 - D. 2 milliliters

2)




- Soda in a can
- A. 2 liters
 - B. 2 milliliters
 - C. 350 liters
 - D. 350 milliliters

3)



- Water in an ice tray
- A. 2 milliliters
 - B. 50 milliliters
 - C. 2 liters
 - D. 0.5 liters

4)



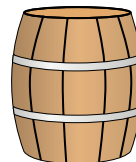
- Bathtub
- A. 3 liters
 - B. 500 milliliters
 - C. 170 liters
 - D. 5 milliliters

5)



- Ink in a pen
- A. 0.25 milliliters
 - B. 2 milliliters
 - C. 400 milliliters
 - D. 1 liter

6)




- Water a barrel holds
- A. 200 milliliters
 - B. 200 liters
 - C. 5 milliliters
 - D. 3 liters

7)



- Measuring Cup
- A. 50 milliliters
 - B. 237 milliliters
 - C. 1 liter
 - D. 237 liters

8)



- Shampoo in a bottle
- A. 1.5 liters
 - B. 1 milliliter
 - C. 20 liters
 - D. 20 milliliters

9)



- Toothpaste in a tube
- A. 1 liter
 - B. 2 liters
 - C. 5 milliliters
 - D. 120 milliliters


- 1. **D**
- 2. **D**
- 3. **D**
- 4. **C**
- 5. **A**
- 6. **B**
- 7. **B**
- 8. **A**
- 9. **D**



Determine which letter best represents the volume.

Milliliter

A milliliter is equal to about 20 drops of water.



Liter

Many large soda bottles are either 1 or 2 liters.

1 Liter = 1,000 Milliliters



Answers

1. _____
2. _____
3. _____
4. _____
5. _____
6. _____
7. _____
8. _____
9. _____

1)



Measuring Cup

- A. 237 liters
- B. 1 liter
- C. 237 milliliters
- D. 50 milliliters


2)



Water for a house plant

- A. 3 liters
- B. 80 liters
- C. 500 milliliters
- D. 2 milliliters

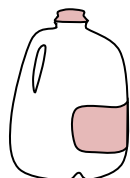
3)



Gas tank in a car

- A. 3 liters
- B. 60 liters
- C. 15 milliliters
- D. 70 milliliters

4)



Gallon of Milk

- A. 750 milliliters
- B. 3.75 liters
- C. 1 liter
- D. 50 milliliters

5)



Flour in a batch of cookies

- A. 350 milliliters
- B. 1 milliliter
- C. 2 liters
- D. 10 milliliters


6)



Cereal Bowl

- A. 475 milliliters
- B. 1 milliliter
- C. 50 milliliters
- D. 2 liters


7)



Ice Chest

- A. 100 liters
- B. 200 milliliters
- C. 100 milliliters
- D. 20 milliliters


8)



Soda in a can

- A. 350 milliliters
- B. 350 liters
- C. 2 milliliters
- D. 2 liters

9)



Bathtub


- A. 170 liters
- B. 3 liters
- C. 500 milliliters
- D. 5 milliliters



Determine which letter best represents the volume.

Milliliter

A milliliter is equal to about 20 drops of water.



Liter

Many large soda bottles are either 1 or 2 liters.

1 Liter = 1,000 Milliliters



Answers

1)



Measuring Cup

- A. 237 liters
- B. 1 liter
- C. 237 milliliters
- D. 50 milliliters

2)



Water for a house plant

- A. 3 liters
- B. 80 liters
- C. 500 milliliters
- D. 2 milliliters

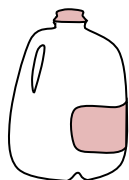
3)



Gas tank in a car

- A. 3 liters
- B. 60 liters
- C. 15 milliliters
- D. 70 milliliters

4)



Gallon of Milk

- A. 750 milliliters
- B. 3.75 liters
- C. 1 liter
- D. 50 milliliters

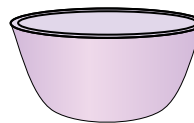
5)



Flour in a batch of cookies

- A. 350 milliliters
- B. 1 milliliter
- C. 2 liters
- D. 10 milliliters


6)



Cereal Bowl

- A. 475 milliliters
- B. 1 milliliter
- C. 50 milliliters
- D. 2 liters


7)



Ice Chest

- A. 100 liters
- B. 200 milliliters
- C. 100 milliliters
- D. 20 milliliters


8)



Soda in a can

- A. 350 milliliters
- B. 350 liters
- C. 2 milliliters
- D. 2 liters

9)



Bathtub

- A. 170 liters
- B. 3 liters
- C. 500 milliliters
- D. 5 milliliters


- 1. **C**
- 2. **C**
- 3. **B**
- 4. **B**
- 5. **A**
- 6. **A**
- 7. **A**
- 8. **A**
- 9. **A**



Determine which letter best represents the volume.

Milliliter

A milliliter is equal to about 20 drops of water.



Liter

Many large soda bottles are either 1 or 2 liters.

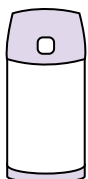
1 Liter = 1,000 Milliliters



Answers

1. _____
2. _____
3. _____
4. _____
5. _____
6. _____
7. _____
8. _____
9. _____

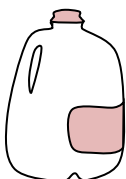
1)



Liquid in a thermos

- A. 20 liters
- B. 3 liters
- C. 440 milliliters
- D. 20 milliliters

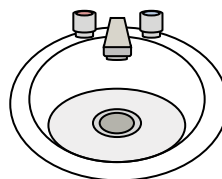
2)



Gallon of Milk

- A. 1 liter
- B. 3.75 liters
- C. 50 milliliters
- D. 750 milliliters

3)



Water in bathroom sink

- A. 500 milliliters
- B. 10 milliliters
- C. 7.5 liters
- D. 2 liters


4)



Measuring Cup

- A. 50 milliliters
- B. 237 milliliters
- C. 1 liter
- D. 237 liters

5)



Soda in a can

- A. 2 liters
- B. 350 milliliters
- C. 350 liters
- D. 2 milliliters

6)



Water for a house plant

- A. 2 milliliters
- B. 80 liters
- C. 500 milliliters
- D. 3 liters

7)



Cafeteria Milk

- A. 237 liters
- B. 1 liter
- C. 237 milliliters
- D. 2 liters

8)



Ink in a pen

- A. 2 milliliters
- B. 0.25 milliliters
- C. 1 liter
- D. 400 milliliters

9)



Liquid in a tea cup


- A. 2 milliliters
- B. 250 milliliters
- C. 2 liters
- D. 5 liters



Determine which letter best represents the volume.

Milliliter

A milliliter is equal to about 20 drops of water.



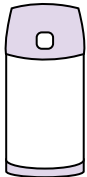
Liter


Many large soda bottles are either 1 or 2 liters.

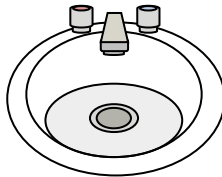
1 Liter = 1,000 Milliliters





Answers


- 1) 
 Liquid in a thermos
 A. 20 liters
 B. 3 liters
 C. 440 milliliters
 D. 20 milliliters


- 2) 
 Gallon of Milk
 A. 1 liter
 B. 3.75 liters
 C. 50 milliliters
 D. 750 milliliters


- 3) 
 Water in bathroom sink
 A. 500 milliliters
 B. 10 milliliters
 C. 7.5 liters
 D. 2 liters


- 4) 
 Measuring Cup
 A. 50 milliliters
 B. 237 milliliters
 C. 1 liter
 D. 237 liters

- 5) 
 Soda in a can
 A. 2 liters
 B. 350 milliliters
 C. 350 liters
 D. 2 milliliters

- 6) 
 Water for a house plant
 A. 2 milliliters
 B. 80 liters
 C. 500 milliliters
 D. 3 liters

- 7) 
 Cafeteria Milk
 A. 237 liters
 B. 1 liter
 C. 237 milliliters
 D. 2 liters

- 8) 
 Ink in a pen
 A. 2 milliliters
 B. 0.25 milliliters
 C. 1 liter
 D. 400 milliliters

- 9) 
 Liquid in a tea cup
 A. 2 milliliters
 B. 250 milliliters
 C. 2 liters
 D. 5 liters

1. **C**
 2. **B**
 3. **C**
 4. **B**
 5. **B**
 6. **C**
 7. **C**
 8. **B**
 9. **B**



Determine which letter best represents the volume.

Milliliter

A milliliter is equal to about 20 drops of water.



Liter

Many large soda bottles are either 1 or 2 liters.


1 Liter = 1,000 Milliliters



Answers

1. _____
2. _____
3. _____
4. _____
5. _____
6. _____
7. _____
8. _____
9. _____

1)



Soda in a can

- A. 350 liters
- B. 2 milliliters
- C. 350 milliliters
- D. 2 liters


2)



Flour in a pan of brownies

- A. 10 milliliters
- B. 0.5 liters
- C. 3 liters
- D. 16 liters


3)



Sand a wheel barrow holds

- A. 500 milliliters
- B. 3 liters
- C. 170 liters
- D. 50 milliliters

4)



Gas tank in a car

- A. 3 liters
- B. 70 milliliters
- C. 60 liters
- D. 15 milliliters

5)



Sand in a pail

- A. 20 liters
- B. 1 milliliter
- C. 4 liters
- D. 4 milliliters


6)



Glue in a bottle

- A. 120 milliliters
- B. 3 milliliters
- C. 5 liters
- D. 2 liters

7)



Water in an ice tray

- A. 2 milliliters
- B. 0.5 liters
- C. 50 milliliters
- D. 2 liters

8)



Measuring Cup

- A. 237 milliliters
- B. 237 liters
- C. 50 milliliters
- D. 1 liter

9)



Shampoo in a bottle

- A. 1 milliliter
- B. 1.5 liters
- C. 20 liters
- D. 20 milliliters



Determine which letter best represents the volume.

Milliliter

A milliliter is equal to about 20 drops of water.



Liter

Many large soda bottles are either 1 or 2 liters.

1 Liter = 1,000 Milliliters



Answers

1)



Soda in a can

- A. 350 liters
- B. 2 milliliters
- C. 350 milliliters
- D. 2 liters


2)



Flour in a pan of brownies

- A. 10 milliliters
- B. 0.5 liters
- C. 3 liters
- D. 16 liters


3)



Sand a wheel barrow holds

- A. 500 milliliters
- B. 3 liters
- C. 170 liters
- D. 50 milliliters

4)



Gas tank in a car

- A. 3 liters
- B. 70 milliliters
- C. 60 liters
- D. 15 milliliters

5)



Sand in a pail

- A. 20 liters
- B. 1 milliliter
- C. 4 liters
- D. 4 milliliters


6)



Glue in a bottle

- A. 120 milliliters
- B. 3 milliliters
- C. 5 liters
- D. 2 liters

7)



Water in an ice tray

- A. 2 milliliters
- B. 0.5 liters
- C. 50 milliliters
- D. 2 liters

8)



Measuring Cup

- A. 237 milliliters
- B. 237 liters
- C. 50 milliliters
- D. 1 liter

9)



Shampoo in a bottle

- A. 1 milliliter
- B. 1.5 liters
- C. 20 liters
- D. 20 milliliters


- 1. **C**
- 2. **B**
- 3. **C**
- 4. **C**
- 5. **C**
- 6. **A**
- 7. **B**
- 8. **A**
- 9. **B**



Determine which letter best represents the volume.

Milliliter

A milliliter is equal to about 20 drops of water.



Liter

Many large soda bottles are either 1 or 2 liters.


1 Liter = 1,000 Milliliters



Answers

1. _____
2. _____
3. _____
4. _____
5. _____
6. _____
7. _____
8. _____
9. _____

1)



Gas tank in a car

- A. 15 milliliters
- B. 70 milliliters
- C. 3 liters
- D. 60 liters

2)



Liquid a spoon holds

- A. 500 milliliters
- B. 5 milliliters
- C. 1 liter
- D. 5 liters

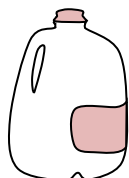
3)



Shampoo in a bottle

- A. 1 milliliter
- B. 20 liters
- C. 1.5 liters
- D. 20 milliliters

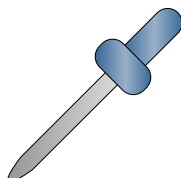
4)



Gallon of Milk

- A. 750 milliliters
- B. 1 liter
- C. 50 milliliters
- D. 3.75 liters

5)



Eyedropper holds

- A. 1000 milliliters
- B. 500 milliliters
- C. 2 milliliters
- D. 2 liters

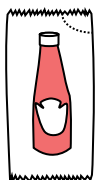
6)



Cereal Bowl

- A. 475 milliliters
- B. 50 milliliters
- C. 1 milliliter
- D. 2 liters

7)



Ketchup in a packet

- A. 50 milliliters
- B. 1 milliliter
- C. 1 liter
- D. 500 milliliters


8)



Toothpaste in a tube

- A. 5 milliliters
- B. 1 liter
- C. 120 milliliters
- D. 2 liters

9)



Water in an ice tray

- A. 2 milliliters
- B. 0.5 liters
- C. 2 liters
- D. 50 milliliters



Determine which letter best represents the volume.

Milliliter

A milliliter is equal to about 20 drops of water.



Liter


Many large soda bottles are either 1 or 2 liters.

1 Liter = 1,000 Milliliters



Answers

1)



Gas tank in a car

- A. 15 milliliters
- B. 70 milliliters
- C. 3 liters
- D. 60 liters

2)



Liquid a spoon holds

- A. 500 milliliters
- B. 5 milliliters
- C. 1 liter
- D. 5 liters

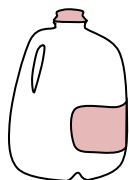
3)



Shampoo in a bottle

- A. 1 milliliter
- B. 20 liters
- C. 1.5 liters
- D. 20 milliliters


4)



Gallon of Milk

- A. 750 milliliters
- B. 1 liter
- C. 50 milliliters
- D. 3.75 liters

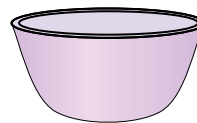
5)



Eyedropper holds

- A. 1000 milliliters
- B. 500 milliliters
- C. 2 milliliters
- D. 2 liters

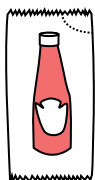
6)



Cereal Bowl

- A. 475 milliliters
- B. 50 milliliters
- C. 1 milliliter
- D. 2 liters

7)



Ketchup in a packet

- A. 50 milliliters
- B. 1 milliliter
- C. 1 liter
- D. 500 milliliters


8)



Toothpaste in a tube

- A. 5 milliliters
- B. 1 liter
- C. 120 milliliters
- D. 2 liters

9)



Water in an ice tray

- A. 2 milliliters
- B. 0.5 liters
- C. 2 liters
- D. 50 milliliters


- 1. **D**
- 2. **B**
- 3. **C**
- 4. **D**
- 5. **C**
- 6. **A**
- 7. **B**
- 8. **C**
- 9. **B**



Determine which letter best represents the volume.

Milliliter

A milliliter is equal to about 20 drops of water.



Liter

Many large soda bottles are either 1 or 2 liters.

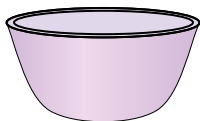
1 Liter = 1,000 Milliliters



Answers

1. _____
2. _____
3. _____
4. _____
5. _____
6. _____
7. _____
8. _____
9. _____


1)



Cereal Bowl

- A. 50 milliliters
- B. 475 milliliters
- C. 1 milliliter
- D. 2 liters

2)



Eyedropper holds

- A. 500 milliliters
- B. 1000 milliliters
- C. 2 milliliters
- D. 2 liters

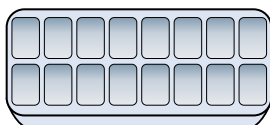
3)



Cafeteria Milk

- A. 1 liter
- B. 237 milliliters
- C. 237 liters
- D. 2 liters


4)



Water in an ice tray

- A. 2 milliliters
- B. 0.5 liters
- C. 50 milliliters
- D. 2 liters


5)



Soda in a can

- A. 350 milliliters
- B. 2 milliliters
- C. 2 liters
- D. 350 liters

6)



Gas tank in a car

- A. 15 milliliters
- B. 60 liters
- C. 70 milliliters
- D. 3 liters

7)



Flour in a pan of brownies

- A. 3 liters
- B. 0.5 liters
- C. 16 liters
- D. 10 milliliters

8)



Water for a house plant

- A. 2 milliliters
- B. 3 liters
- C. 500 milliliters
- D. 80 liters

9)



Shampoo in a bottle


- A. 20 liters
- B. 1.5 liters
- C. 20 milliliters
- D. 1 milliliter



Determine which letter best represents the volume.

Milliliter

A milliliter is equal to about 20 drops of water.



Liter

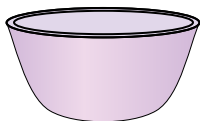
Many large soda bottles are either 1 or 2 liters.

1 Liter = 1,000 Milliliters



Answers


1)



Cereal Bowl

- A. 50 milliliters
- B. 475 milliliters
- C. 1 milliliter
- D. 2 liters

2)



Eyedropper holds

- A. 500 milliliters
- B. 1000 milliliters
- C. 2 milliliters
- D. 2 liters

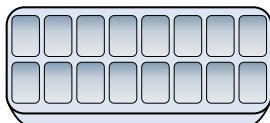
3)



Cafeteria Milk

- A. 1 liter
- B. 237 milliliters
- C. 237 liters
- D. 2 liters

4)



Water in an ice tray

- A. 2 milliliters
- B. 0.5 liters
- C. 50 milliliters
- D. 2 liters


5)



Soda in a can

- A. 350 milliliters
- B. 2 milliliters
- C. 2 liters
- D. 350 liters

6)



Gas tank in a car

- A. 15 milliliters
- B. 60 liters
- C. 70 milliliters
- D. 3 liters

7)



Flour in a pan of brownies

- A. 3 liters
- B. 0.5 liters
- C. 16 liters
- D. 10 milliliters

8)



Water for a house plant

- A. 2 milliliters
- B. 3 liters
- C. 500 milliliters
- D. 80 liters

9)



Shampoo in a bottle

- A. 20 liters
- B. 1.5 liters
- C. 20 milliliters
- D. 1 milliliter

- 1. **B**
- 2. **C**
- 3. **B**
- 4. **B**
- 5. **A**
- 6. **B**
- 7. **B**
- 8. **C**
- 9. **B**



Determine which letter best represents the volume.

Milliliter

A milliliter is equal to about 20 drops of water.



Liter

Many large soda bottles are either 1 or 2 liters.


1 Liter = 1,000 Milliliters



Answers

1. _____
2. _____
3. _____
4. _____
5. _____
6. _____
7. _____
8. _____
9. _____

1)



Liquid in a pitcher

- A. 5 liters
- B. 20 milliliters
- C. 1 liter
- D. 500 milliliters

2)



Flour in a pan of brownies

- A. 3 liters
- B. 0.5 liters
- C. 10 milliliters
- D. 16 liters


3)



Liquid in a tea cup

- A. 2 milliliters
- B. 2 liters
- C. 250 milliliters
- D. 5 liters


4)



Eyedropper holds

- A. 1000 milliliters
- B. 2 liters
- C. 500 milliliters
- D. 2 milliliters

5)



Sand a wheel barrow holds

- A. 50 milliliters
- B. 500 milliliters
- C. 3 liters
- D. 170 liters

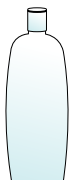
6)



Measuring Cup

- A. 1 liter
- B. 237 liters
- C. 50 milliliters
- D. 237 milliliters


7)



Shampoo in a bottle

- A. 1 milliliter
- B. 20 milliliters
- C. 1.5 liters
- D. 20 liters

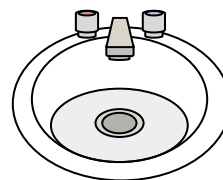
8)



Gas tank in a car

- A. 60 liters
- B. 15 milliliters
- C. 70 milliliters
- D. 3 liters

9)



Water in bathroom sink


- A. 10 milliliters
- B. 2 liters
- C. 500 milliliters
- D. 7.5 liters



Determine which letter best represents the volume.

Milliliter

A milliliter is equal to about 20 drops of water.




Liter


Many large soda bottles are either 1 or 2 liters.


1 Liter = 1,000 Milliliters





Answers


1) 
Liquid in a pitcher
A. 5 liters
B. 20 milliliters
C. 1 liter
D. 500 milliliters


2) 
Flour in a pan of brownies
A. 3 liters
B. 0.5 liters
C. 10 milliliters
D. 16 liters


3) 
Liquid in a tea cup
A. 2 milliliters
B. 2 liters
C. 250 milliliters
D. 5 liters

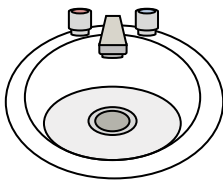
4) 
Eyedropper holds
A. 1000 milliliters
B. 2 liters
C. 500 milliliters
D. 2 milliliters

5) 
Sand a wheel barrow holds
A. 50 milliliters
B. 500 milliliters
C. 3 liters
D. 170 liters

6) 
Measuring Cup
A. 1 liter
B. 237 liters
C. 50 milliliters
D. 237 milliliters

7) 
Shampoo in a bottle
A. 1 milliliter
B. 20 milliliters
C. 1.5 liters
D. 20 liters

8) 
Gas tank in a car
A. 60 liters
B. 15 milliliters
C. 70 milliliters
D. 3 liters

9) 
Water in bathroom sink
A. 10 milliliters
B. 2 liters
C. 500 milliliters
D. 7.5 liters

- 1. **A**
- 2. **B**
- 3. **C**
- 4. **D**
- 5. **D**
- 6. **D**
- 7. **C**
- 8. **A**
- 9. **D**



Determine which letter best represents the volume.

Milliliter

A milliliter is equal to about 20 drops of water.



Liter

Many large soda bottles are either 1 or 2 liters.

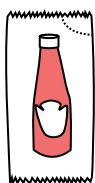
1 Liter = 1,000 Milliliters



Answers

1. _____
2. _____
3. _____
4. _____
5. _____
6. _____
7. _____
8. _____
9. _____

1)



Ketchup in a packet

- A. 1 milliliter
- B. 50 milliliters
- C. 1 liter
- D. 500 milliliters

2)



Glue in a bottle

- A. 120 milliliters
- B. 3 milliliters
- C. 2 liters
- D. 5 liters

3)



Flour in a pan of brownies

- A. 3 liters
- B. 10 milliliters
- C. 16 liters
- D. 0.5 liters

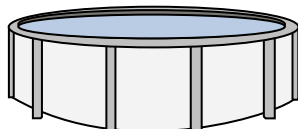
4)



Sand in a pail

- A. 1 milliliter
- B. 20 liters
- C. 4 liters
- D. 4 milliliters

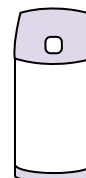
5)



Water in a pool

- A. 12000 milliliters
- B. 800 liters
- C. 12000 liters
- D. 800 milliliters


6)



Liquid in a thermos

- A. 440 milliliters
- B. 20 liters
- C. 3 liters
- D. 20 milliliters


7)



Gas tank in a car

- A. 15 milliliters
- B. 60 liters
- C. 3 liters
- D. 70 milliliters

8)



Sand a wheel barrow holds

- A. 50 milliliters
- B. 170 liters
- C. 500 milliliters
- D. 3 liters

9)



Soda in a can

- A. 350 liters
- B. 2 liters
- C. 2 milliliters
- D. 350 milliliters



Determine which letter best represents the volume.

Milliliter

A milliliter is equal to about 20 drops of water.



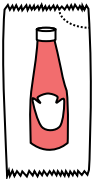
Liter


Many large soda bottles are either 1 or 2 liters.


1 Liter = 1,000 Milliliters




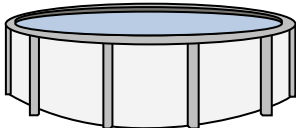
Answers

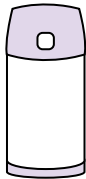
- 1) 
 Ketchup in a packet
 A. 1 milliliter
 B. 50 milliliters
 C. 1 liter
 D. 500 milliliters


- 2) 
 Glue in a bottle
 A. 120 milliliters
 B. 3 milliliters
 C. 2 liters
 D. 5 liters


- 3) 
 Flour in a pan of brownies
 A. 3 liters
 B. 10 milliliters
 C. 16 liters
 D. 0.5 liters


- 4) 
 Sand in a pail
 A. 1 milliliter
 B. 20 liters
 C. 4 liters
 D. 4 milliliters

- 5) 
 Water in a pool
 A. 12000 milliliters
 B. 800 liters
 C. 12000 liters
 D. 800 milliliters

- 6) 
 Liquid in a thermos
 A. 440 milliliters
 B. 20 liters
 C. 3 liters
 D. 20 milliliters

- 7) 
 Gas tank in a car
 A. 15 milliliters
 B. 60 liters
 C. 3 liters
 D. 70 milliliters

- 8) 
 Sand a wheel barrow holds
 A. 50 milliliters
 B. 170 liters
 C. 500 milliliters
 D. 3 liters

- 9) 
 Soda in a can
 A. 350 liters
 B. 2 liters
 C. 2 milliliters
 D. 350 milliliters


1. **A**
 2. **A**
 3. **D**
 4. **C**
 5. **C**
 6. **A**
 7. **B**
 8. **B**
 9. **D**



Determine which letter best represents the volume.

Milliliter

A milliliter is equal to about 20 drops of water.



Liter

Many large soda bottles are either 1 or 2 liters.

1 Liter = 1,000 Milliliters



Answers

1. _____
2. _____
3. _____
4. _____
5. _____
6. _____
7. _____
8. _____
9. _____

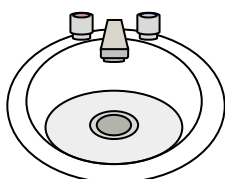
1)



Glue in a bottle

- A. 5 liters
- B. 120 milliliters
- C. 2 liters
- D. 3 milliliters

2)



Water in bathroom sink

- A. 10 milliliters
- B. 7.5 liters
- C. 500 milliliters
- D. 2 liters


3)



Shampoo in a bottle

- A. 20 liters
- B. 1 milliliter
- C. 1.5 liters
- D. 20 milliliters

4)



Ice Chest

- A. 20 milliliters
- B. 100 milliliters
- C. 200 milliliters
- D. 100 liters


5)



Liquid in a tea cup

- A. 250 milliliters
- B. 2 liters
- C. 2 milliliters
- D. 5 liters


6)



Eyedropper holds

- A. 1000 milliliters
- B. 2 milliliters
- C. 500 milliliters
- D. 2 liters

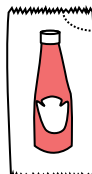
7)



Sand a wheel barrow holds

- A. 50 milliliters
- B. 3 liters
- C. 170 liters
- D. 500 milliliters


8)



Ketchup in a packet

- A. 500 milliliters
- B. 1 milliliter
- C. 1 liter
- D. 50 milliliters

9)



Gas tank in a car

- A. 60 liters
- B. 70 milliliters
- C. 15 milliliters
- D. 3 liters



Determine which letter best represents the volume.

Milliliter

A milliliter is equal to about 20 drops of water.



Liter

Many large soda bottles are either 1 or 2 liters.

1 Liter = 1,000 Milliliters



Answers

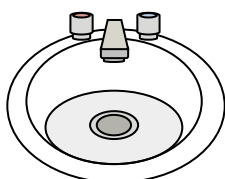
1)



Glue in a bottle

- A. 5 liters
- B. 120 milliliters
- C. 2 liters
- D. 3 milliliters

2)



Water in bathroom sink

- A. 10 milliliters
- B. 7.5 liters
- C. 500 milliliters
- D. 2 liters


3)



Shampoo in a bottle

- A. 20 liters
- B. 1 milliliter
- C. 1.5 liters
- D. 20 milliliters

4)



Ice Chest

- A. 20 milliliters
- B. 100 milliliters
- C. 200 milliliters
- D. 100 liters


5)



Liquid in a tea cup

- A. 250 milliliters
- B. 2 liters
- C. 2 milliliters
- D. 5 liters


6)



Eyedropper holds

- A. 1000 milliliters
- B. 2 milliliters
- C. 500 milliliters
- D. 2 liters

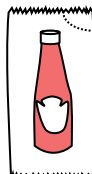
7)



Sand a wheel barrow holds

- A. 50 milliliters
- B. 3 liters
- C. 170 liters
- D. 500 milliliters


8)



Ketchup in a packet

- A. 500 milliliters
- B. 1 milliliter
- C. 1 liter
- D. 50 milliliters

9)



Gas tank in a car

- A. 60 liters
- B. 70 milliliters
- C. 15 milliliters
- D. 3 liters

- 1. **B**
- 2. **B**
- 3. **C**
- 4. **D**
- 5. **A**
- 6. **B**
- 7. **C**
- 8. **B**
- 9. **A**