



Determine which letter best represents the volume.

Milliliter

A milliliter is equal to about 20 drops of water.



Liter

Many large soda bottles are either 1 or 2 liters.


1 Liter = 1,000 Milliliters



Answers

1. _____
2. _____
3. _____
4. _____
5. _____
6. _____
7. _____
8. _____
9. _____

1)



Gas tank in a car

- A. 15 milliliters
- B. 70 milliliters
- C. 3 liters
- D. 60 liters

2)



Liquid a spoon holds

- A. 500 milliliters
- B. 5 milliliters
- C. 1 liter
- D. 5 liters

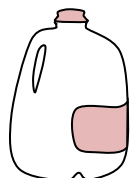
3)



Shampoo in a bottle

- A. 1 milliliter
- B. 20 liters
- C. 1.5 liters
- D. 20 milliliters

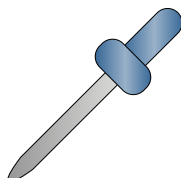
4)



Gallon of Milk

- A. 750 milliliters
- B. 1 liter
- C. 50 milliliters
- D. 3.75 liters

5)



Eyedropper holds

- A. 1000 milliliters
- B. 500 milliliters
- C. 2 milliliters
- D. 2 liters

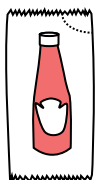
6)



Cereal Bowl

- A. 475 milliliters
- B. 50 milliliters
- C. 1 milliliter
- D. 2 liters

7)



Ketchup in a packet

- A. 50 milliliters
- B. 1 milliliter
- C. 1 liter
- D. 500 milliliters

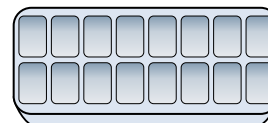
8)



Toothpaste in a tube

- A. 5 milliliters
- B. 1 liter
- C. 120 milliliters
- D. 2 liters

9)



Water in an ice tray

- A. 2 milliliters
- B. 0.5 liters
- C. 2 liters
- D. 50 milliliters



Determine which letter best represents the volume.

Milliliter

A milliliter is equal to about 20 drops of water.



Liter


Many large soda bottles are either 1 or 2 liters.

1 Liter = 1,000 Milliliters



Answers

1)



Gas tank in a car

- A. 15 milliliters
- B. 70 milliliters
- C. 3 liters
- D. 60 liters

2)



Liquid a spoon holds

- A. 500 milliliters
- B. 5 milliliters
- C. 1 liter
- D. 5 liters

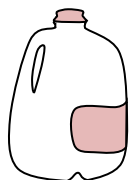
3)



Shampoo in a bottle

- A. 1 milliliter
- B. 20 liters
- C. 1.5 liters
- D. 20 milliliters


4)



Gallon of Milk

- A. 750 milliliters
- B. 1 liter
- C. 50 milliliters
- D. 3.75 liters

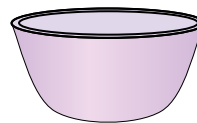
5)



Eyedropper holds

- A. 1000 milliliters
- B. 500 milliliters
- C. 2 milliliters
- D. 2 liters

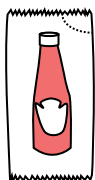
6)



Cereal Bowl

- A. 475 milliliters
- B. 50 milliliters
- C. 1 milliliter
- D. 2 liters

7)



Ketchup in a packet

- A. 50 milliliters
- B. 1 milliliter
- C. 1 liter
- D. 500 milliliters


8)



Toothpaste in a tube

- A. 5 milliliters
- B. 1 liter
- C. 120 milliliters
- D. 2 liters

9)



Water in an ice tray

- A. 2 milliliters
- B. 0.5 liters
- C. 2 liters
- D. 50 milliliters

- 1. **D**
- 2. **B**
- 3. **C**
- 4. **D**
- 5. **C**
- 6. **A**
- 7. **B**
- 8. **C**
- 9. **B**