



Determine which letter best represents the volume.

Answers

Cup

A cup is about the amount of milk you get from the cafeteria.



Pint

A pint is about the amount you get in a large glass.

1 pint = 2 cups



Quart

A quart is about the amount you get in a large milk container.

1 quart = 2 pints



Gallon

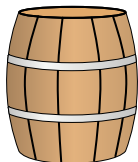
A gallon is the amount that comes in the large plastic container.

1 gallon = 4 quarts



1. _____
2. _____
3. _____
4. _____
5. _____
6. _____
7. _____
8. _____
9. _____


1)



Water a barrel holds

- A. 20 cups
- B. 10 pints
- C. 3 inches
- D. 50 gallons


2)



Gas tank in a car

- A. 3 quarts
- B. 4 pints
- C. 15 gallons
- D. 16 cups

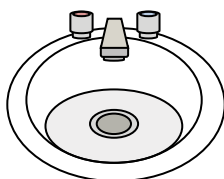
3)



Sand a wheel barrow holds

- A. 8 quarts
- B. 45 gallons
- C. 1000 grams
- D. 4 cups

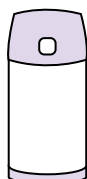
4)



Water in bathroom sink

- A. 2 fluid ounces
- B. 2 gallons
- C. 2 cups
- D. 2 pints

5)



Liquid in a thermos

- A. 1 cup
- B. 1 gallon
- C. 2 pounds
- D. 4 quarts


6)



Liquid a spoon holds

- A. 1 cup
- B. Less than a cup
- C. 1 pint
- D. 1 quart

7)



Liquid in a pitcher

- A. 1 pint
- B. 2 quarts
- C. 2 cups
- D. 8 gallons

8)



Ink in a pen

- A. 1 gallon
- B. 2 pints
- C. less than 1 cup
- D. 1 quart

9)



Soda in a can

- A. 4 cups
- B. 1.5 cups
- C. 4 pints
- D. 1 gallon



Determine which letter best represents the volume.

Cup

A cup is about the amount of milk you get from the cafeteria.



Pint

A pint is about the amount you get in a large glass.

1 pint = 2 cups



Quart

A quart is about the amount you get in a large milk container.

1 quart = 2 pints



Gallon

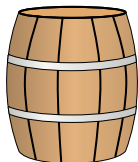
A gallon is the amount that comes in the large plastic container.

1 gallon = 4 quarts



Answers


1)



Water a barrel holds

- A. 20 cups
- B. 10 pints
- C. 3 inches
- D. 50 gallons


2)



Gas tank in a car

- A. 3 quarts
- B. 4 pints
- C. 15 gallons
- D. 16 cups

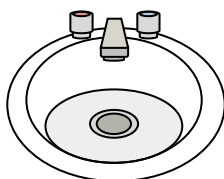
3)



Sand a wheel barrow holds

- A. 8 quarts
- B. 45 gallons
- C. 1000 grams
- D. 4 cups

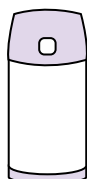
4)



Water in bathroom sink

- A. 2 fluid ounces
- B. 2 gallons
- C. 2 cups
- D. 2 pints

5)



Liquid in a thermos

- A. 1 cup
- B. 1 gallon
- C. 2 pounds
- D. 4 quarts


6)



Liquid a spoon holds

- A. 1 cup
- B. Less than a cup
- C. 1 pint
- D. 1 quart

7)



Liquid in a pitcher

- A. 1 pint
- B. 2 quarts
- C. 2 cups
- D. 8 gallons

8)



Ink in a pen

- A. 1 gallon
- B. 2 pints
- C. less than 1 cup
- D. 1 quart

9)



Soda in a can

- A. 4 cups
- B. 1.5 cups
- C. 4 pints
- D. 1 gallon

- 1. **D**
- 2. **C**
- 3. **B**
- 4. **B**
- 5. **A**
- 6. **B**
- 7. **B**
- 8. **C**
- 9. **B**