



Determine which letter best represents the volume.

Answers

Cup

A cup is about the amount of milk you get from the cafeteria.



Pint

A pint is about the amount you get in a large glass.

1 pint = 2 cups



Quart

A quart is about the amount you get in a large milk container.

1 quart = 2 pints



Gallon

A gallon is the amount that comes in the large plastic container.

1 gallon = 4 quarts



1. _____
2. _____
3. _____
4. _____
5. _____
6. _____
7. _____
8. _____
9. _____

1)



Toothpaste in a tube

- A. 0.5 cups
- B. 0.5 gallons
- C. 5 quarts
- D. 5 grams

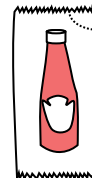
2)



Paint in a can

- A. 0.5 pints
- B. 3 fluid ounces
- C. 1 gallon
- D. 1 cup

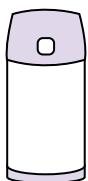
3)



Ketchup in a packet

- A. 2 quarts
- B. less than 1 cup
- C. 1.5 pints
- D. 0.5 gallons

4)



Liquid in a thermos

- A. 1 gallon
- B. 1 cup
- C. 2 pounds
- D. 4 quarts

5)



Shampoo in a bottle

- A. 2 pints
- B. 0.5 gallons
- C. 100 cups
- D. 1 cup

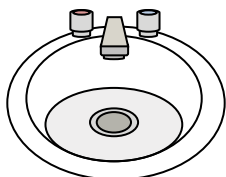
6)



Glue in a bottle

- A. 0.5 cups
- B. 2 quarts
- C. 1 pint
- D. 3 gallons

7)



Water in bathroom sink

- A. 2 gallons
- B. 2 fluid ounces
- C. 2 pints
- D. 2 cups


8)



Liquid in a tea cup

- A. 1 cup
- B. 1 gallon
- C. 1 quart
- D. 1 pint

9)



Sand a wheel barrow holds

- A. 45 gallons
- B. 1000 grams
- C. 4 cups
- D. 8 quarts



Determine which letter best represents the volume.

Cup

A cup is about the amount of milk you get from the cafeteria.



Pint

A pint is about the amount you get in a large glass.

1 pint = 2 cups



Quart

A quart is about the amount you get in a large milk container.

1 quart = 2 pints



Gallon

A gallon is the amount that comes in the large plastic container.

1 gallon = 4 quarts



Answers

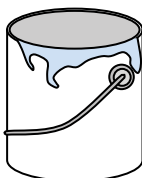
1)



Toothpaste in a tube

- A. 0.5 cups
- B. 0.5 gallons
- C. 5 quarts
- D. 5 grams

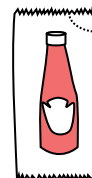
2)



Paint in a can

- A. 0.5 pints
- B. 3 fluid ounces
- C. 1 gallon
- D. 1 cup

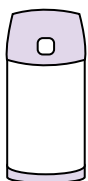
3)



Ketchup in a packet

- A. 2 quarts
- B. less than 1 cup
- C. 1.5 pints
- D. 0.5 gallons

4)



Liquid in a thermos

- A. 1 gallon
- B. 1 cup
- C. 2 pounds
- D. 4 quarts

5)



Shampoo in a bottle

- A. 2 pints
- B. 0.5 gallons
- C. 100 cups
- D. 1 cup

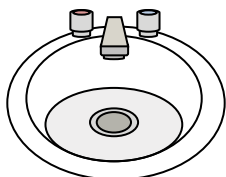
6)



Glue in a bottle

- A. 0.5 cups
- B. 2 quarts
- C. 1 pint
- D. 3 gallons

7)



Water in bathroom sink

- A. 2 gallons
- B. 2 fluid ounces
- C. 2 pints
- D. 2 cups


8)



Liquid in a tea cup

- A. 1 cup
- B. 1 gallon
- C. 1 quart
- D. 1 pint

9)



Sand a wheelbarrow holds

- A. 45 gallons
- B. 1000 grams
- C. 4 cups
- D. 8 quarts

- 1. **A**
- 2. **C**
- 3. **B**
- 4. **B**
- 5. **A**
- 6. **A**
- 7. **A**
- 8. **A**
- 9. **A**