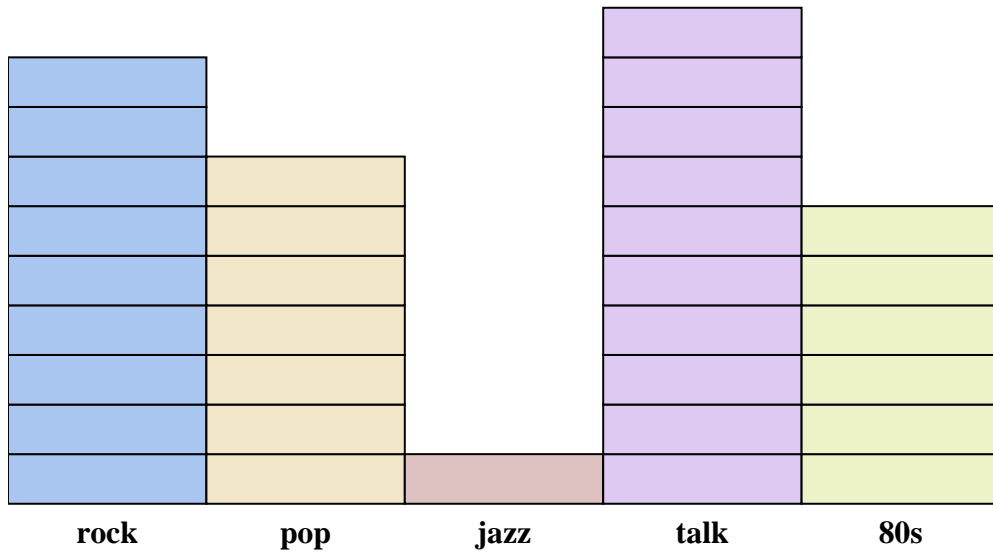
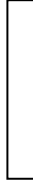




Solve each problem.



Each  = 2 ads played

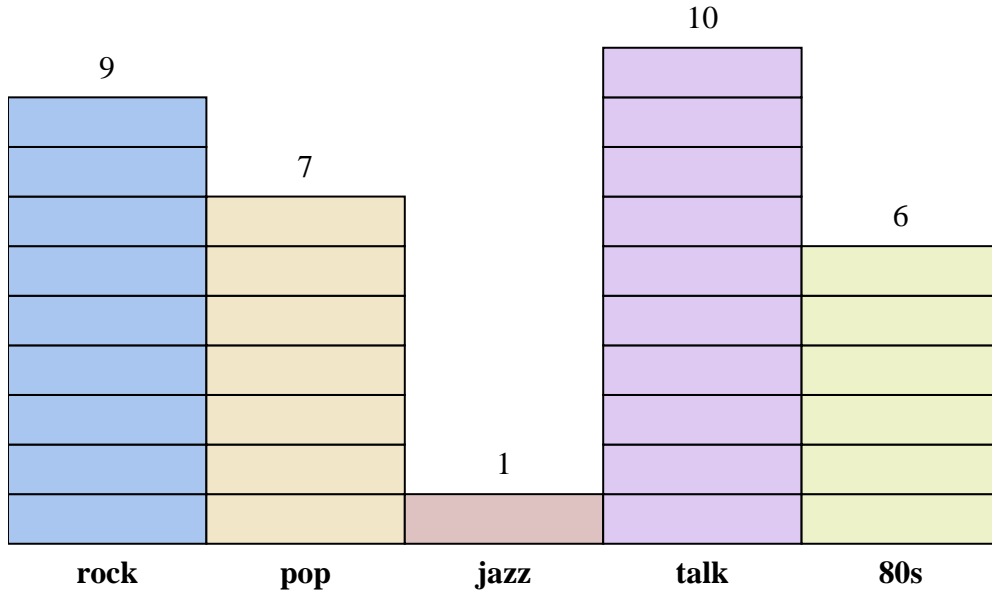
Answers

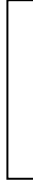
1. _____
2. _____
3. _____
4. _____
5. _____
6. _____
7. _____
8. _____
9. _____
10. _____

- 1) How many more ads did the rock station have than the pop station?
- 2) Which station had the most ads?
- 3) Which station had the fewest ads?
- 4) What is the total number of ads on all the stations?
- 5) Were there fewer ads on the talk station or the jazz station?
- 6) Were there more ads on the jazz station or the rock station?
- 7) Which station had exactly 14 ads?
- 8) How many ads were on the 80s station?
- 9) What is the combined number of ads played on the talk station and the rock station?
- 10) What is the difference in the number of ads played on the 80s station and the number played on the pop station?



Solve each problem.



Each  = 2 ads played

Answers

1. 4
2. talk
3. jazz
4. 66
5. jazz
6. rock
7. pop
8. 12
9. 38
10. 2

- 1) How many more ads did the rock station have than the pop station?
- 2) Which station had the most ads?
- 3) Which station had the fewest ads?
- 4) What is the total number of ads on all the stations?
- 5) Were there fewer ads on the talk station or the jazz station?
- 6) Were there more ads on the jazz station or the rock station?
- 7) Which station had exactly 14 ads?
- 8) How many ads were on the 80s station?
- 9) What is the combined number of ads played on the talk station and the rock station?
- 10) What is the difference in the number of ads played on the 80s station and the number played on the pop station?