

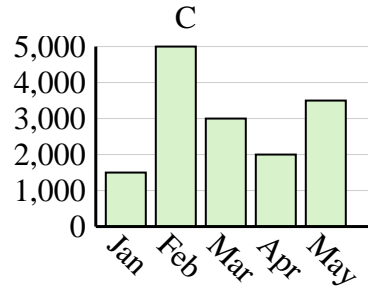
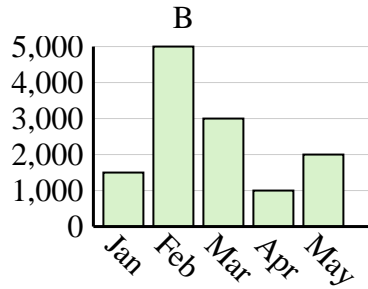
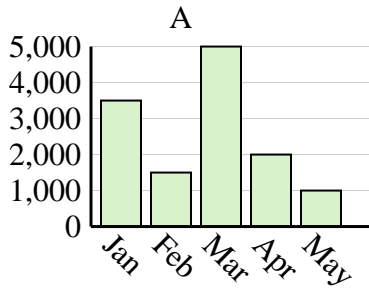


Determine which graph (A, B or C) best represents the information in the table.

Answers

1)

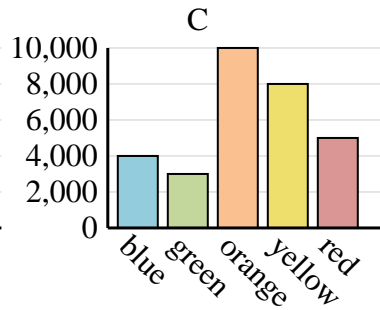
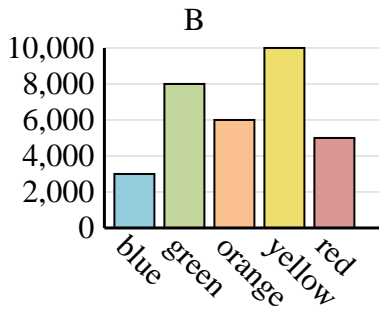
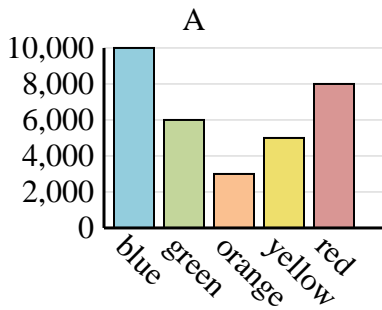
Sales	Jan	Feb	Mar	Apr	May
Month	1,500	5,000	3,000	2,000	3,500



1. _____
2. _____
3. _____
4. _____

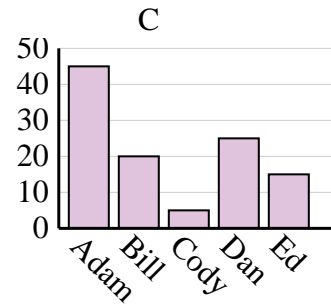
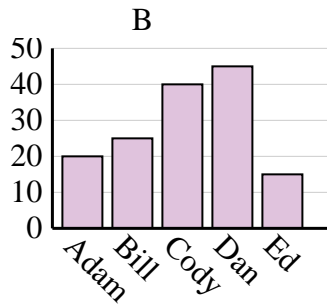
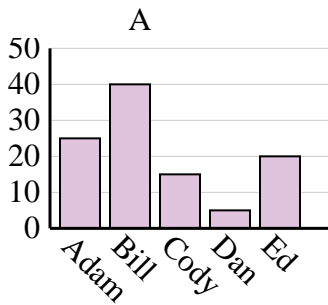
2)

Favorite Color	blue	green	orange	yellow	red
People	10,000	6,000	3,000	5,000	8,000



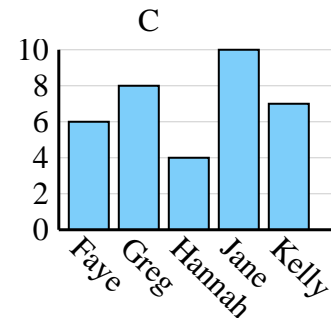
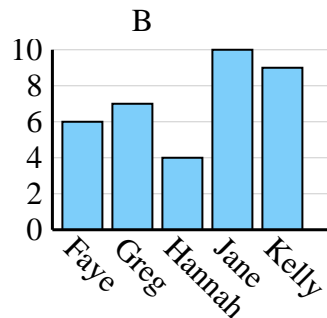
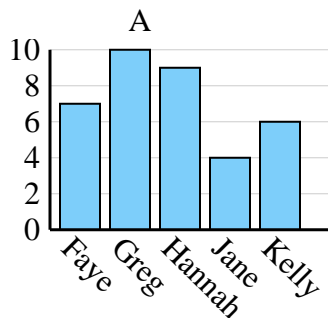
3)

Name	Adam	Bill	Cody	Dan	Ed
Points	25	40	15	5	20



4)

Name	Faye	Greg	Hannah	Jane	Kelly
States Lived In	7	10	9	4	6

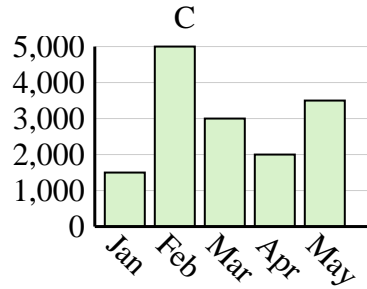
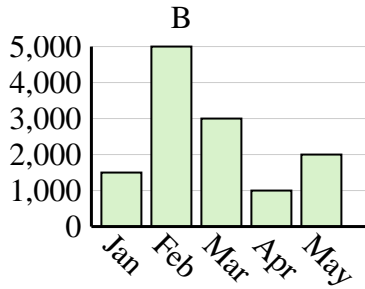
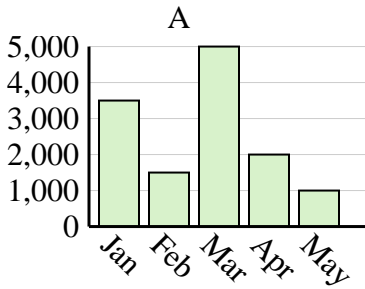




Determine which graph (A, B or C) best represents the information in the table.

Answers

Sales	Jan	Feb	Mar	Apr	May
Month	1,500	5,000	3,000	2,000	3,500



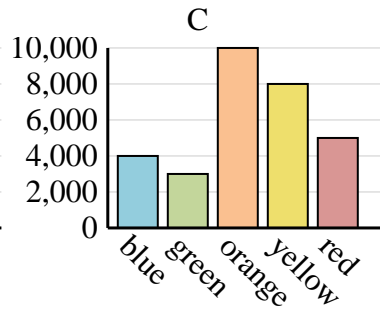
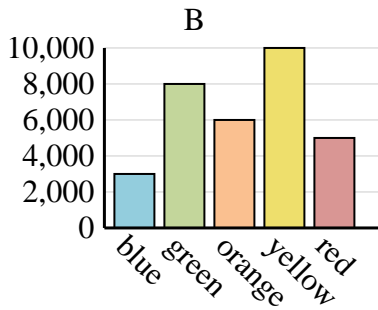
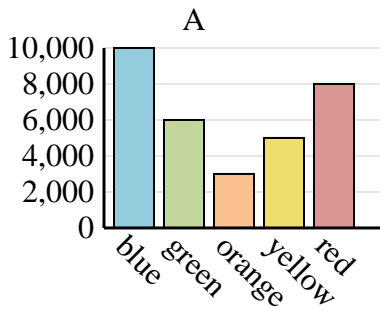
1. **C**

2. **A**

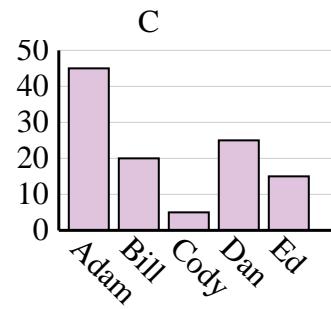
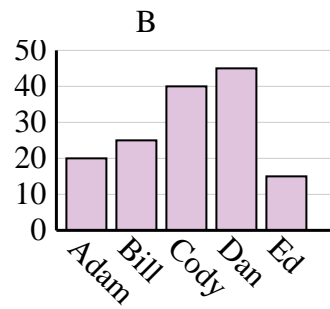
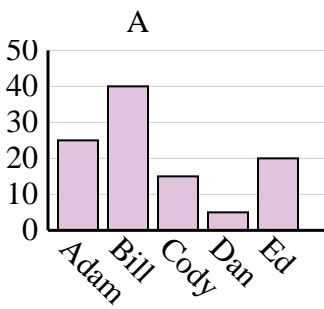
3. **A**

4. **A**

Favorite Color	blue	green	orange	yellow	red
People	10,000	6,000	3,000	5,000	8,000



Name	Adam	Bill	Cody	Dan	Ed
Points	25	40	15	5	20



Name	Faye	Greg	Hannah	Jane	Kelly
States Lived In	7	10	9	4	6

