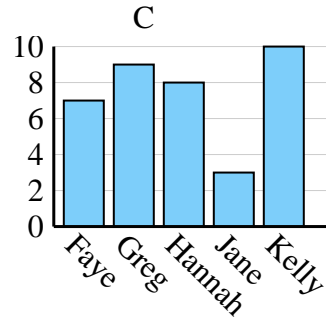
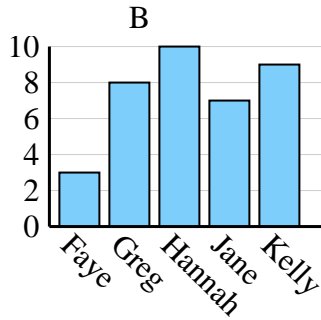
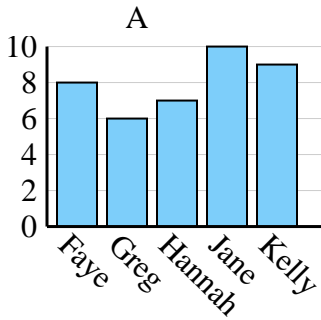




Determine which graph (A, B or C) best represents the information in the table.

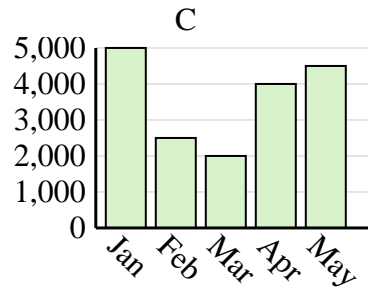
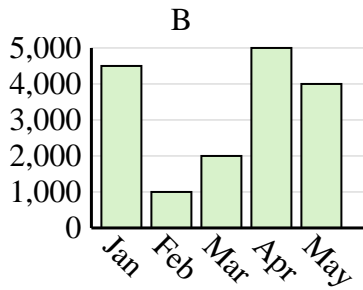
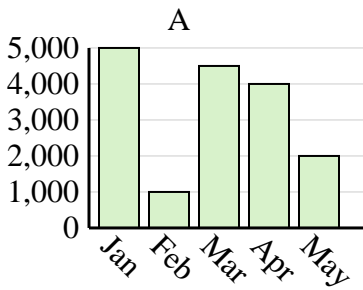
Answers

Name	Faye	Greg	Hannah	Jane	Kelly
States Lived In	7	9	8	3	10

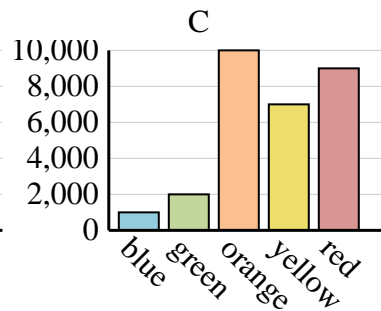
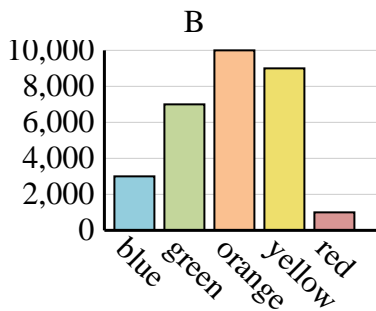
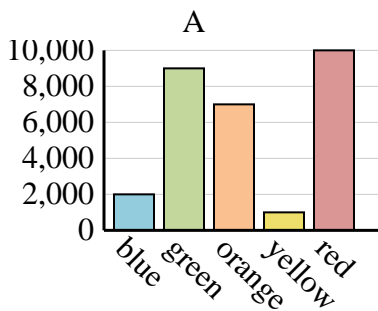


1. _____
2. _____
3. _____
4. _____

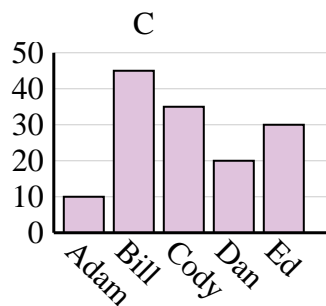
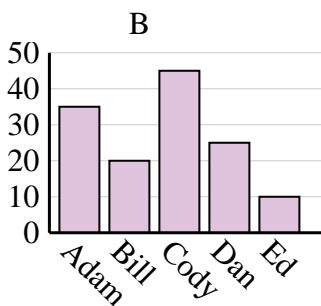
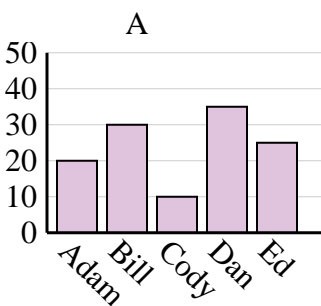
Sales	Jan	Feb	Mar	Apr	May
Month	4,500	1,000	2,000	5,000	4,000



Favorite Color	blue	green	orange	yellow	red
People	3,000	7,000	10,000	9,000	1,000



Name	Adam	Bill	Cody	Dan	Ed
Points	10	45	35	20	30

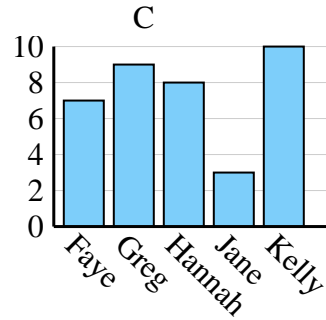
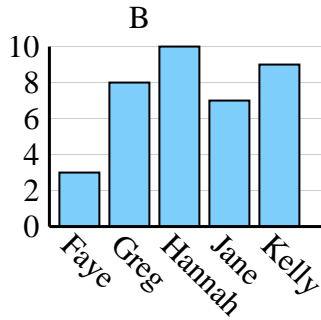
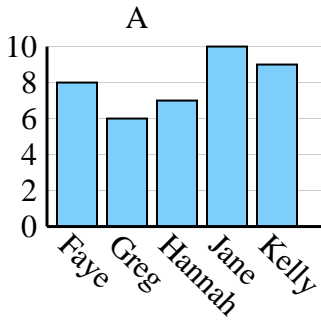




Determine which graph (A, B or C) best represents the information in the table.

Answers

Name	Faye	Greg	Hannah	Jane	Kelly
States Lived In	7	9	8	3	10



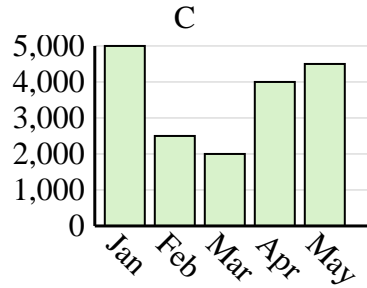
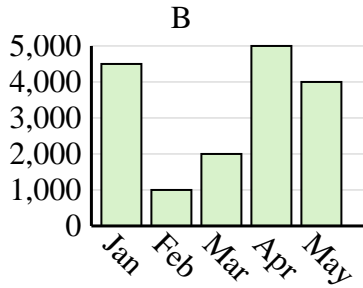
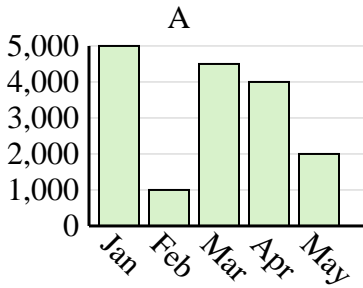
1. **C**

2. **B**

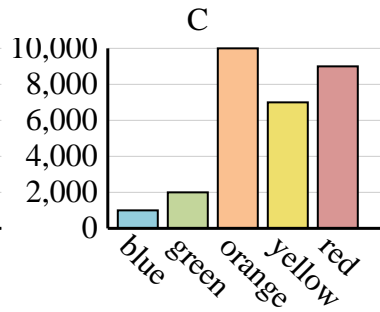
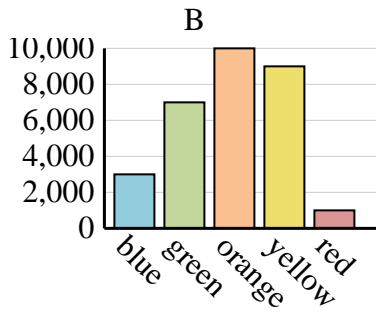
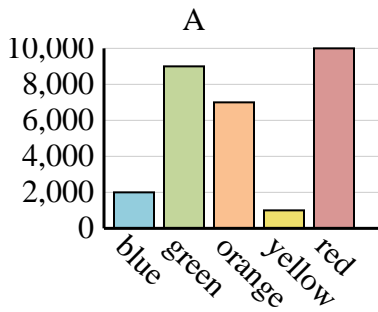
3. **B**

4. **C**

Sales	Jan	Feb	Mar	Apr	May
Month	4,500	1,000	2,000	5,000	4,000



Favorite Color	blue	green	orange	yellow	red
People	3,000	7,000	10,000	9,000	1,000



Name	Adam	Bill	Cody	Dan	Ed
Points	10	45	35	20	30

