

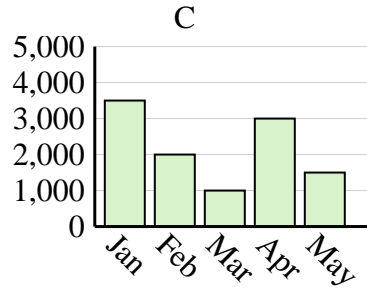
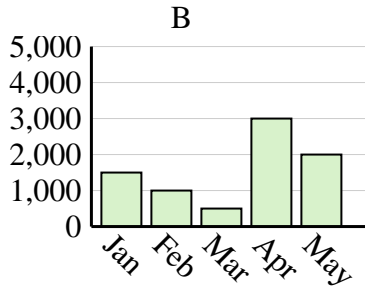
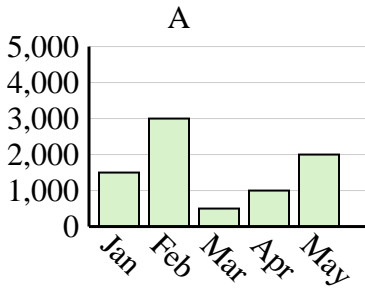


Determine which graph (A, B or C) best represents the information in the table.

Answers

1)

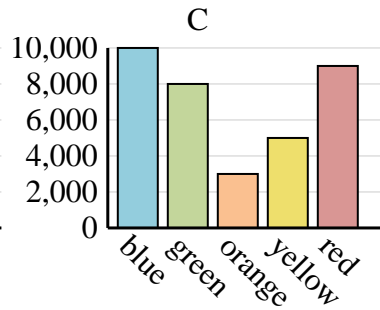
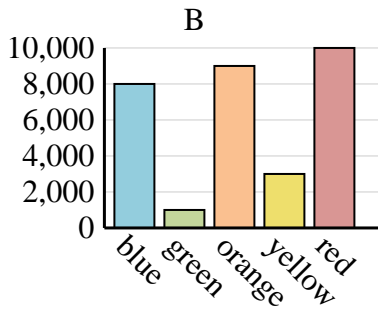
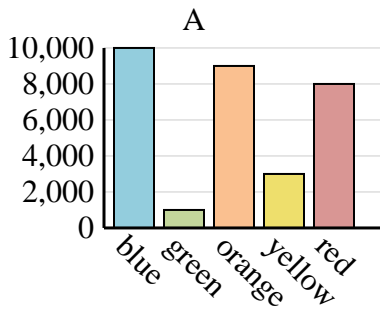
| Sales | Jan | Feb | Mar | Apr | May |
|-------|-------|-------|-------|-------|-------|
| Month | 3,500 | 2,000 | 1,000 | 3,000 | 1,500 |



1. _____
2. _____
3. _____
4. _____

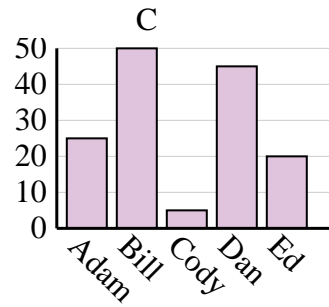
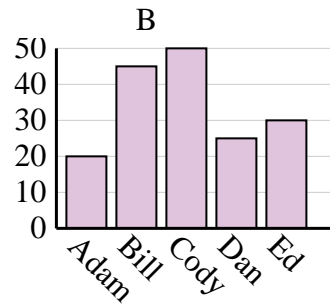
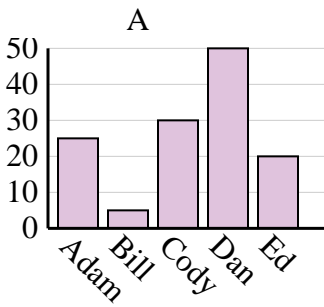
2)

| Favorite Color | blue | green | orange | yellow | red |
|----------------|--------|-------|--------|--------|-------|
| People | 10,000 | 1,000 | 9,000 | 3,000 | 8,000 |



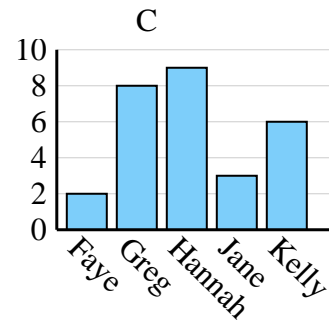
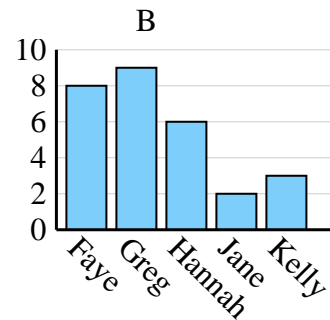
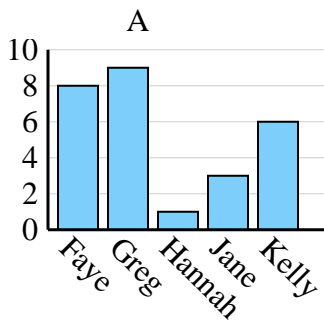
3)

| Name | Adam | Bill | Cody | Dan | Ed |
|--------|------|------|------|-----|----|
| Points | 25 | 5 | 30 | 50 | 20 |



4)

| Name | Faye | Greg | Hannah | Jane | Kelly |
|-----------------|------|------|--------|------|-------|
| States Lived In | 8 | 9 | 1 | 3 | 6 |

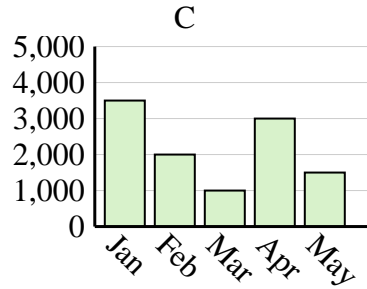
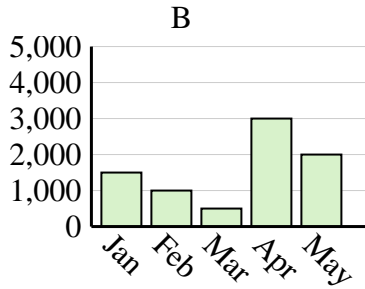
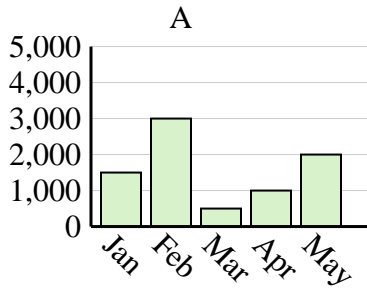




Determine which graph (A, B or C) best represents the information in the table.

Answers

| | | | | | |
|--------------|-------|-------|-------|-------|-------|
| Sales | Jan | Feb | Mar | Apr | May |
| Month | 3,500 | 2,000 | 1,000 | 3,000 | 1,500 |



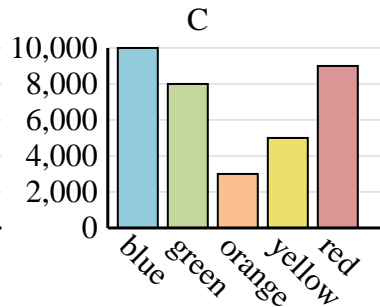
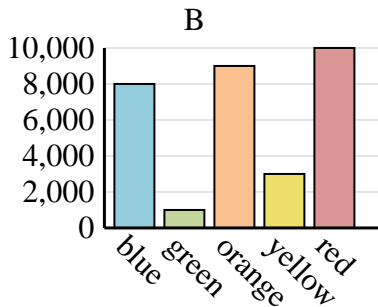
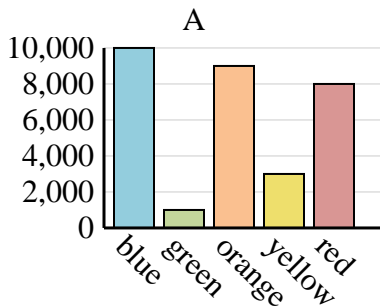
1. **C**

2. **A**

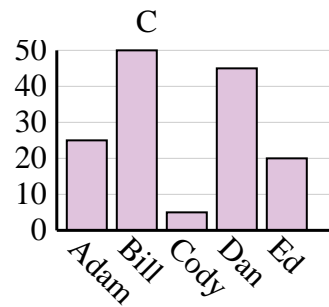
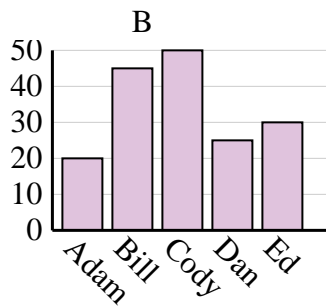
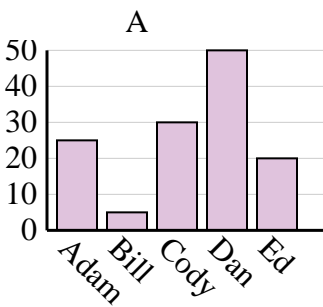
3. **A**

4. **A**

| | | | | | |
|-----------------------|--------|-------|--------|--------|-------|
| Favorite Color | blue | green | orange | yellow | red |
| People | 10,000 | 1,000 | 9,000 | 3,000 | 8,000 |



| | | | | | |
|---------------|------|------|------|-----|----|
| Name | Adam | Bill | Cody | Dan | Ed |
| Points | 25 | 5 | 30 | 50 | 20 |



| | | | | | |
|------------------------|------|------|--------|------|-------|
| Name | Faye | Greg | Hannah | Jane | Kelly |
| States Lived In | 8 | 9 | 1 | 3 | 6 |

