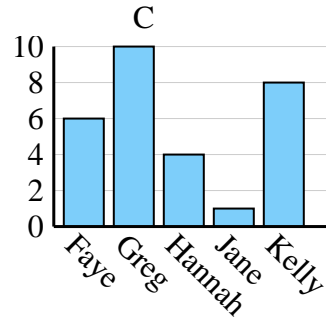
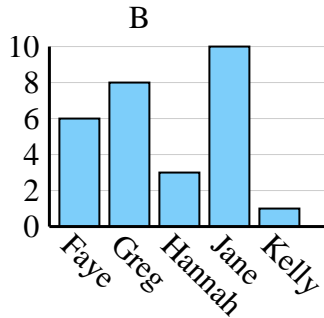
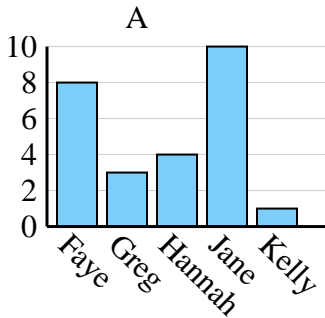




Determine which graph (A, B or C) best represents the information in the table.

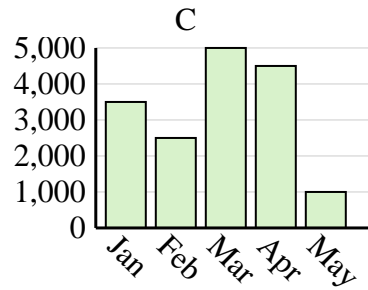
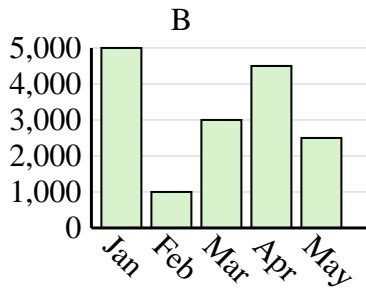
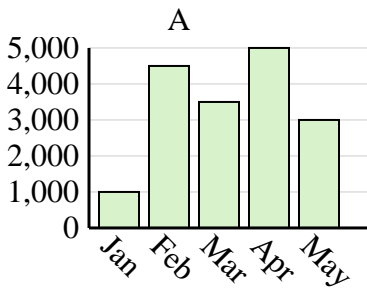
Answers

| | | | | | |
|------------------------|------|------|--------|------|-------|
| Name | Faye | Greg | Hannah | Jane | Kelly |
| States Lived In | 6 | 10 | 4 | 1 | 8 |

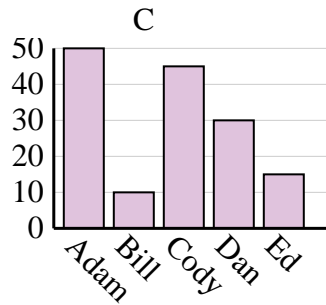
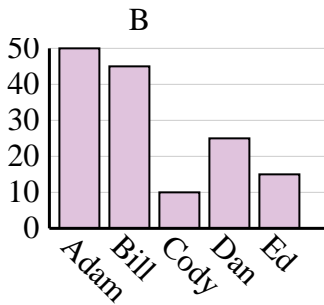
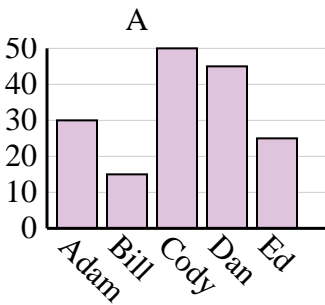


1. _____
2. _____
3. _____
4. _____

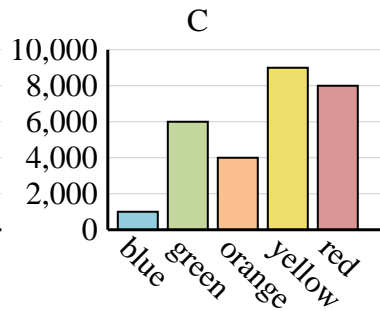
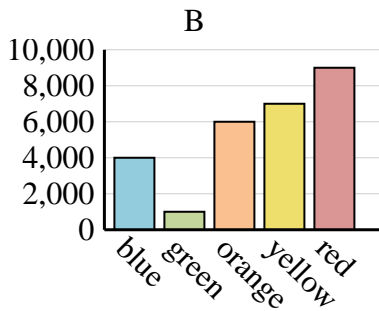
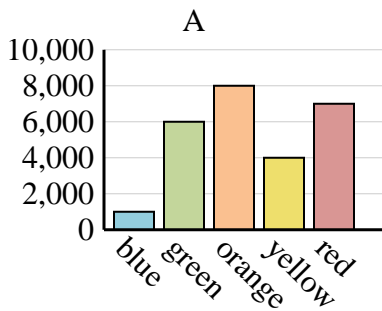
| | | | | | |
|--------------|-------|-------|-------|-------|-------|
| Sales | Jan | Feb | Mar | Apr | May |
| Month | 3,500 | 2,500 | 5,000 | 4,500 | 1,000 |



| | | | | | |
|---------------|------|------|------|-----|----|
| Name | Adam | Bill | Cody | Dan | Ed |
| Points | 30 | 15 | 50 | 45 | 25 |



| | | | | | |
|-----------------------|-------|-------|--------|--------|-------|
| Favorite Color | blue | green | orange | yellow | red |
| People | 4,000 | 1,000 | 6,000 | 7,000 | 9,000 |

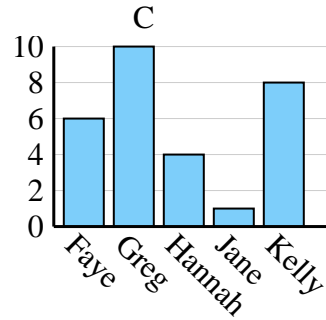
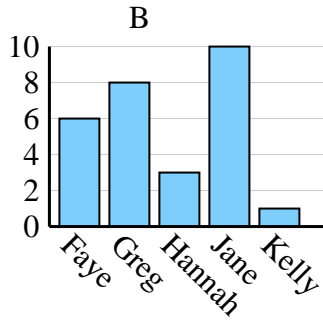
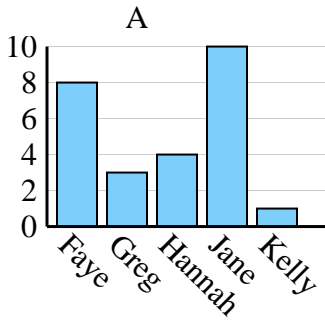




Determine which graph (A, B or C) best represents the information in the table.

Answers

| | | | | | |
|------------------------|------|------|--------|------|-------|
| Name | Faye | Greg | Hannah | Jane | Kelly |
| States Lived In | 6 | 10 | 4 | 1 | 8 |



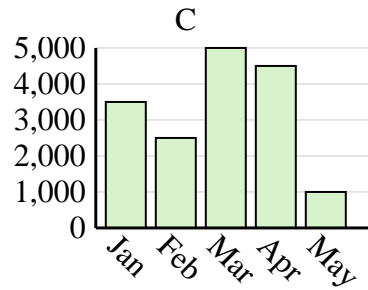
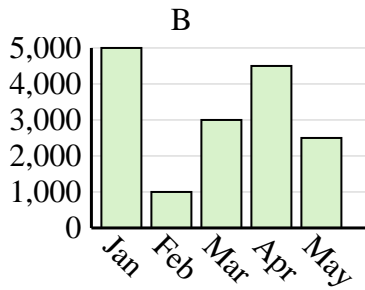
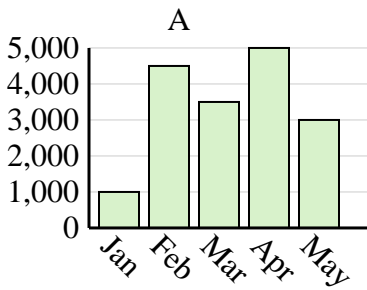
1. **C**

2. **C**

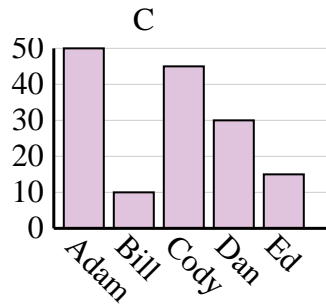
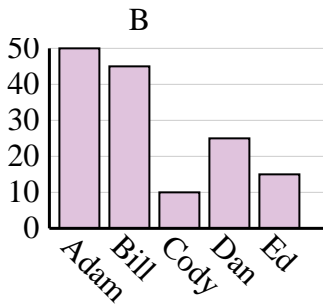
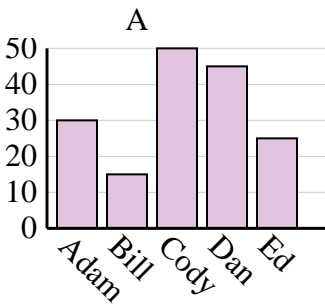
3. **A**

4. **B**

| | | | | | |
|--------------|-------|-------|-------|-------|-------|
| Sales | Jan | Feb | Mar | Apr | May |
| Month | 3,500 | 2,500 | 5,000 | 4,500 | 1,000 |



| | | | | | |
|---------------|------|------|------|-----|----|
| Name | Adam | Bill | Cody | Dan | Ed |
| Points | 30 | 15 | 50 | 45 | 25 |



| | | | | | |
|-----------------------|-------|-------|--------|--------|-------|
| Favorite Color | blue | green | orange | yellow | red |
| People | 4,000 | 1,000 | 6,000 | 7,000 | 9,000 |

