

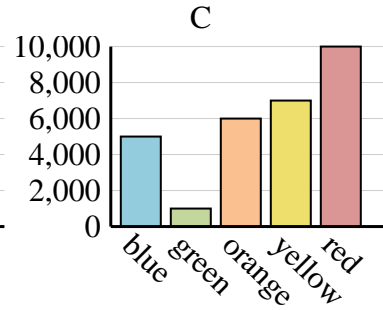
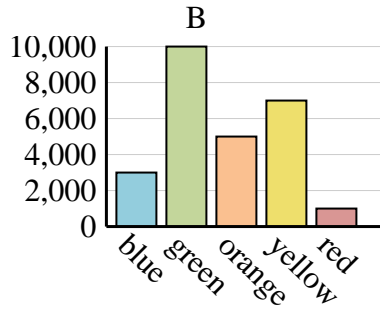
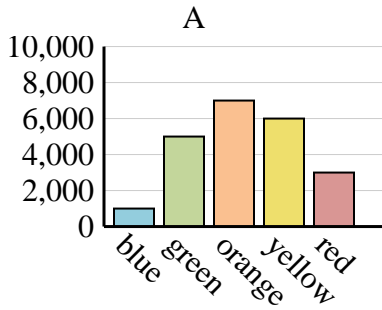


Determine which graph (A, B or C) best represents the information in the table.

Answers

1)

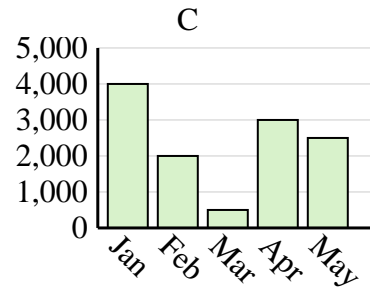
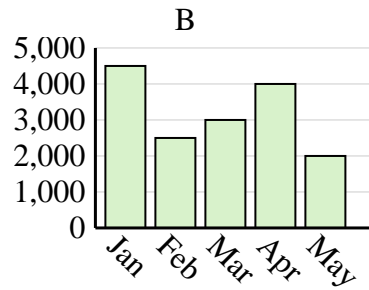
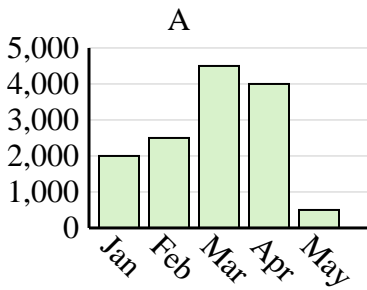
| Favorite Color | blue | green | orange | yellow | red |
|----------------|-------|-------|--------|--------|-------|
| People | 1,000 | 5,000 | 7,000 | 6,000 | 3,000 |



1. _____
2. _____
3. _____
4. _____

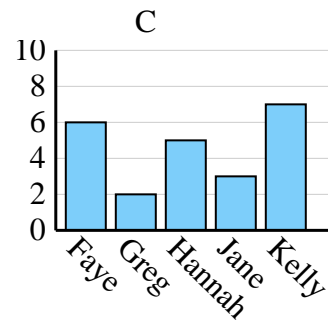
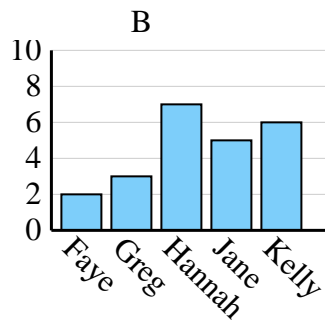
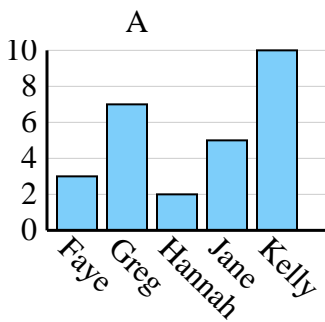
2)

| Sales | Jan | Feb | Mar | Apr | May |
|-------|-------|-------|-------|-------|-----|
| Month | 2,000 | 2,500 | 4,500 | 4,000 | 500 |



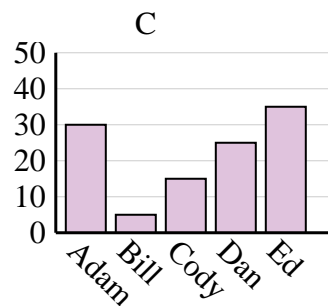
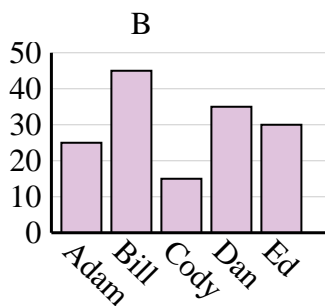
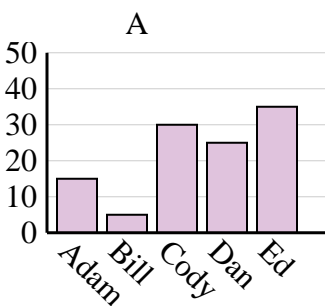
3)

| Name | Faye | Greg | Hannah | Jane | Kelly |
|-----------------|------|------|--------|------|-------|
| States Lived In | 3 | 7 | 2 | 5 | 10 |



4)

| Name | Adam | Bill | Cody | Dan | Ed |
|--------|------|------|------|-----|----|
| Points | 25 | 45 | 15 | 35 | 30 |

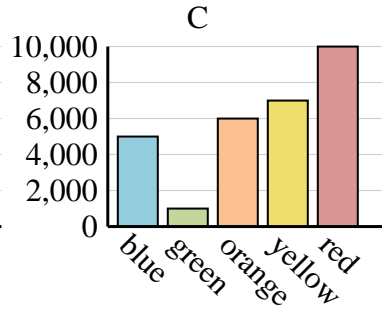
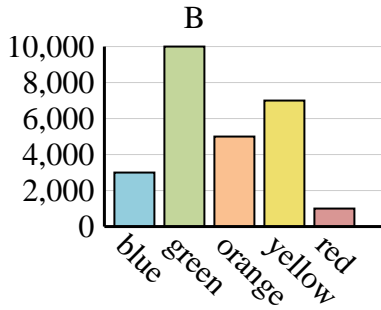
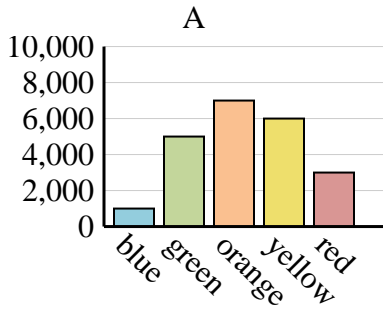




Determine which graph (A, B or C) best represents the information in the table.

Answers

| | | | | | |
|-----------------------|-------|-------|--------|--------|-------|
| Favorite Color | blue | green | orange | yellow | red |
| People | 1,000 | 5,000 | 7,000 | 6,000 | 3,000 |



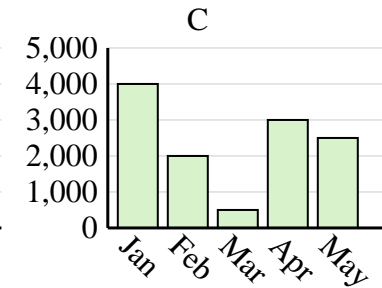
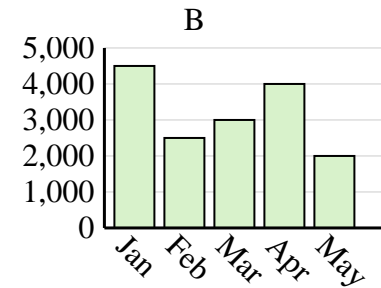
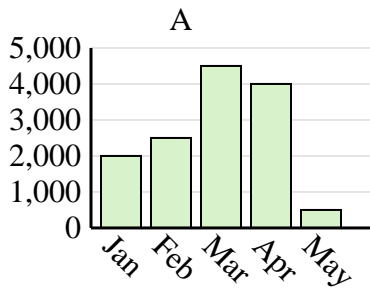
1. **A**

2. **A**

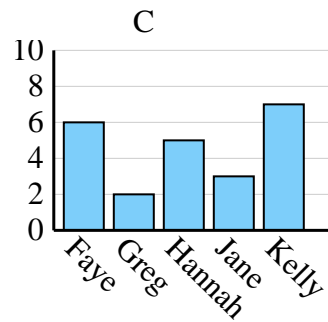
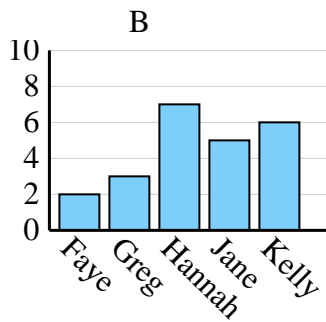
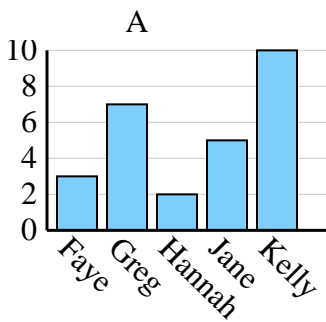
3. **A**

4. **B**

| | | | | | |
|--------------|-------|-------|-------|-------|-----|
| Sales | Jan | Feb | Mar | Apr | May |
| Month | 2,000 | 2,500 | 4,500 | 4,000 | 500 |



| | | | | | |
|------------------------|------|------|--------|------|-------|
| Name | Faye | Greg | Hannah | Jane | Kelly |
| States Lived In | 3 | 7 | 2 | 5 | 10 |



| | | | | | |
|---------------|------|------|------|-----|----|
| Name | Adam | Bill | Cody | Dan | Ed |
| Points | 25 | 45 | 15 | 35 | 30 |

